



रेल भर्ती बोर्ड / RAILWAY RECRUITMENT BOARDS



सी ई एन ०१/२०१९ - एन टी पी सी - CEN 01/2019 - NTPC

Participant ID	
Participant Name	
Test Center Name	
Test Date	28/01/2021
Test Time	3:00 PM - 4:30 PM
Subject	NTPC

*** Note**

Correct Answer will carry 1 mark per Question.
Incorrect Answer will carry 1/3 Negative mark.

- Options shown in green color with a tick icon are correct.
- Chosen option on the right of the question indicates the option selected by the candidate.

Section : NTPC

Q.1 Select the option that is related to the third term in the same way as the second term is related to the first term.

Tea : Leaves :: Coffee : ?

- Ans**
- 1. Beans
 - 2. Powder
 - 3. Seeds
 - 4. Plant

Question ID : 9489114893

Option 1 ID : 94891119569

Option 2 ID : 94891119571

Option 3 ID : 94891119570

Option 4 ID : 94891119572

Status : Answered

Chosen Option : 1



Download RRB Exams PDF E-BOOKS

[CLICK HERE](#)

Q.2 Which number is 30% less than 70?

- Ans
- 1. 43
 - 2. 45
 - 3. 49
 - 4. 47

Question ID : 9489113855
Option 1 ID : 94891115417
Option 2 ID : 94891115418
Option 3 ID : 94891115420
Option 4 ID : 94891115419
Status : Answered
Chosen Option : 3

Q.3 By selling 200 pens, a shopkeeper gains the selling price of 40 pens. Find the gain percentage.

- Ans
- 1. 25%
 - 2. 30%
 - 3. 35%
 - 4. 20%

Question ID : 9489113857
Option 1 ID : 94891115426
Option 2 ID : 94891115425
Option 3 ID : 94891115428
Option 4 ID : 94891115427
Status : Answered
Chosen Option : 1

Q.4 Which of the following statements is NOT correct about mangrove forests?

- Ans
- 1. Mangrove trees grow in areas with oxygen-rich soil.
 - 2. Mangrove forests stabilise the coastline, reducing erosion.
 - 3. They cannot withstand freezing temperatures.
 - 4. Mangroves are salt tolerant herbs.

Question ID : 9489114922
Option 1 ID : 94891119686
Option 2 ID : 94891119688
Option 3 ID : 94891119687
Option 4 ID : 94891119685
Status : Answered
Chosen Option : 1



Q.5 If $x + y = 75$ and $\sin x : \sin y = \frac{1}{\sqrt{2}} : \frac{1}{2}$, then $x : y$ is:

- Ans
- 1. 3 : 1
 - 2. 2 : 3
 - 3. 1 : 3
 - 4. 3 : 2

Question ID : 9489113869
Option 1 ID : 94891115476
Option 2 ID : 94891115475
Option 3 ID : 94891115473
Option 4 ID : 94891115474
Status : Answered
Chosen Option : 4

Q.6 The LCM of $\frac{3}{2}$, $\frac{4}{6}$, $\frac{5}{8}$ and $\frac{6}{10}$ is:

- Ans
- 1. 60
 - 2. 30
 - 3. $\frac{1}{60}$
 - 4. $\frac{1}{30}$

Question ID : 9489113848
Option 1 ID : 94891115390
Option 2 ID : 94891115389
Option 3 ID : 94891115391
Option 4 ID : 94891115392
Status : Answered
Chosen Option : 2

Q.7 When we travel across the countryside, we see red soils in many regions. What is the reason for its colour?

- Ans
- 1. Abundance of ferric oxides
 - 2. Abundance of humus
 - 3. Presence of magnesium
 - 4. Presence of nitrogen

Question ID : 9489114911
Option 1 ID : 94891119642
Option 2 ID : 94891119644
Option 3 ID : 94891119641
Option 4 ID : 94891119643
Status : Answered
Chosen Option : 1



Q.8 Find the value of $7 - [3 - \{7 - (5 - (4 - 3))\}]$

- Ans
- 1. 7
 - 2. 8
 - 3. 9
 - 4. 0

Question ID : 9489113847
Option 1 ID : 94891115385
Option 2 ID : 94891115386
Option 3 ID : 94891115387
Option 4 ID : 94891115388
Status : Answered
Chosen Option : 1

Q.9 A certain number of men can finish a task in 70 days. If 10 more men are added to the existing staff, then the task can be finished in 10 days less. How many men were there originally?

- Ans
- 1. 50
 - 2. 70
 - 3. 60
 - 4. 40

Question ID : 9489113863
Option 1 ID : 94891115450
Option 2 ID : 94891115452
Option 3 ID : 94891115451
Option 4 ID : 94891115449
Status : Answered
Chosen Option : 3

Q.10 What is the least number which when increased by 7 is divisible by 16, 18, 24 and 28?

- Ans
- 1. 1006
 - 2. 1008
 - 3. 1001
 - 4. 9999

Question ID : 9489113852
Option 1 ID : 94891115408
Option 2 ID : 94891115407
Option 3 ID : 94891115405
Option 4 ID : 94891115406
Status : Answered
Chosen Option : 4

Q.11 If the mean of the following data is k , then find the value of k .

Value	3	2	k	4	5
Frequency	k	$2k$	$3k$	$4k$	$5k$

- Ans
- 1. 4
 - 2. 3
 - 3. 2
 - 4. 6

Question ID : 9489113873
 Option 1 ID : 94891115491
 Option 2 ID : 94891115490
 Option 3 ID : 94891115489
 Option 4 ID : 94891115492
 Status : Not Answered
 Chosen Option : --

Q.12 Select the option in which the words share the same relationship as that shared by the given pair of words.

Actor = Theatre

- Ans
- 1. Teacher = Examination
 - 2. Writer = Book
 - 3. Doctor = Medicine
 - 4. Swimmer = Swimming pool

Question ID : 9489114878
 Option 1 ID : 94891119512
 Option 2 ID : 94891119509
 Option 3 ID : 94891119511
 Option 4 ID : 94891119510
 Status : Answered
 Chosen Option : 4

Q.13 There are six students A, B, C, D, E and F in a class. Their height is compared. D is shorter than B but taller than A. B is shorter than C. A is taller than E and F. How many students are shorter than D?

- Ans
- 1. Four
 - 2. Five
 - 3. Three
 - 4. Two

Question ID : 9489114902
 Option 1 ID : 94891119607
 Option 2 ID : 94891119608
 Option 3 ID : 94891119606
 Option 4 ID : 94891119605
 Status : Answered
 Chosen Option : 3

Q.14 What percent of 25 is the number 0.06?

- Ans 1. 0.24%
 2. 0.20%
 3. 0.22%
 4. 0.18%

Question ID : 9489113854
Option 1 ID : 94891115413
Option 2 ID : 94891115415
Option 3 ID : 94891115414
Option 4 ID : 94891115416
Status : Answered
Chosen Option : 1

Q.15 Karachi session of Indian National Congress was held in 1931. It was presided over by:

- Ans 1. Mahatma Gandhi
 2. Jawaharlal Nehru
 3. Dr. BR Ambedkar
 4. Sardar Patel

Question ID : 9489114920
Option 1 ID : 94891119679
Option 2 ID : 94891119677
Option 3 ID : 94891119680
Option 4 ID : 94891119678
Status : Not Answered
Chosen Option : --

Q.16 Which of the following is NOT a navigation satellite system?

- Ans 1. BDS
 2. GAILILEO
 3. MEO
 4. NavIC

Question ID : 9489114932
Option 1 ID : 94891119725
Option 2 ID : 94891119726
Option 3 ID : 94891119728
Option 4 ID : 94891119727
Status : Not Answered
Chosen Option : --



Q.17 Which of the following movements began with the Dandi March?

- Ans 1. Civil Disobedience Movement
 2. Non Co-operation Movement
 3. Quit India Movement
 4. Champaran Movement

Question ID : 9489114921
Option 1 ID : 94891119682
Option 2 ID : 94891119681
Option 3 ID : 94891119683
Option 4 ID : 94891119684
Status : Answered
Chosen Option : 1

Q.18 Which of the following institutions supported Neeranchal National Watershed Project to improve watershed management program?

- Ans 1. World Bank
 2. FAO of the UN
 3. ADB
 4. WHO

Question ID : 9489114940
Option 1 ID : 94891119759
Option 2 ID : 94891119757
Option 3 ID : 94891119760
Option 4 ID : 94891119758
Status : Answered
Chosen Option : 2

Q.19 Which of the following servers convert IP addresses to domain names?

- Ans 1. Cloud Services
 2. Email
 3. P2P
 4. DNS

Question ID : 9489114938
Option 1 ID : 94891119750
Option 2 ID : 94891119749
Option 3 ID : 94891119751
Option 4 ID : 94891119752
Status : Answered
Chosen Option : 4



Q.20 Name the centre in India which is used for launching satellites.

- Ans
- 1. ISTRAC ground station
 - 2. Barren Island
 - 3. Wheeler Island
 - 4. North Eastern Space Applications Centre (NESAC)

Question ID : 9489114931
Option 1 ID : 94891119724
Option 2 ID : 94891119721
Option 3 ID : 94891119722
Option 4 ID : 94891119723
Status : Answered
Chosen Option : 3

Q.21 The State List contains the subjects of local importance. Which of the following falls under the State List?

- Ans
- 1. Taxes on income other than agricultural income
 - 2. Banking and Insurance
 - 3. Corporation tax
 - 4. Public Health and Sanitation

Question ID : 9489114928
Option 1 ID : 94891119712
Option 2 ID : 94891119711
Option 3 ID : 94891119709
Option 4 ID : 94891119710
Status : Answered
Chosen Option : 4

Q.22 Which of the following is NOT listed in UNESCO World Heritage Sites in India?

- Ans
- 1. Agra Fort
 - 2. Sun Temple, Konark
 - 3. Fatehpur Sikri
 - 4. Group of Monuments at Mandu, Madhya Pradesh

Question ID : 9489114908
Option 1 ID : 94891119629
Option 2 ID : 94891119630
Option 3 ID : 94891119631
Option 4 ID : 94891119632
Status : Answered
Chosen Option : 1



Q.23 According to which article of the Constitution of India, it is the fundamental duty of every citizen to protect the natural environment?

- Ans**
- 1. Article 51A
 - 2. Article 52
 - 3. Article 55
 - 4. Article 48A

Question ID : 9489114934
Option 1 ID : 94891119734
Option 2 ID : 94891119735
Option 3 ID : 94891119736
Option 4 ID : 94891119733
Status : Answered
Chosen Option : 4

Q.24 Among the following, which state of India does not recognize Jews as a religious minority?

- Ans**
- 1. Maharashtra
 - 2. Kerala
 - 3. Gujarat
 - 4. West Bengal

Question ID : 9489114927
Option 1 ID : 94891119707
Option 2 ID : 94891119706
Option 3 ID : 94891119705
Option 4 ID : 94891119708
Status : Not Answered
Chosen Option : --

Q.25 If one angle of a parallelogram is 18° less than twice the smallest angle of the same parallelogram, then the largest angle of the parallelogram is:

- Ans**
- 1. 114°
 - 2. 120°
 - 3. 108°
 - 4. 104°

Question ID : 9489113872
Option 1 ID : 94891115486
Option 2 ID : 94891115487
Option 3 ID : 94891115488
Option 4 ID : 94891115485
Status : Answered
Chosen Option : 1



Q.26 Simple interest on a sum of money, at 5% per annum for 2 years, is ₹50. The compound interest on the same sum for the same period at the same interest rate is:

- Ans**
- 1. ₹51.40
 - 2. ₹51.25
 - 3. ₹51.35
 - 4. ₹51.30

Question ID : 9489113860
Option 1 ID : 94891115440
Option 2 ID : 94891115437
Option 3 ID : 94891115439
Option 4 ID : 94891115438
Status : Answered
Chosen Option : 2

Q.27 Which of the following does NOT impact a computer's general performance?

- Ans**
- 1. Size of the Graphics Card
 - 2. CPU Speed
 - 3. RAM Size
 - 4. Hard Disc Speed

Question ID : 9489114937
Option 1 ID : 94891119748
Option 2 ID : 94891119746
Option 3 ID : 94891119747
Option 4 ID : 94891119745
Status : Answered
Chosen Option : 1

Q.28 Which of the following statements is NOT correct about Raja Ram Mohan Roy?

- Ans**
- 1. He wrote a book 'A gift to monotheists'.
 - 2. He believed in social equality of all human beings.
 - 3. He is considered as the pioneer of modern Indian Renaissance.
 - 4. He founded Arya Samaj.

Question ID : 9489114918
Option 1 ID : 94891119671
Option 2 ID : 94891119672
Option 3 ID : 94891119669
Option 4 ID : 94891119670
Status : Answered
Chosen Option : 4



Q.29 A sum of ₹800 is invested for 3 years at simple interest rate. The rates of interest for the 3 years are 6%, 8% and 10% per annum. Find the total amount of interest earned at the end of 3 years.

- Ans**
- 1. ₹185
 - 2. ₹195
 - 3. ₹188
 - 4. ₹192

Question ID : 9489113859
Option 1 ID : 94891115433
Option 2 ID : 94891115436
Option 3 ID : 94891115434
Option 4 ID : 94891115435
Status : Answered
Chosen Option : 4

Q.30 The length and breadth of a square are increased by 30% and 20% respectively. The area of the resulting rectangle exceeds the area of the square by:

- Ans**
- 1. 25%
 - 2. 40%
 - 3. 56%
 - 4. 50%

Question ID : 9489113867
Option 1 ID : 94891115468
Option 2 ID : 94891115465
Option 3 ID : 94891115467
Option 4 ID : 94891115466
Status : Answered
Chosen Option : 3

Q.31 Which of the following is considered as the first Vernacular newspaper of India?

- Ans**
- 1. Samachar Darpan
 - 2. Amar Ujala
 - 3. Bengal Gazette
 - 4. Madras Courier

Question ID : 9489114917
Option 1 ID : 94891119667
Option 2 ID : 94891119668
Option 3 ID : 94891119665
Option 4 ID : 94891119666
Status : Answered
Chosen Option : 3



Q.32 Which of the following statements is CORRECT about El Nino?

Ans 1.

It is unusual warming of surface waters in the Pacific Ocean

2. India is not affected by El Nino.

3. It originates from the Mediterranean Sea.

4.

It is unusual cooling of surface waters in the Pacific Ocean.

Question ID : 9489114926

Option 1 ID : 94891119702

Option 2 ID : 94891119701

Option 3 ID : 94891119704

Option 4 ID : 94891119703

Status : Answered

Chosen Option : 1

Q.33 The UN system is based on six principal organs. Which of the following organs does NOT come under it?

Ans 1. The UN Secretariat

2. Food and Agriculture Organization of the United Nations

3. The Economic and Social Council

4. The International Court of Justice

Question ID : 9489114935

Option 1 ID : 94891119740

Option 2 ID : 94891119739

Option 3 ID : 94891119737

Option 4 ID : 94891119738

Status : Answered

Chosen Option : 2

Q.34 Name the gas which is filled in wick-type lighters.

Ans 1. Butane

2. Nitrogen

3. Methane

4. Helium

Question ID : 9489114912

Option 1 ID : 94891119646

Option 2 ID : 94891119645

Option 3 ID : 94891119647

Option 4 ID : 94891119648

Status : Not Answered

Chosen Option : --



Download RRB Exams PDF E-BOOKS

[CLICK HERE](#)

Q.35 At a firing range, three shooters are firing at their respective targets. The first, the second and the third shooter hit their target once every 4 seconds, 5 seconds, and 6 seconds, respectively. If all of them hit their targets together at 10:00 am, then at what time will they hit their targets together again?

- Ans**
- 1. 10 : 04 am
 - 2. 10 : 02 am
 - 3. 10 : 03 am
 - 4. 10 : 01 am

Question ID : 9489113853
Option 1 ID : 94891115412
Option 2 ID : 94891115410
Option 3 ID : 94891115411
Option 4 ID : 94891115409
Status : Answered
Chosen Option : 4

Q.36 When the price of a gun was increased by 25%, the number of guns sold decreased by 15%. What was the effect on the sales?

- Ans**
- 1. 6.25% increase
 - 2. 3.75% decrease
 - 3. 10 % increase
 - 4. 5.5% decrease

Question ID : 9489113858
Option 1 ID : 94891115432
Option 2 ID : 94891115431
Option 3 ID : 94891115430
Option 4 ID : 94891115429
Status : Answered
Chosen Option : 1

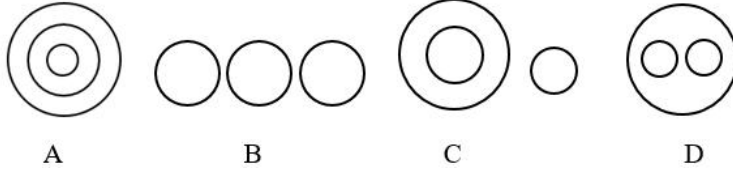
Q.37 X and Y together can finish a task in 20 days. Y alone can finish the same task in 25 days. In how many days can X alone finish the task?

- Ans**
- 1. 50
 - 2. 125
 - 3. 100
 - 4. 75

Question ID : 9489113861
Option 1 ID : 94891115441
Option 2 ID : 94891115444
Option 3 ID : 94891115443
Option 4 ID : 94891115442
Status : Answered
Chosen Option : 3

Q.38 Select the Venn diagram that best represents the relationship between the following classes.

Raipur, Chhattisgarh, Bihar



- Ans
- 1. D
 - 2. B
 - 3. C
 - 4. A

Question ID : 9489114896

Option 1 ID : 94891119584

Option 2 ID : 94891119582

Option 3 ID : 94891119583

Option 4 ID : 94891119581

Status : Answered

Chosen Option : 3

Q.39 Indian classical dance form Kuchipudi developed in the state of _____.

- Ans
- 1. Odisha
 - 2. Andhra Pradesh
 - 3. Karnataka
 - 4. Kerala

Question ID : 9489114910

Option 1 ID : 94891119637

Option 2 ID : 94891119640

Option 3 ID : 94891119639

Option 4 ID : 94891119638

Status : Answered

Chosen Option : 2

Q.40 What is the name of the Company which is responsible for Bhopal tragedy in 1984 that happened due to accidental leakage of Methyl Isocyanate?

- Ans
- 1. Union Carbide
 - 2. Central Board of Petrochemicals
 - 3. National Polymer
 - 4. Bhopal Hydrocarbons

Question ID : 9489114942

Option 1 ID : 94891119767

Option 2 ID : 94891119765

Option 3 ID : 94891119768

Option 4 ID : 94891119766

Status : Answered

Chosen Option : 2



Download RRB Exams PDF E-BOOKS

[CLICK HERE](#)

Q.41 Select the option in which the words share the same relationship as that shared by the given pair of words.

Memory = RAM

- Ans
- 1. Keyboard = Alphabets
 - 2. Hard Disk = USB
 - 3. CPU = Monitor
 - 4. Printer = LaserJet

Question ID : 9489114877

Option 1 ID : 94891119506

Option 2 ID : 94891119507

Option 3 ID : 94891119505

Option 4 ID : 94891119508

Status : Answered

Chosen Option : 1

Q.42 If Apple = Brspj, and Mango = Ncqkt, then Grapes will be equal to:

- Ans
- 1. Hscsjy
 - 2. Hytchk
 - 3. Htdtjy
 - 4. Gsbqdu

Question ID : 9489114876

Option 1 ID : 94891119503

Option 2 ID : 94891119501

Option 3 ID : 94891119504

Option 4 ID : 94891119502

Status : Answered

Chosen Option : 3

Q.43 Which of the following statements is NOT correct about the Pacific ring of Fire?

Ans 1.

75% of Earth's volcanoes are located along the Ring of Fire.

2.

The Pacific Rim covers the eastern shores of North America and South America.

3. It is a belt of active volcanoes.

4. Its length is approximately 40,000 km.

Question ID : 9489114923

Option 1 ID : 94891119692

Option 2 ID : 94891119690

Option 3 ID : 94891119689

Option 4 ID : 94891119691

Status : Answered

Chosen Option : 2



Download RRB Exams PDF E-BOOKS

[CLICK HERE](#)

Q.44 Chlorophyll contains which of the following elements?

- Ans 1. Magnesium
 2. Calcium
 3. Aluminium
 4. Iron

Question ID : 9489114915
Option 1 ID : 94891119658
Option 2 ID : 94891119657
Option 3 ID : 94891119660
Option 4 ID : 94891119659
Status : Answered
Chosen Option : 1

Q.45 If $x^4 + \frac{1}{x^4} = 322$ and $x > 1$, then what is the value of $x^3 - \frac{1}{x^3}$?

- Ans 1. 72
 2. 78
 3. 76
 4. 74

Question ID : 9489113866
Option 1 ID : 94891115461
Option 2 ID : 94891115464
Option 3 ID : 94891115463
Option 4 ID : 94891115462
Status : Answered
Chosen Option : 3

Q.46 Identify the number from the given options that does NOT belong to the following series.

3, 7, 17, 31, 59

- Ans 1. 59
 2. 7
 3. 17
 4. 31

Question ID : 9489114887
Option 1 ID : 94891119547
Option 2 ID : 94891119545
Option 3 ID : 94891119546
Option 4 ID : 94891119548
Status : Not Answered
Chosen Option : --



Q.47 If the total surface area of a cube is 864 m^2 , then its volume is:

- Ans
- 1. 1728 m^3
 - 2. 1727 m^3
 - 3. 1726 m^3
 - 4. 1729 m^3

Question ID : 9489113864
Option 1 ID : 94891115455
Option 2 ID : 94891115454
Option 3 ID : 94891115453
Option 4 ID : 94891115456
Status : Answered
Chosen Option : 1

Q.48 Five friends A, B, C, D and E work as a doctor, lawyer, Businessman, Engineer and Cook and live in Delhi, Mumbai, Goa, Panji and Punjab (not necessarily in the same order). The profession of no two friends is same and no two friends live at the same place. A works as a Cook but does not live in Goa and Panji. B and D live in Delhi and Mumbai respectively. C works as a lawyer. Doctor lives in Goa.

Which of the following combination is definitely TRUE?

- Ans
- 1. B – Delhi – Businessman
 - 2. D – Mumbai - Engineer
 - 3. A – Panji – Cook
 - 4. C – Panji – lawyer

Question ID : 9489114903
Option 1 ID : 94891119609
Option 2 ID : 94891119610
Option 3 ID : 94891119611
Option 4 ID : 94891119612
Status : Answered
Chosen Option : 4

Q.49 Find the sum of the face values of 8 and 5 in the number 817354.

- Ans
- 1. 17
 - 2. 800050
 - 3. 13
 - 4. 40

Question ID : 9489113845
Option 1 ID : 94891115380
Option 2 ID : 94891115379
Option 3 ID : 94891115378
Option 4 ID : 94891115377
Status : Answered
Chosen Option : 3



Q.50 Read the given statements and conclusions carefully and decide which of the conclusions logically follow(s) from the statements.

Statements:

1. All mouses are keyboards.
2. Some keyboards are keyless.

Conclusions:

1. Some keyless are mouses.
2. All keyless are keyboards.

- Ans**
- 1. Both conclusions 1 and 2 follow
 - 2. Only conclusion 2 follows
 - 3. Neither conclusion 1 or 2 follows
 - 4. Only conclusion 1 follows

Question ID : 9489114875

Option 1 ID : 94891119500

Option 2 ID : 94891119498

Option 3 ID : 94891119499

Option 4 ID : 94891119497

Status : Answered

Chosen Option : 3

Q.51 $\cos^2 31 + \cos^2 59$ is equal to:

- Ans**
- 1. $2\sin^2 31$
 - 2. 0
 - 3. 1
 - 4. $2\cos^2 31$

Question ID : 9489113871

Option 1 ID : 94891115482

Option 2 ID : 94891115484

Option 3 ID : 94891115483

Option 4 ID : 94891115481

Status : Answered

Chosen Option : 3



Download RRB Exams PDF E-BOOKS

[CLICK HERE](#)

Q.52 The supplement of 70° is:

- Ans
- 1. 120°
 - 2. 250°
 - 3. 100°
 - 4. 110°

Question ID : 9489113868
Option 1 ID : 94891115471
Option 2 ID : 94891115472
Option 3 ID : 94891115469
Option 4 ID : 94891115470
Status : Answered
Chosen Option : 4

Q.53 As of November 2020, which country has topped the FIFA World Football Rankings 2020?

- Ans
- 1. Belgium
 - 2. France
 - 3. Germany
 - 4. Brazil

Question ID : 9489114904
Option 1 ID : 94891119615
Option 2 ID : 94891119616
Option 3 ID : 94891119613
Option 4 ID : 94891119614
Status : Answered
Chosen Option : 1

Q.54 Who is the author of the book titled "Dreams from My Father"?

- Ans
- 1. Donald Trump
 - 2. Barack Obama
 - 3. Nelson Mandela
 - 4. Tony Blair

Question ID : 9489114909
Option 1 ID : 94891119633
Option 2 ID : 94891119636
Option 3 ID : 94891119635
Option 4 ID : 94891119634
Status : Not Answered
Chosen Option : --



Q.55 Nalanda University is widely recognised as one of the ancient world's great universities and an important Buddhist centre of academic excellence.

Which Indian ruler founded it?

- Ans**
- 1. Chandragupta Maurya
 - 2. Ashok
 - 3. Harshavardhan
 - 4. Kumaragupta I

Question ID : 9489114919
Option 1 ID : 94891119673
Option 2 ID : 94891119675
Option 3 ID : 94891119676
Option 4 ID : 94891119674
Status : Answered
Chosen Option : 4

Q.56 Find the face value of 7 in 765419.

- Ans**
- 1. 7×10^4
 - 2. 7
 - 3. 7×10^6
 - 4. 7×10^5

Question ID : 9489113846
Option 1 ID : 94891115382
Option 2 ID : 94891115383
Option 3 ID : 94891115384
Option 4 ID : 94891115381
Status : Answered
Chosen Option : 2

Q.57 In HTTP, P stands for:

- Ans**
- 1. Protocol
 - 2. Policy
 - 3. Pattern
 - 4. Program

Question ID : 9489114936
Option 1 ID : 94891119742
Option 2 ID : 94891119743
Option 3 ID : 94891119744
Option 4 ID : 94891119741
Status : Answered
Chosen Option : 1



Q.58 Which of the following statements is NOT correct about antibiotics?

Ans 1.

Side effects of antibiotics can include smallpox, filaria and diphtheria.

- 2. Antibiotics are not effective against cold and flu.
- 3. Antibiotics are not effective against viruses.
- 4. Antibiotics are effective against bacterial diseases.

Question ID : 9489114913

Option 1 ID : 94891119651

Option 2 ID : 94891119649

Option 3 ID : 94891119650

Option 4 ID : 94891119652

Status : Answered

Chosen Option : 1

Q.59 If ORANGE is coded as QOCKIB, how will FELLOW be coded as?

Ans 1. HBINTQ

2. HBNIQT

3. HNIBTQ

4. HNBIQT

Question ID : 9489114880

Option 1 ID : 94891119517

Option 2 ID : 94891119518

Option 3 ID : 94891119520

Option 4 ID : 94891119519

Status : Answered

Chosen Option : 2

Q.60 Which option will replace the question mark in the below series?

A25 : Y1 :: L14 : ?

Ans 1. H13

2. 13H

3. N12

4. M12

Question ID : 9489114895

Option 1 ID : 94891119577

Option 2 ID : 94891119578

Option 3 ID : 94891119579

Option 4 ID : 94891119580

Status : Answered

Chosen Option : 3



Download RRB Exams PDF E-BOOKS

[CLICK HERE](#)

Q.61 Non-clotting of blood occurs because of the deficiency of:

- Ans
- 1. Vitamin D
 - 2. Vitamin A
 - 3. Vitamin K
 - 4. Vitamin B

Question ID : 9489114914
Option 1 ID : 94891119655
Option 2 ID : 94891119653
Option 3 ID : 94891119656
Option 4 ID : 94891119654
Status : Answered
Chosen Option : 3

Q.62 As per DPIIT, which of the following sectors of Indian economy received the highest inflows of foreign direct investment (FDI) in 2019-2020?

- Ans
- 1. Construction Sector
 - 2. Computer Services
 - 3. Financial Services
 - 4. Service Sector

Question ID : 9489114941
Option 1 ID : 94891119763
Option 2 ID : 94891119762
Option 3 ID : 94891119761
Option 4 ID : 94891119764
Status : Not Answered
Chosen Option : --

Q.63 Name the country which is NOT a member of The South Asian Free Trade Area (SAFTA).

- Ans
- 1. Pakistan
 - 2. Maldives
 - 3. Singapore
 - 4. Afghanistan

Question ID : 9489114939
Option 1 ID : 94891119754
Option 2 ID : 94891119756
Option 3 ID : 94891119755
Option 4 ID : 94891119753
Status : Answered
Chosen Option : 1



Q.64 নিচের কোন জোড়াটি সঠিক নয়?

- Ans
- 1. টাইফয়েড : ব্যাকটেরিয়া
 - 2. ম্যালেরিয়া : প্রোটোজোয়া
 - 3. টিটেনাস : ব্যাকটেরিয়া
 - 4. হাম : ব্যাকটেরিয়া

Question ID : 9489114916
Option 1 ID : 94891119664
Option 2 ID : 94891119661
Option 3 ID : 94891119662
Option 4 ID : 94891119663
Status : Answered
Chosen Option : 3

Q.65 Which of the following statements is NOT correct about Nilgiri Hills?

- Ans
- 1. Doddabetta is the highest peak of these hills.
 - 2. It is located in Western Ghats of India.
 - 3. It is a mountainous region of Karnataka.
 - 4. Tea and Coffee are grown extensively on these hills.

Question ID : 9489114924
Option 1 ID : 94891119695
Option 2 ID : 94891119693
Option 3 ID : 94891119694
Option 4 ID : 94891119696
Status : Answered
Chosen Option : 3

Q.66 Seven friends S1, S2, S3, S4, S5, S6 and S7 are sitting in a row facing towards north (not necessarily in the same order). S4 does not sit at any of the extreme ends. Only three friends sit between S5 and S7. Only two friends sit between S3 and S5. Both S5 and S7 do not sit at any of the extreme ends. S2 sits in the middle of the row. Who are the neighbours of S2?

- Ans
- 1. S7 and S3
 - 2. S1 and S3
 - 3. S4 and S5
 - 4. S4 and S3

Question ID : 9489114900
Option 1 ID : 94891119599
Option 2 ID : 94891119600
Option 3 ID : 94891119597
Option 4 ID : 94891119598
Status : Answered
Chosen Option : 4



Q.67 The sum of the first six prime numbers is:

- Ans
- 1. 28
 - 2. 26
 - 3. 41
 - 4. 29

Question ID : 9489113844
Option 1 ID : 94891115376
Option 2 ID : 94891115373
Option 3 ID : 94891115374
Option 4 ID : 94891115375
Status : Answered
Chosen Option : 1

Q.68 Which of the following statements is NOT correct about Ayushman Bharat Scheme (ABS)?

- Ans
- 1. The scheme will have a defined benefit cover of ₹5 lakh per family per year.
 - 2. Senior Citizen Health Insurance Scheme (SCHIS) is not covered under the scheme.
 - 3. Ayushman Bharat is a National Health Protection Scheme.
 - 4. Rashtriya Swasthya Bima Yojana (RSBY) has been subsumed under Ayushman Bharat Scheme (ABS).

Question ID : 9489114943
Option 1 ID : 94891119772
Option 2 ID : 94891119770
Option 3 ID : 94891119771
Option 4 ID : 94891119769
Status : Answered
Chosen Option : 1

Q.69 Finland was ranked the happiest country in the world, as of March 2020. World Happiness Report is published annually by:

- Ans
- 1. Institute for Economics and Peace (IEP)
 - 2. World Bank
 - 3. United Nations Sustainable Development Solutions Network (UNSDSN)
 - 4. World Economic Forum (WEF)

Question ID : 9489114933
Option 1 ID : 94891119730
Option 2 ID : 94891119732
Option 3 ID : 94891119731
Option 4 ID : 94891119729
Status : Answered
Chosen Option : 3



Download RRB Exams PDF E-BOOKS

[CLICK HERE](#)

Q.70 Five bells begin to toll together and toll at intervals of 4, 6, 7, 8 and 12 seconds, respectively. After how many seconds, will they toll together again?

- Ans**
- 1. 170
 - 2. 172
 - 3. 166
 - 4. 168

Question ID : 9489113850
Option 1 ID : 94891115399
Option 2 ID : 94891115400
Option 3 ID : 94891115397
Option 4 ID : 94891115398
Status : Answered
Chosen Option : 4

Q.71 Constituent Assembly drafted the Constitution for Independent India. It was set up under:

- Ans**
- 1. Indian Independence Act of 1947
 - 2. The Government of India Act of 1909
 - 3. Cabinet Mission plan of 1946.
 - 4. The Government of India Act of 1919

Question ID : 9489114929
Option 1 ID : 94891119713
Option 2 ID : 94891119714
Option 3 ID : 94891119716
Option 4 ID : 94891119715
Status : Answered
Chosen Option : 3

Q.72 Which of the following is NOT caused by global warming?

- Ans**
- 1. Melting of glaciers and ice sheets
 - 2. Proper rainfall
 - 3. Sea level rise
 - 4. Erratic weather pattern

Question ID : 9489114906
Option 1 ID : 94891119621
Option 2 ID : 94891119623
Option 3 ID : 94891119624
Option 4 ID : 94891119622
Status : Answered
Chosen Option : 2



Q.73 If a man crosses a street, 700 m long, in 7 min, then his speed is:

- Ans
- 1. 7 km/h
 - 2. 6 km/h
 - 3. 8 km/h
 - 4. 9 km/h

Question ID : 9489113862
Option 1 ID : 94891115446
Option 2 ID : 94891115445
Option 3 ID : 94891115447
Option 4 ID : 94891115448
Status : Answered
Chosen Option : 2

Q.74 Select the number that can replace the question mark (?) in the following series.

7, 21, 13, 22, 19, ?

- Ans
- 1. 31
 - 2. 25
 - 3. 23
 - 4. 20

Question ID : 9489114885
Option 1 ID : 94891119540
Option 2 ID : 94891119539
Option 3 ID : 94891119538
Option 4 ID : 94891119537
Status : Answered
Chosen Option : 3

Q.75 A man incurs a loss of 15% by selling a radio for ₹510. At what price should he sell it in order to make a profit of 15%?

- Ans
- 1. ₹670
 - 2. ₹660
 - 3. ₹680
 - 4. ₹690

Question ID : 9489113856
Option 1 ID : 94891115422
Option 2 ID : 94891115421
Option 3 ID : 94891115423
Option 4 ID : 94891115424
Status : Answered
Chosen Option : 4



Q.76 Name the country that does NOT possess nuclear weapons.

- Ans
- 1. Russia
 - 2. France
 - 3. Japan
 - 4. China

Question ID : 9489114930
Option 1 ID : 94891119720
Option 2 ID : 94891119717
Option 3 ID : 94891119718
Option 4 ID : 94891119719
Status : Answered
Chosen Option : 2

Q.77 A cylinder and a cone have the same height and the same radius as that of their base. The ratio of the volume of the cone to the volume of the cylinder is:

- Ans
- 1. 3 : 2
 - 2. 1 : 3
 - 3. 3 : 1
 - 4. 2 : 3

Question ID : 9489113865
Option 1 ID : 94891115458
Option 2 ID : 94891115457
Option 3 ID : 94891115460
Option 4 ID : 94891115459
Status : Answered
Chosen Option : 2

Q.78 Which mobile app won the National e-Governance Award 2019?

- Ans
- 1. BHIM
 - 2. UPI
 - 3. JAN DHAN
 - 4. IRCTC Rail Connect

Question ID : 9489114907
Option 1 ID : 94891119625
Option 2 ID : 94891119627
Option 3 ID : 94891119628
Option 4 ID : 94891119626
Status : Answered
Chosen Option : 1



Q.79 Which airport of India won the Airport Service Quality (ASQ) Award for 2019 in the Category of Best Customer service by size (25-40 million passengers) in Asia-Pacific region?

- Ans
- 1. Delhi Airport
 - 2. Chennai International Airport
 - 3. Kempegowda International Airport Bangalore
 - 4. Biju Patnaik International Airport Bhubaneswar

Question ID : 9489114905
Option 1 ID : 94891119619
Option 2 ID : 94891119620
Option 3 ID : 94891119617
Option 4 ID : 94891119618
Status : Answered
Chosen Option : 1

Q.80 Select the option that can replace the question mark (?) in the following series.

DF, LH, RL, ?

- Ans
- 1. XZ
 - 2. VR
 - 3. UQ
 - 4. WS

Question ID : 9489114886
Option 1 ID : 94891119541
Option 2 ID : 94891119543
Option 3 ID : 94891119542
Option 4 ID : 94891119544
Status : Answered
Chosen Option : 1

Q.81 If $\sin \theta + \operatorname{cosec} \theta = \sqrt{5}$, then the value of $\sin^3 \theta + \operatorname{cosec}^3 \theta$ is:

- Ans
- 1. $3\sqrt{5}$
 - 2. $\frac{1}{\sqrt{5}}$
 - 3. 0
 - 4. $2\sqrt{5}$

Question ID : 9489113870
Option 1 ID : 94891115479
Option 2 ID : 94891115477
Option 3 ID : 94891115480
Option 4 ID : 94891115478
Status : Answered
Chosen Option : 4



Q.82 Which among the following states has the longest mainland coastline in India?

- Ans
- 1. Tamil Nadu
 - 2. Gujarat
 - 3. Odisha
 - 4. Maharashtra

Question ID : 9489114925
Option 1 ID : 94891119698
Option 2 ID : 94891119699
Option 3 ID : 94891119700
Option 4 ID : 94891119697
Status : Answered
Chosen Option : 2

Q.83 Select the letter that can replace the question mark (?) in the following series.

A, B, D, G, K, ?

- Ans
- 1. P
 - 2. Q
 - 3. M
 - 4. O

Question ID : 9489114883
Option 1 ID : 94891119530
Option 2 ID : 94891119531
Option 3 ID : 94891119532
Option 4 ID : 94891119529
Status : Answered
Chosen Option : 1

Q.84 If $\sqrt{\frac{x}{144}} = \frac{27}{12}$, then find the value of x

- Ans
- 1. 727
 - 2. 724
 - 3. 629
 - 4. 729

Question ID : 9489113851
Option 1 ID : 94891115403
Option 2 ID : 94891115401
Option 3 ID : 94891115402
Option 4 ID : 94891115404
Status : Answered
Chosen Option : 4



Q.85 What is the remainder when $7^{29} + 4$ is divided by 6?

- Ans
- 1. 3
 - 2. 7
 - 3. 5
 - 4. 1

Question ID : 9489113849

Option 1 ID : 94891115394

Option 2 ID : 94891115396

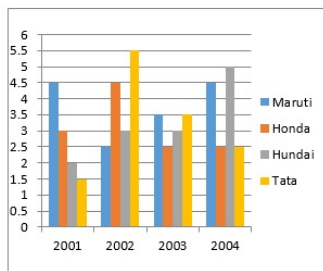
Option 3 ID : 94891115395

Option 4 ID : 94891115393

Status : Answered

Chosen Option : 1

Q.86



The given bar chart shows production of cars by different manufacturers from year 2001 to 2004. All values are in thousands.

What was the total production of cars in thousands from 2001 to 2004?

- Ans
- 1. 53500
 - 2. 52500
 - 3. 51000
 - 4. 52000

Question ID : 9489114889

Option 1 ID : 94891119555

Option 2 ID : 94891119554

Option 3 ID : 94891119556

Option 4 ID : 94891119553

Status : Answered

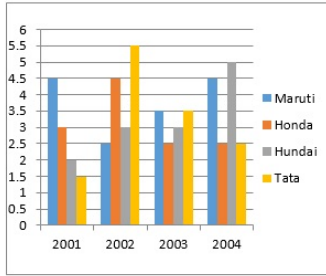
Chosen Option : 1



Download RRB Exams PDF E-BOOKS

[CLICK HERE](#)

Q.87



The given bar chart shows production of cars by different manufacturers from year 2001 to 2004. All values are in thousands.

Which year has the maximum production of cars?

- Ans
- ✓ 1. 2002
 - ✗ 2. 2003
 - ✗ 3. 2004
 - ✗ 4. 2001

Question ID : 9489114890
 Option 1 ID : 94891119560
 Option 2 ID : 94891119558
 Option 3 ID : 94891119559
 Option 4 ID : 94891119557
 Status : Answered
 Chosen Option : 1

Q.88 The following table shows the number of misprints in various pages of a book.

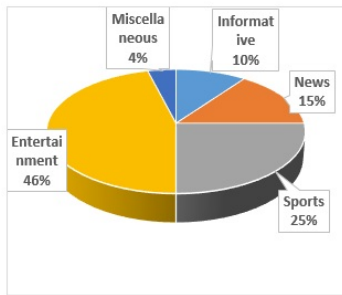
Number of misprints (per page)	0	1	2	3	4	5
Number of pages	154	95	36	7	6	2

What is the total number of pages in the book and approximately what percentage of them are erroneous?

- Ans
- ✗ 1. 146, 95%
 - ✗ 2. 154, 95%
 - ✗ 3. 300, 51%
 - ✓ 4. 300, 49%

Question ID : 9489114891
 Option 1 ID : 94891119562
 Option 2 ID : 94891119561
 Option 3 ID : 94891119564
 Option 4 ID : 94891119563
 Status : Not Attempted and Marked For Review
 Chosen Option : --

Q.89 The given pie chart shows the viewers watching different types of channels on TV.



Assuming that the TV watching population is 10,000 people, by what percentage would Sports Channels have to grow their viewership in order to equal the current viewership of the Entertainment channels?

- Ans
- 1. 21%
 - 2. 100%
 - 3. 84%
 - 4. 119%

Question ID : 9489114892
Option 1 ID : 94891119566
Option 2 ID : 94891119565
Option 3 ID : 94891119568
Option 4 ID : 94891119567
Status : Answered
Chosen Option : 3

Q.90 Select the option that can replace the question mark (?) in the following series.

D3K, E5J, F7I, G11H, ?

- Ans
- 1. H15G
 - 2. I13J
 - 3. H13G
 - 4. G17H

Question ID : 9489114888
Option 1 ID : 94891119549
Option 2 ID : 94891119551
Option 3 ID : 94891119550
Option 4 ID : 94891119552
Status : Answered
Chosen Option : 3

Q.91 In a certain language, Bottle is written as Cqwunh. How will Liquid be written as in that language?

- Ans
- 1. Mktzmj
 - 2. Mkthgb
 - 3. Mktvgk
 - 4. Mktvkg

Question ID : 9489114879
Option 1 ID : 94891119513
Option 2 ID : 94891119515
Option 3 ID : 94891119516
Option 4 ID : 94891119514
Status : Answered
Chosen Option : 4

Q.92 Four friends U, V, W and X work in a garage. W knows more than V. U knows more than W, but less than X. Who is the most knowledgeable person amongst all?

- Ans
- 1. U
 - 2. V
 - 3. X
 - 4. W

Question ID : 9489114884
Option 1 ID : 94891119533
Option 2 ID : 94891119534
Option 3 ID : 94891119536
Option 4 ID : 94891119535
Status : Answered
Chosen Option : 3

Q.93 প্রথম শব্দটি যেভাবে দ্বিতীয় শব্দের সাথে সম্পর্কিত একই ভাবে বিকল্পগুলি থেকে তৃতীয় শব্দের সাথে সম্পর্কিত শব্দটি নির্বাচন কর।

Jaggery (গুড়) : Sugar (চিনি):: Pepper (গোলমরিচ) : ?

- Ans
- 1. নুন (Salt)
 - 2. সবুজ (Green)
 - 3. সাদা (White)
 - 4. লঙ্কা (Chilli)

Question ID : 9489114894
Option 1 ID : 94891119575
Option 2 ID : 94891119576
Option 3 ID : 94891119573
Option 4 ID : 94891119574
Status : Answered
Chosen Option : 1



Q.94 Read the given statements and conclusions carefully and decide which of the conclusions logically follow(s) from the statements.

Statements:

1. All songs are old.
2. Some old are sweet.

Conclusions:

1. Some songs are sweet.
2. All songs are sweet.
3. Some sweets are old.
4. No old is a song.

- Ans**
- 1. 2
 - 2. 4
 - 3. 3
 - 4. 1

Question ID : 9489114874
Option 1 ID : 94891119494
Option 2 ID : 94891119496
Option 3 ID : 94891119495
Option 4 ID : 94891119493
Status : Answered
Chosen Option : 3

Q.95 Read the given statements and conclusions carefully and decide which of the conclusions logically follow(s) from the statements.

Statements:

1. Lack of education is responsible for lower income of a state.
2. Bihar ranks very low in per capita income.

Conclusions:

- I. Bihar has a lower rate of education.
- II. Bihar is a very historic state.

- Ans**
- 1. Neither of the conclusions follows.
 - 2. Only conclusion I follows.
 - 3. Only conclusion II follows.
 - 4. Both conclusions follow.

Question ID : 9489114881
Option 1 ID : 94891119524
Option 2 ID : 94891119521
Option 3 ID : 94891119522
Option 4 ID : 94891119523
Status : Answered
Chosen Option : 3

Q.96 A man has five stones A, B, C, D and E and each stone having a different weight. E's weight is less than A but more than C. A is heavier than D and B. B is heavier than D. If weight of B and E is 120 g and 155 g respectively, then which of the given options could be the possible weight of C?

- Ans**
- 1. 156 g
 - 2. 162 g
 - 3. 152 g
 - 4. 159 g

Question ID : 9489114901
Option 1 ID : 94891119603
Option 2 ID : 94891119602
Option 3 ID : 94891119601
Option 4 ID : 94891119604
Status : Answered
Chosen Option : 3

Q.97 Consider the given statement and decide which of the given assumptions is/are implicit in the statement.

Statement:

It is required to have a bachelor's degree for getting a job for the post of officer.

Assumptions:

- I. No one can get a job without a bachelor's degree.
- II. No officer has a higher degree.

- Ans**
- 1. Both assumptions are implicit.
 - 2. Only assumption I is implicit.
 - 3. Only assumption II is implicit.
 - 4. Neither I nor II is implicit.

Question ID : 9489114882
Option 1 ID : 94891119527
Option 2 ID : 94891119525
Option 3 ID : 94891119526
Option 4 ID : 94891119528
Status : Answered
Chosen Option : 4




Q.98 There are 5 friends A, B, C, D and E and each of them likes only one fruit out of guava, pineapple, banana, mango and litchi and eat it once a week. They eat their favorite fruit on week days, between Monday and Friday. A likes litchi and he does not eat it on Monday and Tuesday. E does not like mango and pineapple and he eats his fruit on the day before the last day of the week. B likes mango and eats it on the day just before C who likes Banana. D eats on Monday.

Who among the following likes pineapple?

- Ans**
- 1. D
 - 2. B
 - 3. A
 - 4. C

Question ID : 9489114899
Option 1 ID : 94891119593
Option 2 ID : 94891119594
Option 3 ID : 94891119596
Option 4 ID : 94891119595
Status : Answered
Chosen Option : 1

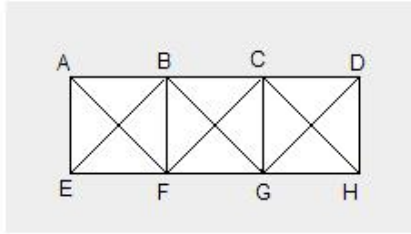
Q.99 Find the number of squares in the given figure.



- Ans**
- 1. 10
 - 2. 12
 - 3. 14
 - 4. 9

Question ID : 9489114897
Option 1 ID : 94891119586
Option 2 ID : 94891119587
Option 3 ID : 94891119588
Option 4 ID : 94891119585
Status : Answered
Chosen Option : 3

Q.100 Find the number of triangles in the given figure.



- Ans
- 1. 24
 - 2. 26
 - 3. 29
 - 4. 28

Question ID : 9489114898

Option 1 ID : 94891119589

Option 2 ID : 94891119590

Option 3 ID : 94891119592

Option 4 ID : 94891119591

Status : Answered

Chosen Option : 4

