



रेल भर्ती बोर्ड / RAILWAY RECRUITMENT BOARDS



सी ई एन ०१/२०१९ - एन टी पी सी - CEN 01/2019 - NTPC

Participant ID	
Participant Name	
Test Center Name	
Test Date	28/01/2021
Test Time	10:30 AM - 12:00 PM
Subject	NTPC

*** Note**

Correct Answer will carry 1 mark per Question.
Incorrect Answer will carry 1/3 Negative mark.

- Options shown in green color with a tick icon are correct.
- Chosen option on the right of the question indicates the option selected by the candidate.

Section : NTPC

Q.1 What is the total strength of elected members in the Lok Sabha?

- Ans
- 1. 520
 - 2. 543
 - 3. 542
 - 4. 524

Question ID : 9489113527

Option 1 ID : 94891114107

Option 2 ID : 94891114105

Option 3 ID : 94891114106

Option 4 ID : 94891114108

Status : Answered

Chosen Option : 2



Download RRB Exams PDF E-BOOKS

[CLICK HERE](#)

Q.2 Which counsel represented India at The International Court of Justice at The Hague, against Pakistan's decision of awarding the death sentence to Kulbhushan Jadhav?

- Ans
- 1. Mukul Rohatgi
 - 2. Harish Salve
 - 3. Aman Lekhi
 - 4. Kapil Sibal

Question ID : 9489113535
Option 1 ID : 94891114139
Option 2 ID : 94891114138
Option 3 ID : 94891114140
Option 4 ID : 94891114137
Status : Answered
Chosen Option : 2

Q.3 Abir sells an article to Kunal at the profit of 15% and Kunal sells it to Amar at the profit of 10%. If Amar pays ₹5,060 for it, what was its original cost price?

- Ans
- 1. ₹4,500
 - 2. ₹6,000
 - 3. ₹5,000
 - 4. ₹4,000

Question ID : 9489113960
Option 1 ID : 94891115839
Option 2 ID : 94891115840
Option 3 ID : 94891115837
Option 4 ID : 94891115838
Status : Not Answered
Chosen Option : -

Q.4 As of October 2020, which of the following authors of Indian origin has NOT won the Man Booker Prize for literature?

- Ans
- 1. Aravind Adiga
 - 2. Kiran Desai
 - 3. Arundhati Roy
 - 4. Jhumpa Lahiri

Question ID : 9489113509
Option 1 ID : 94891114035
Option 2 ID : 94891114033
Option 3 ID : 94891114034
Option 4 ID : 94891114036
Status : Not Answered
Chosen Option : -



Q.5 A tree broke at a height of 8 m from its foot and the broken upper part touches the ground at a point of 6 m from its foot.
Find the height of the tree.

- Ans**
- 1. 15 m
 - 2. 16 m
 - 3. 18 m
 - 4. 24 m

Question ID : 9489113970
Option 1 ID : 94891115878
Option 2 ID : 94891115877
Option 3 ID : 94891115880
Option 4 ID : 94891115879
Status : Answered
Chosen Option : 3

Q.6 As of October 2020, who is the Director General of the Council of Scientific and Industrial Research (CSIR)?

- Ans**
- 1. Dr. Shekhar Mande
 - 2. Dr. RA Mashelkar
 - 3. Prof. Samir K Brahmachari
 - 4. Dr. SK Joshi

Question ID : 9489113532
Option 1 ID : 94891114126
Option 2 ID : 94891114127
Option 3 ID : 94891114128
Option 4 ID : 94891114125
Status : Answered
Chosen Option : 2

Q.7 Butea monosperma is the botanical name of which plant that is native to the Indian subcontinent?

- Ans**
- 1. Peepal
 - 2. Palash
 - 3. Neem
 - 4. Shirish

Question ID : 9489113516
Option 1 ID : 94891114062
Option 2 ID : 94891114063
Option 3 ID : 94891114061
Option 4 ID : 94891114064
Status : Not Answered
Chosen Option : -



Q.8 A man travels 360 km in 4 h, partly by air and partly by train. If he had travelled all the way by air, he would have saved

$\frac{4}{5}$ of the time he travelled by train, and he would have arrived at his destination 2 h early. Find the distance he travelled by air.

- Ans**
- 1. 270 km
 - 2. 280 km
 - 3. 290 km
 - 4. 260 km

Question ID : 9489113963

Option 1 ID : 94891115851

Option 2 ID : 94891115850

Option 3 ID : 94891115852

Option 4 ID : 94891115849

Status : Not Answered

Chosen Option : -

Q.9 Find the smallest number which when diminished by 3 is divisible by 21, 24, 30 and 45.

- Ans**
- 1. 883
 - 2. 860
 - 3. 843
 - 4. 980

Question ID : 9489113950

Option 1 ID : 94891115799

Option 2 ID : 94891115797

Option 3 ID : 94891115800

Option 4 ID : 94891115798

Status : Answered

Chosen Option : 3



Download RRB Exams PDF E-BOOKS

[CLICK HERE](#)

Q.10 Read the given statements and conclusions carefully. Assuming that the information given in the statements is true, even if it appears to be at variance with commonly known facts, decide which of the given conclusions logically follow(s) from the statements.

Statements:

- I. Some beds are side-tables.
- II. All side-tables are lamps.

Conclusions:

- 1. All beds are side-tables.
- 2. Some lamps are beds.
- 3. Some lamps are side-tables.
- 4. All side-tables are beds.

- Ans**
- 1. Only conclusion 2 follows
 - 2. Both conclusions 2 and 3 follow.
 - 3. Only conclusion 4 follows
 - 4. Only conclusion 1 follows

Question ID : 9489113778
Option 1 ID : 94891115110
Option 2 ID : 94891115111
Option 3 ID : 94891115112
Option 4 ID : 94891115109
Status : Answered
Chosen Option : 2

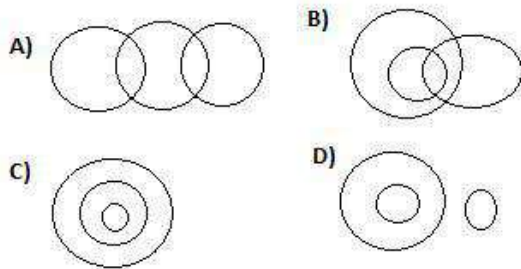
Q.11 What must be subtracted from each of the numbers 23, 40, 57 and 108 so that the remainders are in proportion?

- Ans**
- 1. 4
 - 2. 2
 - 3. 8
 - 4. 6

Question ID : 9489113955
Option 1 ID : 94891115819
Option 2 ID : 94891115820
Option 3 ID : 94891115818
Option 4 ID : 94891115817
Status : Answered
Chosen Option : 4

Q.12 Select the Venn diagram that best represents the relationship between

Currency, Economy, Rupee



- Ans 1. B
 2. D
 3. C
 4. A

Question ID : 9489113798
Option 1 ID : 94891115189
Option 2 ID : 94891115191
Option 3 ID : 94891115192
Option 4 ID : 94891115190
Status : Answered
Chosen Option : 3

Q.13 How many 3-digit numbers leave remainder 1 when divided by 7?

- Ans 1. 130
 2. 125
 3. 128
 4. 126

Question ID : 9489113952
Option 1 ID : 94891115806
Option 2 ID : 94891115805
Option 3 ID : 94891115808
Option 4 ID : 94891115807
Status : Not Answered
Chosen Option : -



Download RRB Exams PDF E-BOOKS

[CLICK HERE](#)

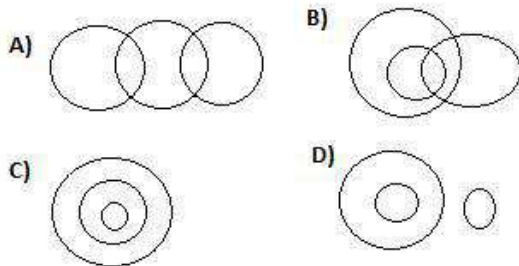
Q.14 Which Viceroy ordered the partition of Bengal in 1905?

- Ans 1. Lord Curzon
 2. Lord Reading
 3. Lord Minto
 4. Lord Hardinge

Question ID : 9489113517
Option 1 ID : 94891114067
Option 2 ID : 94891114066
Option 3 ID : 94891114068
Option 4 ID : 94891114065
Status : Answered
Chosen Option : 1

Q.15 Select the Venn diagram that best represents the relationship between

Building, House, Field



- Ans 1. A
 2. D
 3. C
 4. B

Question ID : 9489113796
Option 1 ID : 94891115181
Option 2 ID : 94891115184
Option 3 ID : 94891115183
Option 4 ID : 94891115182
Status : Answered
Chosen Option : 2



Download RRB Exams PDF E-BOOKS

[CLICK HERE](#)

Q.16 Who was NOT a member of the Cabinet Mission?

- Ans 1. Sir John Simon
 2. Lord Pethick-Lawrence
 3. AV Alexander
 4. Sir Stafford Cripps

Question ID : 9489113521
Option 1 ID : 94891114082
Option 2 ID : 94891114083
Option 3 ID : 94891114084
Option 4 ID : 94891114081
Status : Answered
Chosen Option : 1

Q.17 If A+B means A is the husband of B, A/B means A is the sister of B and A*B means A is the son of B. Which of the following shows M is the daughter of N?

- Ans 1. M*N/O
 2. M+O*N
 3. P*M+O/N
 4. M/P*N

Question ID : 9489113779
Option 1 ID : 94891115115
Option 2 ID : 94891115114
Option 3 ID : 94891115116
Option 4 ID : 94891115113
Status : Not Answered
Chosen Option : -

Q.18 Simplify the given expression $4\frac{1}{10} - \left[2\frac{1}{2} - \left\{ \frac{5}{6} - \left(\frac{2}{5} + \frac{3}{10} \right) \right\} \right]$

- Ans 1. $\frac{19}{15}$
 2. $\frac{12}{25}$
 3. $\frac{26}{15}$
 4. $\frac{31}{25}$

Question ID : 9489113951
Option 1 ID : 94891115804
Option 2 ID : 94891115801
Option 3 ID : 94891115802
Option 4 ID : 94891115803
Status : Not Answered
Chosen Option : -



Q.19 From the given options, Select the letter-cluster that can replace the question mark (?) in the following series.

ZAB, DEF, HIJ, NOP, ?

- Ans
- 1. SUW
 - 2. VUT
 - 3. OPQ
 - 4. TUV

Question ID : 9489113785
Option 1 ID : 94891115140
Option 2 ID : 94891115137
Option 3 ID : 94891115139
Option 4 ID : 94891115138
Status : Answered
Chosen Option : 4

Q.20 Four letter-clusters have been given, out of which three are alike in some manner and one is different. Select the odd one.

- Ans
- 1. XYZ
 - 2. RST
 - 3. MNQ
 - 4. GHI

Question ID : 9489113793
Option 1 ID : 94891115169
Option 2 ID : 94891115170
Option 3 ID : 94891115172
Option 4 ID : 94891115171
Status : Answered
Chosen Option : 3

Q.21 The Aravalli Range does NOT pass through _____ state of India .

- Ans
- 1. Haryana
 - 2. Rajasthan
 - 3. Gujarat
 - 4. Maharashtra

Question ID : 9489113522
Option 1 ID : 94891114086
Option 2 ID : 94891114088
Option 3 ID : 94891114087
Option 4 ID : 94891114085
Status : Answered
Chosen Option : 4



Q.22 In a certain code language, EDUCATION is written as 92. How will KNOWLEDGE be written as in that language?

- Ans
- 1. 101
 - 2. 93
 - 3. 100
 - 4. 96

Question ID : 9489113780
Option 1 ID : 94891115120
Option 2 ID : 94891115117
Option 3 ID : 94891115119
Option 4 ID : 94891115118
Status : Answered
Chosen Option : 1

Q.23 A 300-m-long train crosses an electric pole in 5 s. Find the speed of the train.

- Ans
- 1. 220 km/h
 - 2. 200 km/h
 - 3. 218 km/h
 - 4. 216 km/h

Question ID : 9489113962
Option 1 ID : 94891115847
Option 2 ID : 94891115848
Option 3 ID : 94891115846
Option 4 ID : 94891115845
Status : Answered
Chosen Option : 4

Q.24 In the given data if 30 is replaced by 100 then find the difference of the two medians.

80, 90, 40, 30, 20, 10, 70, 60, 50

- Ans
- 1. 40
 - 2. 10
 - 3. 60
 - 4. 50

Question ID : 9489113973
Option 1 ID : 94891115891
Option 2 ID : 94891115892
Option 3 ID : 94891115890
Option 4 ID : 94891115889
Status : Answered
Chosen Option : 2



Q.25 If $x^2 = y + z$, $y^2 = z + x$ and $z^2 = x + y$, then find the value of $\frac{1}{x+1} + \frac{1}{y+1} + \frac{1}{z+1}$.

- Ans
- 1. 4
 - 2. -1
 - 3. 2
 - 4. 1

Question ID : 9489113967
Option 1 ID : 94891115868
Option 2 ID : 94891115866
Option 3 ID : 94891115867
Option 4 ID : 94891115865
Status : Answered
Chosen Option : 4

Q.26 The simple interest on a certain sum for 3 years at 8% per annum is ₹96 more than the simple interest on the same sum for 2 years at 9% per annum. Find the sum.

- Ans
- 1. ₹1,800
 - 2. ₹1,600
 - 3. ₹1,500
 - 4. ₹1,700

Question ID : 9489113957
Option 1 ID : 94891115826
Option 2 ID : 94891115827
Option 3 ID : 94891115825
Option 4 ID : 94891115828
Status : Answered
Chosen Option : 2

Q.27 A system program that translates and executes an instruction at the same time is called:

- Ans
- 1. Assembler
 - 2. Interpreter
 - 3. Compiler
 - 4. Operating System

Question ID : 9489113538
Option 1 ID : 94891114150
Option 2 ID : 94891114151
Option 3 ID : 94891114149
Option 4 ID : 94891114152
Status : Answered
Chosen Option : 2



Q.28 The six digit number 87937A is divisible by 6 where A is the least natural number. Find the value of A.

- Ans
- 1. 8
 - 2. 4
 - 3. 6
 - 4. 2

Question ID : 9489113944
Option 1 ID : 94891115774
Option 2 ID : 94891115776
Option 3 ID : 94891115775
Option 4 ID : 94891115773
Status : Answered
Chosen Option : 4

Q.29 Where did Mahatma Gandhi preside over the annual session of the Indian National Congress for the first and the last time?

- Ans
- 1. Surat
 - 2. Nagpur
 - 3. Tripura
 - 4. Belgaum

Question ID : 9489113520
Option 1 ID : 94891114078
Option 2 ID : 94891114080
Option 3 ID : 94891114079
Option 4 ID : 94891114077
Status : Answered
Chosen Option : 4

Q.30 Which of the following is NOT connected with India's space programmes?

- Ans
- 1. Sriperumbudur
 - 2. Thumba
 - 3. Abdul Kalam Island
 - 4. Sriharikota

Question ID : 9489113531
Option 1 ID : 94891114124
Option 2 ID : 94891114122
Option 3 ID : 94891114123
Option 4 ID : 94891114121
Status : Answered
Chosen Option : 1



Q.31 The Prime Minister of Pakistan, Imran Khan (as of October 2020), belongs to which political party?

- Ans
- 1. Pakistan Tehreek-e-Insaf
 - 2. Sindh United Party
 - 3. Muslim League
 - 4. Pakistan Peoples Party

Question ID : 9489113507
Option 1 ID : 94891114026
Option 2 ID : 94891114028
Option 3 ID : 94891114025
Option 4 ID : 94891114027
Status : Answered
Chosen Option : 4

Q.32 Four word-pairs have been given, out of which three are alike in some manner and one is different. Select the odd one.

- Ans
- 1. Jainism : Mahavir
 - 2. Humayun : Mughal
 - 3. Buddhism : Gautam Buddha
 - 4. Sikhism : Shri Guru Nanak Dev Ji

Question ID : 9489113794
Option 1 ID : 94891115173
Option 2 ID : 94891115176
Option 3 ID : 94891115175
Option 4 ID : 94891115174
Status : Answered
Chosen Option : 2

Q.33 In which Indian fort would you find the Musamman Burj?

- Ans
- 1. Golconda Fort
 - 2. Fatehpur Sikri Fort
 - 3. Red Fort of Agra
 - 4. Red Fort of Delhi

Question ID : 9489113510
Option 1 ID : 94891114040
Option 2 ID : 94891114039
Option 3 ID : 94891114037
Option 4 ID : 94891114038
Status : Answered
Chosen Option : 1



Q.34 Which of the following does NOT grow under the soil?

- Ans 1. Tomato
 2. Turnip
 3. Radish
 4. Potato

Question ID : 9489113514
Option 1 ID : 94891114056
Option 2 ID : 94891114055
Option 3 ID : 94891114054
Option 4 ID : 94891114053
Status : Answered
Chosen Option : 1

Q.35 An observer at the top of a tower observes that two cars are running towards the foot of the tower at a distance of 120 m from each other making angles of depression α and β such that $\alpha > \beta$ and $\tan \alpha = \sqrt{3}$ and $\tan \beta = \frac{1}{\sqrt{3}}$. Find the height of the tower.

- Ans 1. $120\sqrt{3}$ m
 2. $40\sqrt{3}$ m
 3. $80\sqrt{3}$ m
 4. $60\sqrt{3}$ m

Question ID : 9489113971
Option 1 ID : 94891115882
Option 2 ID : 94891115883
Option 3 ID : 94891115884
Option 4 ID : 94891115881
Status : Answered
Chosen Option : 4

Q.36 Which Indian airline got grounded in April 2019?

- Ans 1. Sahara Airlines
 2. IndiGo
 3. Jet Airways
 4. Kingfisher Airlines

Question ID : 9489113539
Option 1 ID : 94891114156
Option 2 ID : 94891114154
Option 3 ID : 94891114155
Option 4 ID : 94891114153
Status : Answered
Chosen Option : 4



Q.37 Find the area of a trapezium whose parallel sides are 10 cm and 20 cm and non-parallel sides are equal to 10 cm.

- Ans
- 1. $70\sqrt{3} \text{ cm}^2$
 - 2. $75\sqrt{3} \text{ cm}^2$
 - 3. $60\sqrt{3} \text{ cm}^2$
 - 4. $65\sqrt{3} \text{ cm}^2$

Question ID : 9489113969
Option 1 ID : 94891115874
Option 2 ID : 94891115873
Option 3 ID : 94891115875
Option 4 ID : 94891115876
Status : Answered
Chosen Option : 2

Q.38 Using BODMAS, simplify the following.

$$\frac{7}{9} \times \frac{21}{5} \times 25 (65^2 - 55^2)$$

- Ans
- 1. 98000
 - 2. 84000
 - 3. 86000
 - 4. 42000

Question ID : 9489113945
Option 1 ID : 94891115780
Option 2 ID : 94891115778
Option 3 ID : 94891115779
Option 4 ID : 94891115777
Status : Answered
Chosen Option : 1

Q.39 In an army camp, there were provisions for 425 men for 30 days. However, 375 men attended the camp. How long did the provisions last?

- Ans
- 1. 30 days
 - 2. 35 days
 - 3. 34 days
 - 4. 32 days

Question ID : 9489113954
Option 1 ID : 94891115813
Option 2 ID : 94891115816
Option 3 ID : 94891115814
Option 4 ID : 94891115815
Status : Answered
Chosen Option : 3



Q.40 Which of the following is the largest delta in the world?

- Ans
- 1. Congo
 - 2. Ganges-Brahmputra
 - 3. Amazon
 - 4. Nile

Question ID : 9489113523
Option 1 ID : 94891114089
Option 2 ID : 94891114091
Option 3 ID : 94891114090
Option 4 ID : 94891114092
Status : Answered
Chosen Option : 2

Q.41 Simplify the following.

$$5 \times 0.5 \times 0.05 \times 0.005 \times 500$$

- Ans
- 1. 3125
 - 2. 0.3125
 - 3. 31.25
 - 4. 0.003125

Question ID : 9489113946
Option 1 ID : 94891115781
Option 2 ID : 94891115783
Option 3 ID : 94891115782
Option 4 ID : 94891115784
Status : Answered
Chosen Option : 2

Q.42 What is the chemical formula of common salt?

- Ans
- 1. NaOH
 - 2. HCl
 - 3. KOH
 - 4. NaCl

Question ID : 9489113513
Option 1 ID : 94891114051
Option 2 ID : 94891114049
Option 3 ID : 94891114052
Option 4 ID : 94891114050
Status : Answered
Chosen Option : 4



Q.43 As of October 2020, who is the Vice President of India?

- Ans
- 1. Hamid Ansari
 - 2. M Venkaiah Naidu
 - 3. Sumitra Mahajan
 - 4. Meira Kumar

Question ID : 9489113504
Option 1 ID : 94891114015
Option 2 ID : 94891114013
Option 3 ID : 94891114014
Option 4 ID : 94891114016
Status : Answered
Chosen Option : 2

Q.44 Who is the Chairman of the NITI Ayog?

- Ans
- 1. The Vice President
 - 2. The Prime Minister
 - 3. The President
 - 4. The Finance Minister

Question ID : 9489113540
Option 1 ID : 94891114160
Option 2 ID : 94891114158
Option 3 ID : 94891114157
Option 4 ID : 94891114159
Status : Answered
Chosen Option : 2

Q.45 Four numbers have been given, out of which one is different from the other three in some manner. Select the number that is different from the rest.

- Ans
- 1. 743
 - 2. 741
 - 3. 716
 - 4. 729

Question ID : 9489113795
Option 1 ID : 94891115178
Option 2 ID : 94891115177
Option 3 ID : 94891115179
Option 4 ID : 94891115180
Status : Answered
Chosen Option : 3



Q.46 Read the given instructions carefully and answer the question that follows.

8 people – A, B, C, D, E, F, G, H - are sitting at a round table facing each other. A is between E and G, whereas G is sitting second to the right of F. H is between D and B and is second to the left of F. A and B are sitting opposite each other. Who is sitting immediately to the right of G?

- Ans
- 1. A
 - 2. B
 - 3. E
 - 4. H

Question ID : 9489113803

Option 1 ID : 94891115209

Option 2 ID : 94891115210

Option 3 ID : 94891115211

Option 4 ID : 94891115212

Status : Answered

Chosen Option : 1

Q.47 Tap A can fill a tank in 6 h, whereas Tap B can fill it in 8 h. Tap C can empty the same tank in 4 h. If all the taps are opened together, how long will it take to fill the tank?

- Ans
- 1. 20 h
 - 2. 22 h
 - 3. 26 h
 - 4. 24 h

Question ID : 9489113961

Option 1 ID : 94891115841

Option 2 ID : 94891115842

Option 3 ID : 94891115844

Option 4 ID : 94891115843

Status : Answered

Chosen Option : 4

Q.48 As of October 2020, who is the Chairman of the Fifteenth Finance Commission?

- Ans
- 1. Ajay Narayan Jha
 - 2. Bimal Jalan
 - 3. Shaktikant Das
 - 4. Nand Kishore Singh

Question ID : 9489113541

Option 1 ID : 94891114163

Option 2 ID : 94891114164

Option 3 ID : 94891114161

Option 4 ID : 94891114162

Status : Answered

Chosen Option : 4



Q.49 From the given options, select the option that can replace the question mark (?) in the following series.

26A2, 4E6, 8I10, 14O16, ?

- Ans
- 1. 20V22
 - 2. 20U22
 - 3. 22U20
 - 4. 19U23

Question ID : 9489113786
Option 1 ID : 94891115142
Option 2 ID : 94891115141
Option 3 ID : 94891115143
Option 4 ID : 94891115144
Status : Answered
Chosen Option : 2

Q.50 The Muslim League was founded in _____.

- Ans
- 1. Karachi
 - 2. Lahore
 - 3. Dhaka
 - 4. Hyderabad

Question ID : 9489113518
Option 1 ID : 94891114071
Option 2 ID : 94891114069
Option 3 ID : 94891114072
Option 4 ID : 94891114070
Status : Answered
Chosen Option : 3

Q.51 The radius of a 80 cm wide road roller is 77 cm. Find the number of revolutions that the roller will take to cover an area of 96.8 m². [Take $\pi = \frac{22}{7}$]

- Ans
- 1. 25
 - 2. 20
 - 3. 24
 - 4. 22

Question ID : 9489113965
Option 1 ID : 94891115857
Option 2 ID : 94891115858
Option 3 ID : 94891115859
Option 4 ID : 94891115860
Status : Not Answered
Chosen Option : -



Q.52 Find the greatest number, which when divides 76, 151 and 226 leaves same remainder.

- Ans 1. 75
 2. 78
 3. 70
 4. 76

Question ID : 9489113948
Option 1 ID : 94891115792
Option 2 ID : 94891115791
Option 3 ID : 94891115789
Option 4 ID : 94891115790
Status : Answered
Chosen Option : 1

Q.53 Which of the following Union Territories has a legislative assembly?

- Ans 1. Delhi
 2. Chandigarh
 3. Andaman and Nicobar
 4. Dadra and Nagar Haveli

Question ID : 9489113529
Option 1 ID : 94891114115
Option 2 ID : 94891114116
Option 3 ID : 94891114113
Option 4 ID : 94891114114
Status : Answered
Chosen Option : 1

Q.54 In a certain code language, VEGETABLE is written as IJKLMNOPQ. How will TABLE be written as in that language?

- Ans 1. PQNOM
 2. MONQP
 3. QPONM
 4. MNOPQ

Question ID : 9489113777
Option 1 ID : 94891115105
Option 2 ID : 94891115108
Option 3 ID : 94891115106
Option 4 ID : 94891115107
Status : Answered
Chosen Option : 4



Download RRB Exams PDF E-BOOKS

[CLICK HERE](#)

Q.55 Which national park in India has the maximum number of rhinos?

- Ans
- 1. Keibul Lamjao National Park
 - 2. Nagarhole National Park
 - 3. Kaziranga National Park
 - 4. Kanha National Park

Question ID : 9489113515
Option 1 ID : 94891114058
Option 2 ID : 94891114060
Option 3 ID : 94891114057
Option 4 ID : 94891114059
Status : Answered
Chosen Option : 3

Q.56 As of October 2020, who is the Director General of the World Trade Organization?

- Ans
- 1. Arthur Dunkel
 - 2. Roberto Azevedo
 - 3. Pascal Lamy
 - 4. Peter Sutherland

Question ID : 9489113534
Option 1 ID : 94891114133
Option 2 ID : 94891114136
Option 3 ID : 94891114135
Option 4 ID : 94891114134
Status : Answered
Chosen Option : 2

Q.57 In the new budget, the price of petrol has risen by 20%. By how much percentage must a motorist reduce consumption of petrol so that his expenditure on it does NOT increase?

- Ans
- 1. $16\frac{3}{4}\%$
 - 2. $16\frac{4}{5}\%$
 - 3. $16\frac{2}{3}\%$
 - 4. $16\frac{1}{2}\%$

Question ID : 9489113956
Option 1 ID : 94891115823
Option 2 ID : 94891115824
Option 3 ID : 94891115822
Option 4 ID : 94891115821
Status : Answered
Chosen Option : 3



Q.58 Find the area of a rhombus whose perimeter is 164 cm and one diagonal is of length 80 cm.

- Ans
- 1. 705 cm²
 - 2. 710 cm²
 - 3. 720 cm²
 - 4. 700 cm²

Question ID : 9489113964
Option 1 ID : 94891115856
Option 2 ID : 94891115855
Option 3 ID : 94891115853
Option 4 ID : 94891115854
Status : Answered
Chosen Option : 3

Q.59 In a ΔABC , if $2\angle A = 3\angle B = 6\angle C$, then find the value of $\angle C$.

- Ans
- 1. 60°
 - 2. 30°
 - 3. 45°
 - 4. 90°

Question ID : 9489113968
Option 1 ID : 94891115870
Option 2 ID : 94891115871
Option 3 ID : 94891115872
Option 4 ID : 94891115869
Status : Answered
Chosen Option : 2

Q.60 Who is the first ever CEO of the Railway Board?

- Ans
- 1. Ashwani Lohani
 - 2. Ajay Tyagi
 - 3. VK Yadav
 - 4. Mangu Singh

Question ID : 9489113543
Option 1 ID : 94891114170
Option 2 ID : 94891114172
Option 3 ID : 94891114171
Option 4 ID : 94891114169
Status : Answered
Chosen Option : 3



Q.61 Find the mean height of persons from the following data.

Height (cm)	Number of persons
120	3
130	4
140	5
150	6
160	2

- Ans
- 1. 150 cm
 - 2. 145 cm
 - 3. 160 cm
 - 4. 140 cm

Question ID : 9489113972
 Option 1 ID : 94891115886
 Option 2 ID : 94891115885
 Option 3 ID : 94891115887
 Option 4 ID : 94891115888

Status : Answered

Chosen Option : 4

Q.62 What smallest fraction should be added to $3\frac{2}{3} + 6\frac{7}{12} + 4\frac{9}{36} + 5 + 7\frac{1}{12}$ to make the sum a whole number?

- Ans
- 1. $\frac{13}{12}$
 - 2. $\frac{5}{12}$
 - 3. $\frac{11}{12}$
 - 4. $\frac{7}{12}$

Question ID : 9489113947
 Option 1 ID : 94891115788
 Option 2 ID : 94891115786
 Option 3 ID : 94891115787
 Option 4 ID : 94891115785

Status : Not Answered

Chosen Option : -

Q.63 Which Act of the British Parliament provided for responsible government in the provinces?

- Ans
- 1. Act of 1892
 - 2. Act of 1935
 - 3. Act of 1919
 - 4. Act of 1909

Question ID : 9489113519
Option 1 ID : 94891114076
Option 2 ID : 94891114075
Option 3 ID : 94891114074
Option 4 ID : 94891114073
Status : Answered
Chosen Option : 2

Q.64 On which road is the Bombay Stock Exchange located?

- Ans
- 1. Dalal Street
 - 2. Elphinstone Road
 - 3. Cadel Road
 - 4. Pedder Road

Question ID : 9489113542
Option 1 ID : 94891114165
Option 2 ID : 94891114167
Option 3 ID : 94891114168
Option 4 ID : 94891114166
Status : Answered
Chosen Option : 1

Q.65 Which of the following is NOT a Google product?

- Ans
- 1. Gmail
 - 2. iTunes
 - 3. Blogger
 - 4. YouTube

Question ID : 9489113536
Option 1 ID : 94891114142
Option 2 ID : 94891114141
Option 3 ID : 94891114144
Option 4 ID : 94891114143
Status : Answered
Chosen Option : 4



Download RRB Exams PDF E-BOOKS

[CLICK HERE](#)

Q.66 Which former space scientist was awarded the Padma Bhushan in 2019?

- Ans
- 1. Madhavan Nair
 - 2. UR Rao
 - 3. Nambi Narayanan
 - 4. K Kasturirangan

Question ID : 9489113530
Option 1 ID : 94891114118
Option 2 ID : 94891114119
Option 3 ID : 94891114117
Option 4 ID : 94891114120
Status : Answered
Chosen Option : 1

Q.67 If $\frac{3\sqrt{5} - 5}{3\sqrt{5} + 5} = a + b\sqrt{5}$, then find the value of b.

- Ans
- 1. $\frac{7}{2}$
 - 2. $\frac{3\sqrt{5}}{2}$
 - 3. $\frac{3}{2}$
 - 4. $-\frac{3}{2}$

Question ID : 9489113953
Option 1 ID : 94891115812
Option 2 ID : 94891115810
Option 3 ID : 94891115811
Option 4 ID : 94891115809
Status : Answered
Chosen Option : 4

Q.68 Which strait lies between Russia and a state of the United States of America?

- Ans
- 1. Palk Strait
 - 2. Bering Strait
 - 3. Strait of Magellan
 - 4. Strait of Dover

Question ID : 9489113526
Option 1 ID : 94891114101
Option 2 ID : 94891114103
Option 3 ID : 94891114102
Option 4 ID : 94891114104
Status : Answered



Q.69 How many distinct symbols are used in the hexadecimal number system?

- Ans
- 1. 2
 - 2. 3
 - 3. 16
 - 4. 1

Question ID : 9489113537
Option 1 ID : 94891114145
Option 2 ID : 94891114146
Option 3 ID : 94891114148
Option 4 ID : 94891114147
Status : Answered
Chosen Option : 1

Q.70 If $x - \frac{1}{x} = 5$, find the value of $x^4 + \frac{1}{x^4}$.

- Ans
- 1. 730
 - 2. 727
 - 3. 728
 - 4. 729

Question ID : 9489113966
Option 1 ID : 94891115864
Option 2 ID : 94891115863
Option 3 ID : 94891115862
Option 4 ID : 94891115861
Status : Answered
Chosen Option : 2

Q.71 A sum is invested at compound interest payable annually. The interest in two successive years was ₹225 and ₹236.25. Find the rate of interest.

- Ans
- 1. 4.5%
 - 2. 4%
 - 3. 5%
 - 4. 5.5%

Question ID : 9489113958
Option 1 ID : 94891115830
Option 2 ID : 94891115831
Option 3 ID : 94891115829
Option 4 ID : 94891115832
Status : Answered
Chosen Option : 3



Q.72 Hinayana and Mahayana are sects of which religion?

- Ans 1. Buddhism
 2. Sikhism
 3. Hinduism
 4. Jainism

Question ID : 9489113508
Option 1 ID : 94891114031
Option 2 ID : 94891114032
Option 3 ID : 94891114029
Option 4 ID : 94891114030
Status : Answered
Chosen Option : 1

Q.73 Which of the following Social worker was awarded the Padma Bhushan in 2020?

- Ans 1. Aruna Roy
 2. Anil Prakash Joshi
 3. Medha Patkar
 4. Anna Hajare

Question ID : 9489113506
Option 1 ID : 94891114021
Option 2 ID : 94891114023
Option 3 ID : 94891114024
Option 4 ID : 94891114022
Status : Answered
Chosen Option : 4

Q.74 In which continent is the archipelago Tierra del Fuego located?

- Ans 1. South America
 2. North America
 3. Africa
 4. Europe

Question ID : 9489113524
Option 1 ID : 94891114095
Option 2 ID : 94891114094
Option 3 ID : 94891114093
Option 4 ID : 94891114096
Status : Answered
Chosen Option : 1



Q.75 What is measured in 'joules'?

- Ans
- 1. Velocity
 - 2. Force
 - 3. Energy
 - 4. Power

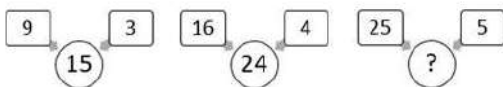
Question ID : 9489113512
Option 1 ID : 94891114045
Option 2 ID : 94891114046
Option 3 ID : 94891114048
Option 4 ID : 94891114047
Status : Answered
Chosen Option : 3

Q.76 By selling cakes at ₹84 per dozen, a baker earns a profit of 12%. At what price must he sell each cake to earn a profit of 20% ?

- Ans
- 1. ₹8.50
 - 2. ₹7.50
 - 3. ₹9.50
 - 4. ₹10.50

Question ID : 9489113959
Option 1 ID : 94891115833
Option 2 ID : 94891115834
Option 3 ID : 94891115836
Option 4 ID : 94891115835
Status : Answered
Chosen Option : 2

Q.77 Study the given pattern carefully and select the number that can replace the question mark (?) in it.



- Ans
- 1. 34
 - 2. 32
 - 3. 35
 - 4. 33

Question ID : 9489113800
Option 1 ID : 94891115197
Option 2 ID : 94891115200
Option 3 ID : 94891115198
Option 4 ID : 94891115199
Status : Answered
Chosen Option : 3

Q.78 What is the generic name given to members of the cat family?

- Ans
- 1. Feline
 - 2. Caprine
 - 3. Canine
 - 4. Bovine

Question ID : 9489113511
Option 1 ID : 94891114043
Option 2 ID : 94891114044
Option 3 ID : 94891114042
Option 4 ID : 94891114041
Status : Answered
Chosen Option : 1

Q.79 Which canal connects the Pacific Ocean and the Atlantic Ocean?

- Ans
- 1. Suez Canal
 - 2. Kiel Canal
 - 3. Panama Canal
 - 4. Corinth Canal

Question ID : 9489113525
Option 1 ID : 94891114097
Option 2 ID : 94891114099
Option 3 ID : 94891114100
Option 4 ID : 94891114098
Status : Answered
Chosen Option : 3

Q.80 A rectangular courtyard is 18 m 72 cm long and 13 m 20 cm broad. It is to be paved with square tiles all of the same size. Find the least possible number of such tiles required.

- Ans
- 1. 4290
 - 2. 4295
 - 3. 4292
 - 4. 4294

Question ID : 9489113949
Option 1 ID : 94891115793
Option 2 ID : 94891115794
Option 3 ID : 94891115795
Option 4 ID : 94891115796
Status : Not Answered
Chosen Option : -



Q.81 From the given options, select the number that will come next in the following series.

5, 15, 45, 135, 405, ?

- Ans 1. 1215
 2. 1251
 3. 5125
 4. 1125

Question ID : 9489113783

Option 1 ID : 94891115131

Option 2 ID : 94891115132

Option 3 ID : 94891115130

Option 4 ID : 94891115129

Status : Answered

Chosen Option : 1

Q.82 A question is given followed by two arguments. Decide which of the arguments is/are strong with respect to the question.

Question:

Should private schools be banned in India?

Arguments:

1. Yes, they are the reason for commercialisation of education.
2. No, because the rich people cannot send their child to government schools.

- Ans 1. Only argument 2 is strong.
 2. Only argument 1 is strong.
 3. Both arguments 1 and 2 are strong.
 4. Neither argument 1 nor 2 is strong.

Question ID : 9489113781

Option 1 ID : 94891115122

Option 2 ID : 94891115121

Option 3 ID : 94891115123

Option 4 ID : 94891115124

Status : Answered

Chosen Option : 2



Download RRB Exams PDF E-BOOKS

[CLICK HERE](#)

Q.83 _____ has won the FIFA Men's Football World Cup the maximum number of times.

- Ans
- 1. Germany
 - 2. Brazil
 - 3. France
 - 4. England

Question ID : 9489113505
Option 1 ID : 94891114017
Option 2 ID : 94891114020
Option 3 ID : 94891114018
Option 4 ID : 94891114019
Status : Answered
Chosen Option : 2

Q.84 Who among the following was the oldest at the time of taking the oath of Prime minister for the first time?

- Ans
- 1. Morarji Desai
 - 2. VP Singh
 - 3. Atal Bihari Vajpayee
 - 4. Chaudhary Charan Singh

Question ID : 9489113528
Option 1 ID : 94891114111
Option 2 ID : 94891114109
Option 3 ID : 94891114112
Option 4 ID : 94891114110
Status : Answered
Chosen Option : 1

Q.85 Which of the following is related to the reduction of global environmental problems?

- Ans
- 1. UNICEF
 - 2. UNESCO
 - 3. UNCED
 - 4. UNCTAD

Question ID : 9489113533
Option 1 ID : 94891114131
Option 2 ID : 94891114132
Option 3 ID : 94891114129
Option 4 ID : 94891114130
Status : Answered
Chosen Option : 3



Q.86 Observe the table below and answer the following question:

Year	Population	Consumption of electricity (GW)
2015	20	25
2016	30	40
2017	40	60
2018	50	80
2019	60	100

1 GW= 100 Million Watt

Population in Million

In the year 2016, what was the consumption of electricity per person?

- Ans
- 1. 266.67W
 - 2. 166.67W
 - 3. 333.33W
 - 4. 133.33W

Question ID : 9489113789

Option 1 ID : 94891115154

Option 2 ID : 94891115156

Option 3 ID : 94891115155

Option 4 ID : 94891115153

Status : Answered

Chosen Option : 4



Download RRB Exams PDF E-BOOKS

[CLICK HERE](#)

Q.87 Observe the table below and answer the following question:

Year	Population	Consumption of electricity (GW)
2015	20	25
2016	30	40
2017	40	60
2018	50	80
2019	60	100

1 GW= 100 Million Watt

Population in Million

By what percentage did the consumption of electricity increase from 2015 to 2019?

- Ans
- 1. 300%
 - 2. 25%
 - 3. 100%
 - 4. 75%

Question ID : 9489113790
Option 1 ID : 94891115158
Option 2 ID : 94891115157
Option 3 ID : 94891115160
Option 4 ID : 94891115159

Status : Answered

Chosen Option : 1



Download RRB Exams PDF E-BOOKS

[CLICK HERE](#)

Q.88 Observe the table below and answer the following question:

Year	Population	Consumption of electricity (GW)
2015	20	25
2016	30	40
2017	40	60
2018	50	80
2019	60	100

1 GW= 100 Million Watt

Population in Million

In which year did electricity consumption grow by 50%?

- Ans
- 1. 2017
 - 2. 2018
 - 3. 2016
 - 4. 2019

Question ID : 9489113791
Option 1 ID : 94891115164
Option 2 ID : 94891115162
Option 3 ID : 94891115163
Option 4 ID : 94891115161

Status : Answered

Chosen Option : 3



Download RRB Exams PDF E-BOOKS

[CLICK HERE](#)

Q.89 Observe the table below and answer the following question:

Year	Population	Consumption of electricity (GW)
2015	20	25
2016	30	40
2017	40	60
2018	50	80
2019	60	100

1 GW= 100 Million Watt

Population in Million

Which of the following is true with regards to consumption of electricity per person based on the figures given in the table above?

- Ans
- 1. Increased by more than 40% in 2019 as compared to 2015
 - 2. Neither increased nor decreased between 2015 and 2019
 - 3. Increased between 2015 and 2019
 - 4. Decreased between 2015 and 2019

Question ID : 9489113792

Option 1 ID : 94891115168

Option 2 ID : 94891115165

Option 3 ID : 94891115167

Option 4 ID : 94891115166

Status : Not Attempted and
Marked For Review

Chosen Option : -

Q.90 From the given options, select the number that can replace the question mark (?) in the following series.

9, 26, 65, 124, ?

- Ans
- 1. 216
 - 2. 214
 - 3. 217
 - 4. 215

Question ID : 9489113787

Option 1 ID : 94891115147

Option 2 ID : 94891115145

Option 3 ID : 94891115148

Option 4 ID : 94891115146

Status : Answered

Chosen Option : 3



Q.91 Among the following words, which one will come last if they are arranged as per their order in an English dictionary?

Keep, King, Keen, Kite, Knight.

- Ans**
- 1. King
 - 2. Keep
 - 3. Knight
 - 4. Keen

Question ID : 9489113802

Option 1 ID : 94891115206

Option 2 ID : 94891115205

Option 3 ID : 94891115208

Option 4 ID : 94891115207

Status : Answered

Chosen Option : 3

Q.92 Select the option that is related to the third number in the same way as the second number is related to the first number.

5 : 125 :: 8 : ?

- Ans**
- 1. 343
 - 2. 612
 - 3. 512
 - 4. 725

Question ID : 9489113774

Option 1 ID : 94891115096

Option 2 ID : 94891115094

Option 3 ID : 94891115095

Option 4 ID : 94891115093

Status : Answered

Chosen Option : 3

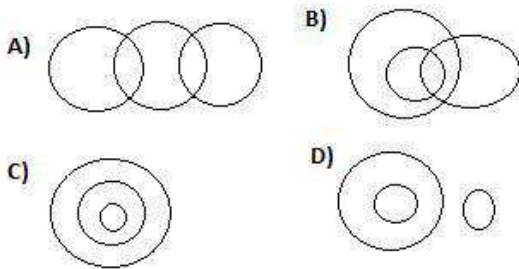


Download RRB Exams PDF E-BOOKS

[CLICK HERE](#)

Q.93 Select the Venn diagram that best represents the relationship between

Chicken, Vegetarian food and Non-vegetarian food.



- Ans 1. C
 2. D
 3. B
 4. A

Question ID : 9489113797
Option 1 ID : 94891115187
Option 2 ID : 94891115185
Option 3 ID : 94891115186
Option 4 ID : 94891115188
Status : Answered
Chosen Option : 2

Q.94 In a certain code language, RAT is written as QZS. How will TABLE be written as in that language?

- Ans 1. SZALE
 2. SZADK
 3. SZAKD
 4. SDAKZ

Question ID : 9489113775
Option 1 ID : 94891115097
Option 2 ID : 94891115099
Option 3 ID : 94891115098
Option 4 ID : 94891115100
Status : Answered
Chosen Option : 3



Download RRB Exams PDF E-BOOKS

[CLICK HERE](#)

Q.95 In a certain code language, ROTARY is written as 65. How will CONSCIENCE be written as in that language?

- Ans
- 1. 170
 - 2. 150
 - 3. 180
 - 4. 160

Question ID : 9489113784
Option 1 ID : 94891115133
Option 2 ID : 94891115136
Option 3 ID : 94891115135
Option 4 ID : 94891115134
Status : Not Answered
Chosen Option : -

Q.96 Study the given table carefully and select the number from among the given options that can replace the question mark (?).

3	2	1
3	2	1
96	44	?

- Ans
- 1. 11
 - 2. 12
 - 3. 13
 - 4. 14

Question ID : 9489113801
Option 1 ID : 94891115201
Option 2 ID : 94891115202
Option 3 ID : 94891115203
Option 4 ID : 94891115204
Status : Answered
Chosen Option : 2



Q.97 Read the given statement and conclusions carefully and decide which of the conclusions logically follow(s) from the statement.

Statement:

Most students have charismatic personalities.

Conclusions:

1. Some students have charismatic personalities.
2. All students have charismatic personalities.

- Ans**
- 1. Both conclusion 1 and 2 follow.
 - 2. Only conclusion 1 follows.
 - 3. Only conclusion 2 follows.
 - 4. Neither conclusions 1 nor 2 follows.

Question ID : 9489113782

Option 1 ID : 94891115127

Option 2 ID : 94891115125

Option 3 ID : 94891115126

Option 4 ID : 94891115128

Status : Answered

Chosen Option : 4

Q.98 Find the value of $216 \div 6 + 6 \times 4 - 10$.

- Ans**
- 1. 72
 - 2. 62
 - 3. 150
 - 4. 50

Question ID : 9489113788

Option 1 ID : 94891115151

Option 2 ID : 94891115152

Option 3 ID : 94891115150

Option 4 ID : 94891115149

Status : Answered

Chosen Option : 4

Q.99 A is the daughter of B. B is the husband of C. C is the sister of D. How is A related to D?

- Ans**
- 1. Brother's daughter
 - 2. Sister's son
 - 3. Sister
 - 4. Sister's daughter

Question ID : 9489113776

Option 1 ID : 94891115104

Option 2 ID : 94891115101

Option 3 ID : 94891115103

Option 4 ID : 94891115102

Status : Answered

Chosen Option : 4



Download RRB Exams PDF E-BOOKS

[CLICK HERE](#)

Q.100 Select the letter that when placed in the blank of the given series will complete the series.

MNO, PQR, STU, V__X

- Ans
- 1. Y
 - 2. Z
 - 3. W
 - 4. U

Question ID : 9489113799

Option 1 ID : 94891115193

Option 2 ID : 94891115194

Option 3 ID : 94891115195

Option 4 ID : 94891115196

Status : Answered

Chosen Option : 3

