



रेल भर्ती बोर्ड / RAILWAY RECRUITMENT BOARDS



सी ई एन ०१/२०१९ - एन टी पी सी - CEN 01/2019 - NTPC

Participant ID	
Participant Name	
Test Center Name	
Test Date	01/02/2021
Test Time	10:30 AM - 12:00 PM
Subject	NTPC

*** Note**

Correct Answer will carry 1 mark per Question.

Incorrect Answer will carry 1/3 Negative mark.

1. Options shown in green color with a tick icon are correct.

2. Chosen option on the right of the question indicates the option selected by the candidate.

Section : NTPC

Q.1 A merchant sold his goods for ₹171 at a profit percent equal to cost price. What was the cost price (in ₹)?

- Ans
- 1. 98
 - 2. 70
 - 3. 78
 - 4. 90

Question ID : 9489115558

Option 1 ID : 94891122232

Option 2 ID : 94891122230

Option 3 ID : 94891122231

Option 4 ID : 94891122229

Status : Answered

Chosen Option : 4



Download RRB Exams PDF E-BOOKS

[CLICK HERE](#)

Q.2 Six friends, A, B, C, D, E and F, sitting around a hexagonal table, each at one corner, are facing the centre of the table. A is second to the left of F. B is the neighbour of C and D. E is second to the left of D. Who is the third person sitting to the left of B?

- Ans**
- 1. C
 - 2. E
 - 3. F
 - 4. A

Question ID : 9489115900
Option 1 ID : 94891123597
Option 2 ID : 94891123599
Option 3 ID : 94891123600
Option 4 ID : 94891123598
Status : Answered
Chosen Option : 2

Q.3 Select the letter that can replace the question mark (?) in the following series.

E, J, O, T, ?

- Ans**
- 1. A
 - 2. Z
 - 3. Y
 - 4. X

Question ID : 9489115883
Option 1 ID : 94891123532
Option 2 ID : 94891123531
Option 3 ID : 94891123529
Option 4 ID : 94891123530
Status : Answered
Chosen Option : 3

Q.4 If the simple interest for 7 years is equal to 56% of the principal, it will be equal to the principal after:

- Ans**
- 1. 12 years 6 months
 - 2. 7 years 6 months
 - 3. 10 years 9 months
 - 4. 9 years 8 months

Question ID : 9489115557
Option 1 ID : 94891122227
Option 2 ID : 94891122226
Option 3 ID : 94891122228
Option 4 ID : 94891122225
Status : Answered
Chosen Option : 1



Q.5 The District and Sessions Judge works directly under the control of the:

- Ans
- 1. governor of the state
 - 2. law minister of the state
 - 3. high court of the state
 - 4. district collector

Question ID : 9489115229
Option 1 ID : 94891120914
Option 2 ID : 94891120915
Option 3 ID : 94891120916
Option 4 ID : 94891120913
Status : Answered
Chosen Option : 3

Q.6 The Jallianwala Bagh massacre took place on _____.

- Ans
- 1. 25 May 1919
 - 2. 20 December 1919
 - 3. 15 August 1919
 - 4. 13 April 1919

Question ID : 9489115219
Option 1 ID : 94891120874
Option 2 ID : 94891120876
Option 3 ID : 94891120875
Option 4 ID : 94891120873
Status : Answered
Chosen Option : 4

Q.7 Who was the first Indian woman president of the Indian National Congress?

- Ans
- 1. Annie Besant
 - 2. Vijay Laxmi Pandit
 - 3. Sarojini Naidu
 - 4. Indira Gandhi

Question ID : 9489115206
Option 1 ID : 94891120821
Option 2 ID : 94891120823
Option 3 ID : 94891120822
Option 4 ID : 94891120824
Status : Answered
Chosen Option : 1

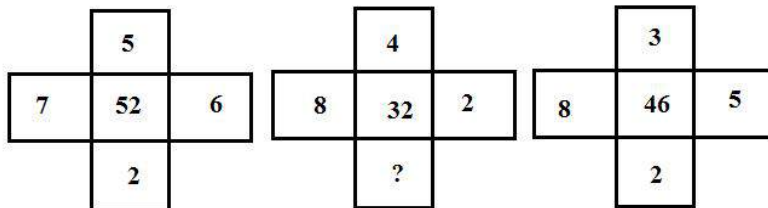


Q.8 Who is considered to be the Father of Modern Computers?

- Ans
- 1. Gordon E Moore
 - 2. James Gosling
 - 3. Charles Babbage
 - 4. Alan Turing

Question ID : 9489115236
Option 1 ID : 94891120942
Option 2 ID : 94891120943
Option 3 ID : 94891120941
Option 4 ID : 94891120944
Status : Answered
Chosen Option : 4

Q.9 Study the given pattern carefully and select the number that can replace the question mark (?) in it.



- Ans
- 1. 4
 - 2. 6
 - 3. 1
 - 4. 16

Question ID : 9489115903
Option 1 ID : 94891123612
Option 2 ID : 94891123611
Option 3 ID : 94891123609
Option 4 ID : 94891123610
Status : Answered
Chosen Option : 1

Q.10 Which of the following vitamins is rich in yeast?

- Ans
- 1. Vitamin C
 - 2. Vitamin B
 - 3. Vitamin A
 - 4. Vitamin K

Question ID : 9489115213
Option 1 ID : 94891120849
Option 2 ID : 94891120851
Option 3 ID : 94891120850
Option 4 ID : 94891120852
Status : Answered
Chosen Option : 1



Q.11 Which of the following is the birthplace of Lord Mahavira in early 6th century BC?

- Ans
- 1. Magdha
 - 2. Patliputra
 - 3. Sarnath
 - 4. Vaishali

Question ID : 9489115226
Option 1 ID : 94891120901
Option 2 ID : 94891120904
Option 3 ID : 94891120903
Option 4 ID : 94891120902
Status : Answered
Chosen Option : 4

Q.12 Two numbers are in the ratio of 11 : 19. If each one is subtracted by 7, then the ratio of the new numbers becomes 5 : 9. Find the absolute difference between the actual numbers.

- Ans
- 1. 45
 - 2. 78
 - 3. 56
 - 4. 34

Question ID : 9489115555
Option 1 ID : 94891122220
Option 2 ID : 94891122218
Option 3 ID : 94891122219
Option 4 ID : 94891122217
Status : Answered
Chosen Option : 3

Q.13 प्रदूषित हवा में निम्नलिखित में से किसकी उपस्थिति के कारण हे बुखार (Hay fever) होता है?

- Ans
- 1. विशिष्ट कणमय पदार्थ (Particulate matter)
 - 2. ओज़ोन (Ozone)
 - 3. कार्बन मोनोऑक्साइड (Carbon monoxide)
 - 4. परागकण (Pollen)

Question ID : 9489115231
Option 1 ID : 94891120921
Option 2 ID : 94891120923
Option 3 ID : 94891120924
Option 4 ID : 94891120922
Status : Answered
Chosen Option : 1



Q.14 यंग बंगाल (Young Bengal) आंदोलन किसने शुरू किया था?

- Ans
- 1. राम गोपाल घोष (Ram Gopal Ghosh)
 - 2. मधुसूदन दत्त (Madhusudan Dutt)
 - 3. कृष्ण मोहन बनर्जी (Krishna Mohan Banerjee)
 - 4. हेनरी विवियन डेरोज़िओ (Henry Vivian Derozio)

Question ID : 9489115221
Option 1 ID : 94891120884
Option 2 ID : 94891120881
Option 3 ID : 94891120883
Option 4 ID : 94891120882
Status : Answered
Chosen Option : 4

Q.15 A chord of length 24 cm is at a distance of 5 cm from the centre of a circle. The radius of the circle is _____ cm.

- Ans
- 1. 10
 - 2. 13
 - 3. 12
 - 4. 14

Question ID : 9489115568
Option 1 ID : 94891122270
Option 2 ID : 94891122272
Option 3 ID : 94891122269
Option 4 ID : 94891122271
Status : Answered
Chosen Option : 2

Q.16 यदि तीन धनात्मक संख्याओं का अनुपात 3 : 7 : 8 है और उनके वर्गों का योगफल 7808 है, तो उनमें से सबसे छोटी संख्या ज्ञात कीजिए।

- Ans
- 1. 27
 - 2. 24
 - 3. 36
 - 4. 30

Question ID : 9489115545
Option 1 ID : 94891122179
Option 2 ID : 94891122180
Option 3 ID : 94891122177
Option 4 ID : 94891122178
Status : Answered
Chosen Option : 2



Download RRB Exams PDF E-BOOKS

[CLICK HERE](#)

Q.17 Select the number that can replace the question mark (?) in the following series.

12, 16, 11, 15, 10, 14, ?

- Ans
- 1. 8
 - 2. 18
 - 3. 9
 - 4. 19

Question ID : 9489115885
Option 1 ID : 94891123538
Option 2 ID : 94891123537
Option 3 ID : 94891123539
Option 4 ID : 94891123540
Status : Answered
Chosen Option : 3

Q.18 The points A (1, 2), B (3, 4) and C (4, 1) are the vertices of a triangle which is:

- Ans
- 1. scalene
 - 2. isosceles
 - 3. right-angled
 - 4. equilateral

Question ID : 9489115573
Option 1 ID : 94891122291
Option 2 ID : 94891122290
Option 3 ID : 94891122292
Option 4 ID : 94891122289
Status : Answered
Chosen Option : 2

Q.19 In India, impeachment process is NOT applicable to _____ for removal from office.

- Ans
- 1. Chief Election Commissioner
 - 2. the Prime Minister
 - 3. Chief Justice of India
 - 4. President of India

Question ID : 9489115232
Option 1 ID : 94891120925
Option 2 ID : 94891120926
Option 3 ID : 94891120928
Option 4 ID : 94891120927
Status : Answered
Chosen Option : 2



Q.20 If $\sin(A - B) = \frac{1}{2}$ and $\cos(A + B) = \frac{1}{2}$ with $0^\circ < (A + B) \leq 90^\circ$, $A > B$, then find the measure of A and B.

- Ans
- 1. $25^\circ, 20^\circ$
 - 2. $40^\circ, 35^\circ$
 - 3. $45^\circ, 15^\circ$
 - 4. $35^\circ, 15^\circ$

Question ID : 9489115570
Option 1 ID : 94891122278
Option 2 ID : 94891122279
Option 3 ID : 94891122277
Option 4 ID : 94891122280
Status : Answered
Chosen Option : 3

Q.21 भारत का कौन सा शहर डेट्रॉइट ऑफ एशिया ("Detroit of Asia") और ऑटोमोबाइल कैपिटल ("Automobile Capital") के नाम से लोकप्रिय है?

- Ans
- 1. चेन्नई
 - 2. जयपुर
 - 3. कोयंबटूर
 - 4. हैदराबाद

Question ID : 9489115225
Option 1 ID : 94891120897
Option 2 ID : 94891120900
Option 3 ID : 94891120898
Option 4 ID : 94891120899
Status : Answered
Chosen Option : 1

Q.22 Three of the four given options are alike in some manner. Select the odd one out.

Bangkok, Russia, Kuala Lumpur, Paris.

- Ans
- 1. Bangkok
 - 2. Russia
 - 3. Kuala Lumpur
 - 4. Paris

Question ID : 9489115893
Option 1 ID : 94891123572
Option 2 ID : 94891123571
Option 3 ID : 94891123570
Option 4 ID : 94891123569
Status : Answered
Chosen Option : 2



Q.23 A number consists of 3 digits whose sum is 18 and the middle digit is equal to the sum of the other two. If the number increases by 297 when its digits are reversed, then what is the number?

- Ans
- 1. 585
 - 2. 495
 - 3. 486
 - 4. 396

Question ID : 9489115553
Option 1 ID : 94891122211
Option 2 ID : 94891122209
Option 3 ID : 94891122212
Option 4 ID : 94891122210
Status : Answered
Chosen Option : 4

Q.24 'R S S' means that R is the brother of S.

'R @ S' means R is the wife of S.

'R # S' means R is the daughter of S.

'R > S' means R is the father of S.

Based on the above, which option indicates that D is the father-in-law of A?

- Ans
- 1. A @ B S E > C # D
 - 2. A @ B S C # D > E
 - 3. A @ B S C # E > D
 - 4. A @ E S B > C # D

Question ID : 9489115880
Option 1 ID : 94891123519
Option 2 ID : 94891123517
Option 3 ID : 94891123520
Option 4 ID : 94891123518
Status : Answered
Chosen Option : 2

Q.25 Two trains 136 m and 185 m in length respectively are running in opposite directions, one at a speed of 70 km/h and the other at a speed of 65 km/h. In what time will they be completely clear of each other from the moment they meet?

- Ans
- 1. 9.67 s
 - 2. 8.56 s
 - 3. 7.43 s
 - 4. 4.78 s

Question ID : 9489115563
Option 1 ID : 94891122251
Option 2 ID : 94891122249
Option 3 ID : 94891122250
Option 4 ID : 94891122252
Status : Answered
Chosen Option : 2

Q.26 There is a regular hexagon of side 5 cm. Find its area.

- Ans
- 1. $\frac{75\sqrt{3}}{2} \text{ cm}^2$
 - 2. $36\sqrt{3} \text{ cm}^2$
 - 3. $25\sqrt{3} \text{ cm}^2$
 - 4. $\frac{50\sqrt{3}}{3} \text{ cm}^2$

Question ID : 9489115567
Option 1 ID : 94891122267
Option 2 ID : 94891122268
Option 3 ID : 94891122266
Option 4 ID : 94891122265
Status : Answered
Chosen Option : 1

Q.27 Internet was started in India on:

- Ans
- 1. 9th August, 1996
 - 2. 11th August, 1995
 - 3. 8th August, 1994
 - 4. 15th August, 1995

Question ID : 9489115238
Option 1 ID : 94891120952
Option 2 ID : 94891120950
Option 3 ID : 94891120951
Option 4 ID : 94891120949
Status : Not Answered
Chosen Option : --



Q.28 In which of the following cities is the Charminar situated?

- Ans
- 1. Bangalore
 - 2. New Delhi
 - 3. Hyderabad
 - 4. Kanpur

Question ID : 9489115208
Option 1 ID : 94891120829
Option 2 ID : 94891120830
Option 3 ID : 94891120831
Option 4 ID : 94891120832
Status : Answered
Chosen Option : 3

Q.29 The first Lokpal Bill was introduced in the Indian Parliament in:

- Ans
- 1. 1965
 - 2. 1975
 - 3. 1968
 - 4. 1972

Question ID : 9489115228
Option 1 ID : 94891120910
Option 2 ID : 94891120909
Option 3 ID : 94891120911
Option 4 ID : 94891120912
Status : Not Answered
Chosen Option : --

Q.30 Find the smallest 4-digit number which when divided by 2, 3 and 5 leaves a remainder of 1 in each case?

- Ans
- 1. 1041
 - 2. 1091
 - 3. 1001
 - 4. 1021

Question ID : 9489115547
Option 1 ID : 94891122185
Option 2 ID : 94891122188
Option 3 ID : 94891122186
Option 4 ID : 94891122187
Status : Answered
Chosen Option : 4



Q.31 The ages of A and B are in the ratio of 5 : 3. After 5 years the ratio of their ages will be 10 : 7. What is the difference between present ages of A and B(in years)?

- Ans 1. 6
 2. 3
 3. 4
 4. 5

Question ID : 9489115571
Option 1 ID : 94891122284
Option 2 ID : 94891122281
Option 3 ID : 94891122282
Option 4 ID : 94891122283
Status : Answered
Chosen Option : 1

Q.32 18 years is the average age of 36 boys and their professor. The average becomes 17 years if we leave the professor out. What is the age (in years) of the professor?

- Ans 1. 54
 2. 34
 3. 44
 4. 64

Question ID : 9489115565
Option 1 ID : 94891122258
Option 2 ID : 94891122260
Option 3 ID : 94891122257
Option 4 ID : 94891122259
Status : Answered
Chosen Option : 1

Q.33 The total measure of angles in a triangle is:

- Ans 1. 360°
 2. 270°
 3. 90°
 4. 180°

Question ID : 9489115569
Option 1 ID : 94891122276
Option 2 ID : 94891122275
Option 3 ID : 94891122273
Option 4 ID : 94891122274
Status : Answered
Chosen Option : 4

Q.34 Read the given statements and decide which of the conclusions given in the options logically follow from the statements.

Statements:

- I. Some artists are painters.
- II. Some painters are writers.
- III. All writers are poets.

- Ans**
- 1. Some poets are painters.
 - 2. All writers are artists.
 - 3. All artists are poets.
 - 4. Some poets are artists.

Question ID : 9489115877
Option 1 ID : 94891123508
Option 2 ID : 94891123505
Option 3 ID : 94891123506
Option 4 ID : 94891123507
Status : Answered
Chosen Option : 1

Q.35 Who among the following created history by becoming the first girl student of the Indian Institute of Technology – Madras (IIT-M) to win the President of India Prize 2019?

- Ans**
- 1. Kavitha Swaminathan
 - 2. Payal Jangid
 - 3. Kalli Purie
 - 4. Kavitha Gopal

Question ID : 9489115204
Option 1 ID : 94891120814
Option 2 ID : 94891120815
Option 3 ID : 94891120813
Option 4 ID : 94891120816
Status : Answered
Chosen Option : 2

Q.36 In which year was the World Happiness Report published for the first time?

- Ans**
- 1. 2010
 - 2. 2012
 - 3. 2017
 - 4. 2015

Question ID : 9489115240
Option 1 ID : 94891120958
Option 2 ID : 94891120957
Option 3 ID : 94891120960
Option 4 ID : 94891120959
Status : Not Answered
Chosen Option : --



Q.37 What form of art is used to decorate the floor in front of the house?

- Ans
- 1. Worli
 - 2. Kolam
 - 3. Madhubani
 - 4. Mehndi

Question ID : 9489115242
Option 1 ID : 94891120966
Option 2 ID : 94891120968
Option 3 ID : 94891120965
Option 4 ID : 94891120967
Status : Answered
Chosen Option : 1

Q.38 The Dilwara temple is situated at _____.

- Ans
- 1. Aurangabad
 - 2. Khajuraho
 - 3. Bhubaneswar
 - 4. Mount Abu

Question ID : 9489115209
Option 1 ID : 94891120834
Option 2 ID : 94891120835
Option 3 ID : 94891120833
Option 4 ID : 94891120836
Status : Answered
Chosen Option : 4

Q.39 Which of the following is NOT a UN Agenda for Sustainable Development 2030?

- Ans
- 1. Reduce inequality within and among nations
 - 2. End poverty in all its forms everywhere
 - 3. Reduce the total population of the world by $\frac{1}{3}$ rd
 - 4. Achieve food security by 2030

Question ID : 9489115243
Option 1 ID : 94891120972
Option 2 ID : 94891120969
Option 3 ID : 94891120970
Option 4 ID : 94891120971
Status : Answered
Chosen Option : 3



Q.40 नीचे दिए गए चार शब्दों में से तीन किसी प्रकार से संगत हैं और एक असंगत है। असंगत का चयन कीजिए।

काँटन, नायलॉन, सिल्क, कश्मीरी ऊन

- Ans
- 1. कश्मीरी ऊन
 - 2. नायलॉन
 - 3. काँटन
 - 4. सिल्क

Question ID : 9489115894

Option 1 ID : 94891123576

Option 2 ID : 94891123574

Option 3 ID : 94891123575

Option 4 ID : 94891123573

Status : Answered

Chosen Option : 2

Q.41 Two-fifth of seven-seventeenth of three-fifth of a number is 84. Find 40% of that number.

- Ans
- 1. 850
 - 2. 340
 - 3. 280
 - 4. 570

Question ID : 9489115551

Option 1 ID : 94891122201

Option 2 ID : 94891122203

Option 3 ID : 94891122204

Option 4 ID : 94891122202

Status : Answered

Chosen Option : 2

Q.42 मॉनसून-पूर्व वर्षा, जो केरल और कर्नाटक के तटीय क्षेत्रों में एक सामान्य घटना है, को स्थानीय तौर पर _____ के नाम से जाना जाता है।

- Ans
- 1. शीत वर्षा (winter showers)
 - 2. काल बैसाखी (Nor Westers)
 - 3. आम वर्षा (mango showers)
 - 4. मंजरी वर्षा (blossom showers)

Question ID : 9489115222

Option 1 ID : 94891120886

Option 2 ID : 94891120888

Option 3 ID : 94891120887

Option 4 ID : 94891120885

Status : Not Answered

Chosen Option : --



Download RRB Exams PDF E-BOOKS

[CLICK HERE](#)

Q.43 The first nuclear bomb experiment test in India was carried out in the year:

- Ans
- 1. 1973
 - 2. 1974
 - 3. 1976
 - 4. 1999

Question ID : 9489115230
Option 1 ID : 94891120917
Option 2 ID : 94891120919
Option 3 ID : 94891120918
Option 4 ID : 94891120920
Status : Answered
Chosen Option : 2

Q.44 What is correct about the Khilafat Movement in India?

- Ans
- 1. It was a movement to restore the Mughal Royal family in India
 - 2. It was a movement in support of the Turkish Sultan
 - 3. It was a movement against the massacre of Jallianwala Bagh
 - 4. It was a movement in demand of Pakistan

Question ID : 9489115220
Option 1 ID : 94891120878
Option 2 ID : 94891120880
Option 3 ID : 94891120879
Option 4 ID : 94891120877
Status : Answered
Chosen Option : 2

Q.45 एक फूलदान का क्रय मूल्य ₹120 है। यदि दुकानदार इसे 5% की हानि पर बेचता है, तो इसका विक्रय मूल्य (₹ में) क्या होगा?

- Ans
- 1. 125
 - 2. 126
 - 3. 115
 - 4. 114

Question ID : 9489115560
Option 1 ID : 94891122239
Option 2 ID : 94891122238
Option 3 ID : 94891122240
Option 4 ID : 94891122237
Status : Answered
Chosen Option : 4



Q.46 Anuj is the son of the only daughter of the father of Ajay's brother. How is Ajay related to Anuj?

- Ans
- 1. Sister's son
 - 2. Father's brother
 - 3. Mother's brother
 - 4. Sister's husband

Question ID : 9489115876
Option 1 ID : 94891123501
Option 2 ID : 94891123504
Option 3 ID : 94891123503
Option 4 ID : 94891123502
Status : Answered
Chosen Option : 3

Q.47 The length of a rectangle is three-fifths of the radius of a circle. The radius of the circle is equal to twice the side of a square, whose area is 3025 sq. units. The breadth of the rectangle is one-fifth of the side of the square. What is the area (in sq. units) of the rectangle?

- Ans
- 1. 689
 - 2. 305
 - 3. 726
 - 4. 708

Question ID : 9489115564
Option 1 ID : 94891122256
Option 2 ID : 94891122253
Option 3 ID : 94891122255
Option 4 ID : 94891122254
Status : Answered
Chosen Option : 3

Q.48 LPG का पूर्ण रूप क्या है?

- Ans
- 1. लिक्विड पेट्रोलियम गैस (Liquid Petroleum Gas)
 - 2. लिक्विफाइड पेट्रोलियम गैस (Liquefied Petroleum Gas)
 - 3. लिक्विड पेट्रोल गैस (Liquid Petrol Gas)
 - 4. लिक्विडेड पेट्रोल गैस (Liquided Petrol Gas)

Question ID : 9489115212
Option 1 ID : 94891120845
Option 2 ID : 94891120846
Option 3 ID : 94891120848
Option 4 ID : 94891120847
Status : Answered
Chosen Option : 2



Q.49 Penicillium is a/an _____.

- Ans
- 1. fungi
 - 2. bacteria
 - 3. virus
 - 4. algae

Question ID : 9489115214
Option 1 ID : 94891120855
Option 2 ID : 94891120856
Option 3 ID : 94891120853
Option 4 ID : 94891120854
Status : Answered
Chosen Option : 1

Q.50 The Directive Principles of State Policy are mentioned in which of the following parts of the constitution of India?

- Ans
- 1. Part 5
 - 2. Part 6
 - 3. Part 3
 - 4. Part 4

Question ID : 9489115227
Option 1 ID : 94891120907
Option 2 ID : 94891120908
Option 3 ID : 94891120905
Option 4 ID : 94891120906
Status : Answered
Chosen Option : 4

Q.51 A deposited ₹8,000 in a bank at 8% per annum simple interest. B deposited ₹6,000 at 10% compound interest per annum. After 3 years the difference between their interest will be:

- Ans
- 1. ₹68
 - 2. ₹66
 - 3. ₹88
 - 4. ₹78

Question ID : 9489115556
Option 1 ID : 94891122223
Option 2 ID : 94891122221
Option 3 ID : 94891122224
Option 4 ID : 94891122222
Status : Answered
Chosen Option : 2

Q.52 Income and expenditure of a person are in the ratio of 9 : 5. If the income of the person is ₹27,000, then find his savings.

- Ans
- 1. ₹13,564
 - 2. ₹10,000
 - 3. ₹12,000
 - 4. ₹9,678

Question ID : 9489115554
Option 1 ID : 94891122216
Option 2 ID : 94891122214
Option 3 ID : 94891122213
Option 4 ID : 94891122215
Status : Answered
Chosen Option : 3

Q.53 In a farmer's house, there are Chickens and goats. The total number of their heads is 42 and the total number of their legs is 138. Find the number of Chickens.

- Ans
- 1. 15
 - 2. 18
 - 3. 22
 - 4. 20

Question ID : 9489115550
Option 1 ID : 94891122198
Option 2 ID : 94891122200
Option 3 ID : 94891122199
Option 4 ID : 94891122197
Status : Answered
Chosen Option : 1

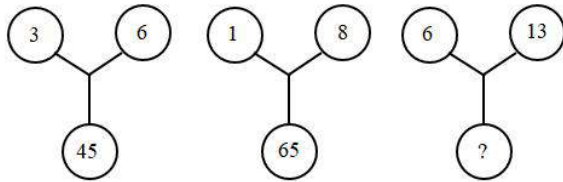
Q.54 If untreated, HIV can lead to _____.

- Ans
- 1. AIDS
 - 2. plague
 - 3. cancer
 - 4. hepatitis

Question ID : 9489115215
Option 1 ID : 94891120860
Option 2 ID : 94891120858
Option 3 ID : 94891120857
Option 4 ID : 94891120859
Status : Answered
Chosen Option : 1



Q.55 Study the given pattern carefully and select the number that can replace the question mark (?) in it.



- Ans
- 1. 163
 - 2. 85
 - 3. 136
 - 4. 205

Question ID : 9489115901
 Option 1 ID : 94891123604
 Option 2 ID : 94891123602
 Option 3 ID : 94891123603
 Option 4 ID : 94891123601
 Status : Answered
 Chosen Option : 4

Q.56 Which one among the following is the Asia's first stock exchange?

- Ans
- 1. Tokyo Stock Exchange
 - 2. Shanghai Stock Exchange
 - 3. National Stock Exchange
 - 4. Bombay Stock Exchange

Question ID : 9489115237
 Option 1 ID : 94891120948
 Option 2 ID : 94891120945
 Option 3 ID : 94891120946
 Option 4 ID : 94891120947
 Status : Answered
 Chosen Option : 4

Q.57 ABC is a triangle. BI and CI are angle bisectors of $\angle ABC$ and $\angle ACB$. $\angle BAC = 45^\circ$. Find the measure of $\angle BIC$.

- Ans
- 1. 120°
 - 2. 112.5°
 - 3. 118.5°
 - 4. 135°

Question ID : 9489115572
 Option 1 ID : 94891122286
 Option 2 ID : 94891122288
 Option 3 ID : 94891122285
 Option 4 ID : 94891122287
 Status : Answered
 Chosen Option : 2

Q.58 If the numerator of a fraction is increased by 30% and its denominator is decreased by 35%, the value of the fraction

becomes $\frac{3}{15}$. Find the original fraction.

Ans

1. $\frac{3}{5}$

2. $\frac{1}{5}$

3. $\frac{3}{10}$

4. $\frac{1}{10}$

Question ID : 9489115559

Option 1 ID : 94891122236

Option 2 ID : 94891122233

Option 3 ID : 94891122234

Option 4 ID : 94891122235

Status : Answered

Chosen Option : 4

Q.59 Diphu pass is situated in:

Ans

1. Darjeeling and Sikkim Himalayas

2. Kashmir or North western Himalayas

3. Pir Panjal range in Himalayas

4. Arunachal Himalayas

Question ID : 9489115224

Option 1 ID : 94891120894

Option 2 ID : 94891120893

Option 3 ID : 94891120895

Option 4 ID : 94891120896

Status : Answered

Chosen Option : 4



Download RRB Exams PDF E-BOOKS

[CLICK HERE](#)

Q.60 In India, National Income is computed by:

- Ans
- 1. National Sample Survey Office
 - 2. Central Statistical Organisation
 - 3. NITI Aayog
 - 4. Ministry of Finance

Question ID : 9489115239

Option 1 ID : 94891120953

Option 2 ID : 94891120955

Option 3 ID : 94891120956

Option 4 ID : 94891120954

Status : Answered

Chosen Option : 2

Q.61 दिए गए कथनों को पढ़ें और बताएं कि दिए गए विकल्पों में से कौन सा/से निष्कर्ष कथनों का तार्किक रूप से पालन करता है/करते हैं।

कथन:

- I. पुलिस ने देर रात के दौरान चॉकसी बढ़ा दी है।
- II. देर रात में छोटे-मोटे अपराधों में कमी आई है।

Ans 1.

कथन II संभावित कारण है और कथन I इसका संभावित प्रभाव है।

2. I और II दोनों कथन एक ही कारण के प्रभाव हैं।

3.

कथन I संभावित कारण है और कथन II इसका संभावित प्रभाव है।

4. I और II दोनों कथन स्वतंत्र कारण हैं।

Question ID : 9489115881

Option 1 ID : 94891123522

Option 2 ID : 94891123524

Option 3 ID : 94891123521

Option 4 ID : 94891123523

Status : Answered

Chosen Option : 3



Download RRB Exams PDF E-BOOKS

[CLICK HERE](#)

Q.62 As of October 2020, how many Public Sector banks are there in India?

- Ans
- 1. 12
 - 2. 20
 - 3. 22
 - 4. 21

Question ID : 9489115223
Option 1 ID : 94891120892
Option 2 ID : 94891120891
Option 3 ID : 94891120889
Option 4 ID : 94891120890
Status : Answered
Chosen Option : 1

Q.63 इफेड्रा पौधे (ephedra plant) को किसके अंतर्गत वर्गीकृत किया गया है?

- Ans
- 1. टेरिडोफाइटा (pteridophytes)
 - 2. अनावृतबीजी (gymnosperm)
 - 3. आवृतबीजी (angiosperm)
 - 4. ब्रायोफाइटा (bryophytes)

Question ID : 9489115216
Option 1 ID : 94891120862
Option 2 ID : 94891120864
Option 3 ID : 94891120861
Option 4 ID : 94891120863
Status : Not Answered
Chosen Option : --

Q.64 The sum of 4 consecutive odd numbers is 160. Find the smallest number.

- Ans
- 1. 37
 - 2. 27
 - 3. 25
 - 4. 35

Question ID : 9489115549
Option 1 ID : 94891122196
Option 2 ID : 94891122193
Option 3 ID : 94891122194
Option 4 ID : 94891122195
Status : Answered
Chosen Option : 1



Q.65 In a certain code language, 'Tuesday is sunny' is written as 'CNG', 'Sunny loves ice-cream' is written as 'PGD', 'Ice-cream melts fast' is written as 'PWL' and 'Jack runs fast' is written as 'LAT'.

Which of the options below would most likely be used to write 'Sunny bowls fast' in that language?

- Ans
- 1. GDP
 - 2. GXL
 - 3. PLD
 - 4. GLP

Question ID : 9489115879
Option 1 ID : 94891123515
Option 2 ID : 94891123513
Option 3 ID : 94891123516
Option 4 ID : 94891123514
Status : Answered
Chosen Option : 2

Q.66 If a positive number is subtracted from its square, we get 812. Find the number.

- Ans
- 1. 25
 - 2. 23
 - 3. 29
 - 4. 27

Question ID : 9489115552
Option 1 ID : 94891122206
Option 2 ID : 94891122205
Option 3 ID : 94891122208
Option 4 ID : 94891122207
Status : Answered
Chosen Option : 3

Q.67 A light-year is a unit of _____

- Ans
- 1. Intensity of light
 - 2. Time
 - 3. Distance
 - 4. Mass

Question ID : 9489115211
Option 1 ID : 94891120841
Option 2 ID : 94891120844
Option 3 ID : 94891120843
Option 4 ID : 94891120842
Status : Answered
Chosen Option : 3



Q.68 What is the 50th term of Arithmetic Progression 3, 8, 13, 18, 23,

- Ans
- 1. 267
 - 2. 150
 - 3. 248
 - 4. 345

Question ID : 9489115544
Option 1 ID : 94891122174
Option 2 ID : 94891122173
Option 3 ID : 94891122175
Option 4 ID : 94891122176
Status : Answered
Chosen Option : 3

Q.69 Which country in the world has the highest natural gas reserves?

- Ans
- 1. Russia
 - 2. Iraq
 - 3. Iran
 - 4. UAE

Question ID : 9489115235
Option 1 ID : 94891120937
Option 2 ID : 94891120939
Option 3 ID : 94891120940
Option 4 ID : 94891120938
Status : Answered
Chosen Option : 4

Q.70 Select the number that can replace the question mark (?) in the following series.

730, 1001, 1332, ?

- Ans
- 1. 1632
 - 2. 1663
 - 3. 1729
 - 4. 1792

Question ID : 9489115896
Option 1 ID : 94891123583
Option 2 ID : 94891123582
Option 3 ID : 94891123581
Option 4 ID : 94891123584
Status : Answered
Chosen Option : 3



Q.71 Who is the first women Indian Police Service officer to reach the South pole?

- Ans
- 1. Raisina Dialogue
 - 2. Aparna Kumar
 - 3. Kiran Bedi
 - 4. Kavita Desai

Question ID : 9489115205
Option 1 ID : 94891120819
Option 2 ID : 94891120817
Option 3 ID : 94891120818
Option 4 ID : 94891120820
Status : Answered
Chosen Option : 2

Q.72 In which year did Gandhiji begin a defiant march to the sea to protest against the British monopoly on salt?

- Ans
- 1. 1929
 - 2. 1927
 - 3. 1928
 - 4. 1930

Question ID : 9489115217
Option 1 ID : 94891120867
Option 2 ID : 94891120868
Option 3 ID : 94891120865
Option 4 ID : 94891120866
Status : Answered
Chosen Option : 1

Q.73 Find $\sqrt{\frac{1521}{1849}}$

- Ans
- 1. $\frac{39}{43}$
 - 2. $\frac{32}{33}$
 - 3. $\frac{37}{56}$
 - 4. $\frac{29}{23}$

Question ID : 9489115548
Option 1 ID : 94891122190
Option 2 ID : 94891122192
Option 3 ID : 94891122191
Option 4 ID : 94891122189
Status : Answered
Chosen Option : 1



Q.74 Select the option that is related to the third term in the same way as the second term is related to the first term.

Game : Chess :: Device : ?

- Ans**
- 1. Chair
 - 2. Engineer
 - 3. Computer
 - 4. Cupboard

Question ID : 9489115875
Option 1 ID : 94891123497
Option 2 ID : 94891123498
Option 3 ID : 94891123500
Option 4 ID : 94891123499
Status : Answered
Chosen Option : 3

Q.75 Find the area of a rhombus whose diagonals are of lengths 10 cm and 8.2 cm.

- Ans**
- 1. 41 cm²
 - 2. 37 cm²
 - 3. 39 cm²
 - 4. 35 cm²

Question ID : 9489115566
Option 1 ID : 94891122264
Option 2 ID : 94891122262
Option 3 ID : 94891122263
Option 4 ID : 94891122261
Status : Answered
Chosen Option : 1

Q.76 World Red Cross day is celebrated on:

- Ans**
- 1. 8th July
 - 2. 8th May
 - 3. 15th June
 - 4. 18th May

Question ID : 9489115234
Option 1 ID : 94891120936
Option 2 ID : 94891120934
Option 3 ID : 94891120933
Option 4 ID : 94891120935
Status : Answered
Chosen Option : 2



Q.77 15 men can complete a task in 30 days. In how many days can 20 men complete that task?

- Ans
- 1. 24
 - 2. 28.5
 - 3. 22.5
 - 4. 26

Question ID : 9489115561
Option 1 ID : 94891122244
Option 2 ID : 94891122241
Option 3 ID : 94891122242
Option 4 ID : 94891122243
Status : Answered
Chosen Option : 3

Q.78 The Poona Pact was signed between:

- Ans
- 1. M K Gandhi and B R Ambedkar
 - 2. M K Gandhi and S C Bose
 - 3. M K Gandhi and Lord Irwin
 - 4. M K Gandhi and M A Jinnah

Question ID : 9489115218
Option 1 ID : 94891120872
Option 2 ID : 94891120871
Option 3 ID : 94891120870
Option 4 ID : 94891120869
Status : Answered
Chosen Option : 1

Q.79 Find the HCF of $\frac{2}{9}$, $\frac{16}{81}$, $\frac{32}{117}$ and $\frac{54}{189}$.

- Ans
- 1. $\frac{4}{6459}$
 - 2. $\frac{8}{8483}$
 - 3. $\frac{2}{7371}$
 - 4. $\frac{4}{1899}$

Question ID : 9489115546
Option 1 ID : 94891122184
Option 2 ID : 94891122183
Option 3 ID : 94891122182
Option 4 ID : 94891122181
Status : Answered



Download RRB Exams PDF E-BOOKS

[CLICK HERE](#)

Q.80 Which of the following is India's largest oil company?

- Ans
- 1. Hindustan Petroleum
 - 2. Bharat Petroleum
 - 3. Indian Oil Corporation Limited
 - 4. Oil and Natural Gas Company

Question ID : 9489115241
Option 1 ID : 94891120962
Option 2 ID : 94891120961
Option 3 ID : 94891120963
Option 4 ID : 94891120964
Status : Not Answered
Chosen Option : --

Q.81 Age of A is 3 times more than that of B and half as that of C. If the sum of their ages is 120 years, what is the age (in years) of A?

- Ans
- 1. 26
 - 2. 36
 - 3. 34
 - 4. 65

Question ID : 9489115888
Option 1 ID : 94891123550
Option 2 ID : 94891123552
Option 3 ID : 94891123551
Option 4 ID : 94891123549
Status : Answered
Chosen Option : 2

Q.82 निम्नलिखित में से कौन सा ऊर्जा का एक नवीकरणीय स्रोत है?

- Ans
- 1. पेट्रोलियम
 - 2. कोयला
 - 3. प्राकृतिक गैस
 - 4. संश्लेषण गैस (Syngas)

Question ID : 9489115233
Option 1 ID : 94891120930
Option 2 ID : 94891120929
Option 3 ID : 94891120932
Option 4 ID : 94891120931
Status : Answered
Chosen Option : 4



Q.83 Who was the runner-up in the men's singles Australian Open final in 2020?

- Ans
- 1. Dominic Thiem
 - 2. Novak Djokovic
 - 3. Frances Tiafoe
 - 4. Rafael Nadal

Question ID : 9489115207
Option 1 ID : 94891120827
Option 2 ID : 94891120826
Option 3 ID : 94891120828
Option 4 ID : 94891120825
Status : Answered
Chosen Option : 4

Q.84 जीन पियरे हैरिसन (Jean Pierre Harrison) द्वारा लिखी गई निम्न में से कौन सी पुस्तक कल्पना चावला के जीवन पर आधारित है?

- Ans
- 1. द ल्यूमिनरीज़ (The Luminaries)
 - 2. स्लीपिंग ऑन जुपिटर (Sleeping on Jupiter)
 - 3. द सेंस ऑफ़ एन एंडिंग (The Sense of an Ending)
 - 4. द एज ऑफ़ टाइम (The Edge of Time)

Question ID : 9489115210
Option 1 ID : 94891120839
Option 2 ID : 94891120840
Option 3 ID : 94891120838
Option 4 ID : 94891120837
Status : Not Answered
Chosen Option : --

Q.85 A car can go 150 km with 20 L of petrol. How far (in km) can it go with 30 L of petrol?

- Ans
- 1. 160
 - 2. 200
 - 3. 225
 - 4. 175

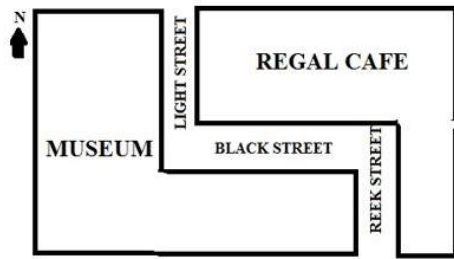
Question ID : 9489115562
Option 1 ID : 94891122245
Option 2 ID : 94891122246
Option 3 ID : 94891122248
Option 4 ID : 94891122247
Status : Answered
Chosen Option : 3



Download RRB Exams PDF E-BOOKS

[CLICK HERE](#)

Q.86 Jack is walking on Light Street and can see the Regal Café to his left. What direction is Jack facing?



- Ans
- 1. West
 - 2. North
 - 3. South
 - 4. East

Question ID : 9489115889

Option 1 ID : 94891123556

Option 2 ID : 94891123553

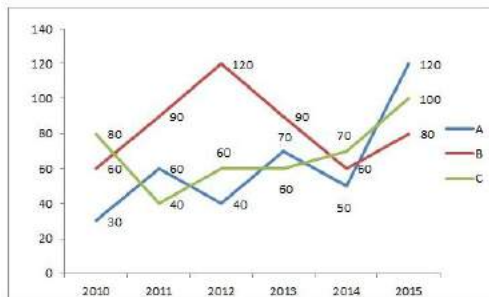
Option 3 ID : 94891123554

Option 4 ID : 94891123555

Status : Answered

Chosen Option : 3

Q.87 The following graph shows the profit made by three companies, A, B and C, over 6 years. Answer the question given below based on the graph.



For which two years was the total profit made by the three companies the same?

- Ans
- 1. 2013 and 2014
 - 2. 2012 and 2013
 - 3. 2012 and 2015
 - 4. 2013 and 2015

Question ID : 9489115890

Option 1 ID : 94891123560

Option 2 ID : 94891123559

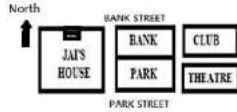
Option 3 ID : 94891123557

Option 4 ID : 94891123558

Status : Answered

Chosen Option : 2

Q.88 जय अपने घर से चलता है और पूर्व दिशा में बैंक स्ट्रीट (BANK STREET) की ओर मुड़ जाता है। वह दो ब्लॉक चलता है और दक्षिण की ओर मुड़ जाता है। फिर वह लगातार सड़क के अंत तक चलता है। जय निम्नलिखित में से किसके नजदीक है?



- Ans**
- 1. पार्क (PARK)
 - 2. क्लब (CLUB)
 - 3. बैंक (BANK)
 - 4. थिएटर (THEATRE)

Question ID : 9489115891

Option 1 ID : 94891123562

Option 2 ID : 94891123563

Option 3 ID : 94891123561

Option 4 ID : 94891123564

Status : Answered

Chosen Option : 4

Q.89 The following table shows the salary, incentive and tax paid by a factory over 5 years. Based on the table answer the question given below.

Year	Salary	Incentive	Tax
2010	188	4	68
2011	232	4.52	75
2012	224	4.84	46
2013	236	5.68	78
2014	320	4.96	84

Find the percentage of the total incentive paid over the 5 years as compared to the total salary paid over the same period.

- Ans**
- 1. 2%
 - 2. 0.2%
 - 3. 20%
 - 4. 0.02%

Question ID : 9489115892

Option 1 ID : 94891123567

Option 2 ID : 94891123565

Option 3 ID : 94891123566

Option 4 ID : 94891123568

Status : Answered

Chosen Option : 1

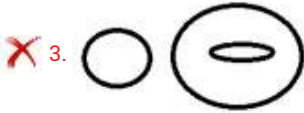
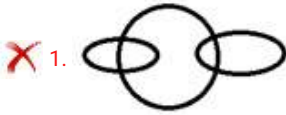


Download RRB Exams PDF E-BOOKS

[CLICK HERE](#)

Q.90 Select the Venn diagram that best represents the relationship between fruits, pomegranates and grapes.

Ans



Question ID : 9489115897

Option 1 ID : 94891123585

Option 2 ID : 94891123587

Option 3 ID : 94891123586

Option 4 ID : 94891123588

Status : Answered

Chosen Option : 2

Q.91 एक कथन के बाद दो तर्क दिए गए हैं। बताएं कि कथन के संदर्भ में कौन से तर्क पुष्ट हैं।

कथन:

स्वास्थ्य सेवाओं का राष्ट्रीयकरण किया जाना चाहिए।

तर्क:

- I. अनेक देशों में स्वास्थ्य सेवाएं राष्ट्रीय स्तर पर उपलब्ध कराई जाती हैं।
- II. स्वास्थ्य सेवाओं के राष्ट्रीयकरण से चिकित्सकों के इस क्षेत्र में कैरियर बनाने में कमी आएगी।

Ans

✓ 1. न तो तर्क I और न ही तर्क II पुष्ट है।

✗ 2. तर्क I पुष्ट है।

✗ 3. या तो तर्क I या तर्क II पुष्ट है।

✗ 4. तर्क II पुष्ट है।

Question ID : 9489115882

Option 1 ID : 94891123528

Option 2 ID : 94891123525

Option 3 ID : 94891123527

Option 4 ID : 94891123526

Status : Answered



Download RRB Exams PDF E-BOOKS

[CLICK HERE](#)

Q.92 Among the following words, which one will come first if they are arranged as per their order in an English dictionary?

- Ans
- 1. Peasant
 - 2. Peacock
 - 3. People
 - 4. Penguin

Question ID : 9489115898
Option 1 ID : 94891123591
Option 2 ID : 94891123590
Option 3 ID : 94891123592
Option 4 ID : 94891123589
Status : Answered
Chosen Option : 2

Q.93 If the following series is written in the reverse order, then which character will be 6th to the right of the 15th character from the right end?

4 + R P q - T & V % f 3 G A B \$

- Ans
- 1. —
 - 2. 3
 - 3. V
 - 4. &

Question ID : 9489115884
Option 1 ID : 94891123533
Option 2 ID : 94891123535
Option 3 ID : 94891123536
Option 4 ID : 94891123534
Status : Answered
Chosen Option : 3

Q.94 How will you write 1.85 hours in hours, minutes and seconds?

- Ans
- 1. 1 hour, 5 minutes, 10 seconds
 - 2. 2 hour, 15 minutes
 - 3. 1 hour, 51 minutes
 - 4. 1 hour, 8 minutes, 5 seconds

Question ID : 9489115887
Option 1 ID : 94891123548
Option 2 ID : 94891123547
Option 3 ID : 94891123545
Option 4 ID : 94891123546
Status : Answered
Chosen Option : 3

Q.95 उस विकल्प का चयन करें जिनके शब्दों के मध्य वही संबंध है, जो दिए गए शब्द-युग्म में है।

वर्ग (Square) : पंचभुज (Pentagon) :: ?

- Ans
- 1. त्रिभुज (Triangle) : समचतुर्भुज (Rhombus)
 - 2. विकर्ण (Diagonal) : कर्ण (Hypotenuse)
 - 3. भुजा (Side) : कोण (Angle)
 - 4. त्रिज्या (Radius) : परिमाप (Perimeter)

Question ID : 9489115878

Option 1 ID : 94891123510

Option 2 ID : 94891123512

Option 3 ID : 94891123509

Option 4 ID : 94891123511

Status : Answered

Chosen Option : 1

Q.96 Select the option that is related to the third term in the same way as the second term is related to the first term.

VERGT : TCFER :: FMZQO : ?

- Ans
- 1. HOBSQ
 - 2. GNARP
 - 3. ELYPN
 - 4. DKXOM

Question ID : 9489115874

Option 1 ID : 94891123496

Option 2 ID : 94891123495

Option 3 ID : 94891123494

Option 4 ID : 94891123493

Status : Answered

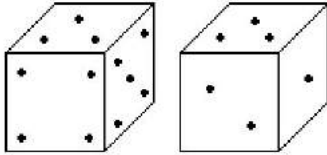
Chosen Option : 4



Download RRB Exams PDF E-BOOKS

[CLICK HERE](#)

Q.97 Two different positions of the same dice are shown. Select the number of dots that will be on the face opposite to the one with 2 dots.



- Ans
- 1. 4
 - 2. 3
 - 3. 1
 - 4. 5

Question ID : 9489115899
Option 1 ID : 94891123594
Option 2 ID : 94891123593
Option 3 ID : 94891123596
Option 4 ID : 94891123595
Status : Answered
Chosen Option : 1

Q.98 Three of the four publications listed are alike in some manner. Select the odd one out.

- Ans
- 1. Outlook
 - 2. The Indian Express
 - 3. Hindustan Times
 - 4. The Times of India

Question ID : 9489115895
Option 1 ID : 94891123578
Option 2 ID : 94891123579
Option 3 ID : 94891123580
Option 4 ID : 94891123577
Status : Answered
Chosen Option : 1

Q.99 A beautician's income includes her salary and the tips she gets for her services. During a particular week, if her tips were $\frac{5}{4}$ of her salary, then what fraction of her income came from the tips?

Ans

1. $\frac{9}{5}$

2. $\frac{4}{5}$

3. $\frac{5}{9}$

4. $\frac{4}{9}$

Question ID : 9489115886

Option 1 ID : 94891123541

Option 2 ID : 94891123542

Option 3 ID : 94891123543

Option 4 ID : 94891123544

Status : Answered

Chosen Option : 3

Q.100 How will you write 9.08 hours in hours, minutes and seconds?

Ans

1. 9 hours, 10 minutes, 8 seconds

2. 9 hours, 4 minutes, 48 seconds

3. 9 hours, 8 minutes

4. 9 hours, 8 seconds

Question ID : 9489115902

Option 1 ID : 94891123607

Option 2 ID : 94891123608

Option 3 ID : 94891123605

Option 4 ID : 94891123606

Status : Answered

Chosen Option : 2

