



## रेल भर्ती बोर्ड / RAILWAY RECRUITMENT BOARDS



### सी ई एन ०१/२०१९ - एन टी पी सी - CEN 01/2019 - NTPC

Participant ID	
Participant Name	
Test Center Name	
Test Date	21/03/2021
Test Time	3:00 PM - 4:30 PM
Subject	NTPC

**\* Note**

Correct Answer will carry 1 mark per Question.  
Incorrect Answer will carry 1/3 Negative mark.

- Options shown in green color with a tick icon are correct.
- Chosen option on the right of the question indicates the option selected by the candidate.

Section : NTPC

Q.1 Which of the following countries has the highest male to female population ratio in the world in 2019?

- Ans
- 1. UAE
  - 2. Latvia
  - 3. Bhutan
  - 4. Qatar

Question ID : 94891111924

Option 1 ID : 94891147694

Option 2 ID : 94891147696

Option 3 ID : 94891147695

Option 4 ID : 94891147693

Status : **Not Attempted and Marked For Review**

Chosen Option : --

Q.2 Who founded the English newspaper 'Mahratta'?

- Ans
- 1. Bipin Chandra Pal
  - 2. Lala Lajpat Rai
  - 3. Ashwini Kumar Dutt
  - 4. Bal Gangadhar Tilak

Question ID : 94891111919

Option 1 ID : 94891147675

Option 2 ID : 94891147674

Option 3 ID : 94891147676

Option 4 ID : 94891147673

Status : **Answered**

Chosen Option : 4



## Download RRB Exams PDF E-BOOKS

[CLICK HERE](#)

## Download RRB NTPC Exam Study Notes

**Q.3** Where is the headquarters of SAARC Development Fund (SDF) established by SAARC nations?

- Ans**
- 1. Kathmandu, Nepal
  - 2. Dhaka, Bangladesh
  - 3. Thimphu, Bhutan
  - 4. Mumbai, India

Question ID : 94891111934

Option 1 ID : 94891147735

Option 2 ID : 94891147736

Option 3 ID : 94891147734

Option 4 ID : 94891147733

Status : **Not Attempted and Marked For Review**

Chosen Option : --

**Q.4** The cost price of 10 articles is equal to the selling price of 9 articles. Find the percentage profit.

- Ans**
- 1.  $121\frac{1}{9}\%$
  - 2.  $11\frac{1}{9}\%$
  - 3.  $13\frac{1}{9}\%$
  - 4.  $10\frac{1}{9}\%$

Question ID : 94891111359

Option 1 ID : 94891145434

Option 2 ID : 94891145433

Option 3 ID : 94891145436

Option 4 ID : 94891145435

Status : **Answered**

Chosen Option : 2

**Q.5** The circumference of a circle is  $30\pi$  cm. What is its area (in  $\text{cm}^2$ )?

- Ans**
- 1.  $15\pi$
  - 2.  $225\pi$
  - 3.  $900\pi$
  - 4.  $400\pi$

Question ID : 94891111368

Option 1 ID : 94891145469

Option 2 ID : 94891145470

Option 3 ID : 94891145472

Option 4 ID : 94891145471

Status : **Answered**

Chosen Option : 2



# Download RRB Exams PDF E-BOOKS

[CLICK HERE](#)

**Download RRB NTPC Exam Study Notes**

Q.6 In which year was Service Tax first imposed in India?

- Ans
- 1. 2002
  - 2. 1995
  - 3. 1998
  - 4. 1994

Question ID : 9489111939

Option 1 ID : 94891147756

Option 2 ID : 94891147753

Option 3 ID : 94891147754

Option 4 ID : 94891147755

Status : **Not Attempted and  
Marked For Review**

Chosen Option : --

Q.7 World Health Organization (WHO) gave its Tobacco Control Award for the year 2019 to the health department of the Indian state of \_\_\_\_\_.

- Ans
- 1. Punjab
  - 2. Rajasthan
  - 3. Kerala
  - 4. Gujarat

Question ID : 9489111904

Option 1 ID : 94891147615

Option 2 ID : 94891147613

Option 3 ID : 94891147614

Option 4 ID : 94891147616

Status : **Answered**

Chosen Option : 2

Q.8 One Stop Centre scheme was launched on:

- Ans
- 1. 1<sup>st</sup> April 2017
  - 2. 1<sup>st</sup> April 2018
  - 3. 1<sup>st</sup> April 2016
  - 4. 1<sup>st</sup> April 2015

Question ID : 9489111942

Option 1 ID : 94891147767

Option 2 ID : 94891147768

Option 3 ID : 94891147766

Option 4 ID : 94891147765

Status : **Not Answered**

Chosen Option : --



**Download RRB Exams PDF E-BOOKS**

[CLICK HERE](#)

**Download RRB NTPC Exam Study Notes**

**Q.9** Which of the following country has launched "Hope Probe" mission to Mars in July 2020?

- Ans**
- 1. India
  - 2. France
  - 3. China
  - 4. UAE

Question ID : **9489111932**  
Option 1 ID : **94891147728**  
Option 2 ID : **94891147727**  
Option 3 ID : **94891147725**  
Option 4 ID : **94891147726**  
Status : **Answered**  
Chosen Option : **4**

**Q.10** Who among the following artists is NOT a painter?

- Ans**
- 1. Jamini Roy
  - 2. Rukmini Devi
  - 3. Amrita Shergil
  - 4. Nandalal Bose

Question ID : **9489111910**  
Option 1 ID : **94891147638**  
Option 2 ID : **94891147640**  
Option 3 ID : **94891147637**  
Option 4 ID : **94891147639**  
Status : **Answered**  
Chosen Option : **2**

**Q.11** ISRO decided to open a Regional Academic Centre for Space at IIT \_\_\_\_\_ in December 2020.

- Ans**
- 1. New Delhi
  - 2. Kanpur
  - 3. Kharagpur
  - 4. Varanasi

Question ID : **9489111931**  
Option 1 ID : **94891147721**  
Option 2 ID : **94891147723**  
Option 3 ID : **94891147724**  
Option 4 ID : **94891147722**  
Status : **Not Attempted and Marked For Review**  
Chosen Option : **--**



**Download RRB Exams PDF E-BOOKS**

[CLICK HERE](#)

## Download RRB NTPC Exam Study Notes

**Q.12** The United Nations adopted the 'Charter of Economic Rights and Duties of States' in \_\_\_\_\_.

- Ans**
- 1. December 1974
  - 2. December 1976
  - 3. December 1980
  - 4. December 1977

Question ID : **94891111935**  
 Option 1 ID : **94891147737**  
 Option 2 ID : **94891147740**  
 Option 3 ID : **94891147739**  
 Option 4 ID : **94891147738**  
 Status : **Not Answered**  
 Chosen Option : --

**Q.13** Read the given statements and conclusions carefully. Assuming that the information given in the statements is true, even if it appears to be at variance with commonly known facts, decide which of the given conclusions logically follow(s) from the statements.

**Statements:**

1. Surge is a health drink.
2. No health drink is protein.
3. Some proteins are medicines.

**Conclusions:**

- I. Some proteins are health drinks.
- II. Some medicines are Surge.
- III. Some health drinks are Surge.

- Ans**
- 1. Only conclusion III follows.
  - 2. All conclusions I, II and III follow.
  - 3. Only conclusion II follows.
  - 4. Only conclusion I follows.

Question ID : **94891111880**  
 Option 1 ID : **94891147519**  
 Option 2 ID : **94891147520**  
 Option 3 ID : **94891147518**  
 Option 4 ID : **94891147517**  
 Status : **Marked For Review**  
 Chosen Option : 1

**Q.14** According to the law of diminishing marginal utility, as the amount of a good consumed increases, the marginal utility of that good tends to \_\_\_\_\_.

- Ans**
- 1. remain constant
  - 2. diminish
  - 3. first diminish and then improve
  - 4. improve


Question ID : **94891111941**  
 Option 1 ID : **94891147763**  
 Option 2 ID : **94891147762**  
 Option 3 ID : **94891147764**  
 Option 4 ID : **94891147761**  
 Status : **Not Answered**  
 Chosen Option : --



**Download RRB Exams PDF E-BOOKS**

[CLICK HERE](#)

# RRB NTPC EXAM Study Kit



100%

- ▶ 100% Exam Syllabus Covered
- ▶ 8 Books, 950+ Pages
- ▶ Mathematics, General Intelligence & Reasoning,
- ▶ General Science, General Awareness
- ▶ Previous year Solved Papers
- ▶ Mock Tests with Answers
- ▶ 1 Year Current Affairs



# RRB NTPC PDF NOTES

100% Syllabus | 950+ Pages

50%  
OFF

CLICK HERE



CLICK BELOW LINK TO DOWNLOAD PDF NOTES

<https://rrbexamportal.com/study-kit/Railway-NTPC-Exam>

**Download RRB NTPC Exam Study Notes**

Q.15 Who is appointed as Asian Cricket Council President in Feb, 2021?

- Ans
- 1. Rajiv Shukla
  - 2. Anurag Thakur
  - 3. Saurav Ganguly
  - 4. Jay Shah

Question ID : 9489111907  
Option 1 ID : 94891147628  
Option 2 ID : 94891147627  
Option 3 ID : 94891147626  
Option 4 ID : 94891147625  
Status : Not Answered  
Chosen Option : --

Q.16 In a certain code language, MOTHER is written as 541203, FATHER is written as 961203 and PARTNER is written as 7631803. How will PANTHER be written as in that language?

- Ans
- 1. 5681023
  - 2. 7681023
  - 3. 7631203
  - 4. 7681203

Question ID : 9489111874  
Option 1 ID : 94891147495  
Option 2 ID : 94891147494  
Option 3 ID : 94891147493  
Option 4 ID : 94891147496  
Status : Answered  
Chosen Option : 4

Q.17 Six boxes P, Q, R, S, T and U are painted with one among different colours Black, Blue, Orange, Green, White and Grey (not necessarily in the same order). No two boxes are painted with same colour. R is painted with orange colour. S and U are neither painted with white nor grey colour. P is painted with black colour. Q is not painted with white or blue colour. Box S is painted with which colour?

- Ans
- 1. Blue or Grey
  - 2. Black or Green
  - 3. White or Green
  - 4. Blue or Green

Question ID : 9489111902  
Option 1 ID : 94891147605  
Option 2 ID : 94891147608  
Option 3 ID : 94891147607  
Option 4 ID : 94891147606  
Status : Answered  
Chosen Option : 4



**Download RRB Exams PDF E-BOOKS**

[CLICK HERE](#)

## Download RRB NTPC Exam Study Notes

Q.18

Find the value of  $\frac{(0.01)^2+(0.22)^2+(0.333)^2+(0.4444)^2+(0.55555)^2}{(0.001)^2+(0.022)^2+(0.0333)^2+(0.04444)^2+(0.055555)^2}$

- Ans
- 1. 50
  - 2. 100
  - 3. 125
  - 4. 75

Question ID : 9489111352

Option 1 ID : 94891145405

Option 2 ID : 94891145407

Option 3 ID : 94891145408

Option 4 ID : 94891145406

Status : Answered

Chosen Option : 2

Q.19

Who is known as the 'Father of Indian Railways'?

- Ans
- 1. Lord Ripon
  - 2. Lord Minto
  - 3. Lord Dalhousie
  - 4. Lord Irwin

Question ID : 94891111920

Option 1 ID : 94891147677

Option 2 ID : 94891147678

Option 3 ID : 94891147680

Option 4 ID : 94891147679

Status : Answered

Chosen Option : 3

Q.20

What is the motto of the Supreme Court of India?

- Ans
- 1. Equal Justice for All
  - 2. Yogakshemam Vahāmyaham
  - 3. Satyamev Jayate
  - 4. Yato Dharmastato Jayah

Question ID : 94891111927

Option 1 ID : 94891147707

Option 2 ID : 94891147708

Option 3 ID : 94891147706

Option 4 ID : 94891147705

Status : Not Attempted and Marked For Review

Chosen Option : --



## Download RRB Exams PDF E-BOOKS

[CLICK HERE](#)



**Download RRB NTPC Exam Study Notes**

**Q.21** In a certain code language, 'Bird is animal' is written as '# mr so', 'Parrot is Bird' is written as 'so # @', 'is Parrot animal' is written as 'mr @ #'. What is the code for 'animal' in that code language?

- Ans**
- 1. @
  - 2. so
  - 3. mr
  - 4. #

Question ID : 9489111898  
Option 1 ID : 94891147592  
Option 2 ID : 94891147590  
Option 3 ID : 94891147589  
Option 4 ID : 94891147591  
Status : Answered  
Chosen Option : 3

**Q.22** Read the given information and answer the question that follows.

- i. In an examination, Mayank got higher marks than Sheetal.
- ii. Sheetal got higher marks than Rohit.
- iii. Sheetal got higher marks than Tanya.
- iv. Tanya got less marks than Praveen.
- v. Arya got higher marks than Mayank.
- vi. Rohit got more marks than both Tanya and Praveen.

Who has achieved the highest marks in the examination?

- Ans**
- 1. Praveen
  - 2. Mayank
  - 3. Arya
  - 4. Sheetal

Question ID : 9489111901  
Option 1 ID : 94891147603  
Option 2 ID : 94891147601  
Option 3 ID : 94891147602  
Option 4 ID : 94891147604  
Status : Answered  
Chosen Option : 3



**Download RRB Exams PDF E-BOOKS**

[CLICK HERE](#)

**Download RRB NTPC Exam Study Notes**

Q.23 The jelly-like substance between the nucleus and cell membrane is called \_\_\_\_\_.

- Ans
- 1. Otic
  - 2. Cytoplasm
  - 3. Amniotic
  - 4. Pleural

Question ID : 9489111913  
Option 1 ID : 94891147650  
Option 2 ID : 94891147649  
Option 3 ID : 94891147651  
Option 4 ID : 94891147652  
Status : Answered  
Chosen Option : 2

Q.24 The axis of the earth is inclined to the plane of ecliptic at an angle of:

- Ans
- 1.  $68\frac{1}{2}$  degrees
  - 2.  $73\frac{3}{4}$  degrees
  - 3.  $62\frac{1}{2}$  degrees
  - 4.  $66\frac{1}{2}$  degrees

Question ID : 9489111922  
Option 1 ID : 94891147685  
Option 2 ID : 94891147686  
Option 3 ID : 94891147688  
Option 4 ID : 94891147687  
Status : Not Answered  
Chosen Option : --

Q.25 How many numbers between 100 and 300 are divisible by 7?

- Ans
- 1. 30
  - 2. 28
  - 3. 27
  - 4. 29

Question ID : 9489111354  
Option 1 ID : 94891145416  
Option 2 ID : 94891145413  
Option 3 ID : 94891145414  
Option 4 ID : 94891145415  
Status : Answered  
Chosen Option : 2



**Download RRB Exams PDF E-BOOKS**

[CLICK HERE](#)

# Download RRB NTPC Exam Study Notes

**Q.26** In a certain code language, 'VMBHL' is written as 'VQJTB'. What is the code for 'KTSPR' in that code language?

- Ans**
- 1. BYAAQ
  - 2. BYBBQ
  - 3. BYABR
  - 4. BYBAR

Question ID : 94891111897

Option 1 ID : 94891147585

Option 2 ID : 94891147586

Option 3 ID : 94891147587

Option 4 ID : 94891147588

Status : **Not Attempted and Marked For Review**

Chosen Option : --

**Q.27** Hema decided to donate 15% of her salary to a charitable trust. On the day of donation she changed her mind and donated ₹4,500 which is 12.5% of what she has decided earlier. Find Hema's salary.

- Ans**
- 1. ₹30,000
  - 2. ₹24,000
  - 3. ₹18,000
  - 4. ₹32,000

Question ID : 94891111355

Option 1 ID : 94891145420

Option 2 ID : 94891145417

Option 3 ID : 94891145419

Option 4 ID : 94891145418

Status : **Answered**

Chosen Option : 2

**Q.28** Which of the following countries does NOT share its land boundary with India?

- Ans**
- 1. Bangladesh
  - 2. China
  - 3. Myanmar
  - 4. Tajikistan

Question ID : 94891111925

Option 1 ID : 94891147700

Option 2 ID : 94891147699

Option 3 ID : 94891147697

Option 4 ID : 94891147698

Status : **Answered**

Chosen Option : 4



**Download RRB Exams PDF E-BOOKS**

[CLICK HERE](#)

**Download RRB NTPC Exam Study Notes**

Q.29 \_\_\_\_\_ enables a user to remotely access another computer and terminals over the Internet.

- Ans
- 1. UseNet
  - 2. FTP
  - 3. Telnet
  - 4. HTTP

Question ID : 9489111937

Option 1 ID : 94891147748

Option 2 ID : 94891147746

Option 3 ID : 94891147745

Option 4 ID : 94891147747

Status : **Not Attempted and Marked For Review**

Chosen Option : --

Q.30 The length of the string between a kite and a point on the ground, without any slack, is 102 m. If the string makes an angle  $\alpha$  with the level ground such that  $\tan \alpha = \frac{15}{9}$ , how high is the kite?

- Ans
- 1. 105 m
  - 2. 90 m
  - 3. 100 m
  - 4. 80 m

Question ID : 9489111372

Option 1 ID : 94891145487

Option 2 ID : 94891145486

Option 3 ID : 94891145488

Option 4 ID : 94891145485

Status : **Answered**

Chosen Option : 2

Q.31 To which of the following deities is the Dilwara Temple in Mount Abu dedicated?

- Ans
- 1. Jagannath
  - 2. Adinath
  - 3. Badrinath
  - 4. Kedarnath

Question ID : 9489111909

Option 1 ID : 94891147635

Option 2 ID : 94891147633

Option 3 ID : 94891147634

Option 4 ID : 94891147636

Status : **Answered**

Chosen Option : 2



**Download RRB Exams PDF E-BOOKS**

[CLICK HERE](#)

## Download RRB NTPC Exam Study Notes

**Q.32** Select the combination of symbols that when sequentially placed in the blanks of the given equation will complete the equation.

$$9\_3\_0\_8\_2=23$$

- Ans**
- 1.  $\div + - \times$
  - 2.  $\times + - \div$
  - 3.  $- + \div \times$
  - 4.  $+ - \times \div$

Question ID : 9489111886

Option 1 ID : 94891147541

Option 2 ID : 94891147544

Option 3 ID : 94891147542

Option 4 ID : 94891147543

Status : Answered

Chosen Option : 2

**Q.33** What smallest positive fraction should be added to  $3\frac{2}{3} + 6\frac{7}{12} + 4\frac{9}{36} + 5 + 7\frac{1}{12}$  to make the sum a whole number?

- Ans**
- 1.  $\frac{5}{12}$
  - 2.  $\frac{11}{12}$
  - 3.  $\frac{7}{12}$
  - 4.  $\frac{13}{12}$

Question ID : 9489111351

Option 1 ID : 94891145401

Option 2 ID : 94891145403

Option 3 ID : 94891145402

Option 4 ID : 94891145404

Status : Answered

Chosen Option : 1

**Q.34** Through which of the following cities does Hudson River flow?

- Ans**
- 1. Bonn
  - 2. Bangkok
  - 3. New York
  - 4. London

Question ID : 9489111923

Option 1 ID : 94891147692

Option 2 ID : 94891147691

Option 3 ID : 94891147690

Option 4 ID : 94891147689

Status : Marked For Review

Chosen Option : 3



# Download RRB Exams PDF E-BOOKS

[CLICK HERE](#)

**Download RRB NTPC Exam Study Notes**

Q.35 In 2019, \_\_\_\_\_ became the 24th Chief of the Naval Staff of India.

- Ans
- 1. Admiral Karambir Singh
  - 2. Admiral Bimal Verma
  - 3. S Jaishankar
  - 4. Admiral Sunil Lamba

Question ID : 94891111905  
Option 1 ID : 94891147619  
Option 2 ID : 94891147620  
Option 3 ID : 94891147618  
Option 4 ID : 94891147617  
Status : Answered  
Chosen Option : 1

Q.36 Select the option that is related to the third term in the same way as the second term is related to the first term.

Laboratory : Manual :: Library : ?

- Ans
- 1. Book-shelf
  - 2. Catalogue
  - 3. Librarian
  - 4. Books

Question ID : 94891111879  
Option 1 ID : 94891147516  
Option 2 ID : 94891147513  
Option 3 ID : 94891147515  
Option 4 ID : 94891147514  
Status : Answered  
Chosen Option : 2

Q.37 How much time is taken by sunlight to reach Earth?

- Ans
- 1. 7 min 32sec
  - 2. 9 min 32 sec
  - 3. 7 min 56 sec
  - 4. 8 min 20 sec

Question ID : 94891111914  
Option 1 ID : 94891147655  
Option 2 ID : 94891147654  
Option 3 ID : 94891147653  
Option 4 ID : 94891147656  
Status : Answered  
Chosen Option : 4



**Download RRB Exams PDF E-BOOKS**

[CLICK HERE](#)

## Download RRB NTPC Exam Study Notes

**Q.38** What would be the maximum value of Q in the following equation?

$$5P9 + 3R7 + 2Q8 = 1114$$

- Ans**
- 1. 8
  - 2. 9
  - 3. 7
  - 4. 5

Question ID : **9489111350**  
 Option 1 ID : **94891145397**  
 Option 2 ID : **94891145400**  
 Option 3 ID : **94891145399**  
 Option 4 ID : **94891145398**  
 Status : **Answered**  
 Chosen Option : **2**

**Q.39** How many colours are available in a computer monitor with 16 bits per pixel depth?

- Ans**
- 1. 65536
  - 2. 256
  - 3. 16777216
  - 4. 16

Question ID : **9489111938**  
 Option 1 ID : **94891147751**  
 Option 2 ID : **94891147750**  
 Option 3 ID : **94891147752**  
 Option 4 ID : **94891147749**  
 Status : **Marked For Review**  
 Chosen Option : **1**

**Q.40** What is the value of the following expression?

$$50 - [8\{9 - (6 - \overline{5 + 3})\}]$$

- Ans**
- 1. 53
  - 2. -38
  - 3. -48
  - 4. 47

Question ID : **9489111344**  
 Option 1 ID : **94891145373**  
 Option 2 ID : **94891145375**  
 Option 3 ID : **94891145376**  
 Option 4 ID : **94891145374**  
 Status : **Answered**  
 Chosen Option : **2**



**Download RRB Exams PDF E-BOOKS**

[CLICK HERE](#)

# Download RRB NTPC Exam Study Notes

**Q.41** After deducting 10% from a certain sum, and then deducting 20% from the remainder, a sum of ₹3,600 is left. Find the original sum (in ₹).

- Ans**
- 1. 6,000
  - 2. 3,800
  - 3. 5,000
  - 4. 4,000

Question ID : 9489111357  
Option 1 ID : 94891145426  
Option 2 ID : 94891145428  
Option 3 ID : 94891145425  
Option 4 ID : 94891145427  
Status : Answered  
Chosen Option : 3

**Q.42** Four words have been given, out of which three are alike in some manner and one is different. Select the odd one.

- Ans**
- 1. Goldsmith
  - 2. Doctor
  - 3. Blacksmith
  - 4. Carpenter

Question ID : 9489111878  
Option 1 ID : 94891147510  
Option 2 ID : 94891147512  
Option 3 ID : 94891147511  
Option 4 ID : 94891147509  
Status : Answered  
Chosen Option : 2

**Q.43** Select the option that is related to the third number in the same way as the second number is related to the first number.

36 : 216 :: 81 : ?

- Ans**
- 1. 486
  - 2. 729
  - 3. 512
  - 4. 900

Question ID : 9489111876  
Option 1 ID : 94891147503  
Option 2 ID : 94891147504  
Option 3 ID : 94891147502  
Option 4 ID : 94891147501  
Status : Answered  
Chosen Option : 2



**Download RRB Exams PDF E-BOOKS**

[CLICK HERE](#)



**Download RRB NTPC Exam Study Notes**

Q.44 Vikram Samvat calendar is \_\_\_\_\_ years ahead of the Gregorian calendar.

- Ans
- 1. 46.7
  - 2. 66.7
  - 3. 56.7
  - 4. 76.7

Question ID : 94891111918

Option 1 ID : 94891147669

Option 2 ID : 94891147671

Option 3 ID : 94891147670

Option 4 ID : 94891147672

Status : **Not Attempted and Marked For Review**

Chosen Option : --

Q.45 When  $x + y + z = 16$  and  $xy + yz + zx = 78$ , find the value of  $x^3 + y^3 + z^3 - 3xyz$ .

- Ans
- 1. 352
  - 2. 365
  - 3. 350
  - 4. 360

Question ID : 94891111367

Option 1 ID : 94891145466

Option 2 ID : 94891145468

Option 3 ID : 94891145465

Option 4 ID : 94891145467

Status : **Answered**

Chosen Option : 1

Q.46 The Ministry of Environment and Forest launched Paryavaran Vahini Scheme in \_\_\_\_\_ with the basic objective of encouraging people's participation in environmental protection.

- Ans
- 1. July 1990
  - 2. July 1994
  - 3. June 1992
  - 4. June 1988

Question ID : 94891111940

Option 1 ID : 94891147758

Option 2 ID : 94891147760

Option 3 ID : 94891147759

Option 4 ID : 94891147757

Status : **Not Answered**

Chosen Option : --



**Download RRB Exams PDF E-BOOKS**

[CLICK HERE](#)

## Download RRB NTPC Exam Study Notes

**Q.47** If  $\sqrt{x} + \frac{1}{\sqrt{x}} = 3$ , then find the value of  $x^2 + \frac{1}{x^2}$ .

- Ans**
- 1. 53
  - 2. 47
  - 3. 51
  - 4. 49

Question ID : **9489111353**  
 Option 1 ID : **94891145412**  
 Option 2 ID : **94891145410**  
 Option 3 ID : **94891145411**  
 Option 4 ID : **94891145409**  
 Status : **Answered**  
 Chosen Option : **2**

**Q.48** Kunal was asked to find  $\frac{5}{6}$  times of a number. He multiplied it by  $\frac{6}{5}$ . As a result, he got an answer which was more than the correct answer by 572. The number was:

- Ans**
- 1. 2860
  - 2. 5720
  - 3. 1560
  - 4. 2160

Question ID : **9489111349**  
 Option 1 ID : **94891145393**  
 Option 2 ID : **94891145396**  
 Option 3 ID : **94891145394**  
 Option 4 ID : **94891145395**  
 Status : **Answered**  
 Chosen Option : **3**

**Q.49** A person travelled 120 km by steamer, 450 km by train and 60 km by horse. It took 13 h 30 min. If the speed of the train is 3 times that of the horse and 1.5 times that of the steamer, find the speed of the train.

- Ans**
- 1. 65 km/h
  - 2. 64 km/h
  - 3. 60 km/h
  - 4. 62 km/h


Question ID : **9489111363**  
 Option 1 ID : **94891145452**  
 Option 2 ID : **94891145450**  
 Option 3 ID : **94891145449**  
 Option 4 ID : **94891145451**  
 Status : **Answered**  
 Chosen Option : **3**



## Download RRB Exams PDF E-BOOKS

[CLICK HERE](#)

# RRB NTPC EXAM Study Kit



100%

- ▶ 100% Exam Syllabus Covered
- ▶ 8 Books, 950+ Pages
- ▶ Mathematics, General Intelligence & Reasoning,
- ▶ General Science, General Awareness
- ▶ Previous year Solved Papers
- ▶ Mock Tests with Answers
- ▶ 1 Year Current Affairs



# RRB NTPC PDF NOTES

100% Syllabus | 950+ Pages

50%  
OFF

CLICK HERE



CLICK BELOW LINK TO DOWNLOAD PDF NOTES

<https://rrbexamportal.com/study-kit/Railway-NTPC-Exam>

# Download RRB NTPC Exam Study Notes

**Q.50** ₹4,800 becomes ₹6,000 in 4 years at a certain rate of compound interest. What will be the amount after 12 years at the same rate of compound interest?

- Ans**
- 1. ₹12,000
  - 2. ₹8,400
  - 3. ₹9,600
  - 4. ₹9,375

Question ID : 94891111360  
Option 1 ID : 94891145440  
Option 2 ID : 94891145439  
Option 3 ID : 94891145438  
Option 4 ID : 94891145437  
Status : Answered  
Chosen Option : 4

**Q.51** Three cubes of a metal whose edges are 3, 4 and 5 cm respectively are melted and formed into a single cube. If there is no loss of metal in the process, find the side of the new cube.

- Ans**
- 1. 8 cm
  - 2. 10 cm
  - 3. 6 cm
  - 4. 9 cm

Question ID : 94891111364  
Option 1 ID : 94891145453  
Option 2 ID : 94891145455  
Option 3 ID : 94891145454  
Option 4 ID : 94891145456  
Status : Answered  
Chosen Option : 3

**Q.52** Which of the following is NOT a classical dance style?

- Ans**
- 1. Bharatanatyam
  - 2. Dhamar
  - 3. Odissi
  - 4. Mohiniattam

Question ID : 94891111908  
Option 1 ID : 94891147629  
Option 2 ID : 94891147630  
Option 3 ID : 94891147632  
Option 4 ID : 94891147631  
Status : Answered  
Chosen Option : 2



**Download RRB Exams PDF E-BOOKS**

[CLICK HERE](#)

**Download RRB NTPC Exam Study Notes**

**Q.53** Consider the given statement(s) and decide which of the given assumptions is/are implicit in the statement.

**Statement:**

“One of ways your child can do better is by getting private tuition”, said the teacher.

**Assumptions:**

- I. The child is not good in studies.
- II. The child cannot do better if he is not taking private tuition.

- Ans**
- 1. Only I is implicit.
  - 2. Only II is implicit.
  - 3. Neither I nor II is implicit.
  - 4. Both I and II are implicit.

Question ID : 94891111881

Option 1 ID : 94891147521

Option 2 ID : 94891147522

Option 3 ID : 94891147524

Option 4 ID : 94891147523

Status : Marked For Review

Chosen Option : 3

**Q.54** Find the median of the given data.

20, 28, 32, 48, 20, 18, 16, 2, 30, 14

- Ans**
- 1. 24
  - 2. 48
  - 3. 20
  - 4. 22

Question ID : 94891111371

Option 1 ID : 94891145481

Option 2 ID : 94891145484

Option 3 ID : 94891145482

Option 4 ID : 94891145483

Status : Answered

Chosen Option : 3

**Q.55** The side of an equilateral triangle is 10 cm. Find its altitude.

- Ans**
- 1.  $6\sqrt{3}$  cm
  - 2.  $3\sqrt{3}$  cm
  - 3.  $4\sqrt{3}$  cm
  - 4.  $5\sqrt{3}$  cm

Question ID : 94891111369

Option 1 ID : 94891145473

Option 2 ID : 94891145476

Option 3 ID : 94891145474

Option 4 ID : 94891145475

Status : Answered



**Download RRB Exams PDF E-BOOKS**

[CLICK HERE](#)

**Download RRB NTPC Exam Study Notes**

**Q.56** Two poles are standing on a level ground at a distance of 24 m. The heights of the poles are 20 m and 38 m. Find the distance between their tops.

- Ans**
- 1. 24 m
  - 2. 29 m
  - 3. 30 m
  - 4. 28 m

Question ID : 9489111370  
Option 1 ID : 94891145477  
Option 2 ID : 94891145480  
Option 3 ID : 94891145479  
Option 4 ID : 94891145478  
Status : Answered  
Chosen Option : 3

**Q.57** The Jim Corbett National Park was established in 1936 to save the endangered species of:

- Ans**
- 1. Peacock
  - 2. White elephant
  - 3. Bengal tiger
  - 4. Blue whale

Question ID : 9489111911  
Option 1 ID : 94891147644  
Option 2 ID : 94891147641  
Option 3 ID : 94891147642  
Option 4 ID : 94891147643  
Status : Answered  
Chosen Option : 3

**Q.58** With which of the following does Article 72 of the Constitution of India deal?

- Ans**
- 1. Pardoning power of the President
  - 2. Composition and jurisdiction of Supreme Court of India
  - 3. Appointment of Prime Minister
  - 4. Right to freedom of speech

Question ID : 9489111928  
Option 1 ID : 94891147711  
Option 2 ID : 94891147712  
Option 3 ID : 94891147709  
Option 4 ID : 94891147710  
Status : Answered  
Chosen Option : 1



**Download RRB Exams PDF E-BOOKS**

[CLICK HERE](#)

## Download RRB NTPC Exam Study Notes

**Q.59** Two runners cover the same distance at the speeds of 15 km/h and 16 km/h respectively. Find the distance travelled when one takes 16 min longer than the other.

- Ans**
- 1. 63 km
  - 2. 64 km
  - 3. 62 km
  - 4. 60 km

Question ID : 9489111362  
Option 1 ID : 94891145447  
Option 2 ID : 94891145448  
Option 3 ID : 94891145446  
Option 4 ID : 94891145445  
Status : Answered  
Chosen Option : 2

**Q.60** The former Chief Justice of India, Ranjan Gogoi, was preceded by:

- Ans**
- 1. TS Thakur
  - 2. YK Sabharwal
  - 3. JS Khehar
  - 4. Dipak Mishra

Question ID : 9489111929  
Option 1 ID : 94891147713  
Option 2 ID : 94891147716  
Option 3 ID : 94891147714  
Option 4 ID : 94891147715  
Status : Marked For Review  
Chosen Option : 4

**Q.61** The HCF and LCM of two numbers are 2 and 144 respectively. If one number is 16 then the other number is:

- Ans**
- 1. 18
  - 2. 32
  - 3. 24
  - 4. 36

Question ID : 9489111348  
Option 1 ID : 94891145390  
Option 2 ID : 94891145391  
Option 3 ID : 94891145392  
Option 4 ID : 94891145389  
Status : Answered  
Chosen Option : 1



**Download RRB Exams PDF E-BOOKS**

[CLICK HERE](#)

**Download RRB NTPC Exam Study Notes**

**Q.62** A certain sum of money, invested with simple interest, amounts to ₹756 in 2 years and to ₹873 in 3.5 years. Find the sum (in ₹).

- Ans**
- 1. 500
  - 2. 700
  - 3. 600
  - 4. 400

Question ID : **94891111358**  
Option 1 ID : **94891145430**  
Option 2 ID : **94891145432**  
Option 3 ID : **94891145431**  
Option 4 ID : **94891145429**  
Status : **Answered**  
Chosen Option : **3**

**Q.63** Which of the following is also known as the 'tree frog'?

- Ans**
- 1. Rana tigrina
  - 2. Toad
  - 3. Salamandar
  - 4. Hyla

Question ID : **94891111912**  
Option 1 ID : **94891147648**  
Option 2 ID : **94891147645**  
Option 3 ID : **94891147646**  
Option 4 ID : **94891147647**  
Status : **Not Attempted and Marked For Review**  
Chosen Option : **--**

**Q.64** What is the real name of Babur?

- Ans**
- 1. Salim
  - 2. Khurram
  - 3. Nashruddin
  - 4. Zahir-ud-din

Question ID : **94891111917**  
Option 1 ID : **94891147665**  
Option 2 ID : **94891147667**  
Option 3 ID : **94891147668**  
Option 4 ID : **94891147666**  
Status : **Answered**  
Chosen Option : **4**



**Download RRB Exams PDF E-BOOKS**

[CLICK HERE](#)



**Download RRB NTPC Exam Study Notes**

**Q.65** Suez canal is an artificial waterway that connects which of the following seas?

- Ans**
- 1. Black sea and Mediterranean Sea
  - 2. Caspian sea and Mediterranean Sea
  - 3. Black sea and Red Sea
  - 4. Mediterranean Sea and Red Sea

Question ID : 94891111926

Option 1 ID : 94891147703

Option 2 ID : 94891147704

Option 3 ID : 94891147701

Option 4 ID : 94891147702

Status : Answered

Chosen Option : 4

**Q.66** Mac is a type of personal computer made by:

- Ans**
- 1. Apple
  - 2. Dell
  - 3. Acer
  - 4. HP

Question ID : 94891111936

Option 1 ID : 94891147743

Option 2 ID : 94891147744

Option 3 ID : 94891147742

Option 4 ID : 94891147741

Status : Answered

Chosen Option : 1

**Q.67** What is the least multiple of 7, which when divided by 2, 3, 4, 5 and 6 leaves the remainders 1, 2, 3, 4 and 5 respectively?

- Ans**
- 1. 133
  - 2. 119
  - 3. 140
  - 4. 147

Question ID : 94891111345

Option 1 ID : 94891145378

Option 2 ID : 94891145380

Option 3 ID : 94891145377

Option 4 ID : 94891145379

Status : Answered

Chosen Option : 2



**Download RRB Exams PDF E-BOOKS**

[CLICK HERE](#)

## Download RRB NTPC Exam Study Notes

**Q.68** Bengal Gazette, the first major newspaper in India, started in the year \_\_\_\_\_.

- Ans**
- 1. 1780
  - 2. 1770
  - 3. 1857
  - 4. 1775

Question ID : **94891111921**  
 Option 1 ID : **94891147684**  
 Option 2 ID : **94891147682**  
 Option 3 ID : **94891147681**  
 Option 4 ID : **94891147683**  
 Status : **Marked For Review**  
 Chosen Option : 1

**Q.69** If  $x + y = 1$ , then find the value of  $x^3 + y^3 + 3xy$ .

- Ans**
- 1. 6
  - 2. 0
  - 3. 1
  - 4. 2

Question ID : **94891111366**  
 Option 1 ID : **94891145464**  
 Option 2 ID : **94891145462**  
 Option 3 ID : **94891145461**  
 Option 4 ID : **94891145463**  
 Status : **Answered**  
 Chosen Option : 3

**Q.70** Five airhostess A, B, C, D and E like one among different colours namely Green, Blue, White, Black and Pink (not necessarily in the same order). They are from one among different airlines namely Go Air, Emirates, Vistara, Spice Jet and Jet Lite (not necessarily in the same order). No two airhostess likes the same colour and they are not from same airlines. B likes White colour and is from Spice Jet airline. D is from Vistara airline and does not like Pink or Blue colour. A is not from Jet Lite and Go Air. The one who is from Go Air airline likes Black colour. C does not like Black colour and is not from Emirate airline.

Which of the following combination of airhostess, colour and airline is definitely correct?

- Ans**
- 1. A – Pink – Emirates
  - 2. A – Blue – Emirates
  - 3. D – Green – Vistara
  - 4. C – Blue – Jet Lite

Question ID : **94891111903**  
 Option 1 ID : **94891147609**  
 Option 2 ID : **94891147612**  
 Option 3 ID : **94891147611**  
 Option 4 ID : **94891147610**  
 Status : **Answered**  
 Chosen Option : 3



## Download RRB Exams PDF E-BOOKS

[CLICK HERE](#)

**Download RRB NTPC Exam Study Notes**

**Q.71** The greatest number of four digits which is divisible by 5, 35, 39 and 65 is:

- Ans**
- 1. 9994
  - 2. 9505
  - 3. 9055
  - 4. 9555

Question ID : **9489111347**  
Option 1 ID : **94891145387**  
Option 2 ID : **94891145385**  
Option 3 ID : **94891145386**  
Option 4 ID : **94891145388**  
Status : **Answered**  
Chosen Option : **4**

**Q.72** Select the combination of letters that when sequentially placed in the blanks of the given series will complete the series.

xy\_xx\_yzzxx\_yyy\_zzxxxx

- Ans**
- 1. zyZX
  - 2. zyxy
  - 3. xyXZ
  - 4. zyXZ

Question ID : **9489111883**  
Option 1 ID : **94891147529**  
Option 2 ID : **94891147531**  
Option 3 ID : **94891147532**  
Option 4 ID : **94891147530**  
Status : **Answered**  
Chosen Option : **4**

**Q.73** Students of Engineering college of \_\_\_\_\_ developed a Satellite named as "SriShaktiSat" for ISRO in Jan, 2021.

- Ans**
- 1. Chennai
  - 2. New Delhi
  - 3. Kolkata
  - 4. Coimbtore

Question ID : **9489111930**  
Option 1 ID : **94891147720**  
Option 2 ID : **94891147717**  
Option 3 ID : **94891147719**  
Option 4 ID : **94891147718**  
Status : **Not Answered**  
Chosen Option : **--**



**Download RRB Exams PDF E-BOOKS**

[CLICK HERE](#)

**Download RRB NTPC Exam Study Notes**

**Q.74** There are five friends U, V, W, X and Y, sitting in a row facing North. U is to the left of V and W is to the right of X. X is sitting in the right of Y and he is the second person from the left. Who is the first from the right?

- Ans**
- 1. W
  - 2. Y
  - 3. U
  - 4. V

Question ID : 9489111899  
Option 1 ID : 94891147595  
Option 2 ID : 94891147596  
Option 3 ID : 94891147593  
Option 4 ID : 94891147594  
Status : Answered  
Chosen Option : 4

**Q.75** Which of the following organs secretes bile juice?

- Ans**
- 1. Liver
  - 2. Heart
  - 3. Kidney
  - 4. Brain

Question ID : 9489111916  
Option 1 ID : 94891147664  
Option 2 ID : 94891147661  
Option 3 ID : 94891147663  
Option 4 ID : 94891147662  
Status : Answered  
Chosen Option : 1

**Q.76** In 2018, \_\_\_\_\_ was appointed as UNICEF India's first youth ambassador.

- Ans**
- 1. Saina Nehwal
  - 2. Sakshi Malik
  - 3. Mithali Raj
  - 4. Hima Das

Question ID : 9489111906  
Option 1 ID : 94891147622  
Option 2 ID : 94891147623  
Option 3 ID : 94891147624  
Option 4 ID : 94891147621  
Status : Answered  
Chosen Option : 4

**Download RRB Exams PDF E-BOOKS**[CLICK HERE](#)

**Download RRB NTPC Exam Study Notes**

**Q.77** In a certain code language, ELEPHANT is written as MTMBSKCJ and LEOPARD is written as TMVBKEN. How will PANTHER be written as in that language?

- Ans**
- 1. BKCJSEM
  - 2. BKJCSME
  - 3. BKJSCME
  - 4. BKCJSME

Question ID : 9489111877  
Option 1 ID : 94891147505  
Option 2 ID : 94891147507  
Option 3 ID : 94891147508  
Option 4 ID : 94891147506  
Status : Answered  
Chosen Option : 4

**Q.78** Which of the following scheme was launched in April 2020 to enable an integrated property validation solution for rural India?

- Ans**
- 1. SAMARTH
  - 2. SVAMITVA
  - 3. UMANG
  - 4. KUSUM

Question ID : 9489111943  
Option 1 ID : 94891147770  
Option 2 ID : 94891147772  
Option 3 ID : 94891147771  
Option 4 ID : 94891147769  
Status : Not Answered  
Chosen Option : --

**Q.79** The number by which 62557 can be divided to make it a perfect cube is:

- Ans**
- 1. 57
  - 2. 47
  - 3. 37
  - 4. 45

Question ID : 9489111346  
Option 1 ID : 94891145384  
Option 2 ID : 94891145383  
Option 3 ID : 94891145381  
Option 4 ID : 94891145382  
Status : Answered  
Chosen Option : 2

**Download RRB Exams PDF E-BOOKS**[CLICK HERE](#)

# Download RRB NTPC Exam Study Notes

Q.80 Who gave the term 'homo sapiens'?

- Ans
- 1. Darwin
  - 2. Miller
  - 3. C. Linnaeus
  - 4. G. J. Mendal

Question ID : 9489111915  
Option 1 ID : 94891147657  
Option 2 ID : 94891147658  
Option 3 ID : 94891147660  
Option 4 ID : 94891147659  
Status : Marked For Review  
Chosen Option : 1

Q.81 The total number of gold medals and silver medals won by a person in games is 75. Which of the following CANNOT be the ratio of number of silver medals won to that of gold medals won by that person?

- Ans
- 1. 2 : 3
  - 2. 7 : 8
  - 3. 9 : 1
  - 4. 12 : 13

Question ID : 9489111356  
Option 1 ID : 94891145423  
Option 2 ID : 94891145422  
Option 3 ID : 94891145424  
Option 4 ID : 94891145421  
Status : Answered  
Chosen Option : 3

Q.82 If the largest angle in a triangle is  $75^\circ$ , what is the least possible value of the smallest angle of the triangle?

- Ans
- 1.  $30^\circ$
  - 2.  $40^\circ$
  - 3.  $76^\circ$
  - 4.  $70^\circ$

Question ID : 9489111373  
Option 1 ID : 94891145492  
Option 2 ID : 94891145491  
Option 3 ID : 94891145489  
Option 4 ID : 94891145490  
Status : Answered  
Chosen Option : 1



Download RRB Exams PDF E-BOOKS

[CLICK HERE](#)

**Download RRB NTPC Exam Study Notes**

**Q.83** A group of men decided to complete a task in 10 days, but five of them remained absent. If the rest of the group completed the task in 12 days, find the original number of men in the group.

- Ans
- 1. 30
  - 2. 25
  - 3. 32
  - 4. 20

Question ID : 94891111361  
Option 1 ID : 94891145443  
Option 2 ID : 94891145442  
Option 3 ID : 94891145444  
Option 4 ID : 94891145441  
Status : Answered  
Chosen Option : 1

**Q.84** Where is the headquarters of International Committee of the Red Cross situated?

- Ans
- 1. Prague
  - 2. Geneva
  - 3. New Delhi
  - 4. New York

Question ID : 94891111933  
Option 1 ID : 94891147731  
Option 2 ID : 94891147729  
Option 3 ID : 94891147730  
Option 4 ID : 94891147732  
Status : Answered  
Chosen Option : 2

**Q.85** The radius of a road roller is 7 m and its length is 14 m. It takes 100 revolutions to level the ground of a field. Find the area of the field. [Use  $\pi = \frac{22}{7}$ ]

- Ans
- 1. 61400 m<sup>2</sup>
  - 2. 61200 m<sup>2</sup>
  - 3. 61000 m<sup>2</sup>
  - 4. 61600 m<sup>2</sup>

Question ID : 94891111365  
Option 1 ID : 94891145458  
Option 2 ID : 94891145459  
Option 3 ID : 94891145460  
Option 4 ID : 94891145457  
Status : Answered  
Chosen Option : 4

**Download RRB Exams PDF E-BOOKS**[CLICK HERE](#)

## Download RRB NTPC Exam Study Notes

**Q.86** The following table shows the sale of different brands of watches by a shop during 2014 – 2018.

Year	Brand (in thousands)			
	Titan	Fastrack	Timex	Fossil
2014	366	205	247	96
2015	398	188	285	108
2016	312	175	388	112
2017	412	312	401	146
2018	288	202	255	126

Which brand of watches showed the highest percentage change in sales between 2014 and 2018?

- Ans**
- 1. Fastrack
  - 2. Timex
  - 3. Fossil
  - 4. Titan

Question ID : 9489111889

Option 1 ID : 94891147554

Option 2 ID : 94891147555

Option 3 ID : 94891147556

Option 4 ID : 94891147553

Status : Answered

Chosen Option : 3

**Q.87** The following table shows the sale of different brands of watches by a shop during 2014 – 2018.

Year	Brand (in thousands)			
	Titan	Fastrack	Timex	Fossil
2014	366	205	247	96
2015	398	188	285	108
2016	312	175	388	112
2017	412	312	401	146
2018	288	202	255	126

Which of the given options represents the maximum percentage increase in sales over the preceding year?

- Ans**
- 1. Titan, 2017
  - 2. Fossil, 2017
  - 3. Timex, 2016
  - 4. Fastrack, 2017

Question ID : 9489111890

Option 1 ID : 94891147559

Option 2 ID : 94891147560

Option 3 ID : 94891147558

Option 4 ID : 94891147557

Status : Answered

Chosen Option : 4



# Download RRB Exams PDF E-BOOKS

[CLICK HERE](#)



## Download RRB NTPC Exam Study Notes

**Q.88** The following table shows the sale of different brands of watches by a shop during 2014 – 2018.

Year	Brand (in thousands)			
	Titan	Fastrack	Timex	Fossil
2014	366	205	247	96
2015	398	188	285	108
2016	312	175	388	112
2017	412	312	401	146
2018	288	202	255	126

Which brand of watches saw the highest decrease in sales in the year 2018 as compared to the preceding year?

- Ans**
- 1. Fastrack
  - 2. Timex
  - 3. Fossil
  - 4. Titan

Question ID : 9489111891

Option 1 ID : 94891147561

Option 2 ID : 94891147562

Option 3 ID : 94891147564

Option 4 ID : 94891147563

Status : Marked For Review

Chosen Option : 2

**Q.89** The following table shows the sale of different brands of watches by a shop during 2014 – 2018.

Year	Brand (in thousands)			
	Titan	Fastrack	Timex	Fossil
2014	366	205	247	96
2015	398	188	285	108
2016	312	175	388	112
2017	412	312	401	146
2018	288	202	255	126

Based on the data given in the table above which of the following statements is TRUE?

- Ans**
- 1. The total sales of Fossil brand of watches for the given period is less than 50% of the sales of every other brand for the given period.
  - 2. Only two brands showed year-on-year increase in sales during the period 2014-17.
  - 3. The total sales of all brands of watches was highest in 2016.
  - 4. The brand with the highest sales for the given period is Timex.

Question ID : 9489111892

Option 1 ID : 94891147567

Option 2 ID : 94891147565

Option 3 ID : 94891147568

Option 4 ID : 94891147566

Status : Answered

Chosen Option : 2



# Download RRB Exams PDF E-BOOKS

[CLICK HERE](#)

## Download RRB NTPC Exam Study Notes

**Q.90** In a Cricket match, Rohit scored more than Rahul but less than Santosh. Balbeer scored more than Iqbal but less than Rahul. Mehul scored more than Balbeer but less than Santosh. Who scored the most?

- Ans**
- 1. Rohit
  - 2. Mehul
  - 3. Santosh
  - 4. Balbeer

Question ID : 94891111900  
Option 1 ID : 94891147598  
Option 2 ID : 94891147597  
Option 3 ID : 94891147600  
Option 4 ID : 94891147599  
Status : Answered  
Chosen Option : 3

**Q.91** Out of the four words listed, three are alike in some manner and one is different. Select the odd one.

- Ans**
- 1. Facebook
  - 2. Social Media
  - 3. Twitter
  - 4. WhatsApp

Question ID : 94891111893  
Option 1 ID : 94891147572  
Option 2 ID : 94891147571  
Option 3 ID : 94891147570  
Option 4 ID : 94891147569  
Status : Answered  
Chosen Option : 2

**Q.92** Four words have been given, out of which three are alike in some manner, while the fourth one is different. Select the odd one.

- Ans**
- 1. Volt
  - 2. Pascal
  - 3. Time
  - 4. Ohm

Question ID : 94891111895  
Option 1 ID : 94891147579  
Option 2 ID : 94891147578  
Option 3 ID : 94891147580  
Option 4 ID : 94891147577  
Status : Answered  
Chosen Option : 3



**Download RRB Exams PDF E-BOOKS**

[CLICK HERE](#)

## Download RRB NTPC Exam Study Notes

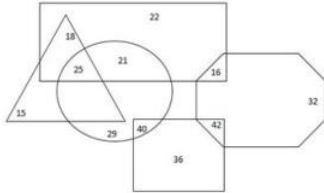
**Q.93** Select the numbers that can replace the question marks (?) in the following series.

3, 54, 6, 50, 9, 46, 12, 42, ?, ?

- Ans**
- 1. 15, 38
  - 2. 15, 36
  - 3. 18, 38
  - 4. 18, 36

Question ID : **94891111884**  
 Option 1 ID : **94891147534**  
 Option 2 ID : **94891147533**  
 Option 3 ID : **94891147536**  
 Option 4 ID : **94891147535**  
 Status : **Answered**  
 Chosen Option : **2**

**Q.94** In the following diagram, the triangle represents the students who want to have Dosa in their lunch. The rectangle represents the students who want to have sandwich in their lunch. The circle represents the students who want to have pizza in their lunch. The square represents the students who want to have Idli in their lunch. The hexagon represents those students who want to have Puri Sabji at the time of lunch.



How many students want to have Dosa, sandwich and pizza, all three in their lunch?

- Ans**
- 1. 15
  - 2. 29
  - 3. 18
  - 4. 25

Question ID : **94891111896**  
 Option 1 ID : **94891147581**  
 Option 2 ID : **94891147584**  
 Option 3 ID : **94891147582**  
 Option 4 ID : **94891147583**  
 Status : **Answered**  
 Chosen Option : **4**

**Q.95** Select the number that will come next in the following series.

41, 47, 59, 67, 73, 83, ?

- Ans**
- 1. 93
  - 2. 89
  - 3. 97
  - 4. 87

Question ID : **94891111885**  
 Option 1 ID : **94891147540**  
 Option 2 ID : **94891147538**  
 Option 3 ID : **94891147539**  
 Option 4 ID : **94891147537**  
 Status : **Answered**



## Download RRB Exams PDF E-BOOKS

[CLICK HERE](#)

**Download RRB NTPC Exam Study Notes**

**Q.96** How will you write 5.37 hours in hours, minutes and seconds?

- Ans**
- 1. 5 hours, 30 minutes, 7 seconds
  - 2. 5 hours, 37 minutes
  - 3. 5 hours, 22 minutes, 12 seconds
  - 4. 5 hours, 22 minutes, 2 seconds

Question ID : 9489111888  
Option 1 ID : 94891147551  
Option 2 ID : 94891147549  
Option 3 ID : 94891147550  
Option 4 ID : 94891147552  
Status : Answered  
Chosen Option : 3

**Q.97** Out of the four words listed, three are alike in some manner and one is different. Select the odd one.

- Ans**
- 1. MA Chidambaram Stadium
  - 2. Eden Gardens
  - 3. Salt Lake Stadium
  - 4. Wankhede Stadium

Question ID : 9489111894  
Option 1 ID : 94891147573  
Option 2 ID : 94891147575  
Option 3 ID : 94891147574  
Option 4 ID : 94891147576  
Status : Answered  
Chosen Option : 3

**Q.98** In certain code language, 'He is good boy' is written as 'no po ko lo', 'good for health' is written as 'po ro fo' and 'health is good' is written as 'fo ko po'. What should stand for 'is' in that language?

- Ans**
- 1. ko
  - 2. no
  - 3. po
  - 4. lo


Question ID : 9489111875  
Option 1 ID : 94891147498  
Option 2 ID : 94891147500  
Option 3 ID : 94891147499  
Option 4 ID : 94891147497  
Status : Answered  
Chosen Option : 1



**Download RRB Exams PDF E-BOOKS**

[CLICK HERE](#)

# RRB NTPC EXAM Study Kit



100%

- ▶ 100% Exam Syllabus Covered
- ▶ 8 Books, 950+ Pages
- ▶ Mathematics, General Intelligence & Reasoning,
- ▶ General Science, General Awareness
- ▶ Previous year Solved Papers
- ▶ Mock Tests with Answers
- ▶ 1 Year Current Affairs



# RRB NTPC PDF NOTES

100% Syllabus | 950+ Pages



50%  
OFF

CLICK HERE



CLICK BELOW LINK TO DOWNLOAD PDF NOTES

<https://rrbexamportal.com/study-kit/Railway-NTPC-Exam>

**Download RRB NTPC Exam Study Notes**

**Q.99** Read the given statements and conclusions carefully and decide which of the conclusions logically follow(s) from the statements.

**Statements:**

All flowers are blue.

Some blues are balls.

No ball is red.

**Conclusions:**

I: No flower is red.

II: All flowers are balls.

III: Few balls are blue.

- Ans**
- 1. Only III follows.
  - 2. Only I and II follow.
  - 3. Only II and III follow.
  - 4. I, II and III follow.

Question ID : 94891111882  
Option 1 ID : 94891147527  
Option 2 ID : 94891147525  
Option 3 ID : 94891147526  
Option 4 ID : 94891147528  
Status : Answered  
Chosen Option : 1

**Q.100** The average age of a cricket team of 11 players is 18 years. If 4 players join that team, the average age of the team will be increased by 2 years. What is the average age (in years) of the new members of the team?

- Ans**
- 1. 24
  - 2. 24.5
  - 3. 25
  - 4. 25.5

Question ID : 94891111887  
Option 1 ID : 94891147546  
Option 2 ID : 94891147545  
Option 3 ID : 94891147548  
Option 4 ID : 94891147547  
Status : Answered  
Chosen Option : 4

QP HTML Generated date 2021/08/02-18:03:31



**Download RRB Exams PDF E-BOOKS**

[CLICK HERE](#)