



रेल भर्ती बोर्ड / RAILWAY RECRUITMENT BOARDS



सी ई एन ०१/२०१९ - एन टी पी सी - CEN 01/2019 - NTPC

Participant ID	
Participant Name	
Test Center Name	
Test Date	17/01/2021
Test Time	10:30 AM - 12:00 PM
Subject	NTPC

*** Note**

Correct Answer will carry 1 mark per Question.
Incorrect Answer will carry 1/3 Negative mark.

- Options shown in green color with a tick icon are correct.
- Chosen option on the right of the question indicates the option selected by the candidate.

Section : NTPC

Q.1 The curve surface area of a cylindrical pillar is 264 m^2 and its volume is 924 m^3 . Find the ratio of its height to its diameter.

- Ans
- 1. 1 : 2
 - 2. 7 : 3
 - 3. 5 : 6
 - 4. 3 : 7

Question ID : 9489112865
Option 1 ID : 9489111459
Option 2 ID : 9489111458
Option 3 ID : 9489111460
Option 4 ID : 9489111457
Status : Answered
Chosen Option : 4

Q.2 The famous Indus Valley site Mohenjo-daro was first time excavated by the eminent Indian archaeologist:

- Ans
- 1. BB Lal
 - 2. RD Banerji
 - 3. Daya Ram Sahnii
 - 4. SR Rao

Question ID : 9489112121
Option 1 ID : 9489118482
Option 2 ID : 9489118484
Option 3 ID : 9489118483
Option 4 ID : 9489118481
Status : Answered
Chosen Option : 3



Download RRB Exams PDF E-BOOKS

[CLICK HERE](#)

Download RRB NTPC Exam Study Notes

Q.3 Read the given statements and conclusion carefully and decide which of the options is most appropriate with respect to the statements.

Statements:

(i) Some individuals are weak in English.

(ii) All those who are weak in English are artists.

Conclusion:

Some artists are not individuals.

- Ans**
- 1. The conclusion is irrelevant
 - 2. The conclusion is definitely false
 - 3. The conclusion is definitely true
 - 4. The conclusion is probably true

Question ID : 9489112282

Option 1 ID : 9489119127

Option 2 ID : 9489119128

Option 3 ID : 9489119126

Option 4 ID : 9489119125

Status : Answered

Chosen Option : 2

Q.4 Which of the following is NOT an example of the heating effect of current?

- Ans**
- 1. Bulb
 - 2. Working of a fan
 - 3. Electric iron
 - 4. Electric kettle

Question ID : 9489112114

Option 1 ID : 9489118454

Option 2 ID : 9489118456

Option 3 ID : 9489118453

Option 4 ID : 9489118455

Status : Answered

Chosen Option : 2

Q.5 If $\sqrt{45} + \sqrt{125} = 17.88$ then what will be the value of $\sqrt{180} + \sqrt{80}$?

- Ans**
- 1. 21.6
 - 2. 22.35
 - 3. 13.4
 - 4. 22.2

Question ID : 9489112862

Option 1 ID : 94891111446

Option 2 ID : 94891111448

Option 3 ID : 94891111447

Option 4 ID : 94891111445

Status : Answered

Chosen Option : 2



Download RRB Exams PDF E-BOOKS

[CLICK HERE](#)

Download RRB NTPC Exam Study Notes

Q.6 Which Indian organisation, related to the development of nuclear energy, is situated at Kolkata?

Ans 1. Bhabha Atomic Research Centre (BARC)

2.

Raja Ramanna Centre for Advanced Technology (RRCAT)

3.

Atomic Minerals Directorate for Exploration and Research (AMD)

4. Variable Energy Cyclotron Centre (VECC)

Question ID : 9489112130

Option 1 ID : 9489118520

Option 2 ID : 9489118518

Option 3 ID : 9489118519

Option 4 ID : 9489118517

Status : Answered

Chosen Option : 4

Q.7 The North-South and East-West(NS-EW) corridors of Indian Highway network intersect at _____.

Ans 1. Jaipur

2. Jhansi

3. Bhopal

4. Delhi

Question ID : 9489112140

Option 1 ID : 9489118560

Option 2 ID : 9489118558

Option 3 ID : 9489118559

Option 4 ID : 9489118557

Status : Answered

Chosen Option : 2

Q.8 Select the letter cluster from among the given options that can replace the question mark (?) in the following series.

CF, IL, OR, ?

Ans 1. UY

2. TW

3. TX

4. UX

Question ID : 9489112287

Option 1 ID : 9489119146

Option 2 ID : 9489119147

Option 3 ID : 9489119148

Option 4 ID : 9489119145

Status : Answered

Chosen Option : 4



Download RRB Exams PDF E-BOOKS

[CLICK HERE](#)

Download RRB NTPC Exam Study Notes

Q.9 Who among the following is a Swiss professional tennis player who set a record with eight Wimbledon titles and five consecutive US open titles?

- Ans**
- 1. Rafeal Nadal
 - 2. Novak Djokovic
 - 3. Roger Federer
 - 4. Andy Murray

Question ID : 9489112105
 Option 1 ID : 9489118417
 Option 2 ID : 9489118418
 Option 3 ID : 9489118420
 Option 4 ID : 9489118419
 Status : Answered
 Chosen Option : 3

Q.10 If $\tan A = \frac{8}{15}$ then find $\sin A + \cos A$.

- Ans**
- 1. $\frac{15}{11}$
 - 2. $\frac{7}{17}$
 - 3. $\frac{23}{17}$
 - 4. $\frac{8}{11}$

Question ID : 9489112873
 Option 1 ID : 94891111490
 Option 2 ID : 94891111492
 Option 3 ID : 94891111491
 Option 4 ID : 94891111489
 Status : Answered
 Chosen Option : 3

Q.11 _____ is known as the city of pearls.

- Ans**
- 1. Nagari
 - 2. Tirupati
 - 3. Hyderabad
 - 4. Nellore

Question ID : 9489112109
 Option 1 ID : 9489118434
 Option 2 ID : 9489118436
 Option 3 ID : 9489118433
 Option 4 ID : 9489118435
 Status : Answered
 Chosen Option : 4



Download RRB Exams PDF E-BOOKS

CLICK HERE

Download RRB NTPC Exam Study Notes

Q.12 Select the number that can replace the question mark (?) in the following equation.

$$? + \frac{18}{24} + 3\frac{3}{4} = 23\frac{13}{24}$$

Ans

1. $19\frac{13}{24}$

2. $19\frac{11}{24}$

3. 1

4. $19\frac{1}{24}$

Question ID : 9489112849

Option 1 ID : 9489111394

Option 2 ID : 9489111393

Option 3 ID : 9489111395

Option 4 ID : 9489111396

Status : Answered

Chosen Option : 4

Q.13 Find the least number which is divisible by first ten natural numbers.

Ans

1. 1040

2. 77000

3. 2520

4. 5000

Question ID : 9489112847

Option 1 ID : 9489111385

Option 2 ID : 9489111388

Option 3 ID : 9489111386

Option 4 ID : 9489111387

Status : Answered

Chosen Option : 3

Q.14 Which of the following numbers is divisible by 11?

Ans

1. 332155

2. 202963

3. 181560

4. 203456

Question ID : 9489112853

Option 1 ID : 9489111410

Option 2 ID : 9489111411

Option 3 ID : 9489111409

Option 4 ID : 9489111412

Status : Answered


Chosen Option : 4



Download RRB Exams PDF E-BOOKS

[CLICK HERE](#)

RRB NTPC EXAM Study Kit



100%

- ▶ 100% Exam Syllabus Covered
- ▶ 8 Books, 950+ Pages
- ▶ Mathematics, General Intelligence & Reasoning,
- ▶ General Science, General Awareness
- ▶ Previous year Solved Papers
- ▶ Mock Tests with Answers
- ▶ 1 Year Current Affairs



RRB NTPC PDF NOTES

100% Syllabus | 950+ Pages



50%
OFF

CLICK HERE



CLICK BELOW LINK TO DOWNLOAD PDF NOTES

<https://rrbexamportal.com/study-kit/Railway-NTPC-Exam>

Download RRB NTPC Exam Study Notes

Q.15 Which one of the following determines how different programs exchange data over the internet?

- Ans
- 1. Bluetooth
 - 2. E-mail
 - 3. URL
 - 4. Hypertext transfer protocol

Question ID : 9489112138
Option 1 ID : 9489118549
Option 2 ID : 9489118552
Option 3 ID : 9489118550
Option 4 ID : 9489118551
Status : Answered
Chosen Option : 4

Q.16 Find the HCF of $(3^{45} - 1)$ and $(3^{35} - 1)$.

- Ans
- 1. 728
 - 2. 81
 - 3. 80
 - 4. 242

Question ID : 9489112848
Option 1 ID : 94891111392
Option 2 ID : 94891111390
Option 3 ID : 94891111389
Option 4 ID : 94891111391
Status : Answered
Chosen Option : 4

Q.17 Who among the following was the Chief Justice of India before the current occupant Chief Justice S A Bobde?

- Ans
- 1. Kapil Sibbal
 - 2. Salman Khurshid
 - 3. Ranjan Gogoi
 - 4. Arun Jaitely

Question ID : 9489112106
Option 1 ID : 9489118423
Option 2 ID : 9489118421
Option 3 ID : 9489118422
Option 4 ID : 9489118424
Status : Answered
Chosen Option : 3



Download RRB Exams PDF E-BOOKS

[CLICK HERE](#)

Download RRB NTPC Exam Study Notes

Q.18 If the average of a_1, a_2, a_3 and a_4 is 19.5, $a_1 = 21$ and the average of a_1, a_2 and a_3 is equal to the average of a_2, a_3 and a_4 , then what will be the value of a_4 ?

- Ans**
- 1. 18
 - 2. 25
 - 3. 20
 - 4. 21

Question ID : 9489112872
 Option 1 ID : 9489111486
 Option 2 ID : 9489111487
 Option 3 ID : 9489111488
 Option 4 ID : 9489111485
 Status : Answered
 Chosen Option : 4

Q.19 Which of the following Harappan site is NOT associated with craft production?

- Ans**
- 1. Chanhudaro
 - 2. Balakot
 - 3. Nageshwar
 - 4. Manda

Question ID : 9489112119
 Option 1 ID : 9489118474
 Option 2 ID : 9489118476
 Option 3 ID : 9489118475
 Option 4 ID : 9489118473
 Status : Answered
 Chosen Option : 3

Q.20 If we increase 50% of numerator and 80% of denominator of a fraction, then what fraction of the original will be the new fraction?

- Ans**
- 1. $\frac{6}{5}$
 - 2. $\frac{5}{6}$
 - 3. $\frac{5}{8}$
 - 4. $\frac{7}{9}$

Question ID : 9489112850
 Option 1 ID : 9489111398
 Option 2 ID : 9489111397
 Option 3 ID : 9489111399
 Option 4 ID : 9489111400
 Status : Answered
 Chosen Option : 2



Download RRB Exams PDF E-BOOKS

CLICK HERE

Download RRB NTPC Exam Study Notes

Q.21 Select the option that is related to the third term in the same way as the second term is related to the first term.

Serene : Calm :: Fierce : ?

- Ans**
- 1. Cooler
 - 2. Aggressive
 - 3. Proud
 - 4. Silent

Question ID : 9489112274
 Option 1 ID : 9489119095
 Option 2 ID : 9489119094
 Option 3 ID : 9489119093
 Option 4 ID : 9489119096
 Status : Answered
 Chosen Option : 2

Q.22 What is the nickname given to ISRO's most powerful Rocket GSLV-Mk III?

- Ans**
- 1. Fat Boy
 - 2. Naughty Boy
 - 3. Naughty Men
 - 4. Fat Men

Question ID : 9489112131
 Option 1 ID : 9489118522
 Option 2 ID : 9489118521
 Option 3 ID : 9489118523
 Option 4 ID : 9489118524
 Status : Answered
 Chosen Option : 1

Q.23 Study the given pattern carefully and select the number from among the given options that can replace the question mark (?).

$$\square + \text{pentagon} + \triangle + \text{hexagon} + \triangle = ?$$

- Ans**
- 1. 21
 - 2. 20
 - 3. 19
 - 4. 13

Question ID : 9489112298
 Option 1 ID : 9489119189
 Option 2 ID : 9489119191
 Option 3 ID : 9489119190
 Option 4 ID : 9489119192
 Status : Answered
 Chosen Option : 1



Download RRB Exams PDF E-BOOKS

CLICK HERE

Download RRB NTPC Exam Study Notes

Q.24 Which option has the words arranged in the order in which they appear in an English dictionary?

- Ans
- 1. Antigen→Antique→Antipathy→Apology→Branch
 - 2. Antigen→Antique→Apology→Antipathy→ Branch
 - 3. Antigen→Antipathy→Antique→Apology→Branch
 - 4. Antipathy→Apology→Branch→Antigen→Antique

Question ID : 9489112283
Option 1 ID : 9489119131
Option 2 ID : 9489119130
Option 3 ID : 9489119132
Option 4 ID : 9489119129
Status : Answered
Chosen Option : 3

Q.25 The instrument used to measure current is called _____.

- Ans
- 1. Ammeter
 - 2. Voltmeter
 - 3. Battery
 - 4. Meter

Question ID : 9489112113
Option 1 ID : 9489118451
Option 2 ID : 9489118450
Option 3 ID : 9489118452
Option 4 ID : 9489118449
Status : Answered
Chosen Option : 1

Q.26 Find the smallest number which must be subtracted from 63535 to make it a perfect square.

- Ans
- 1. 25
 - 2. 31
 - 3. 30
 - 4. 41

Question ID : 9489112845
Option 1 ID : 9489111379
Option 2 ID : 9489111378
Option 3 ID : 9489111380
Option 4 ID : 9489111377
Status : Answered
Chosen Option : 2



Download RRB Exams PDF E-BOOKS

[CLICK HERE](#)

Download RRB NTPC Exam Study Notes

Q.27 How many digits will be there to the right of the decimal point in the product of 99.75 and 0.05554?

- Ans
- 1. 8
 - 2. 6
 - 3. 7
 - 4. 5

Question ID : **9489112852**
Option 1 ID : **9489111405**
Option 2 ID : **9489111407**
Option 3 ID : **9489111406**
Option 4 ID : **9489111408**
Status : **Answered**
Chosen Option : **2**

Q.28 In triangle ABC, bisector of $\angle ABC$ and $\angle ACB$ meet at O. If $\angle BAC = 60^\circ$, then find the measure of $\angle BOC$.

- Ans
- 1. 120°
 - 2. 160°
 - 3. 80°
 - 4. 130°

Question ID : **9489112871**
Option 1 ID : **9489111481**
Option 2 ID : **9489111483**
Option 3 ID : **9489111482**
Option 4 ID : **9489111484**
Status : **Answered**
Chosen Option : **1**

Q.29 In a school there were 6 teachers. A and B taught Hindi and English. D and A taught Mathematics and Science. C and E taught English and Mathematics. F and B taught Hindi and French. Who taught the maximum number of subjects?

- Ans
- 1. E
 - 2. D
 - 3. B
 - 4. A

Question ID : **9489112301**
Option 1 ID : **9489119204**
Option 2 ID : **9489119203**
Option 3 ID : **9489119202**
Option 4 ID : **9489119201**
Status : **Answered**
Chosen Option : **4**



Download RRB Exams PDF E-BOOKS

[CLICK HERE](#)

Download RRB NTPC Exam Study Notes

Q.30 Who developed the theory of 'population growth'?

- Ans
- 1. Aristotle
 - 2. Darwin
 - 3. Plato
 - 4. Malthus

Question ID : 9489112124
Option 1 ID : 9489118494
Option 2 ID : 9489118496
Option 3 ID : 9489118495
Option 4 ID : 9489118493
Status : Answered
Chosen Option : 4

Q.31 In 1944, who took over as the Director General of the Archaeological Survey of India and undertook the excavations of Harappa?

- Ans
- 1. REM Wheeler
 - 2. Rakhal Das Banerji
 - 3. John Marshall
 - 4. Daya Ram Sahni

Question ID : 9489112117
Option 1 ID : 9489118467
Option 2 ID : 9489118468
Option 3 ID : 9489118465
Option 4 ID : 9489118466
Status : Answered
Chosen Option : 2

Q.32 The canal that links the Mediterranean Sea and the Red Sea is:

- Ans
- 1. Soo Canal
 - 2. Suez Canal
 - 3. Welland Canal
 - 4. Panama Canal

Question ID : 9489112122
Option 1 ID : 9489118485
Option 2 ID : 9489118487
Option 3 ID : 9489118488
Option 4 ID : 9489118486
Status : Answered
Chosen Option : 2



Download RRB Exams PDF E-BOOKS

[CLICK HERE](#)

Download RRB NTPC Exam Study Notes

Q.33 Which one of the following is NOT true about plaster of Paris?

- Ans
- 1. Plaster of Paris is used for making ornamental designs.
 - 2. Plaster of Paris doesn't change on wetting with water.
 - 3. Plaster of Paris is white.
 - 4. Plaster of Paris is used to repair the broken bones.

Question ID : 9489112112
Option 1 ID : 9489118448
Option 2 ID : 9489118446
Option 3 ID : 9489118445
Option 4 ID : 9489118447
Status : Answered
Chosen Option : 1

Q.34 Find the total surface area of a cone, if its radius and slant height are $2r$ and $\frac{1}{2}$ respectively.

- Ans
- 1. $\pi (4r^2 + 1)$
 - 2. $\frac{4r^2 + 1}{2}$
 - 3. $\pi r (4r + 1)$
 - 4. $\pi r (2r + 1)$

Question ID : 9489112864
Option 1 ID : 94891111453
Option 2 ID : 94891111456
Option 3 ID : 94891111454
Option 4 ID : 94891111455
Status : Answered
Chosen Option : 3

Q.35 Who was appointed as the first woman speaker of the Lok Sabha?

- Ans
- 1. Smriti Irani
 - 2. Meira Kumar
 - 3. Sushma Swaraj
 - 4. Hema Malini

Question ID : 9489112127
Option 1 ID : 9489118507
Option 2 ID : 9489118506
Option 3 ID : 9489118505
Option 4 ID : 9489118508
Status : Answered
Chosen Option : 2



Download RRB Exams PDF E-BOOKS

[CLICK HERE](#)

Download RRB NTPC Exam Study Notes

Q.36

If $r \sin \theta = \frac{7}{2}$ and $r \cos \theta = \frac{7\sqrt{3}}{2}$, then what will be the value of r?

- Ans
- 1. -1
 - 2. $\sqrt{3}$
 - 3. 5
 - 4. 7

Question ID : 9489112868
Option 1 ID : 94891111472
Option 2 ID : 94891111470
Option 3 ID : 94891111471
Option 4 ID : 94891111469
Status : Answered
Chosen Option : 4

Q.37 Four words have been given, out of which three are alike in some manner and one is different. Select the odd one.

- Ans
- 1. Increase
 - 2. Reduce
 - 3. Raise
 - 4. Enhance

Question ID : 9489112293
Option 1 ID : 9489119169
Option 2 ID : 9489119171
Option 3 ID : 9489119170
Option 4 ID : 9489119172
Status : Answered
Chosen Option : 2

Q.38 Under which Article can the President of India grant pardons, reprieves, respites or remission of punishment or suspend, remit or commute the sentence of any person convicted with the death sentence?

- Ans
- 1. Article 65
 - 2. Article 123
 - 3. Article 50
 - 4. Article 72

Question ID : 9489112129
Option 1 ID : 9489118515
Option 2 ID : 9489118513
Option 3 ID : 9489118514
Option 4 ID : 9489118516
Status : Answered
Chosen Option : 1

**Download RRB Exams PDF E-BOOKS**[CLICK HERE](#)

Download RRB NTPC Exam Study Notes

Q.39 Four words have been given, out of which three are alike in some manner and one is different. Select the odd one.

- Ans**
- 1. Autumn
 - 2. Storm
 - 3. Winter
 - 4. Spring

Question ID : **9489112294**
Option 1 ID : **9489119173**
Option 2 ID : **9489119175**
Option 3 ID : **9489119174**
Option 4 ID : **9489119176**
Status : **Answered**
Chosen Option : **2**

Q.40 Rourkela, Bhilai, Bokaro, Visakhapatnam etc are centres for:

- Ans**
- 1. cotton and textile industry
 - 2. iron and steel industry
 - 3. chemical plants
 - 4. footloose industry

Question ID : **9489112125**
Option 1 ID : **9489118498**
Option 2 ID : **9489118499**
Option 3 ID : **9489118500**
Option 4 ID : **9489118497**
Status : **Answered**
Chosen Option : **2**

Q.41 _____ is a plant which grows in the wild and has stinging hair on its leaves which cause painful stings when touched accidentally.

- Ans**
- 1. Nettle
 - 2. Pigweed
 - 3. Miner's Lettuce
 - 4. Clovers

Question ID : **9489112116**
Option 1 ID : **9489118463**
Option 2 ID : **9489118462**
Option 3 ID : **9489118464**
Option 4 ID : **9489118461**
Status : **Answered**
Chosen Option : **1**



Download RRB Exams PDF E-BOOKS

[CLICK HERE](#)

Download RRB NTPC Exam Study Notes

Q.42 The value of 987×999 is:

- Ans 1. 986013
 2. 980613
 3. 996023
 4. 976023

Question ID : 9489112858
Option 1 ID : 94891111430
Option 2 ID : 94891111429
Option 3 ID : 94891111432
Option 4 ID : 94891111431
Status : Answered
Chosen Option : 1

Q.43 _____ is the UN specialized agency which directs and co-ordinates health related matters internationally.

- Ans 1. WFP
 2. WHO
 3. UNESCO
 4. UNDP

Question ID : 9489112133
Option 1 ID : 9489118531
Option 2 ID : 9489118529
Option 3 ID : 9489118532
Option 4 ID : 9489118530
Status : Answered
Chosen Option : 2

Q.44 Find the area of an equilateral triangle whose perimeter is 24 cm.

- Ans 1. 144 cm^2
 2. $24\sqrt{3} \text{ cm}^2$
 3. $16\sqrt{3} \text{ cm}^2$
 4. 16 cm^2

Question ID : 9489112866
Option 1 ID : 94891111462
Option 2 ID : 94891111464
Option 3 ID : 94891111463
Option 4 ID : 94891111461
Status : Answered
Chosen Option : 3



Download RRB Exams PDF E-BOOKS

[CLICK HERE](#)

Download RRB NTPC Exam Study Notes

Q.45 Eight persons A, B, C, D, E, F, G and H are sitting around a circular table facing opposite to the centre (not necessarily in the same order). B is the neighbour of E and is fourth to the right of A. Only two persons are sitting between E and F. Only three persons are sitting between G and H. B is not the neighbour of G. D is third to the left of C.
Who can be the neighbours of A?

- Ans**
- 1. C and D
 - 2. G and D
 - 3. G and H
 - 4. H and C

Question ID : 9489112302
 Option 1 ID : 9489119207
 Option 2 ID : 9489119206
 Option 3 ID : 9489119205
 Option 4 ID : 9489119208
 Status : Answered
 Chosen Option : 2

Q.46 A salesman has to cover 6 km in $\frac{3}{4}$ h. If he covers $\frac{1}{2}$ of the distance in $\frac{2}{3}$ of the total time, then what must be his speed (in km/h) to cover the remaining distance in the remaining time?

- Ans**
- 1. 8
 - 2. 15
 - 3. 6
 - 4. 12

Question ID : 9489112861
 Option 1 ID : 9489111442
 Option 2 ID : 9489111443
 Option 3 ID : 9489111441
 Option 4 ID : 9489111444
 Status : Answered
 Chosen Option : 4

Q.47 The cost price of 19 pens is equal to the selling price of 16 pens. Percentage gain is:

- Ans**
- 1. $18\frac{3}{4}\%$
 - 2. 12.5%
 - 3. 15%
 - 4. $15\frac{3}{4}\%$

Question ID : 9489112867
 Option 1 ID : 9489111468
 Option 2 ID : 9489111467
 Option 3 ID : 9489111466
 Option 4 ID : 9489111465
 Status : Answered
 Chosen Option : 1



Download RRB Exams PDF E-BOOKS

[CLICK HERE](#)

Download RRB NTPC Exam Study Notes

Q.48 Solve the following.

$$4 \times 36 - 6[3 + 2(216 \div 6) - 51] = ?$$

- Ans
- 1. 10
 - 2. 0
 - 3. 1
 - 4. -1

Question ID : 9489112846
Option 1 ID : 9489111384
Option 2 ID : 9489111383
Option 3 ID : 9489111381
Option 4 ID : 9489111382
Status : Answered
Chosen Option : 2

Q.49 Startup India is the key initiative of the Ministry of _____.

- Ans
- 1. Health and Family Welfare
 - 2. Human Resource Development
 - 3. Skill Development and Entrepreneurship
 - 4. Commerce and Industry

Question ID : 9489112141
Option 1 ID : 9489118563
Option 2 ID : 9489118564
Option 3 ID : 9489118561
Option 4 ID : 9489118562
Status : Answered
Chosen Option : 2

Q.50 If cooler is called 'food', food is called 'rose', rose is called 'restaurant', and restaurant is called 'natkhat', then what would a man eat?

- Ans
- 1. Rose
 - 2. Natkhat
 - 3. Restaurant
 - 4. Cooler

Question ID : 9489112278
Option 1 ID : 9489119112
Option 2 ID : 9489119111
Option 3 ID : 9489119109
Option 4 ID : 9489119110
Status : Answered
Chosen Option : 1

**Download RRB Exams PDF E-BOOKS**[CLICK HERE](#)

Download RRB NTPC Exam Study Notes

Q.51 Which two places are connected by the National Highway, NH-44?

- Ans
- 1. Srinagar to Kanyakumari
 - 2. Lahaul & Spiti to Kanyakumari
 - 3. Vijay Nagar to Kutch
 - 4. Delhi to Chennai

Question ID : 9489112110
Option 1 ID : 9489118438
Option 2 ID : 9489118437
Option 3 ID : 9489118439
Option 4 ID : 9489118440
Status : Answered
Chosen Option : 1

Q.52 A Giffen good is related to which of the following?

- Ans
- 1. Income effect is stronger than the substitution effect
 - 2. Substitution effect is stronger than the income effect
 - 3. Income effect has no relation to the substitution effect
 - 4. Income effect is equal to the substitution effect

Question ID : 9489112142
Option 1 ID : 9489118567
Option 2 ID : 9489118565
Option 3 ID : 9489118568
Option 4 ID : 9489118566
Status : Answered
Chosen Option : 2

Q.53 Which type of sugar is responsible for sweetening in fruits?

- Ans
- 1. Lactose
 - 2. Maltose
 - 3. Fructose
 - 4. Sucrose


Question ID : 9489112111
Option 1 ID : 9489118441
Option 2 ID : 9489118443
Option 3 ID : 9489118444
Option 4 ID : 9489118442
Status : Answered
Chosen Option : 3



Download RRB Exams PDF E-BOOKS

[CLICK HERE](#)

RRB NTPC EXAM Study Kit



100%

- ▶ 100% Exam Syllabus Covered
- ▶ 8 Books, 950+ Pages
- ▶ Mathematics, General Intelligence & Reasoning,
- ▶ General Science, General Awareness
- ▶ Previous year Solved Papers
- ▶ Mock Tests with Answers
- ▶ 1 Year Current Affairs



RRB NTPC PDF NOTES

100% Syllabus | 950+ Pages

50%
OFF

CLICK HERE



CLICK BELOW LINK TO DOWNLOAD PDF NOTES

<https://rrbexamportal.com/study-kit/Railway-NTPC-Exam>

Download RRB NTPC Exam Study Notes

Q.54 Launched on 1st May 2016, the scheme that provides free LPG connection to women from below poverty line families is:

- Ans**
- 1. Pradhan Mantri Sugam Yojana
 - 2. Pradhan Mantri Jan Dhan Yojana
 - 3. Pradhan Mantri Ujjwala Yojana
 - 4. Prime Minister Scheme for free gas connection

Question ID : 9489112107
Option 1 ID : 9489118427
Option 2 ID : 9489118428
Option 3 ID : 9489118425
Option 4 ID : 9489118426
Status : Answered
Chosen Option : 3

Q.55 Two employees Anita and Sarita are paid a total sum of ₹6,600 per month. If Anita is paid 120% of the sum paid to Sarita, then what amount will Sarita get?

- Ans**
- 1. ₹4,500
 - 2. ₹3,000
 - 3. ₹30,000
 - 4. ₹5,000

Question ID : 9489112857
Option 1 ID : 9489111426
Option 2 ID : 9489111425
Option 3 ID : 9489111428
Option 4 ID : 9489111427
Status : Answered
Chosen Option : 2

Q.56 Geeta ranks 8th from the top in the group of 40 students. What will be her rank from the bottom?

- Ans**
- 1. 33
 - 2. 31
 - 3. 32
 - 4. 34

Question ID : 9489112280
Option 1 ID : 9489119118
Option 2 ID : 9489119120
Option 3 ID : 9489119117
Option 4 ID : 9489119119
Status : Answered
Chosen Option : 1

**Download RRB Exams PDF E-BOOKS**[CLICK HERE](#)

Download RRB NTPC Exam Study Notes

Q.57 _____ in India is an anti-corruption institution who can investigate on complaints received from individuals against maladministration by public authorities.

- Ans**
- 1. STF
 - 2. CBI
 - 3. Lokpal
 - 4. IB

Question ID : 9489112128
Option 1 ID : 9489118510
Option 2 ID : 9489118509
Option 3 ID : 9489118511
Option 4 ID : 9489118512
Status : Answered
Chosen Option : 3

Q.58 In ΔXYZ , $XY = 12$ cm and $YZ = 18$ cm. XW , the angle bisector of $\angle YXZ$, meets YZ at W , such that $YW : WZ$ is $4 : 5$. Find the length of the third side of the triangle.

- Ans**
- 1. 12 cm
 - 2. 15 cm
 - 3. 14 cm
 - 4. 18 cm

Question ID : 9489112869
Option 1 ID : 9489111473
Option 2 ID : 9489111476
Option 3 ID : 9489111474
Option 4 ID : 9489111475
Status : Answered
Chosen Option : 2

Q.59 In a certain code language, MOHRA is written as 73541 and KALINGA is written as 2168901. How will HARLIN be written as in that language?

- Ans**
- 1. 568914
 - 2. 541869
 - 3. 514689
 - 4. 514986

Question ID : 9489112279
Option 1 ID : 9489119116
Option 2 ID : 9489119113
Option 3 ID : 9489119115
Option 4 ID : 9489119114
Status : Answered
Chosen Option : 3



Download RRB Exams PDF E-BOOKS

[CLICK HERE](#)

Download RRB NTPC Exam Study Notes

Q.60 Which one of the following is NOT a search engine?

- Ans
- 1. Instagram
 - 2. Google
 - 3. Yahoo
 - 4. Bing

Question ID : 9489112137
Option 1 ID : 9489118548
Option 2 ID : 9489118545
Option 3 ID : 9489118546
Option 4 ID : 9489118547
Status : Answered
Chosen Option : 1

Q.61 _____ is the longest highway of India.

- Ans
- 1. NH-20
 - 2. NH-35
 - 3. NH-44
 - 4. NH-8

Question ID : 9489112139
Option 1 ID : 9489118556
Option 2 ID : 9489118555
Option 3 ID : 9489118553
Option 4 ID : 9489118554
Status : Answered
Chosen Option : 3

Q.62 The mobile app developed by the federation of Indian Export Organisation that provides a wide range of information required to undertake international trade is called _____.

- Ans
- 1. Niryat Saathi
 - 2. Niryat Hub
 - 3. Niryat Mitra
 - 4. Niryat Seva

Question ID : 9489112143
Option 1 ID : 9489118570
Option 2 ID : 9489118571
Option 3 ID : 9489118569
Option 4 ID : 9489118572
Status : Answered
Chosen Option : 1



Download RRB Exams PDF E-BOOKS

[CLICK HERE](#)

Download RRB NTPC Exam Study Notes

Q.63 The Indian painting style which has embellishments of pure gold and precious stones and depicts Hindu deities, especially Lord Krishna is:

- Ans**
- 1. Warli
 - 2. Tanjore Paintings
 - 3. Madhubani
 - 4. Murals

Question ID : **9489112108**
Option 1 ID : **9489118430**
Option 2 ID : **9489118431**
Option 3 ID : **9489118429**
Option 4 ID : **9489118432**
Status : **Answered**
Chosen Option : **4**

Q.64 Two trains are running in the same direction with the speeds of 32 km/h and 26 km/h respectively from X and Y. If X is 42 km away from Y and if they meet at a point Z beyond Y, then the distance from Y to Z will be:

- Ans**
- 1. 182 km
 - 2. 236 km
 - 3. 165 km
 - 4. 148 km

Question ID : **9489112863**
Option 1 ID : **9489111451**
Option 2 ID : **9489111450**
Option 3 ID : **9489111452**
Option 4 ID : **9489111449**
Status : **Answered**
Chosen Option : **1**

Q.65 If $(1 + 2 + x) - (0.12 - 0.42 + 0.94) = 4$, then what will be the value of x?

- Ans**
- 1. 1.64
 - 2. 1.54
 - 3. 2.64
 - 4. 2.54

Question ID : **9489112844**
Option 1 ID : **9489111373**
Option 2 ID : **9489111375**
Option 3 ID : **9489111374**
Option 4 ID : **9489111376**
Status : **Answered**
Chosen Option : **1**



Download RRB Exams PDF E-BOOKS

[CLICK HERE](#)

Download RRB NTPC Exam Study Notes

Q.66 In a lottery, 96.5% of the participants did not win any prize but 700 participants won a prize. The total number of participants is:

- Ans**
- 1. 7000
 - 2. 67550
 - 3. 20000
 - 4. 10000

Question ID : 9489112855
Option 1 ID : 94891111419
Option 2 ID : 94891111420
Option 3 ID : 94891111418
Option 4 ID : 94891111417
Status : Answered
Chosen Option : 3

Q.67 The difference between compound interest and simple interest, at the same rate, on an amount of ₹15,000 for 2 years is ₹24. What is the rate of interest per annum?

- Ans**
- 1. 6%
 - 2. 10%
 - 3. 4%
 - 4. 8%

Question ID : 9489112856
Option 1 ID : 94891111422
Option 2 ID : 94891111424
Option 3 ID : 94891111421
Option 4 ID : 94891111423
Status : Answered
Chosen Option : 3

Q.68 Which of the following mountain ranges is an example of fold mountains?

- Ans**
- 1. Himalayas
 - 2. Vosges
 - 3. Sierra Nevada
 - 4. Harz

Question ID : 9489112126
Option 1 ID : 9489118504
Option 2 ID : 9489118503
Option 3 ID : 9489118501
Option 4 ID : 9489118502
Status : Answered
Chosen Option : 1



Download RRB Exams PDF E-BOOKS

[CLICK HERE](#)

Download RRB NTPC Exam Study Notes

Q.69 Fort William was built by the East India Company. The village of _____ was cleared as a site for the fort.

- Ans**
- 1. Alipore
 - 2. Durganagar
 - 3. Gobindapur
 - 4. Mayurganj

Question ID : 9489112120
Option 1 ID : 9489118477
Option 2 ID : 9489118480
Option 3 ID : 9489118478
Option 4 ID : 9489118479
Status : Answered
Chosen Option : 1

Q.70 A voltmeter is an instrument which can detect the presence of _____

- Ans**
- 1. potential difference
 - 2. heat
 - 3. vibrations
 - 4. magnetic field

Question ID : 9489112115
Option 1 ID : 9489118457
Option 2 ID : 9489118459
Option 3 ID : 9489118460
Option 4 ID : 9489118458
Status : Answered
Chosen Option : 1

Q.71 Select the option that is related to the third term in the same way as the second term is related to the first term.

Needle : Stitch :: Scissors : ?

- Ans**
- 1. Cut
 - 2. Slice
 - 3. Break
 - 4. Scrape

Question ID : 9489112276
Option 1 ID : 9489119104
Option 2 ID : 9489119101
Option 3 ID : 9489119102
Option 4 ID : 9489119103
Status : Answered
Chosen Option : 1



Download RRB Exams PDF E-BOOKS

[CLICK HERE](#)

Download RRB NTPC Exam Study Notes

Q.72 She is the first robot in the world to become a full citizen of a country. Who is she?

- Ans**
- 1. Rose
 - 2. Allen
 - 3. Lily
 - 4. Sophia

Question ID : 9489112136
Option 1 ID : 9489118544
Option 2 ID : 9489118541
Option 3 ID : 9489118543
Option 4 ID : 9489118542
Status : Answered
Chosen Option : 4

Q.73 Which Biosphere Reserve of India has become the 11th such entry from India to be included in the UNESCO's world network of Biosphere Reserves in 2018?

- Ans**
- 1. Pachmarhi
 - 2. Khangchendzonga
 - 3. Nanda Devi
 - 4. Cold Desert

Question ID : 9489112135
Option 1 ID : 9489118538
Option 2 ID : 9489118537
Option 3 ID : 9489118540
Option 4 ID : 9489118539
Status : Answered
Chosen Option : 3

Q.74 How many words can be formed with or without meaning by using all letters of the word DELHI?

- Ans**
- 1. 1
 - 2. 120
 - 3. 20
 - 4. 5

Question ID : 9489112851
Option 1 ID : 9489111403
Option 2 ID : 9489111404
Option 3 ID : 9489111402
Option 4 ID : 9489111401
Status : Answered
Chosen Option : 2



Download RRB Exams PDF E-BOOKS

[CLICK HERE](#)

Download RRB NTPC Exam Study Notes

Q.75 On 22nd July 2019, from which place was the Chandrayaan-2 launched?

- Ans**
- 1. Remote Sensing Centre, Balasore
 - 2. Down Range Station, Port Blair
 - 3. Delhi Earth Station
 - 4. Sriharikota High Altitude Range

Question ID : 9489112132
Option 1 ID : 9489118525
Option 2 ID : 9489118526
Option 3 ID : 9489118528
Option 4 ID : 9489118527
Status : Answered
Chosen Option : 4

Q.76 In ΔPQR , QR is extended up to S so that $RS = RP$. If $\angle PRQ = 70^\circ$ and $\angle QPS = 110^\circ$ then find the measure of $\angle PQS$.

- Ans**
- 1. 50°
 - 2. 35°
 - 3. 65°
 - 4. 55°

Question ID : 9489112870
Option 1 ID : 94891111479
Option 2 ID : 94891111480
Option 3 ID : 94891111478
Option 4 ID : 94891111477
Status : Answered
Chosen Option : 2

Q.77 The ratio of income of Aamir to that of Ali is 5 : 3 and they expend in the ratio of 9 : 5 respectively. If Aamir saves ₹2,600 and Ali saves ₹1,800, Then their respective incomes are:

- Ans**
- 1. ₹8,000, ₹4,800
 - 2. ₹6,000, ₹3,600
 - 3. ₹9,000, ₹5,400
 - 4. ₹8,500, ₹5,100

Question ID : 9489112854
Option 1 ID : 94891111413
Option 2 ID : 94891111414
Option 3 ID : 94891111416
Option 4 ID : 94891111415
Status : Answered
Chosen Option : 1



Download RRB Exams PDF E-BOOKS

[CLICK HERE](#)

Download RRB NTPC Exam Study Notes

Q.78 Select the conclusion, from among the following options, which logically follows from the given statement.

Statement:

One must work hard to be successful in life.

- Ans**
- 1. A hardworking person is satisfied in life.
 - 2. Life is related with hard work.
 - 3. Only those who work hard will be able to pass.
 - 4. Without hard work one cannot be successful in life.

Question ID : 9489112281
Option 1 ID : 9489119123
Option 2 ID : 9489119121
Option 3 ID : 9489119122
Option 4 ID : 9489119124
Status : Answered
Chosen Option : 4

Q.79 The United Nations University is located in:

- Ans**
- 1. Tokyo, Japan
 - 2. Stockholm, Sweden
 - 3. Beijing, China
 - 4. London, England

Question ID : 9489112134
Option 1 ID : 9489118535
Option 2 ID : 9489118533
Option 3 ID : 9489118536
Option 4 ID : 9489118534
Status : Answered
Chosen Option : 1

Q.80 If a number is increased by 20% and then it is decreased by 10%. Its net increase or decrease is:

- Ans**
- 1. 8% increase
 - 2. 10% increase
 - 3. 10% decrease
 - 4. 8% decrease

Question ID : 9489112859
Option 1 ID : 94891111435
Option 2 ID : 94891111433
Option 3 ID : 94891111434
Option 4 ID : 94891111436
Status : Answered
Chosen Option : 1



Download RRB Exams PDF E-BOOKS

[CLICK HERE](#)

Download RRB NTPC Exam Study Notes

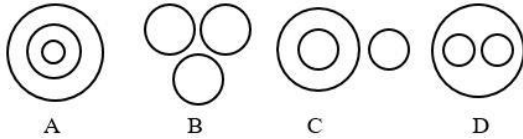
Q.81 Cargo services are a part of the _____ activities of the service sector.

- Ans**
- 1. transport
 - 2. primary
 - 3. tertiary
 - 4. quaternary

Question ID : 9489112123
 Option 1 ID : 9489118490
 Option 2 ID : 9489118489
 Option 3 ID : 9489118492
 Option 4 ID : 9489118491
 Status : Answered
 Chosen Option : 3

Q.82 Select the Venn diagram that best represents the relationship between the given set of classes.

Citizens, Moon, Grains



- Ans**
- 1. D
 - 2. A
 - 3. C
 - 4. B

Question ID : 9489112297
 Option 1 ID : 9489119188
 Option 2 ID : 9489119185
 Option 3 ID : 9489119187
 Option 4 ID : 9489119186
 Status : Answered
 Chosen Option : 4

Q.83 X purchased a car at ₹ 1,50,000 and then sold it to Y at a profit of 5%. Y later sold it back to X at a loss of 2%. Find the overall profit or loss for X in the entire transaction

- Ans**
- 1. X gain ₹3,150
 - 2. X loss ₹4,350
 - 3. X gain ₹4,500
 - 4. X gain ₹4,350

Question ID : 9489112860
 Option 1 ID : 94891111439
 Option 2 ID : 94891111440
 Option 3 ID : 94891111438
 Option 4 ID : 94891111437
 Status : Answered
 Chosen Option : 4



Download RRB Exams PDF E-BOOKS

[CLICK HERE](#)

Download RRB NTPC Exam Study Notes

Q.84 The first revenue settlement in the Bombay Deccan came into operation in the year:

- Ans**
- 1. 1820
 - 2. 1720
 - 3. 1920
 - 4. 1280

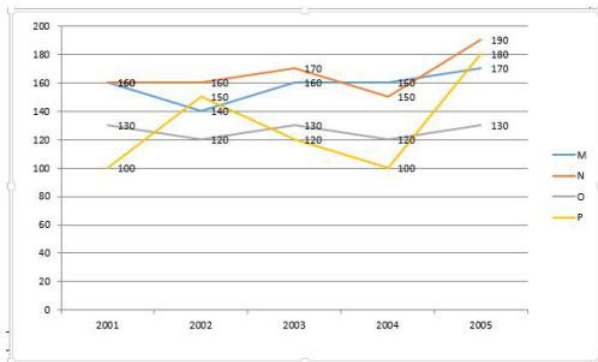
Question ID : **9489112118**
 Option 1 ID : **9489118471**
 Option 2 ID : **9489118470**
 Option 3 ID : **9489118472**
 Option 4 ID : **9489118469**
 Status : **Answered**
 Chosen Option : **1**

Q.85 The highest decoration for valour (during wartime) given to the Indian uniformed soldiers is _____.

- Ans**
- 1. Shaurya Chakra
 - 2. Vir Chakra
 - 3. Mahavir Chakra
 - 4. Param Vir Chakra

Question ID : **9489112104**
 Option 1 ID : **9489118416**
 Option 2 ID : **9489118415**
 Option 3 ID : **9489118414**
 Option 4 ID : **9489118413**
 Status : **Answered**
 Chosen Option : **4**

Q.86 The given graph shows rainfall in centimetres in the cities M, N, O and P from 2001 to 2005. Study the graph and answer the question.



Which city has recorded maximum rainfall on an average?

- Ans**
- 1. N
 - 2. P
 - 3. O
 - 4. M

Question ID : **9489112289**
 Option 1 ID : **9489119154**
 Option 2 ID : **9489119156**
 Option 3 ID : **9489119155**
 Option 4 ID : **9489119153**
 Status : **Answered**
 Chosen Option : **1**

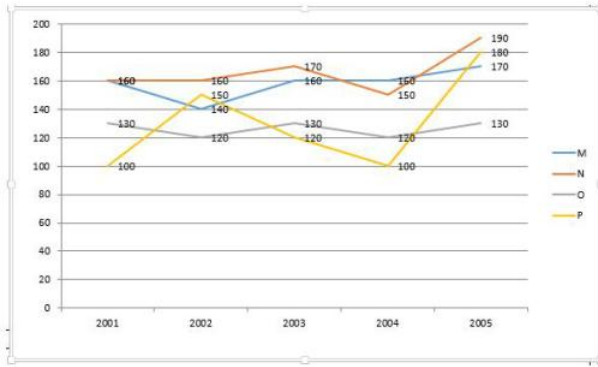


Download RRB Exams PDF E-BOOKS

CLICK HERE

Download RRB NTPC Exam Study Notes

Q.87 The given graph shows rainfall in centimetres in the cities M, N, O and P from 2001 to 2005. Study the graph and answer the question.



For the given period, which two cities are closest to each other in terms of average annual rainfall?

- Ans**
- 1. M and P
 - 2. N and O
 - 3. O and P
 - 4. M and N

Question ID : **9489112290**

Option 1 ID : **9489119160**

Option 2 ID : **9489119158**

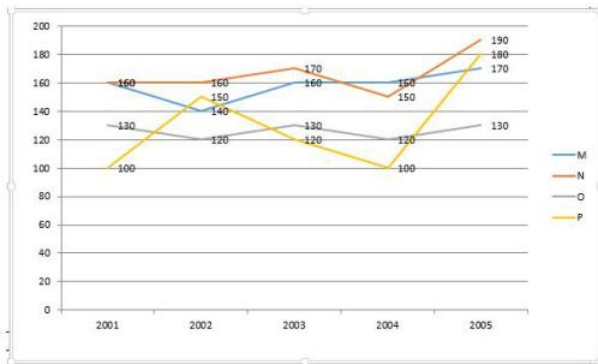
Option 3 ID : **9489119159**

Option 4 ID : **9489119157**

Status : **Answered**

Chosen Option : **3**

Q.88 The given graph shows rainfall in centimetres in the cities M, N, O and P from 2001 to 2005. Study the graph and answer the question.



Which city has the widest range of rainfall over 5 years?

- Ans**
- 1. O
 - 2. P
 - 3. N
 - 4. M

Question ID : **9489112291**

Option 1 ID : **9489119163**

Option 2 ID : **9489119161**

Option 3 ID : **9489119162**

Option 4 ID : **9489119164**

Status : **Answered**

Chosen Option : **3**

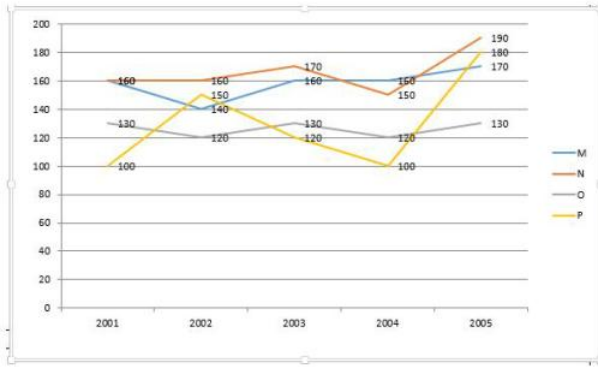


Download RRB Exams PDF E-BOOKS

CLICK HERE

Download RRB NTPC Exam Study Notes

Q.89 The given graph shows rainfall in centimetres in the cities M, N, O and P from 2001 to 2005. Study the graph and answer the question.



Which year recorded highest total rainfall across all the cities?

- Ans**
- 1. 2004
 - 2. 2005
 - 3. 2003
 - 4. 2001

Question ID : 9489112292

Option 1 ID : 9489119167

Option 2 ID : 9489119168

Option 3 ID : 9489119166

Option 4 ID : 9489119165

Status : Answered

Chosen Option : 2

Q.90 Select the letter from among the given options that can replace the question mark (?) in the following series.

B, E, H, K, ?, Q

- Ans**
- 1. N
 - 2. P
 - 3. O
 - 4. M

Question ID : 9489112286

Option 1 ID : 9489119142

Option 2 ID : 9489119143

Option 3 ID : 9489119141

Option 4 ID : 9489119144

Status : Answered

Chosen Option : 1



Download RRB Exams PDF E-BOOKS

[CLICK HERE](#)

Download RRB NTPC Exam Study Notes

Q.91 Select the option that is related to the third term in the same way as the second term is related to the first term.

Nature : Inherent :: Nurture : ?

- Ans**
- 1. Innate
 - 2. Character
 - 3. Trait
 - 4. Foster

Question ID : 9489112277
Option 1 ID : 9489119105
Option 2 ID : 9489119108
Option 3 ID : 9489119106
Option 4 ID : 9489119107
Status : Answered
Chosen Option : 1

Q.92 Select the letter from among the given options that can replace the question mark (?) in the following series.

C, G, K, O, ?, W

- Ans**
- 1. U
 - 2. S
 - 3. T
 - 4. R

Question ID : 9489112285
Option 1 ID : 9489119140
Option 2 ID : 9489119137
Option 3 ID : 9489119139
Option 4 ID : 9489119138
Status : Answered
Chosen Option : 2

Q.93 Select the number from among the given options that can replace the question mark (?) in the following series.

13, 25, 49, 97, ?

- Ans**
- 1. 196
 - 2. 195
 - 3. 198
 - 4. 193

Question ID : 9489112284
Option 1 ID : 9489119135
Option 2 ID : 9489119136
Option 3 ID : 9489119134
Option 4 ID : 9489119133
Status : Answered
Chosen Option : 4



Download RRB Exams PDF E-BOOKS

[CLICK HERE](#)

Download RRB NTPC Exam Study Notes

Q.94 Four words have been given, out of which three are alike in some manner and one is different. Select the odd one.

- Ans
- 1. Original
 - 2. Identical
 - 3. Unique
 - 4. Innovative

Question ID : 9489112295
Option 1 ID : 9489119178
Option 2 ID : 9489119179
Option 3 ID : 9489119180
Option 4 ID : 9489119177
Status : Answered
Chosen Option : 4

Q.95 Select the letter cluster from among the given options that can replace the question mark (?) in the following series.

AYD, BVF, CSH, ?

- Ans
- 1. DPJ
 - 2. EQK
 - 3. DQI
 - 4. DWS

Question ID : 9489112288
Option 1 ID : 9489119150
Option 2 ID : 9489119149
Option 3 ID : 9489119152
Option 4 ID : 9489119151
Status : Answered
Chosen Option : 1

Q.96 If Mohan is taller than Sohan, Ramesh is shorter than Mohan and Sangeeta is taller than Tulika but shorter than Sohan, then who among them is the tallest?

- Ans
- 1. Sangeeta
 - 2. Mohan
 - 3. Ramesh
 - 4. Sohan

Question ID : 9489112303
Option 1 ID : 9489119212
Option 2 ID : 9489119210
Option 3 ID : 9489119211
Option 4 ID : 9489119209
Status : Answered
Chosen Option : 2



Download RRB Exams PDF E-BOOKS

[CLICK HERE](#)

Download RRB NTPC Exam Study Notes

Q.97 Ram is twice as old as Sohan, but twice younger than Rohan. Ravi is half the age of Sohan, but twice the age of Rohit.
Who is the oldest?

- Ans**
- 1. Sohan
 - 2. Ravi
 - 3. Ram
 - 4. Rohan

Question ID : **9489112300**
Option 1 ID : **9489119197**
Option 2 ID : **9489119200**
Option 3 ID : **9489119198**
Option 4 ID : **9489119199**
Status : **Answered**
Chosen Option : **4**

Q.98 Select the option that is related to the third term in the same way as the second term is related to the first term.

Cricket : Bat :: Tennis : ?

- Ans**
- 1. Stick
 - 2. Racquet
 - 3. Ball
 - 4. Game

Question ID : **9489112275**
Option 1 ID : **9489119100**
Option 2 ID : **9489119099**
Option 3 ID : **9489119097**
Option 4 ID : **9489119098**
Status : **Answered**
Chosen Option : **2**

Q.99 Five friends Ram, Shiv, Sunil, Ravi and Rohan are in a tuition batch. Ram is older than Rohan. Ravi and Shiv are older than Sunil, whose age is between Ram and Ravi. If all of them are arranged in the ascending order of their ages, then who will come in the middle?

- Ans**
- 1. Rohan
 - 2. Shiv
 - 3. Ram
 - 4. Sunil


Question ID : **9489112299**
Option 1 ID : **9489119196**
Option 2 ID : **9489119194**
Option 3 ID : **9489119193**
Option 4 ID : **9489119195**
Status : **Answered**
Chosen Option : **4**



Download RRB Exams PDF E-BOOKS

[CLICK HERE](#)

RRB NTPC EXAM Study Kit



- ▶ 100% Exam Syllabus Covered
- ▶ 8 Books, 950+ Pages
- ▶ Mathematics, General Intelligence & Reasoning,
- ▶ General Science, General Awareness
- ▶ Previous year Solved Papers
- ▶ Mock Tests with Answers
- ▶ 1 Year Current Affairs



RRB NTPC PDF NOTES

100% Syllabus | 950+ Pages



50%
OFF

CLICK HERE



CLICK BELOW LINK TO DOWNLOAD PDF NOTES

<https://rrbexamportal.com/study-kit/Railway-NTPC-Exam>

Download RRB NTPC Exam Study Notes

Q.100 Study the given pattern carefully and select the number that can replace the question mark (?) in it.

$$\square + \square + \square = 12$$

$$\text{Pentagon} + \text{Pentagon} + \text{Pentagon} = 15$$

$$\text{Circle} + \text{Circle} + \text{Circle} = 06$$

$$\square + \text{Pentagon} + \text{Circle} = ?$$

Ans 1. 11

2. 12

3. 8

4. 13

Question ID : 9489112296

Option 1 ID : 9489119184

Option 2 ID : 9489119182

Option 3 ID : 9489119181

Option 4 ID : 9489119183

Status : Answered

Chosen Option : 1

QP HTML Generated date 2021/08/01-13:42:52



Download RRB Exams PDF E-BOOKS

[CLICK HERE](#)