



## रेल भर्ती बोर्ड / RAILWAY RECRUITMENT BOARDS



सी ई एन ०१/२०१९ - एन टी पी सी - CEN 01/2019 - NTPC

Participant ID	
Participant Name	
Test Center Name	
Test Date	05/03/2021
Test Time	3:00 PM - 4:30 PM
Subject	NTPC

**\* Note**

Correct Answer will carry 1 mark per Question.  
Incorrect Answer will carry 1/3 Negative mark.

- Options shown in green color with a tick icon are correct.
- Chosen option on the right of the question indicates the option selected by the candidate.

Section : NTPC

Q.1 A fruit seller has some oranges. He sells 60% of them and still has 380 oranges. Originally, he had \_\_\_\_\_ oranges.

- Ans
- 1. 940
  - 2. 930
  - 3. 950
  - 4. 920

Question ID : 9489117854  
Option 1 ID : 94891131414  
Option 2 ID : 94891131415  
Option 3 ID : 94891131413  
Option 4 ID : 94891131416  
Status : Answered  
Chosen Option : 3

Q.2 In which state is Mamallapuram Utsav celebrated?

- Ans
- 1. Karnataka
  - 2. Kerala
  - 3. Andhra Pradesh
  - 4. Tamil Nadu

Question ID : 9489117608  
Option 1 ID : 94891130429  
Option 2 ID : 94891130430  
Option 3 ID : 94891130432  
Option 4 ID : 94891130431  
Status : Answered  
Chosen Option : 4



Download RRB Exams PDF E-BOOKS

[CLICK HERE](#)

## Download RRB NTPC Exam Study Notes

Q.3 OTPC is a joint venture of which of the following PSUs?

- Ans
- 1. ONGC
  - 2. CIL
  - 3. NTPC
  - 4. SAIL

Question ID : 9489117642  
Option 1 ID : 94891130567  
Option 2 ID : 94891130568  
Option 3 ID : 94891130566  
Option 4 ID : 94891130565  
Status : Answered  
Chosen Option : 3

Q.4 \_\_\_\_\_ is the first tagged Indian item under the Geographic Indicator tag through the TRIPS Agreement.

- Ans
- 1. Indian turmeric
  - 2. Darjeeling tea
  - 3. Indian neem
  - 4. Basmati rice

Question ID : 9489117624  
Option 1 ID : 94891130494  
Option 2 ID : 94891130493  
Option 3 ID : 94891130496  
Option 4 ID : 94891130495  
Status : Answered  
Chosen Option : 2

Q.5 Who was the Chief Election Commissioner of India during the Lok Sabha Elections of 2019?

- Ans
- 1. TN Seshan
  - 2. Nasim Zaidi
  - 3. Sunil Arora
  - 4. Om Prakash Rawat

Question ID : 9489117604  
Option 1 ID : 94891130413  
Option 2 ID : 94891130416  
Option 3 ID : 94891130414  
Option 4 ID : 94891130415  
Status : Answered  
Chosen Option : 3



Download RRB Exams PDF E-BOOKS

[CLICK HERE](#)

## Download RRB NTPC Exam Study Notes

Q.6 The difference between a 16% profit and a 12% loss while selling an article is ₹70. What is the cost price of the article?

- Ans
- 1. ₹240
  - 2. ₹225
  - 3. ₹250
  - 4. ₹235

Question ID : 9489117861  
Option 1 ID : 94891131441  
Option 2 ID : 94891131442  
Option 3 ID : 94891131444  
Option 4 ID : 94891131443  
Status : Answered  
Chosen Option : 3

Q.7 Find the mean of the following data.

8, -2, 9, 6, 13, 17, 12

- Ans
- 1. 11
  - 2. 12
  - 3. 9
  - 4. 10

Question ID : 9489117872  
Option 1 ID : 94891131487  
Option 2 ID : 94891131488  
Option 3 ID : 94891131485  
Option 4 ID : 94891131486  
Status : Answered  
Chosen Option : 3

Q.8 The International Telecommunication Union (ITU) was founded in \_\_\_\_\_ to facilitate international connectivity in communication networks.

- Ans
- 1. 1885
  - 2. 1865
  - 3. 1945
  - 4. 1995

Question ID : 9489117634  
Option 1 ID : 94891130535  
Option 2 ID : 94891130534  
Option 3 ID : 94891130533  
Option 4 ID : 94891130536  
Status : Answered  
Chosen Option : 4



Download RRB Exams PDF E-BOOKS

[CLICK HERE](#)

## Download RRB NTPC Exam Study Notes

Q.9 Trachea is a part of the \_\_\_\_\_ system of the human body.

- Ans
- 1. excretory
  - 2. cardiac
  - 3. digestive
  - 4. respiratory

Question ID : 9489117612  
Option 1 ID : 94891130445  
Option 2 ID : 94891130446  
Option 3 ID : 94891130448  
Option 4 ID : 94891130447  
Status : Answered  
Chosen Option : 4

Q.10 Select the option in which the words share the same relationship as that shared by the given pair of words.

Rhino : Horn

- Ans
- 1. Donkey : Bray
  - 2. Elephant : Tusk
  - 3. Cow : Calf
  - 4. Dog : Bark

Question ID : 9489117977  
Option 1 ID : 94891131908  
Option 2 ID : 94891131905  
Option 3 ID : 94891131906  
Option 4 ID : 94891131907  
Status : Answered  
Chosen Option : 2

Q.11 The Chinaman style of bowling in Cricket has been named after:

- Ans
- 1. an English bowler of Chinese origin
  - 2. an Indian bowler of Chinese origin
  - 3. an Australian bowler of Chinese origin
  - 4. a West Indian bowler of Chinese origin

Question ID : 9489117607  
Option 1 ID : 94891130427  
Option 2 ID : 94891130426  
Option 3 ID : 94891130428  
Option 4 ID : 94891130425  
Status : Answered  
Chosen Option : 1



Download RRB Exams PDF E-BOOKS

[CLICK HERE](#)

## Download RRB NTPC Exam Study Notes

Q.12 Select the figure from the options that when placed in the blank space will complete the pattern.



Ans

1.



2.



3.



4.



Question ID : 9489118003  
Option 1 ID : 94891132009  
Option 2 ID : 94891132012  
Option 3 ID : 94891132011  
Option 4 ID : 94891132010

Status : Answered

Chosen Option : 2

Q.13 1 gigabyte equals to:

Ans

1. 1000 megabytes

2. 100 megabytes

3. 10 megabytes

4. 10000 megabytes

Question ID : 9489117636  
Option 1 ID : 94891130543  
Option 2 ID : 94891130542  
Option 3 ID : 94891130544  
Option 4 ID : 94891130541

Status : Answered


Chosen Option : 1



Download RRB Exams PDF E-BOOKS

[CLICK HERE](#)

# RRB NTPC EXAM Study Kit



- ▶ 100% Exam Syllabus Covered
- ▶ 8 Books, 950+ Pages
- ▶ Mathematics, General Intelligence & Reasoning,
- ▶ General Science, General Awareness
- ▶ Previous year Solved Papers
- ▶ Mock Tests with Answers
- ▶ 1 Year Current Affairs



# RRB NTPC PDF NOTES

100% Syllabus | 950+ Pages



50%  
OFF

CLICK HERE



CLICK BELOW LINK TO DOWNLOAD PDF NOTES

<https://rrbexamportal.com/study-kit/Railway-NTPC-Exam>

## Download RRB NTPC Exam Study Notes

Q.14 The famous Konark Sun Temple is attributed to:

- Ans
- 1. King Rajaraja Chola
  - 2. King Raghunath Singha
  - 3. King Ashoka
  - 4. King Narasimhadeva I

Question ID : 9489117610  
Option 1 ID : 94891130439  
Option 2 ID : 94891130437  
Option 3 ID : 94891130440  
Option 4 ID : 94891130438  
Status : Answered  
Chosen Option : 4

Q.15 The share of the Government of India (GOI) in NABARD has increased to \_\_\_\_\_ in April 2019.

- Ans
- 1. 75%
  - 2. 50.00%
  - 3. 100%
  - 4. 90.00%

Question ID : 9489117641  
Option 1 ID : 94891130561  
Option 2 ID : 94891130562  
Option 3 ID : 94891130564  
Option 4 ID : 94891130563  
Status : Answered  
Chosen Option : 4

Q.16 Which bank recently (in April 2019) became the 3<sup>rd</sup> largest bank of India after the merger with two other banks?

- Ans
- 1. Bank of Baroda
  - 2. Punjab National Bank
  - 3. State Bank of India
  - 4. Indian bank

Question ID : 9489117605  
Option 1 ID : 94891130420  
Option 2 ID : 94891130419  
Option 3 ID : 94891130418  
Option 4 ID : 94891130417  
Status : Answered  
Chosen Option : 1



Download RRB Exams PDF E-BOOKS

[CLICK HERE](#)

## Download RRB NTPC Exam Study Notes

Q.17 Convert  $\frac{8}{9}$  into a decimal number.

- Ans
- 1. 0.85
  - 2. 0.88
  - 3. 0.77
  - 4. 0.91

Question ID : 9489117847  
Option 1 ID : 94891131385  
Option 2 ID : 94891131386  
Option 3 ID : 94891131387  
Option 4 ID : 94891131388  
Status : Answered  
Chosen Option : 2

Q.18 Who among the following first conceived the idea of the Indian National Army?

- Ans
- 1. Mohan Singh
  - 2. Lala Hardayal
  - 3. Rash Behari Bose
  - 4. Subhash Chandra Bose

Question ID : 9489117620  
Option 1 ID : 94891130480  
Option 2 ID : 94891130479  
Option 3 ID : 94891130478  
Option 4 ID : 94891130477  
Status : Answered  
Chosen Option : 3

Q.19 The perimeter of a rectangle is 100 m and its length is 29 m. Find its width.

- Ans
- 1. 42 m
  - 2. 21 m
  - 3. 69 m
  - 4. 48 m

Question ID : 9489117866  
Option 1 ID : 94891131462  
Option 2 ID : 94891131463  
Option 3 ID : 94891131461  
Option 4 ID : 94891131464  
Status : Answered  
Chosen Option : 2



Download RRB Exams PDF E-BOOKS

[CLICK HERE](#)



## Download RRB NTPC Exam Study Notes

Q.20 The President of India nominates two members of the \_\_\_\_\_ community in the Lok Sabha.

- Ans
- 1. Indian Jain
  - 2. Indian Buddhist
  - 3. Anglo-Indian
  - 4. Parsi

Question ID : 9489117628

Option 1 ID : 94891130512

Option 2 ID : 94891130509

Option 3 ID : 94891130511

Option 4 ID : 94891130510

Status : Answered

Chosen Option : 3

Q.21 Ramu can reach a certain place in 30 hours. If he reduces his speed by  $\frac{1}{15}$ th, he goes 10 km less in that time. Find his speed.

- Ans
- 1. 4 km/h
  - 2. 6 km/h
  - 3.  $5\frac{1}{2}$  km/h
  - 4. 5 km/h

Question ID : 9489117865

Option 1 ID : 94891131457

Option 2 ID : 94891131460

Option 3 ID : 94891131459

Option 4 ID : 94891131458

Status : Answered

Chosen Option : 4

Q.22 India's Polar Satellite Launch Vehicle (PSLV-C45) successfully launched \_\_\_\_\_ on 1<sup>st</sup> April, 2019.

- Ans
- 1. GSAT
  - 2. INSAT
  - 3. EMISAT
  - 4. DELSAT

Question ID : 9489117631

Option 1 ID : 94891130524

Option 2 ID : 94891130522

Option 3 ID : 94891130521

Option 4 ID : 94891130523

Status : Answered

Chosen Option : 2



Download RRB Exams PDF E-BOOKS

[CLICK HERE](#)

## Download RRB NTPC Exam Study Notes

**Q.23** Pushpa introduced her friends to Sujeeta and Radha by saying, "Radha's maternal grandmother's only son-in-law is Sujeeta's father". From the options given below, how is Sujeeta related to Radha?

- Ans**
- 1. Mother-in-law
  - 2. Sister
  - 3. Mother
  - 4. Maternal aunt

Question ID : 9489117978

Option 1 ID : 94891131910

Option 2 ID : 94891131909

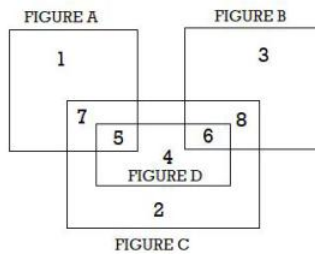
Option 3 ID : 94891131912

Option 4 ID : 94891131911

Status : Answered

Chosen Option : 2

**Q.24** The following figure is a combination of 4 figures, A, B, C and D. Figure A represents people who are pizza lovers while figure B represents burger lovers. Figure C and D represent noodle and dumpling lovers respectively. According to the figure below, what does region 5 depict?



- Ans**
- 1. People who are only pizza and dumpling lovers
  - 2. People who are pizza, noodle and dumpling lovers
  - 3. People who are pizza, noodle and burger lovers
  - 4. People who are only pizza and noodle lovers

Question ID : 9489117998

Option 1 ID : 94891131989

Option 2 ID : 94891131991

Option 3 ID : 94891131992

Option 4 ID : 94891131990

Status : Answered

Chosen Option : 2



Download RRB Exams PDF E-BOOKS

[CLICK HERE](#)

Q.25 Simplify the following.

$$\frac{2}{5} \times [2 + \{3 + (12 + 4 + 3)\}]$$

Ans

1.  $9\frac{3}{2}$

2.  $9\frac{3}{4}$

3.  $9\frac{3}{6}$

4.  $9\frac{3}{5}$

Question ID : 9489117844

Option 1 ID : 94891131373

Option 2 ID : 94891131374

Option 3 ID : 94891131376

Option 4 ID : 94891131375

Status : Answered

Chosen Option : 4

Q.26 Karan walked 100 steps towards the north and then walked 30 steps after turning to his left. He then walked 40 steps towards his right. He then, turned towards his right and walked 40 steps. From there, turning towards his right he walked 140 steps. How far and in which direction is Karan with respect to the starting point?

Ans

1. 10 steps, East

2. 20 steps, West

3. 10 steps, West

4. 20 steps, North

Question ID : 9489117997

Option 1 ID : 94891131985

Option 2 ID : 94891131988

Option 3 ID : 94891131986

Option 4 ID : 94891131987

Status : Answered

Chosen Option : 1



## Download RRB NTPC Exam Study Notes

Q.27 Solve the following

$$\sqrt[3]{\sqrt{0.000064}} = ?$$

- Ans
- 1. 0.2
  - 2. 2.0
  - 3. 0.02
  - 4. 0.002

Question ID : 9489117853  
Option 1 ID : 94891131410  
Option 2 ID : 94891131409  
Option 3 ID : 94891131411  
Option 4 ID : 94891131412  
Status : Answered  
Chosen Option : 1

Q.28 The ratio of the age of Naresh to that of Suresh is 6 : 5 and the sum of their ages is 44 years. The ratio of their respective ages after 15 years will be:

- Ans
- 1. 39 : 35
  - 2. 30 : 35
  - 3. 34 : 39
  - 4. 39 : 34

Question ID : 9489117857  
Option 1 ID : 94891131426  
Option 2 ID : 94891131427  
Option 3 ID : 94891131425  
Option 4 ID : 94891131428  
Status : Answered  
Chosen Option : 1

Q.29 A spring balance is a device commonly used for measuring the \_\_\_\_\_ acting on an object.

- Ans
- 1. force
  - 2. momentum
  - 3. velocity
  - 4. weight

Question ID : 9489117615  
Option 1 ID : 94891130457  
Option 2 ID : 94891130460  
Option 3 ID : 94891130458  
Option 4 ID : 94891130459  
Status : Answered  
Chosen Option : 4



Download RRB Exams PDF E-BOOKS

[CLICK HERE](#)

## Download RRB NTPC Exam Study Notes

Q.30 Muriatic acid is scientifically known as:

- Ans
- 1. Sulphuric acid
  - 2. Perchloric acid
  - 3. Hydrochloric acid
  - 4. Picric acid

Question ID : 9489117613  
Option 1 ID : 94891130451  
Option 2 ID : 94891130452  
Option 3 ID : 94891130450  
Option 4 ID : 94891130449  
Status : Answered  
Chosen Option : 3

Q.31 Which country held the world's first underwater cabinet meeting to highlight the issue of climate change?

- Ans
- 1. Maldives
  - 2. Thailand
  - 3. Haiti
  - 4. Malaysia

Question ID : 9489117635  
Option 1 ID : 94891130539  
Option 2 ID : 94891130540  
Option 3 ID : 94891130538  
Option 4 ID : 94891130537  
Status : Answered  
Chosen Option : 3

Q.32 If  $\sin x - 5\cos x = 2\sqrt{6} \cos x$ , then the value of  $\cot x$  is:

- Ans
- 1.  $2\sqrt{6}$
  - 2.  $5 + 2\sqrt{6}$
  - 3. 1
  - 4.  $5 - 2\sqrt{6}$

Question ID : 9489117869  
Option 1 ID : 94891131474  
Option 2 ID : 94891131475  
Option 3 ID : 94891131473  
Option 4 ID : 94891131476  
Status : Answered  
Chosen Option : 4



Download RRB Exams PDF E-BOOKS

[CLICK HERE](#)

## Download RRB NTPC Exam Study Notes

Q.33 Telangana is the \_\_\_\_\_ state of India.

- Ans
- 1. 28<sup>th</sup>
  - 2. 27<sup>th</sup>
  - 3. 30<sup>th</sup>
  - 4. 29<sup>th</sup>

Question ID : 9489117622

Option 1 ID : 94891130486

Option 2 ID : 94891130485

Option 3 ID : 94891130488

Option 4 ID : 94891130487


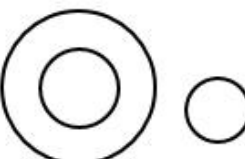

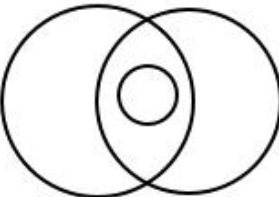
Status : Answered

Chosen Option : 4

Q.34 Select the Venn diagram that best represents the relationship between the given set of classes.

Eagle, Predator, Bird

Ans

- 1. 
- 2. 
- 3. 
- 4. 

Question ID : 9489117996

Option 1 ID : 94891131981

Option 2 ID : 94891131984

Option 3 ID : 94891131982

Option 4 ID : 94891131983

Status : Answered

Chosen Option : 4



Download RRB Exams PDF E-BOOKS

[CLICK HERE](#)

## Download RRB NTPC Exam Study Notes

Q.35 The “slash and burn” agriculture in Andaman and Nicobar islands is known as:

- Ans
- 1. Milpa
  - 2. Jhumming
  - 3. Pamlou
  - 4. Dipa

Question ID : 9489117625  
Option 1 ID : 94891130500  
Option 2 ID : 94891130499  
Option 3 ID : 94891130497  
Option 4 ID : 94891130498  
Status : Answered  
Chosen Option : 2

Q.36 Which of the following is (Under Mughal ruler-Foreign traveller visited India)-correctly matched?

- Ans
- 1. Aurangzeb - Manucci
  - 2. Shah Jahan – William Hawkins
  - 3. Jahangir - Manucci
  - 4. Akbar – Sir Thomas Roe

Question ID : 9489117621  
Option 1 ID : 94891130482  
Option 2 ID : 94891130483  
Option 3 ID : 94891130484  
Option 4 ID : 94891130481  
Status : Answered  
Chosen Option : 1

Q.37 The Radcliffe Line has become the international border between:

- Ans
- 1. India and Bangladesh
  - 2. India and China
  - 3. India and Pakistan
  - 4. India and Nepal

Question ID : 9489117623  
Option 1 ID : 94891130491  
Option 2 ID : 94891130489  
Option 3 ID : 94891130492  
Option 4 ID : 94891130490  
Status : Answered  
Chosen Option : 3



Download RRB Exams PDF E-BOOKS

[CLICK HERE](#)

## Download RRB NTPC Exam Study Notes

**Q.38** During the first decade of 20th century, which place was considered as nerve centre of Indian nationalism?

- Ans
- 1. Uttar Pradesh
  - 2. Madras
  - 3. Bihar
  - 4. Bengal

Question ID : 9489117617  
Option 1 ID : 94891130468  
Option 2 ID : 94891130465  
Option 3 ID : 94891130466  
Option 4 ID : 94891130467  
Status : Answered  
Chosen Option : 4

**Q.39** Qamar sold 18 toys for ₹980, thereby making a loss equal to the cost price of 4 toys. What was the cost price of each toy?

- Ans
- 1. ₹75
  - 2. ₹80
  - 3. ₹60
  - 4. ₹70

Question ID : 9489117860  
Option 1 ID : 94891131438  
Option 2 ID : 94891131439  
Option 3 ID : 94891131437  
Option 4 ID : 94891131440  
Status : Answered  
Chosen Option : 2

**Q.40** Study the given pattern carefully and select the number that can replace the question mark (?) in it.

6	38	9	21	4	6
10	8	15	4	6	?

- Ans
- 1. 60
  - 2. 3
  - 3. 1
  - 4. 16

Question ID : 9489117983  
Option 1 ID : 94891131930  
Option 2 ID : 94891131931  
Option 3 ID : 94891131932  
Option 4 ID : 94891131929  
Status : Answered  
Chosen Option : 3



Download RRB Exams PDF E-BOOKS

[CLICK HERE](#)



## Download RRB NTPC Exam Study Notes

Q.41 WikiLeaks co-founder Julian Assange is a computer programmer of which country?

- Ans
- 1. USA
  - 2. UK
  - 3. Australia
  - 4. Russia

Question ID : 9489117606  
Option 1 ID : 94891130422  
Option 2 ID : 94891130421  
Option 3 ID : 94891130423  
Option 4 ID : 94891130424  
Status : Answered  
Chosen Option : 2

Q.42 The concept of Federation with strong Centre in the Indian Constitution has been taken from:

- Ans
- 1. Great Britain
  - 2. Ireland
  - 3. Canada
  - 4. USA

Question ID : 9489117629  
Option 1 ID : 94891130515  
Option 2 ID : 94891130514  
Option 3 ID : 94891130516  
Option 4 ID : 94891130513  
Status : Answered  
Chosen Option : 3

Q.43 RLV-TD of ISRO, an unmanned test bed, stands for:

- Ans
- 1.  
Reusable Satellite Long Vehicle-Technology Demonstrator
  - 2.  
Refillable Satellite Long Vehicle-Technology Demonstrator
  - 3.  
Reusable Satellite Launch Vehicle Technology Demonstrator
  - 4.  
Relaunchable Satellite Long Vehicle Technology Demonstrator

Question ID : 9489117632  
Option 1 ID : 94891130526  
Option 2 ID : 94891130527  
Option 3 ID : 94891130528  
Option 4 ID : 94891130525  
Status : Answered  
Chosen Option : 3



Download RRB Exams PDF E-BOOKS

[CLICK HERE](#)

## Download RRB NTPC Exam Study Notes

Q.44 If  $\frac{a}{3} = \frac{b}{4} = \frac{c}{7}$ , then  $\frac{a+b+c}{c}$  is equal to:

- Ans
- 1. 4
  - 2. 1
  - 3. 3
  - 4. 2

Question ID : 9489117859  
Option 1 ID : 94891131436  
Option 2 ID : 94891131433  
Option 3 ID : 94891131435  
Option 4 ID : 94891131434  
Status : Answered  
Chosen Option : 4

Q.45 If  $\sqrt{7} = 2.6$ , then the value of  $\frac{5\sqrt{7}}{4\sqrt{7} - 0.4}$  is:

- Ans
- 1. 1.2
  - 2. 1.1
  - 3. 1.5
  - 4. 1.3

Question ID : 9489117848  
Option 1 ID : 94891131392  
Option 2 ID : 94891131390  
Option 3 ID : 94891131391  
Option 4 ID : 94891131389  
Status : Answered  
Chosen Option : 4

Q.46 Ramu and Somu together can complete a task in 10 days. Somu and Dhamu together can complete it in 12 days. Dhamu and Ramu together can complete it in 15 days. If Ramu, Somu and Dhamu work together, in how many days will they complete the task?

- Ans
- 1. 7
  - 2. 6
  - 3. 9
  - 4. 8

Question ID : 9489117863  
Option 1 ID : 94891131450  
Option 2 ID : 94891131449  
Option 3 ID : 94891131452  
Option 4 ID : 94891131451  
Status : Answered  
Chosen Option : 4



Download RRB Exams PDF E-BOOKS

[CLICK HERE](#)

## Download RRB NTPC Exam Study Notes

Q.47 The sum of the angles of a quadrilateral is \_\_\_\_\_.

- Ans
- 1.  $180^\circ$
  - 2.  $270^\circ$
  - 3.  $360^\circ$
  - 4.  $90^\circ$

Question ID : 9489117867  
Option 1 ID : 94891131467  
Option 2 ID : 94891131466  
Option 3 ID : 94891131465  
Option 4 ID : 94891131468  
Status : Answered  
Chosen Option : 3

Q.48 The National Electronics Policy (NEP) 2019 aims to create an SPF. What does SPF stand for?

- Ans
- 1. Sovereign Protection Factor
  - 2. Sovereign Patent Factor
  - 3. Sovereign Protection Fund
  - 4. Sovereign Patent Fund

Question ID : 9489117639  
Option 1 ID : 94891130553  
Option 2 ID : 94891130554  
Option 3 ID : 94891130555  
Option 4 ID : 94891130556  
Status : Answered  
Chosen Option : 2

Q.49 In a code language, BIHAR is written as AGEWM and GUJARAT is written as FSGWMUM. How will KASHMIR be written as in that code language?

- Ans
- 1. JYPDHCK
  - 2. JYPHDCK
  - 3. JYPDCHK
  - 4. JYPCHDK

Question ID : 9489117974  
Option 1 ID : 94891131894  
Option 2 ID : 94891131895  
Option 3 ID : 94891131893  
Option 4 ID : 94891131896  
Status : Answered  
Chosen Option : 1



Download RRB Exams PDF E-BOOKS

[CLICK HERE](#)

## Download RRB NTPC Exam Study Notes

Q.50 The first 5 year plan of the Government of India was based on the:

- Ans
- 1. Harrod-Domar model
  - 2. Keynesian IS/LM model
  - 3. P.C. Mahalanobis model
  - 4. Gadgil model

Question ID : 9489117643

Option 1 ID : 94891130570

Option 2 ID : 94891130572

Option 3 ID : 94891130571

Option 4 ID : 94891130569

Status : Answered

Chosen Option : 1

Q.51 GPRS stands for:

- Ans
- 1. Guiding Packet Radio Systems
  - 2. General Popular Radio Systems
  - 3. General Packet Radio Services
  - 4. General Payment Radio Services

Question ID : 9489117637

Option 1 ID : 94891130546

Option 2 ID : 94891130545

Option 3 ID : 94891130547

Option 4 ID : 94891130548

Status : Answered

Chosen Option : 1

Q.52 If  $\sin \theta = \frac{4}{5}$  and  $\theta$  is NOT in the first quadrant, then find the value of  $\cos \theta$ .

- Ans
- 1.  $-\frac{3}{5}$
  - 2.  $-\frac{4}{5}$
  - 3.  $\frac{3}{5}$
  - 4.  $\frac{4}{5}$

Question ID : 9489117871

Option 1 ID : 94891131482

Option 2 ID : 94891131484

Option 3 ID : 94891131481

Option 4 ID : 94891131483

Status : Answered

Chosen Option : 1



Download RRB Exams PDF E-BOOKS

[CLICK HERE](#)

## Download RRB NTPC Exam Study Notes

Q.53 Suhas can cover the distance between point A and point B in 7 hours, if he travels at an average speed of 104 km/h. He travelled for the first four hours at an average speed of 118 km/h. What should be his average speed for the rest of the journey if he wants to reach his destination in a total time of 8 hours from the start of the journey?

- Ans
- 1. 70 km/h
  - 2. 60 km/h
  - 3. 64 km/h
  - 4. 72 km/h

Question ID : 9489117864

Option 1 ID : 94891131455

Option 2 ID : 94891131453

Option 3 ID : 94891131454

Option 4 ID : 94891131456

Status : Answered

Chosen Option : 3

Q.54 What percentage of a day is 3 h?

- Ans
- 1.  $10\frac{1}{2}\%$
  - 2.  $12\frac{1}{2}\%$
  - 3.  $16\frac{1}{2}\%$
  - 4.  $14\frac{1}{2}\%$

Question ID : 9489117855

Option 1 ID : 94891131417

Option 2 ID : 94891131418

Option 3 ID : 94891131420

Option 4 ID : 94891131419

Status : Answered

Chosen Option : 2

Q.55 The first Pradhanacharya of the Brahmo Samaj was:

- Ans
- 1. Ramakrishna Paramhans
  - 2. Raja Ram Mohan Roy
  - 3. Ishwar Chandra Vidyasagar
  - 4. Swami Vivekanand

Question ID : 9489117619

Option 1 ID : 94891130475

Option 2 ID : 94891130473

Option 3 ID : 94891130476

Option 4 ID : 94891130474

Status : Answered


Chosen Option : 2



Download RRB Exams PDF E-BOOKS

[CLICK HERE](#)

# RRB NTPC EXAM Study Kit



- ▶ 100% Exam Syllabus Covered
- ▶ 8 Books, 950+ Pages
- ▶ Mathematics, General Intelligence & Reasoning,
- ▶ General Science, General Awareness
- ▶ Previous year Solved Papers
- ▶ Mock Tests with Answers
- ▶ 1 Year Current Affairs



# RRB NTPC PDF NOTES

100% Syllabus | 950+ Pages



50%  
OFF

CLICK HERE



CLICK BELOW LINK TO DOWNLOAD PDF NOTES

<https://rrbexamportal.com/study-kit/Railway-NTPC-Exam>

## Download RRB NTPC Exam Study Notes

Q.56 Which of the following is a NOT a Constitutional body of India?

- Ans
- 1. Comptroller and Auditor General of India
  - 2. Election Commission of India
  - 3. Central Information Commission
  - 4. State Public Service Commission

Question ID : 9489117627

Option 1 ID : 94891130505

Option 2 ID : 94891130507

Option 3 ID : 94891130508

Option 4 ID : 94891130506

Status : Answered

Chosen Option : 3

Q.57 Deen Dayal Upadhyaya Grameen Kaushalya Yojana comes under:

- Ans
- 1. National Rural Health Mission
  - 2. Atal Innovation Mission
  - 3. National e-Governance Mission
  - 4. National Rural Livelihood Mission

Question ID : 9489117640

Option 1 ID : 94891130558

Option 2 ID : 94891130559

Option 3 ID : 94891130560

Option 4 ID : 94891130557

Status : Answered

Chosen Option : 4

Q.58 There is a group of 5 people A, B, C, D and E. Out of them, one is a teacher, one is a doctor, one is lawyer, one is an engineer and one is a writer. The teacher, A and B prefer cold drink. The lawyer and D prefer coffee. The teacher is the brother of C. Who among the five is a teacher?

- Ans
- 1. E
  - 2. D
  - 3. B
  - 4. C

Question ID : 9489118001

Option 1 ID : 94891132001

Option 2 ID : 94891132002

Option 3 ID : 94891132003

Option 4 ID : 94891132004

Status : Answered

Chosen Option : 1



Download RRB Exams PDF E-BOOKS

[CLICK HERE](#)

## Download RRB NTPC Exam Study Notes

Q.59 HCF of  $\frac{1}{2}, \frac{2}{3}, \frac{3}{4}, \frac{4}{5}$  is:

- Ans
- 1.  $\frac{1}{60}$
  - 2. 1
  - 3.  $\frac{4}{5}$
  - 4. 12

Question ID : 9489117851  
Option 1 ID : 94891131404  
Option 2 ID : 94891131401  
Option 3 ID : 94891131403  
Option 4 ID : 94891131402

Status : Answered  
Chosen Option : 1

Q.60 Select the option that is different from the rest.

- Ans
- 1. JQ
  - 2. CX
  - 3. KQ
  - 4. LO

Question ID : 9489117993  
Option 1 ID : 94891131969  
Option 2 ID : 94891131972  
Option 3 ID : 94891131970  
Option 4 ID : 94891131971

Status : Answered  
Chosen Option : 3

Q.61 If the cost price of 12 pens is equal to the selling price of 8 pens, the percentage gain is:

- Ans
- 1. 40%
  - 2. 50%
  - 3. 30%
  - 4. 20%

Question ID : 9489117862  
Option 1 ID : 94891131447  
Option 2 ID : 94891131448  
Option 3 ID : 94891131446  
Option 4 ID : 94891131445

Status : Answered  
Chosen Option : 2



Download RRB Exams PDF E-BOOKS

[CLICK HERE](#)



## Download RRB NTPC Exam Study Notes

Q.62 Which of the following organelles is called suicidal bags of the cell?

- Ans
- 1. Golgi complex
  - 2. Chloroplasts
  - 3. Mitochondria
  - 4. Lysosomes

Question ID : 9489117611  
Option 1 ID : 94891130442  
Option 2 ID : 94891130441  
Option 3 ID : 94891130444  
Option 4 ID : 94891130443  
Status : Answered  
Chosen Option : 4

Q.63 If 10% of  $x = 15%$  of  $y$ , then what will be the value of  $x : y$ ?

- Ans
- 1. 1 : 2
  - 2. 2 : 1
  - 3. 3 : 2
  - 4. 2 : 3

Question ID : 9489117858  
Option 1 ID : 94891131429  
Option 2 ID : 94891131432  
Option 3 ID : 94891131431  
Option 4 ID : 94891131430  
Status : Answered  
Chosen Option : 3

Q.64 If the angle of a sector in a pie diagram is  $135^\circ$ , then it is equivalent to \_\_\_\_ of the pie diagram.

- Ans
- 1.  $\frac{3}{8}$
  - 2.  $\frac{1}{4}$
  - 3.  $\frac{3}{4}$
  - 4.  $\frac{1}{8}$

Question ID : 9489117873  
Option 1 ID : 94891131492  
Option 2 ID : 94891131489  
Option 3 ID : 94891131490  
Option 4 ID : 94891131491  
Status : Answered  
Chosen Option : 1



Download RRB Exams PDF E-BOOKS

[CLICK HERE](#)

## Download RRB NTPC Exam Study Notes

Q.65 What is the domain of sine function?

- Ans
- 1. W
  - 2. R
  - 3. N
  - 4. Z

Question ID : 9489117870  
Option 1 ID : 94891131479  
Option 2 ID : 94891131477  
Option 3 ID : 94891131478  
Option 4 ID : 94891131480  
Status : Answered  
Chosen Option : 1

Q.66 Find the value of the following.

$$4.6 \times 13.5 + 5.4 \times 13.5$$

- Ans
- 1. 135
  - 2. 133
  - 3. 134
  - 4. 132

Question ID : 9489117849  
Option 1 ID : 94891131396  
Option 2 ID : 94891131394  
Option 3 ID : 94891131395  
Option 4 ID : 94891131393  
Status : Answered  
Chosen Option : 1

Q.67 What decimal of an hour is a second?

- Ans
- 1. 0.027
  - 2. 0.00027
  - 3. 0.0027
  - 4. 0.27

Question ID : 9489117850  
Option 1 ID : 94891131398  
Option 2 ID : 94891131400  
Option 3 ID : 94891131399  
Option 4 ID : 94891131397  
Status : Answered  
Chosen Option : 2



Download RRB Exams PDF E-BOOKS

[CLICK HERE](#)

## Download RRB NTPC Exam Study Notes

Q.68 The product of the first six even numbers is:

- Ans
- 1. 46020
  - 2. 46080
  - 3. 46060
  - 4. 46800

Question ID : 9489117856  
Option 1 ID : 94891131422  
Option 2 ID : 94891131423  
Option 3 ID : 94891131421  
Option 4 ID : 94891131424  
Status : Answered  
Chosen Option : 2

Q.69 Select the option that is related to the third term in the same way as the second term is related to the first term.

Ankle : Knee :: Wrist : ?

- Ans
- 1. Finger
  - 2. Palm
  - 3. Elbow
  - 4. Hand

Question ID : 9489117976  
Option 1 ID : 94891131902  
Option 2 ID : 94891131901  
Option 3 ID : 94891131903  
Option 4 ID : 94891131904  
Status : Answered  
Chosen Option : 3

Q.70 Simplify the following.

$$5\frac{3}{9} \div 3\frac{1}{4} \times 7\frac{5}{16} + \frac{7}{8} \times 16$$

- Ans
- 1. 28
  - 2. 26
  - 3. 30
  - 4. 29

Question ID : 9489117845  
Option 1 ID : 94891131378  
Option 2 ID : 94891131377  
Option 3 ID : 94891131380  
Option 4 ID : 94891131379  
Status : Answered  
Chosen Option : 2



Download RRB Exams PDF E-BOOKS

[CLICK HERE](#)

## Download RRB NTPC Exam Study Notes

Q.71 The process of separating cotton fibers from seeds is called:

- Ans
- 1. Spinning
  - 2. Carding
  - 3. Scutching
  - 4. Ginning

Question ID : 9489117609  
Option 1 ID : 94891130434  
Option 2 ID : 94891130436  
Option 3 ID : 94891130433  
Option 4 ID : 94891130435

Status : Answered

Chosen Option : 4

Q.72 The Kyoto Protocol is NOT applicable to which country?

- Ans
- 1. Australia
  - 2. Indonesia
  - 3. Japan
  - 4. USA

Question ID : 9489117633  
Option 1 ID : 94891130531  
Option 2 ID : 94891130532  
Option 3 ID : 94891130530  
Option 4 ID : 94891130529

Status : Answered

Chosen Option : 4

Q.73 The World Wildlife Fund (WWF) logo is a/an \_\_\_\_\_ .

- Ans
- 1. giant panda
  - 2. elephant
  - 3. tiger
  - 4. red panda

Question ID : 9489117614  
Option 1 ID : 94891130454  
Option 2 ID : 94891130455  
Option 3 ID : 94891130456  
Option 4 ID : 94891130453

Status : Answered

Chosen Option : 4



Download RRB Exams PDF E-BOOKS

[CLICK HERE](#)

## Download RRB NTPC Exam Study Notes

Q.74 Three of the following four figures are similar in a certain way and one is different. Select the figure that is different from the rest.



- Ans
- 1. Figure 1
  - 2. Figure 3
  - 3. Figure 4
  - 4. Figure 2

Question ID : 9489117994  
Option 1 ID : 94891131973  
Option 2 ID : 94891131975  
Option 3 ID : 94891131976  
Option 4 ID : 94891131974  
Status : Answered  
Chosen Option : 3

Q.75 Which of the following is most commonly used as a semiconductor in solar cells?

- Ans
- 1. ZnTe
  - 2. ZnSi
  - 3. GeAS
  - 4. GaAs

Question ID : 9489117616  
Option 1 ID : 94891130464  
Option 2 ID : 94891130461  
Option 3 ID : 94891130462  
Option 4 ID : 94891130463  
Status : Answered  
Chosen Option : 4

Q.76 The Battle of Plassey was fought between the East India Company and the:

- Ans
- 1. Nawab of Bengal
  - 2. Marathas
  - 3. Nawab of Hyderabad
  - 4. Mughals

Question ID : 9489117618  
Option 1 ID : 94891130469  
Option 2 ID : 94891130472  
Option 3 ID : 94891130470  
Option 4 ID : 94891130471  
Status : Answered  
Chosen Option : 1



Download RRB Exams PDF E-BOOKS

[CLICK HERE](#)

## Download RRB NTPC Exam Study Notes

Q.77 ABCD is a parallelogram in which  $\angle A = x + 20^\circ$  and  $\angle C = 3x - 10^\circ$ . The value of x is \_\_\_\_\_

- Ans
- 1.  $15^\circ$
  - 2.  $30^\circ$
  - 3.  $40^\circ$
  - 4.  $60^\circ$

Question ID : 9489117868  
Option 1 ID : 94891131471  
Option 2 ID : 94891131472  
Option 3 ID : 94891131470  
Option 4 ID : 94891131469  
Status : Answered  
Chosen Option : 1

Q.78 What does CDMA stand for?

- Ans
- 1. Code Division Maximum Access
  - 2. Code Division Multiple Access
  - 3. Core Division Multiple Access
  - 4. Core Division Maximum Access

Question ID : 9489117638  
Option 1 ID : 94891130552  
Option 2 ID : 94891130551  
Option 3 ID : 94891130550  
Option 4 ID : 94891130549  
Status : Answered  
Chosen Option : 2

Q.79 Select the option that will fill in the blank and complete the given series.

BCA, WVX, FGE, SRT, JKI, \_\_\_

- Ans
- 1. ONP
  - 2. NOM
  - 3. MNL
  - 4. OPN

Question ID : 9489117985  
Option 1 ID : 94891131938  
Option 2 ID : 94891131939  
Option 3 ID : 94891131940  
Option 4 ID : 94891131937  
Status : Answered  
Chosen Option : 1



Download RRB Exams PDF E-BOOKS

[CLICK HERE](#)

Q.80 Which of the following fractions are in ascending order?

- Ans
- 1.  $\frac{16}{19}, \frac{14}{17}, \frac{12}{18}$
  - 2.  $\frac{12}{18}, \frac{14}{17}, \frac{16}{19}$
  - 3.  $\frac{12}{18}, \frac{16}{19}, \frac{14}{17}$
  - 4.  $\frac{14}{17}, \frac{12}{18}, \frac{16}{19}$

Question ID : 9489117846  
Option 1 ID : 94891131384  
Option 2 ID : 94891131381  
Option 3 ID : 94891131382  
Option 4 ID : 94891131383  
Status : Answered  
Chosen Option : 2

Q.81 Given that  $a = \sqrt{4}$ , find the value of the following.

$$\sqrt{9} + 25a + \sqrt{64}$$

- Ans
- 1. 51
  - 2. 31
  - 3. 41
  - 4. 61

Question ID : 9489117852  
Option 1 ID : 94891131406  
Option 2 ID : 94891131408  
Option 3 ID : 94891131407  
Option 4 ID : 94891131405  
Status : Answered  
Chosen Option : 4

Q.82 Which of the following states has the largest Uranium reserves in India?

- Ans
- 1. Punjab
  - 2. Andhra Pradesh
  - 3. Odisha
  - 4. Himachal Pradesh

Question ID : 9489117630  
Option 1 ID : 94891130517  
Option 2 ID : 94891130518  
Option 3 ID : 94891130519  
Option 4 ID : 94891130520  
Status : Answered  
Chosen Option : 2



## Download RRB NTPC Exam Study Notes

Q.83 Select the option that CANNOT be concluded from the statements given below.

Statement 1: All cats are humans.

Statement 2: All trees are mice.

Statement 3: All humans are trees.

- Ans  1. Some humans are not mice.  
 2. All trees are not cats.  
 3. Some trees are not cats.  
 4. All cats are mice.

Question ID : 9489117975

Option 1 ID : 94891131898

Option 2 ID : 94891131899

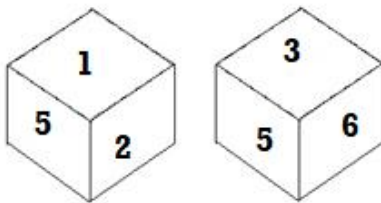
Option 3 ID : 94891131897

Option 4 ID : 94891131900

Status : Answered

Chosen Option : 1

Q.84 Two positions of a rotated cube are shown below.



Which number will be at the bottom, when 5 is on the top?

- Ans  1. 3  
 2. 6  
 3. 4  
 4. 2

Question ID : 9489118002

Option 1 ID : 94891132005

Option 2 ID : 94891132008

Option 3 ID : 94891132007

Option 4 ID : 94891132006

Status : Answered

Chosen Option : 3



Download RRB Exams PDF E-BOOKS

[CLICK HERE](#)



## Download RRB NTPC Exam Study Notes

Q.85 Which of the following states have the highest number of operational landholders as per the agriculture census for 2015

-16?

- Ans
- 1. Rajasthan
  - 2. Bihar
  - 3. Uttar Pradesh
  - 4. Maharashtra

Question ID : 9489117626

Option 1 ID : 94891130501

Option 2 ID : 94891130503

Option 3 ID : 94891130504

Option 4 ID : 94891130502

Status : Answered

Chosen Option : 3

Q.86 The following table shows the number of students appeared in an examination and the number of the students selected from different schools for admission in a well ranked university. Study the table carefully and answer the question that follows.

School	Appeared	Selected
ABC	1000	800
EFG	1200	1050
IJK	1500	1350
MNO	1100	900
QRS	900	750

In which of the following schools has there been the maximum percentage of selection in university?

- Ans
- 1. IJK
  - 2. QRS
  - 3. ABC
  - 4. EFG

Question ID : 9489117989

Option 1 ID : 94891131953

Option 2 ID : 94891131955

Option 3 ID : 94891131956

Option 4 ID : 94891131954

Status : Answered

Chosen Option : 1

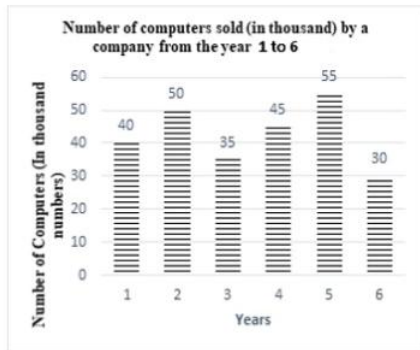


Download RRB Exams PDF E-BOOKS

[CLICK HERE](#)

## Download RRB NTPC Exam Study Notes

Q.87 Study the given bar chart carefully and answer the question that follows.



The absolute difference between the annual sales in year 4 and the average sales for six years is the same as the absolute difference between the annual sales in another year and the average sales for six years. Identify the year.

- Ans
- 1. Year 2
  - 2. Year 4
  - 3. Year 1
  - 4. Year 3

Question ID : 9489117990

Option 1 ID : 94891131957

Option 2 ID : 94891131959

Option 3 ID : 94891131960

Option 4 ID : 94891131958

Status : Answered

Chosen Option : 3

Q.88 Study the following table carefully and answer the question that follows.

Items of expenditure	Years			
	2012	2013	2014	2015
Salary	200	215	250	255
Transport	48	60	71	82
Interest on loans	25	18	14	13
Taxes	2.5	3	4	5.5

Expenditure of a company (in ₹ lakh) per year over the years

What is the ratio of the expenditure on transport in the year 2013 to the total expenditure on transport for all the years taken together?

- Ans
- 1. 20 : 87
  - 2. 13 : 112
  - 3. 15 : 45
  - 4. 10 : 110

Question ID : 9489117991

Option 1 ID : 94891131962

Option 2 ID : 94891131964

Option 3 ID : 94891131961

Option 4 ID : 94891131963

Status : Answered

Chosen Option : 1

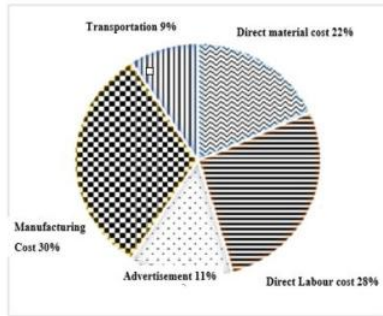


# Download RRB Exams PDF E-BOOKS

[CLICK HERE](#)

## Download RRB NTPC Exam Study Notes

**Q.89** Study the following pie chart that shows the percentage distribution of the expenditure incurred towards manufacturing a certain product X and answer the question that follows.



If 5000 units of product X are manufactured and the transportation cost incurred towards them amounts to ₹36,000, then what should be the selling price of one unit of the product X so that the product can earn a profit of 25%?

- Ans**
- 1. 100
  - 2. 50
  - 3. 75
  - 4. 110

Question ID : 9489117992  
Option 1 ID : 94891131967  
Option 2 ID : 94891131965  
Option 3 ID : 94891131966  
Option 4 ID : 94891131968

Status : Answered

Chosen Option : 1

**Q.90** If the English alphabet is given in reverse order, then which of the following will be the tenth letter to the right of R?

- Ans**
- 1. J
  - 2. H
  - 3. Q
  - 4. B

Question ID : 9489117984  
Option 1 ID : 94891131934  
Option 2 ID : 94891131935  
Option 3 ID : 94891131933  
Option 4 ID : 94891131936

Status : Answered

Chosen Option : 2



Download RRB Exams PDF E-BOOKS

[CLICK HERE](#)

## Download RRB NTPC Exam Study Notes

**Q.91** If A and C interchange their places, B and D interchange their places, E and G interchange their places and so on, then which letter will be the 7<sup>th</sup> to the left of T?

- Ans**
- 1. I
  - 2. K
  - 3. L
  - 4. M

Question ID : 9489117988  
Option 1 ID : 94891131949  
Option 2 ID : 94891131951  
Option 3 ID : 94891131952  
Option 4 ID : 94891131950  
Status : Answered  
Chosen Option : 1

**Q.92** Read the given statements and conclusions carefully and decide which of the conclusions logically follow(s) from the statements.

**Statements:**

- (i) All the clothes sold in my boutique are of high standard.
- (ii) None of the brands except Cara and Cucci are sold at my boutique.
- (iii) Some Cucci accessories like bags and makeup are also sold.

**Conclusions:**

- (i) My boutique sells clothes and accessories.
- (ii) Cara and Cucci brands have clothes of high standard.
- (iii) Some of the accessories sold at my boutique are of Cucci.

- Ans**
- 1. Only conclusion (i) follows.
  - 2. Only conclusion (i) and (ii) follow.
  - 3. All the conclusions (i), (ii) and (iii) follow.
  - 4. Only conclusion (iii) follows.

Question ID : 9489117982  
Option 1 ID : 94891131925  
Option 2 ID : 94891131926  
Option 3 ID : 94891131928  
Option 4 ID : 94891131927  
Status : Answered  
Chosen Option : 3



Download RRB Exams PDF E-BOOKS

[CLICK HERE](#)

## Download RRB NTPC Exam Study Notes

**Q.93** Select the number from among the options given that is related to the fifth number in the same way as the fourth and second numbers are related to the third and first numbers respectively:

36 : 216 :: 100 : 1000 :: 25 : ?

- Ans**
- 1. 625
  - 2. 125
  - 3. 3125
  - 4. 225

Question ID : 9489117987

Option 1 ID : 94891131947

Option 2 ID : 94891131946

Option 3 ID : 94891131945

Option 4 ID : 94891131948

Status : Answered

Chosen Option : 2

**Q.94** Fatima and Abdul are siblings. Fatima's father Aziz is the only son of his parents. Ansari is the paternal grandfather of Abdul. Sarah is the daughter-in-law of Ansari. How is Sarah related to Aziz?

- Ans**
- 1. Mother
  - 2. Wife
  - 3. Aunt
  - 4. Sister

Question ID : 9489117980

Option 1 ID : 94891131919

Option 2 ID : 94891131920

Option 3 ID : 94891131918

Option 4 ID : 94891131917

Status : Answered

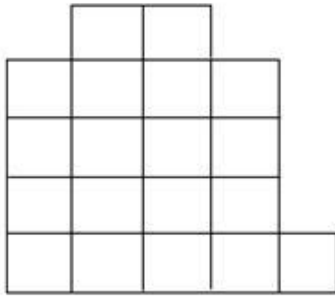
Chosen Option : 2



Download RRB Exams PDF E-BOOKS

[CLICK HERE](#)

Q.95 How many squares are there in the given figure?



- Ans
- 1. 30
  - 2. 42
  - 3. 28
  - 4. 34

Question ID : 9489118000  
Option 1 ID : 94891131999  
Option 2 ID : 94891131998  
Option 3 ID : 94891131997  
Option 4 ID : 94891132000

Status : Answered

Chosen Option : 4

Q.96 A question is given followed by two arguments. Decide which of the arguments is/are strong with respect to the question.

**Question:**

Should students cheating in exams be punished?

**Arguments:**

1. No, cheating is common among successful people.
2. Yes, as the exams are conducted to assess the potentiality of an individual, so they should give exams honestly.

- Ans
- 1. Both, 1 and 2 are strong.
  - 2. Only 1 is strong.
  - 3. Neither 1 nor 2 is strong.
  - 4. Only 2 is strong.

Question ID : 9489117981  
Option 1 ID : 94891131924  
Option 2 ID : 94891131921  
Option 3 ID : 94891131923  
Option 4 ID : 94891131922

Status : Answered

Chosen Option : 4



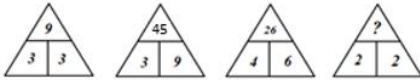
## Download RRB NTPC Exam Study Notes

**Q.97** In a certain code, if DICKENS is written as VQWOLG and ELIOT is written as UNQKF, which letter will be in the fifth place, when counted from the left, if HEYER is written in that code language?

- Ans
- 1. G
  - 2. I
  - 3. A
  - 4. H

Question ID : 9489117979  
Option 1 ID : 94891131914  
Option 2 ID : 94891131916  
Option 3 ID : 94891131913  
Option 4 ID : 94891131915  
Status : Answered  
Chosen Option : 4

**Q.98** Study the given pattern carefully and select the number that can replace the question mark (?) in it.



- Ans
- 1. 100
  - 2. 4
  - 3. 8
  - 4. 2


Question ID : 9489117986  
Option 1 ID : 94891131943  
Option 2 ID : 94891131941  
Option 3 ID : 94891131944  
Option 4 ID : 94891131942  
Status : Answered  
Chosen Option : 2



Download RRB Exams PDF E-BOOKS

[CLICK HERE](#)

# RRB NTPC EXAM Study Kit



100%

- ▶ 100% Exam Syllabus Covered
- ▶ 8 Books, 950+ Pages
- ▶ Mathematics, General Intelligence & Reasoning,
- ▶ General Science, General Awareness
- ▶ Previous year Solved Papers
- ▶ Mock Tests with Answers
- ▶ 1 Year Current Affairs



# RRB NTPC PDF NOTES

100% Syllabus | 950+ Pages



50%  
OFF

CLICK HERE



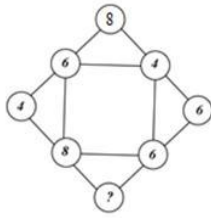
CLICK BELOW LINK TO DOWNLOAD PDF NOTES

<https://rrbexamportal.com/study-kit/Railway-NTPC-Exam>



## Download RRB NTPC Exam Study Notes

Q.99 Study the given pattern carefully and select the number that can replace the question mark (?) in it.



- Ans
- 1. 4
  - 2. 5
  - 3. 6
  - 4. 8

Question ID : 9489117999  
Option 1 ID : 94891131994  
Option 2 ID : 94891131996  
Option 3 ID : 94891131995  
Option 4 ID : 94891131993

Status : Answered

Chosen Option : 3

Q.100 Select the option that is different from the rest.

- Ans
- 1. Meter Gauge
  - 2. Long Gauge
  - 3. Narrow Gauge
  - 4. Broad Gauge

Question ID : 9489117995  
Option 1 ID : 94891131977  
Option 2 ID : 94891131980  
Option 3 ID : 94891131979  
Option 4 ID : 94891131978

Status : Answered

Chosen Option : 2

QP HT ML Generated date 2021/08/02-18:15:29



Download RRB Exams PDF E-BOOKS

[CLICK HERE](#)