



रेल भर्ती बोर्ड / RAILWAY RECRUITMENT BOARDS



सी ई एन ०१/२०१९ - एन टी पी सी - CEN 01/2019 - NTPC

Participant ID	
Participant Name	
Test Center Name	
Test Date	05/04/2021
Test Time	10:30 AM - 12:00 PM
Subject	NTPC

*** Note**

Correct Answer will carry 1 mark per Question.
Incorrect Answer will carry 1/3 Negative mark.

- Options shown in green color with a tick icon are correct.
- Chosen option on the right of the question indicates the option selected by the candidate.

Section : NTPC

Q.1 Which of the following is the longest line of latitude on the globe?

- Ans
- 1. Tropic of Cancer
 - 2. Tropic of Capricorn
 - 3. The Arctic Circle
 - 4. Equator

Question ID : 9489111222

Option 1 ID : 94891148886

Option 2 ID : 94891148887

Option 3 ID : 94891148888

Option 4 ID : 94891148885

Status : Answered

Chosen Option : 4



Download RRB Exams PDF E-BOOKS

[CLICK HERE](#)

Download RRB NTPC Exam Study Notes

Q.2 Study the given pattern carefully and select the number from the given options that can replace the question mark (?) in it.

3	18	11
12	24	18
?	12	14

- Ans
- 1. 16
 - 2. 20
 - 3. 18
 - 4. 10

Question ID : 94891112499
Option 1 ID : 94891149995
Option 2 ID : 94891149993
Option 3 ID : 94891149994
Option 4 ID : 94891149996
Status : Answered
Chosen Option : 3

Q.3 What is the folk dance of Puducherry?

- Ans
- 1. Sattariya
 - 2. Karga
 - 3. Garadi
 - 4. Kapalik

Question ID : 94891112209
Option 1 ID : 94891148833
Option 2 ID : 94891148835
Option 3 ID : 94891148836
Option 4 ID : 94891148834
Status : Answered
Chosen Option : 4

Q.4 A line passes through two points (3,4) and (4,5). What is the angle of the slope of this line?

- Ans
- 1. 45°
 - 2. 60°
 - 3. 30°
 - 4. 75°

Question ID : 94891114568
Option 1 ID : 94891158270
Option 2 ID : 94891158271
Option 3 ID : 94891158269
Option 4 ID : 94891158272
Status : Answered



Download RRB Exams PDF E-BOOKS

[CLICK HERE](#)

Download RRB NTPC Exam Study Notes

Q.5 Which tissue is responsible for transportation of water in plants?

- Ans
- 1. Xylem
 - 2. Ribosome
 - 3. Cytoplasm
 - 4. Chloroplast

Question ID : 94891112216
Option 1 ID : 94891148861
Option 2 ID : 94891148864
Option 3 ID : 94891148862
Option 4 ID : 94891148863
Status : Answered
Chosen Option : 1

Q.6 What is the full form of RDRAM?

- Ans
- 1. Rambus Dynamic Random Access Memory
 - 2. Read Disc Random Access Memory
 - 3. Read Dynamic Random Arrays Material
 - 4. Removable Disc Read Access Module

Question ID : 94891112238
Option 1 ID : 94891148949
Option 2 ID : 94891148950
Option 3 ID : 94891148951
Option 4 ID : 94891148952
Status : Answered
Chosen Option : 2

Q.7 What is the mean of the first five prime numbers?

- Ans
- 1. 5.6
 - 2. 5.5
 - 3. 5.7
 - 4. 5.8

Question ID : 94891114572
Option 1 ID : 94891158286
Option 2 ID : 94891158285
Option 3 ID : 94891158287
Option 4 ID : 94891158288
Status : Not Answered
Chosen Option : --



Download RRB Exams PDF E-BOOKS

[CLICK HERE](#)

Download RRB NTPC Exam Study Notes

Q.8 Which Ashokan Rock Edict mentions of Ashoka's triumph in Kalinga?

- Ans 1. Thirteenth
 2. Tenth
 3. First
 4. Fourth

Question ID : 94891112220

Option 1 ID : 94891148880

Option 2 ID : 94891148879

Option 3 ID : 94891148877

Option 4 ID : 94891148878

Status : Answered

Chosen Option : 1

Q.9 Name the capital of the Union Territory of Dadra and Nagar Haweli.

- Ans 1. Port Blair
 2. Kavaratti
 3. Silvassa
 4. Pondicherry

Question ID : 94891112225

Option 1 ID : 94891148899

Option 2 ID : 94891148897

Option 3 ID : 94891148900

Option 4 ID : 94891148898

Status : Answered

Chosen Option : 2

Q.10 Where is the headquarters of United Nations System Staff College located?

- Ans 1. Turin
 2. Berlin
 3. London
 4. Washington

Question ID : 94891112235

Option 1 ID : 94891148937

Option 2 ID : 94891148938

Option 3 ID : 94891148940

Option 4 ID : 94891148939

Status : Not Answered

Chosen Option : --



Download RRB Exams PDF E-BOOKS

[CLICK HERE](#)

Download RRB NTPC Exam Study Notes

Q.11 What will be the compound interest on ₹1,000 at 20% per annum for 1 year compounded half-yearly?

- Ans
- 1. ₹200
 - 2. ₹110
 - 3. ₹210
 - 4. ₹220

Question ID : 94891114559

Option 1 ID : 94891158235

Option 2 ID : 94891158233

Option 3 ID : 94891158234

Option 4 ID : 94891158236

Status : Answered

Chosen Option : 3

Q.12 Find the value of $\frac{1+\sqrt{3}}{1-\sqrt{3}} + \frac{1-\sqrt{3}}{1+\sqrt{3}}$.

- Ans
- 1. -4
 - 2. $-2\sqrt{3}$
 - 3. $2\sqrt{3}$
 - 4. 4

Question ID : 94891114548

Option 1 ID : 94891158190

Option 2 ID : 94891158192

Option 3 ID : 94891158191

Option 4 ID : 94891158189

Status : Answered

Chosen Option : 1

Q.13 Which two places are connected by National Waterway-2?

- Ans
- 1. Kottapuram and Kollam
 - 2. Mandavi and Zuari
 - 3. Prayagraj and Haldia
 - 4. Sadiya and Dhubri

Question ID : 94891112241

Option 1 ID : 94891148963

Option 2 ID : 94891148964

Option 3 ID : 94891148962

Option 4 ID : 94891148961

Status : Answered

Chosen Option : 4



Download RRB Exams PDF E-BOOKS

[CLICK HERE](#)

Download RRB NTPC Exam Study Notes

Q.14 The LCM and HCF of two numbers are 60 and 3, respectively. If the first number is 12, then the second number is:

- Ans
- 1. 20
 - 2. 25
 - 3. 15
 - 4. 10

Question ID : 94891114550
Option 1 ID : 94891158199
Option 2 ID : 94891158200
Option 3 ID : 94891158198
Option 4 ID : 94891158197
Status : Answered
Chosen Option : 3

Q.15 A alone can finish a task in 10 days and B alone can finish the same task in 20 days. In how many days can A and B working together finish this task?

- Ans
- 1. $6\frac{2}{3}$ days
 - 2. $6\frac{1}{3}$ days
 - 3. $6\frac{1}{2}$ days
 - 4. 6 days

Question ID : 94891114561
Option 1 ID : 94891158241
Option 2 ID : 94891158242
Option 3 ID : 94891158243
Option 4 ID : 94891158244
Status : Answered
Chosen Option : 1

Q.16 Who is considered to be the 'father of modern science'?

- Ans
- 1. Galileo Galilei
 - 2. Stephen Hawking
 - 3. CV Raman
 - 4. Vikram Sarabhai


Question ID : 94891112230
Option 1 ID : 94891148917
Option 2 ID : 94891148918
Option 3 ID : 94891148919
Option 4 ID : 94891148920
Status : Answered
Chosen Option : 1



Download RRB Exams PDF E-BOOKS

[CLICK HERE](#)

RRB NTPC EXAM Study Kit



100%

- ▶ 100% Exam Syllabus Covered
- ▶ 8 Books, 950+ Pages
- ▶ Mathematics, General Intelligence & Reasoning,
- ▶ General Science, General Awareness
- ▶ Previous year Solved Papers
- ▶ Mock Tests with Answers
- ▶ 1 Year Current Affairs



RRB NTPC PDF NOTES

100% Syllabus | 950+ Pages



50%
OFF

CLICK HERE



CLICK BELOW LINK TO DOWNLOAD PDF NOTES

<https://rrbexamportal.com/study-kit/Railway-NTPC-Exam>

Download RRB NTPC Exam Study Notes

Q.17 What is a Visual Display Unit (VDU)?

- Ans
- 1. Storage unit
 - 2. Monitor
 - 3. Server
 - 4. System memory

Question ID : 94891112236

Option 1 ID : 94891148942

Option 2 ID : 94891148943

Option 3 ID : 94891148941

Option 4 ID : 94891148944





Status : Answered

Chosen Option : 2

Q.18 Select the Venn diagram that best represents the relationship between the following classes.

Mammals, Amphibians, Blue Whale.

Ans

- 1. 
- 2. 
- 3. 
- 4. 

Question ID : 94891112497

Option 1 ID : 94891149986

Option 2 ID : 94891149987

Option 3 ID : 94891149985

Option 4 ID : 94891149988

Status : Answered

Chosen Option : 4



Download RRB Exams PDF E-BOOKS

[CLICK HERE](#)

Download RRB NTPC Exam Study Notes

Q.19 Pradhan Mantri Jan Dhan Yojana was launched on:

- Ans
- 1. 28th Aug 2015
 - 2. 15th Aug 2014
 - 3. 15th Aug 2015
 - 4. 28th Aug 2014

Question ID : 94891112239
Option 1 ID : 94891148955
Option 2 ID : 94891148954
Option 3 ID : 94891148956
Option 4 ID : 94891148953
Status : Answered
Chosen Option : 3

Q.20 The word JUNCTION has been coded using 4 different codes.

Code 1: QFMXGRLM

Code 2: LYTKDUCD

Code 3: KWQGYOVV

Code 4: LWPEVKQP

Which of the following codes is used to write the word CUSTOMER as XFHGLNVI?

- Ans
- 1. Code 4
 - 2. Code 2
 - 3. Code 1
 - 4. Code 3

Question ID : 94891112476
Option 1 ID : 94891149904
Option 2 ID : 94891149902
Option 3 ID : 94891149901
Option 4 ID : 94891149903
Status : Answered
Chosen Option : 3



Download RRB Exams PDF E-BOOKS

[CLICK HERE](#)

Download RRB NTPC Exam Study Notes

Q.21 Following the order of operations, the value of $81 - [20 + 7 \times (30 - 3 \times 9)]$ is:

- Ans
- 1. 40
 - 2. 20
 - 3. 30
 - 4. 0

Question ID : 94891114545
Option 1 ID : 94891158179
Option 2 ID : 94891158177
Option 3 ID : 94891158178
Option 4 ID : 94891158180
Status : Answered
Chosen Option : 1

Q.22 The difference between the compound and the simple interests on a certain sum of money for two years, at 5% per annum, is ₹1. The sum is:

- Ans
- 1. ₹450
 - 2. ₹550
 - 3. ₹400
 - 4. ₹500

Question ID : 94891114558
Option 1 ID : 94891158230
Option 2 ID : 94891158232
Option 3 ID : 94891158229
Option 4 ID : 94891158231
Status : Answered
Chosen Option : 3

Q.23 A and B both working together can finish a task in 10 days. B and C both working together can finish the same task in 15 days. A and C both working together can finish the task in 20 days. In how many days can A, B and C working together finish this task?

- Ans
- 1. $9\frac{3}{13}$ days
 - 2. $9\frac{4}{13}$ days
 - 3. $9\frac{1}{13}$ days
 - 4. $9\frac{2}{13}$ days

Question ID : 94891114562
Option 1 ID : 94891158247
Option 2 ID : 94891158248
Option 3 ID : 94891158245
Option 4 ID : 94891158246
Status : Answered
Chosen Option : 1



Download RRB Exams PDF E-BOOKS

[CLICK HERE](#)

Download RRB NTPC Exam Study Notes

Q.24 Which of the following was concerned with center-state relations?

- Ans
- 1. Malimath Committee
 - 2. Srikrishna Commission
 - 3. Thakkar Commission
 - 4. Sarkaria Commission

Question ID : 94891112227
Option 1 ID : 94891148906
Option 2 ID : 94891148905
Option 3 ID : 94891148907
Option 4 ID : 94891148908
Status : Not Answered
Chosen Option : --

Q.25 Four words have been given, out of which three are alike in some manner and one is different. Select the odd one.

- Ans
- 1. Action
 - 2. Romance
 - 3. Movie
 - 4. Comedy

Question ID : 94891112495
Option 1 ID : 94891149978
Option 2 ID : 94891149977
Option 3 ID : 94891149980
Option 4 ID : 94891149979
Status : Answered
Chosen Option : 3

Q.26 A book is purchased for ₹1,000 and then sold for ₹1,200. Find the gain percentage.

- Ans
- 1. 25%
 - 2. 20%
 - 3. 15%
 - 4. 10%

Question ID : 94891114560
Option 1 ID : 94891158240
Option 2 ID : 94891158239
Option 3 ID : 94891158238
Option 4 ID : 94891158237
Status : Answered
Chosen Option : 2



Download RRB Exams PDF E-BOOKS

[CLICK HERE](#)

Download RRB NTPC Exam Study Notes

Q.27 Name the river on which the Indira Sagar Dam is built.

- Ans
- 1. Kaveri
 - 2. Ganges
 - 3. Yamuna
 - 4. Narmada

Question ID : 94891112224
Option 1 ID : 94891148895
Option 2 ID : 94891148893
Option 3 ID : 94891148894
Option 4 ID : 94891148896
Status : Answered
Chosen Option : 4

Q.28 Select the option that is related to the third term in the same way as the second term is related to the first term.

Horse : Stable :: Rabbit : ?

- Ans
- 1. Nest
 - 2. Palace
 - 3. Burrow
 - 4. Den

Question ID : 94891112480
Option 1 ID : 94891149920
Option 2 ID : 94891149917
Option 3 ID : 94891149918
Option 4 ID : 94891149919
Status : Answered
Chosen Option : 3

Q.29 'The Origin of Species' was written by:

- Ans
- 1. Aristotle
 - 2. Confucius
 - 3. Plato
 - 4. Charles Darwin

Question ID : 94891112213
Option 1 ID : 94891148849
Option 2 ID : 94891148852
Option 3 ID : 94891148851
Option 4 ID : 94891148850
Status : Answered
Chosen Option : 4



Download RRB Exams PDF E-BOOKS

[CLICK HERE](#)

Download RRB NTPC Exam Study Notes

Q.30 What is the full form of DOS?

- Ans
- 1. Device Outsourcing System
 - 2. Device Operating System
 - 3. Different Operating System
 - 4. Disk Operating System

Question ID : 94891112237

Option 1 ID : 94891148945

Option 2 ID : 94891148947

Option 3 ID : 94891148946

Option 4 ID : 94891148948

Status : Answered

Chosen Option : 4

Q.31 Find the value of n in the given equation.

$$27^{1.5} \times 9^{1.25} \div 3^5 = 3^n$$

- Ans
- 1. 6
 - 2. 4
 - 3. 9
 - 4. 2

Question ID : 94891114544

Option 1 ID : 94891158175

Option 2 ID : 94891158174

Option 3 ID : 94891158176

Option 4 ID : 94891158173

Status : Answered

Chosen Option : 4

Q.32 The demand for Pakistan was made in _____ at the Lahore Session of the Muslim League.

- Ans
- 1. 1932
 - 2. 1942
 - 3. 1940
 - 4. 1936

Question ID : 94891112219

Option 1 ID : 94891148873

Option 2 ID : 94891148876

Option 3 ID : 94891148875

Option 4 ID : 94891148874

Status : Not Answered

Chosen Option : --



Download RRB Exams PDF E-BOOKS

[CLICK HERE](#)

Download RRB NTPC Exam Study Notes

Q.33 The perimeter of a square and circumference a circle are the same. What is the ratio of the area of the square to that of the circle?

- Ans**
- 1. $\pi : 4$
 - 2. $4 : \pi$
 - 3. $2 : \pi$
 - 4. $\pi : 2$

Question ID : 94891114565
Option 1 ID : 94891158257
Option 2 ID : 94891158258
Option 3 ID : 94891158260
Option 4 ID : 94891158259
Status : Answered
Chosen Option : 1

Q.34 Which technology is used to provide high speed internet access over traditional modem lines?

- Ans**
- 1. ADSL
 - 2. VDU
 - 3. LAN
 - 4. Routers

Question ID : 94891112232
Option 1 ID : 94891148925
Option 2 ID : 94891148926
Option 3 ID : 94891148928
Option 4 ID : 94891148927
Status : Answered
Chosen Option : 4

Q.35 _____ is the largest producer of crude oil and natural gas in India.

- Ans**
- 1. BHEL
 - 2. ONGC
 - 3. NTPC
 - 4. SAIL

Question ID : 94891112242
Option 1 ID : 94891148968
Option 2 ID : 94891148967
Option 3 ID : 94891148966
Option 4 ID : 94891148965
Status : Answered
Chosen Option : 2



Download RRB Exams PDF E-BOOKS

[CLICK HERE](#)

Download RRB NTPC Exam Study Notes

Q.36 Who presides over the first meeting of a newly constituted Lok Sabha?

- Ans
- 1. President
 - 2. Speaker
 - 3. Protem Speaker
 - 4. Prime Minister

Question ID : 94891112228

Option 1 ID : 94891148912

Option 2 ID : 94891148909

Option 3 ID : 94891148910

Option 4 ID : 94891148911

Status : Answered

Chosen Option : 2

Q.37 A circle $x^2 + y^2 = a^2$ passes through a point (0, 4). What is the value of a ?

- Ans
- 1. 6
 - 2. 4
 - 3. 8
 - 4. 5

Question ID : 94891114569

Option 1 ID : 94891158275

Option 2 ID : 94891158273

Option 3 ID : 94891158276

Option 4 ID : 94891158274

Status : Answered

Chosen Option : 2

Q.38 Who is one of the founders of the Red Cross society?

- Ans
- 1. Jean Henry Dunant
 - 2. Carolina Millan
 - 3. B Skinner
 - 4. Von Herring'

Question ID : 94891112234

Option 1 ID : 94891148934

Option 2 ID : 94891148933

Option 3 ID : 94891148936

Option 4 ID : 94891148935

Status : Answered

Chosen Option : 3



Download RRB Exams PDF E-BOOKS

[CLICK HERE](#)

Download RRB NTPC Exam Study Notes

Q.39 The system of scientific naming Organism was introduced by:

- Ans
- 1. Carolus Linnaeus
 - 2. George Caley
 - 3. Alexis Carrel
 - 4. Angel Cabrera

Question ID : 94891112212

Option 1 ID : 94891148845

Option 2 ID : 94891148846

Option 3 ID : 94891148848

Option 4 ID : 94891148847

Status : Answered

Chosen Option : 1

Q.40 The value of $\frac{1 + \tan^2 \theta}{1 + \cot^2 \theta}$ is:

- Ans
- 1. $\tan^2 \theta$
 - 2. $\cot^2 \theta$
 - 3. $\sec^2 \theta$
 - 4. $\operatorname{cosec}^2 \theta$

Question ID : 94891114570

Option 1 ID : 94891158280

Option 2 ID : 94891158279

Option 3 ID : 94891158277

Option 4 ID : 94891158278

Status : Answered

Chosen Option : 1

Q.41 Which is the only Indian state to share its boundary with the state of Sikkim?

- Ans
- 1. Assam
 - 2. Mizoram
 - 3. Odisha
 - 4. West Bengal

Question ID : 94891112223

Option 1 ID : 94891148890

Option 2 ID : 94891148889

Option 3 ID : 94891148891

Option 4 ID : 94891148892

Status : Answered

Chosen Option : 1



Download RRB Exams PDF E-BOOKS

[CLICK HERE](#)

Download RRB NTPC Exam Study Notes

Q.42 In which state can one find the Himalayan Yew?

- Ans
- 1. Arunachal Pradesh
 - 2. Jammu & Kashmir
 - 3. Sikkim
 - 4. Uttarakhand

Question ID : 94891112226
Option 1 ID : 94891148902
Option 2 ID : 94891148903
Option 3 ID : 94891148901
Option 4 ID : 94891148904
Status : Answered
Chosen Option : 2

Q.43 Who appoints the chief justice and other judges of the Supreme Court of India?

- Ans
- 1. President
 - 2. Speaker
 - 3. Prime Minister
 - 4. Vice President

Question ID : 94891112229
Option 1 ID : 94891148914
Option 2 ID : 94891148915
Option 3 ID : 94891148913
Option 4 ID : 94891148916
Status : Answered
Chosen Option : 1

Q.44 The product of two numbers is 270. If their LCM is 90, then their HCF is:

- Ans
- 1. 2
 - 2. 4
 - 3. 5
 - 4. 3

Question ID : 94891114549
Option 1 ID : 94891158196
Option 2 ID : 94891158194
Option 3 ID : 94891158193
Option 4 ID : 94891158195
Status : Answered
Chosen Option : 4



Download RRB Exams PDF E-BOOKS

[CLICK HERE](#)

Download RRB NTPC Exam Study Notes

Q.45 The simple interest on a sum of money borrowed is ₹10 at the rate of 10% p.a for 10 years. How much is the sum of money borrowed?

- Ans**
- 1. ₹100
 - 2. ₹10
 - 3. ₹10,000
 - 4. ₹1,000

Question ID : 94891114557

Option 1 ID : 94891158227

Option 2 ID : 94891158228

Option 3 ID : 94891158225

Option 4 ID : 94891158226

Status : Answered

Chosen Option : 2

Q.46 The sum of the square of the first ten natural numbers is:

- Ans**
- 1. 3025
 - 2. 5050
 - 3. 385
 - 4. 55

Question ID : 94891114551

Option 1 ID : 94891158202

Option 2 ID : 94891158201

Option 3 ID : 94891158204

Option 4 ID : 94891158203

Status : Answered

Chosen Option : 1

Q.47 If the area of a square is 1225 cm^2 , then what will be the perimeter of the square?

- Ans**
- 1. 120 cm
 - 2. 140 cm
 - 3. 130 cm
 - 4. 150 cm

Question ID : 94891114564

Option 1 ID : 94891158254

Option 2 ID : 94891158256

Option 3 ID : 94891158253

Option 4 ID : 94891158255

Status : Answered

Chosen Option : 2



Download RRB Exams PDF E-BOOKS

[CLICK HERE](#)

Q.48 What is the LCM of $\frac{3}{10}$ and $\frac{2}{5}$?

Ans

1. $\frac{5}{6}$

2. $\frac{3}{4}$

3. $\frac{6}{5}$

4. $\frac{3}{25}$

Question ID : 94891114546

Option 1 ID : 94891158182

Option 2 ID : 94891158183

Option 3 ID : 94891158184

Option 4 ID : 94891158181

Status : Answered

Chosen Option : 3

Q.49 Select the number that can replace the question mark (?) in the following series.

4, 7, 13, 22, 34, 49, ?

Ans

1. 77

2. 73

3. 64

4. 67

Question ID : 94891112483

Option 1 ID : 94891149932

Option 2 ID : 94891149931

Option 3 ID : 94891149930

Option 4 ID : 94891149929

Status : Answered

Chosen Option : 4

Q.50 If $1.75 : x :: 5 : 8$, then the value of x is:

Ans

1. 2

2. 2.5

3. 2.8

4. 2.2

Question ID : 94891114554

Option 1 ID : 94891158216

Option 2 ID : 94891158214

Option 3 ID : 94891158213


Option 4 ID : 94891158215

Status : Answered

Chosen Option : 3



RRB NTPC EXAM Study Kit



100%

- ▶ 100% Exam Syllabus Covered
- ▶ 8 Books, 950+ Pages
- ▶ Mathematics, General Intelligence & Reasoning,
- ▶ General Science, General Awareness
- ▶ Previous year Solved Papers
- ▶ Mock Tests with Answers
- ▶ 1 Year Current Affairs



RRB NTPC PDF NOTES

100% Syllabus | 950+ Pages

50%
OFF

CLICK HERE



CLICK BELOW LINK TO DOWNLOAD PDF NOTES

<https://rrbexamportal.com/study-kit/Railway-NTPC-Exam>

Download RRB NTPC Exam Study Notes

Q.51 According to Census 2011, which is the third most populous state of India?

- Ans
- 1. West Bengal
 - 2. Maharashtra
 - 3. Madhya Pradesh
 - 4. Bihar

Question ID : 94891112204
Option 1 ID : 94891148815
Option 2 ID : 94891148813
Option 3 ID : 94891148814
Option 4 ID : 94891148816
Status : Answered
Chosen Option : 2

Q.52 What type of trees are found in mountain forests in India?

- Ans
- 1. Chir
 - 2. Ash
 - 3. Cactus
 - 4. Maple

Question ID : 94891112221
Option 1 ID : 94891148884
Option 2 ID : 94891148882
Option 3 ID : 94891148881
Option 4 ID : 94891148883
Status : Not Answered
Chosen Option : --

Q.53 In February 2021, who is appointed as Assistant Secretary-General and Head of the New York office of the UNEP?

- Ans
- 1. Ligia Noronha
 - 2. Vimal Kumar
 - 3. Mandeep Kang
 - 4. Naresh Chandra

Question ID : 94891112206
Option 1 ID : 94891148821
Option 2 ID : 94891148824
Option 3 ID : 94891148822
Option 4 ID : 94891148823
Status : Answered
Chosen Option : 4



Download RRB Exams PDF E-BOOKS

[CLICK HERE](#)

Download RRB NTPC Exam Study Notes

Q.54 Select the alphanumeric-cluster that can replace the question mark (?) in the following series.

2Y28, 7T23, 12O18, ?, 22E8, 27Z3

- Ans
- 1. 17J13
 - 2. 16J12
 - 3. 17J15
 - 4. 17H13

Question ID : 94891112488
Option 1 ID : 94891149952
Option 2 ID : 94891149951
Option 3 ID : 94891149950
Option 4 ID : 94891149949
Status : Answered
Chosen Option : 1

Q.55 What is the name of the scheme which aims to provide LED bulbs to domestic consumers at subsidized rate?

- Ans
- 1. 'Bulb Scheme'
 - 2. 'Ujala Scheme'
 - 3. 'Har Ghar Bijli Scheme'
 - 4. 'Roshan Scheme'

Question ID : 94891112243
Option 1 ID : 94891148971
Option 2 ID : 94891148969
Option 3 ID : 94891148972
Option 4 ID : 94891148970
Status : Answered
Chosen Option : 2

Q.56 The sum of the roots of the equation $x^2 - 11x + 30 = 0$ is:

- Ans
- 1. 15
 - 2. 30
 - 3. 11
 - 4. 1

Question ID : 94891114567
Option 1 ID : 94891158268
Option 2 ID : 94891158267
Option 3 ID : 94891158266
Option 4 ID : 94891158265
Status : Answered
Chosen Option : 3



Download RRB Exams PDF E-BOOKS

[CLICK HERE](#)

Download RRB NTPC Exam Study Notes

Q.57 Which of the following was the capital of the kingdom Magadh?

- Ans
- 1. Vaishali
 - 2. Ujjain
 - 3. Rajgir
 - 4. Kaushambi

Question ID : 94891112217

Option 1 ID : 94891148868

Option 2 ID : 94891148867

Option 3 ID : 94891148866

Option 4 ID : 94891148865

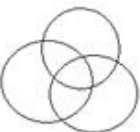


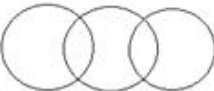
Status : Answered

Chosen Option : 3

Q.58 Select the Venn diagram that best represents the relationship between the following classes.

Parent, Teacher, Female.

Ans

- 1. 
- 2. 
- 3. 
- 4. 

Question ID : 94891112498

Option 1 ID : 94891149991

Option 2 ID : 94891149992

Option 3 ID : 94891149990

Option 4 ID : 94891149989

Status : Answered

Chosen Option : 1



Download RRB Exams PDF E-BOOKS

[CLICK HERE](#)

Download RRB NTPC Exam Study Notes

Q.59 The Murlen National Park is located in which state?

- Ans
- 1. Telangana
 - 2. Himachal Pradesh
 - 3. Mizoram
 - 4. Jharkhand

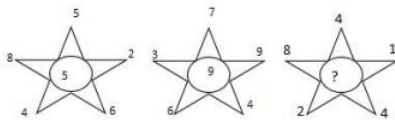
Question ID : 94891112215
Option 1 ID : 94891148860
Option 2 ID : 94891148859
Option 3 ID : 94891148858
Option 4 ID : 94891148857
Status : Answered
Chosen Option : 3

Q.60 _____ has become the first country in the world to receive vaccines acquired through the United Nations-backed COVAX initiative.

- Ans
- 1. Bhutan
 - 2. Ghana
 - 3. Nigeria
 - 4. Sudan

Question ID : 94891112205
Option 1 ID : 94891148818
Option 2 ID : 94891148817
Option 3 ID : 94891148819
Option 4 ID : 94891148820
Status : Answered
Chosen Option : 4

Q.61 Study the given pattern carefully and select the number from among the given options that can replace the question mark (?) in the third figure.



- Ans
- 1. 6
 - 2. 8
 - 3. 7
 - 4. 2

Question ID : 94891112484
Option 1 ID : 94891149933
Option 2 ID : 94891149936
Option 3 ID : 94891149934
Option 4 ID : 94891149935
Status : Answered
Chosen Option : 3



Download RRB Exams PDF E-BOOKS

[CLICK HERE](#)

Download RRB NTPC Exam Study Notes

Q.62 The third proportional to 4 and 9 is:

- Ans
- 1. 81
 - 2. $20\frac{1}{4}$
 - 3. 36
 - 4. 16

Question ID : 94891114556
Option 1 ID : 94891158222
Option 2 ID : 94891158223
Option 3 ID : 94891158221
Option 4 ID : 94891158224
Status : Answered
Chosen Option : 3

Q.63 _____ was the first artificial satellite launched by the Soviet Union in 1957.

- Ans
- 1. Bhaskara
 - 2. Cartosat-2
 - 3. RISAT-1
 - 4. Sputnik-1

Question ID : 94891112231
Option 1 ID : 94891148921
Option 2 ID : 94891148922
Option 3 ID : 94891148924
Option 4 ID : 94891148923
Status : Answered
Chosen Option : 4

Q.64 Four letter-pairs have been given, out of which three are alike in some manner and one is different. Select the odd one.

- Ans
- 1. B-F
 - 2. Y-C
 - 3. Z-F
 - 4. M-Q

Question ID : 94891112493
Option 1 ID : 94891149969
Option 2 ID : 94891149972
Option 3 ID : 94891149970
Option 4 ID : 94891149971
Status : Answered
Chosen Option : 3



Download RRB Exams PDF E-BOOKS

[CLICK HERE](#)

Download RRB NTPC Exam Study Notes

Q.65 The compound ratio of 1 : 2, 3 : 10 and 10 : 21 is:

- Ans
- 1. 1 : 7
 - 2. 7 : 1
 - 3. 14 : 1
 - 4. 1 : 14

Question ID : 94891114555
Option 1 ID : 94891158217
Option 2 ID : 94891158219
Option 3 ID : 94891158220
Option 4 ID : 94891158218
Status : Answered
Chosen Option : 4

Q.66 Without assuming anything beyond the information given, select the correct nature of relationship between the two statements A and B.

Statements:

A. Mango production has reduced by half as compared to last year.

B. The price of mangoes in the market has risen up.

- Ans
- 1. Both statements A and B are independent causes.
 - 2. Statement B is the cause and statement A is its effect.
 - 3. Both statements A and B are effects of independent causes.
 - 4. Statement A is the cause and statement B is its effect.

Question ID : 94891112481
Option 1 ID : 94891149924
Option 2 ID : 94891149922
Option 3 ID : 94891149923
Option 4 ID : 94891149921
Status : Answered
Chosen Option : 4

Q.67 'Pataca' is the currency of which country?

- Ans
- 1. Laos
 - 2. Mexico
 - 3. Macau
 - 4. Panama

Question ID : 94891112233
Option 1 ID : 94891148930
Option 2 ID : 94891148932
Option 3 ID : 94891148931
Option 4 ID : 94891148929
Status : Not Answered
Chosen Option : --



Download RRB Exams PDF E-BOOKS

[CLICK HERE](#)

Q.68 What is the HCF of $\frac{1}{2}$ and $\frac{3}{4}$?

- Ans
- 1. $\frac{3}{4}$
 - 2. $\frac{1}{4}$
 - 3. $\frac{4}{3}$
 - 4. $\frac{1}{2}$

Question ID : 94891114547

Option 1 ID : 94891158187

Option 2 ID : 94891158185

Option 3 ID : 94891158188

Option 4 ID : 94891158186

Status : Answered

Chosen Option : 2

Q.69 The fabric that became a symbol of India's freedom struggle is:

- Ans
- 1. Polyester
 - 2. Khadi
 - 3. Wool
 - 4. Silk

Question ID : 94891112208

Option 1 ID : 94891148832

Option 2 ID : 94891148830

Option 3 ID : 94891148831

Option 4 ID : 94891148829

Status : Answered

Chosen Option : 2

Q.70 Which of the following real numbers has the maximum value? $\sqrt{2}$, $\sqrt[3]{3}$, $\sqrt[4]{4}$ and $\sqrt[5]{5}$

- Ans
- 1. $\sqrt[4]{4}$
 - 2. $\sqrt[3]{3}$
 - 3. $\sqrt{2}$
 - 4. $\sqrt[5]{5}$

Question ID : 94891114553

Option 1 ID : 94891158211

Option 2 ID : 94891158210

Option 3 ID : 94891158209

Option 4 ID : 94891158212

Status : Answered



Download RRB NTPC Exam Study Notes

Q.71 Who among the following cricketer received the Man of the Series in India-England Test series concluded in March, 2021?

- Ans
- 1. Rishabh Pant
 - 2. Ravichandran Ashwin
 - 3. Axar Patel
 - 4. Rohit Sharma

Question ID : 94891112207
Option 1 ID : 94891148825
Option 2 ID : 94891148826
Option 3 ID : 94891148828
Option 4 ID : 94891148827
Status : Answered
Chosen Option : 2

Q.72 The value of $24 + 13 - 5 \times \frac{1}{2} \times 10 - \{45 \div (17 - 2)\}$ is:

- Ans
- 1. 9
 - 2. -7
 - 3. 18
 - 4. 11

Question ID : 94891114552
Option 1 ID : 94891158208
Option 2 ID : 94891158206
Option 3 ID : 94891158205
Option 4 ID : 94891158207
Status : Answered
Chosen Option : 1

Q.73 Four words have been given, out of which three are alike in some manner and one is different. Select the odd one.

- Ans
- 1. Drums
 - 2. Trumpet
 - 3. String
 - 4. Guitar

Question ID : 94891112494
Option 1 ID : 94891149974
Option 2 ID : 94891149973
Option 3 ID : 94891149976
Option 4 ID : 94891149975
Status : Answered
Chosen Option : 3



Download RRB Exams PDF E-BOOKS

[CLICK HERE](#)

Download RRB NTPC Exam Study Notes

Q.74 A group of six persons has to be formed from among the Post Graduate Teachers (PGTs) P, Q, R, S and T and Trained Graduate Teachers (TGTs) A, B, C, D and E. There are some conditions of the persons for the group formation.

B will join the group only with C.

A will not join with E or Q. D will not join with R.

Which of the following groups is possible?

- Ans**
- 1. PQSBCE
 - 2. PRSABE
 - 3. RSTBCD
 - 4. PQRBCD

Question ID : 94891112503

Option 1 ID : 94891150010

Option 2 ID : 94891150011

Option 3 ID : 94891150009

Option 4 ID : 94891150012

Status : Answered

Chosen Option : 1

Q.75 Read the given statements and conclusions carefully. Assuming that the information given in the statements is true, even if it appears to be at variance with commonly known facts, decide which of the given conclusions logically follow(s) from the statements.

Statements:

- 1. Some chairs are tables.
- 2. All books are tables.

Conclusions:

- 1. Some books are chairs.
- 2. Some tables are chairs.

- Ans**
- 1. Both conclusions 1 and 2 follow.
 - 2. Neither conclusion 1 nor 2 follows.
 - 3. Only conclusion 1 follows.
 - 4. Only conclusion 2 follows.

Question ID : 94891112501

Option 1 ID : 94891150003

Option 2 ID : 94891150004

Option 3 ID : 94891150001

Option 4 ID : 94891150002

Status : Answered

Chosen Option : 1



Download RRB Exams PDF E-BOOKS

[CLICK HERE](#)

Download RRB NTPC Exam Study Notes

Q.76 The value of $(\operatorname{cosec}\theta + \cot\theta) \times (1 - \cos\theta)$ is:

- Ans
- 1. $\cos\theta$
 - 2. $\operatorname{cosec}\theta$
 - 3. $\sin\theta$
 - 4. $\sec\theta$

Question ID : 94891114571

Option 1 ID : 94891158282

Option 2 ID : 94891158283

Option 3 ID : 94891158281

Option 4 ID : 94891158284

Status : Answered

Chosen Option : 3

Q.77 A raw data is in ascending order i.e. 3, 4, 8, x , $x + 1$, 12, 14, 15. If the median of this data is 9.5, then the value of x is:

- Ans
- 1. 7
 - 2. 9
 - 3. 4
 - 4. 11

Question ID : 94891114573

Option 1 ID : 94891158290

Option 2 ID : 94891158291

Option 3 ID : 94891158289

Option 4 ID : 94891158292

Status : Answered

Chosen Option : 2

Q.78 If $\frac{1}{x} + \frac{2}{3} = \frac{1}{2x} + \frac{3}{4}$, then the value of x is:

- Ans
- 1. 2
 - 2. 8
 - 3. 6
 - 4. 4

Question ID : 94891114566

Option 1 ID : 94891158261

Option 2 ID : 94891158264

Option 3 ID : 94891158263

Option 4 ID : 94891158262

Status : Answered

Chosen Option : 3



Download RRB Exams PDF E-BOOKS

[CLICK HERE](#)

Download RRB NTPC Exam Study Notes

Q.79 _____ is the closest star to the Earth.

- Ans
- 1. Altair
 - 2. Sun
 - 3. Moon
 - 4. Vega

Question ID : 94891112211
Option 1 ID : 94891148843
Option 2 ID : 94891148844
Option 3 ID : 94891148841
Option 4 ID : 94891148842
Status : Answered
Chosen Option : 2

Q.80 What is the speed of a man, in km/h, who takes 10 min to run a distance of 1000 m?

- Ans
- 1. 6 km/h
 - 2. 8 km/h
 - 3. 2 km/h
 - 4. 4 km/h

Question ID : 94891114563
Option 1 ID : 94891158251
Option 2 ID : 94891158252
Option 3 ID : 94891158249
Option 4 ID : 94891158250
Status : Answered
Chosen Option : 1

Q.81 In which state of India can we find the preserved Buddhist caves called 'Karla'?

- Ans
- 1. Bihar
 - 2. Karnataka
 - 3. Maharashtra
 - 4. Uttar Pradesh

Question ID : 94891112210
Option 1 ID : 94891148837
Option 2 ID : 94891148840
Option 3 ID : 94891148839
Option 4 ID : 94891148838
Status : Answered
Chosen Option : 3



Download RRB Exams PDF E-BOOKS

[CLICK HERE](#)

Download RRB NTPC Exam Study Notes

Q.82 Who founded the journal 'Bande Mataram' in India?

- Ans
- 1. Ramanand Chatterji
 - 2. Aurobindo Ghosh
 - 3. Bipin Chandra Pal
 - 4. Ganesh Shankar Vidyarthi

Question ID : 94891112218

Option 1 ID : 94891148870

Option 2 ID : 94891148871

Option 3 ID : 94891148872

Option 4 ID : 94891148869

Status : Answered

Chosen Option : 2

Q.83 The normal systolic pressure of human blood is:

- Ans
- 1. 80 mmHg
 - 2. 130 mmHg
 - 3. 120 mmHg
 - 4. 110 mmHg

Question ID : 94891112214

Option 1 ID : 94891148855

Option 2 ID : 94891148856

Option 3 ID : 94891148853

Option 4 ID : 94891148854

Status : Answered

Chosen Option : 4

Q.84 What is the amount of annual health benefit cover to be provided per family under the 'Ayushman Bharat' scheme of the Government of India?

- Ans
- 1. ₹10 lakh
 - 2. ₹3 lakh
 - 3. ₹5 lakh
 - 4. ₹1 lakh

Question ID : 94891112240

Option 1 ID : 94891148959

Option 2 ID : 94891148960

Option 3 ID : 94891148957

Option 4 ID : 94891148958

Status : Answered

Chosen Option : 3



Download RRB Exams PDF E-BOOKS

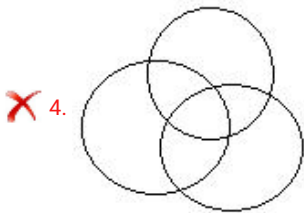
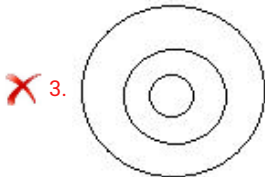
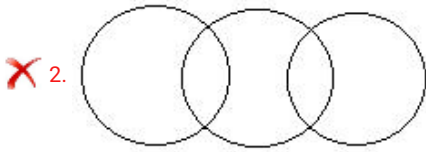
[CLICK HERE](#)

Download RRB NTPC Exam Study Notes

Q.85 Select the Venn diagram that best represents the relationship between the following classes.

Table, Chair, Cupboard

Ans



Question ID : 94891112496

Option 1 ID : 94891149984

Option 2 ID : 94891149981

Option 3 ID : 94891149982

Option 4 ID : 94891149983

Status : Answered

Chosen Option : 1

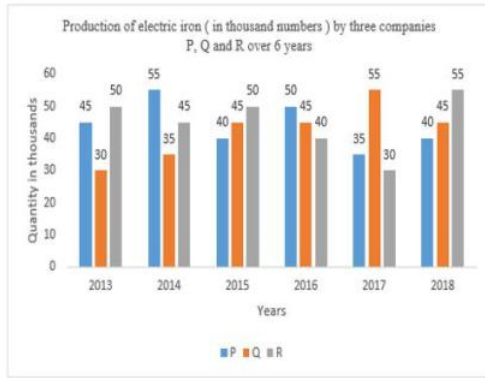


Download RRB Exams PDF E-BOOKS

[CLICK HERE](#)

Download RRB NTPC Exam Study Notes

Q.86 The following bar graph shows the production of electric irons (in thousand numbers) by three companies P, Q and R over 6 years (from 2013 to 2018). Answer the given question based on the bar graph.



For company Q, what is the approximate percentage increase in the production of electric irons from 2013 to 2016?

- Ans**
- 1. 65%
 - 2. 50%
 - 3. 60%
 - 4. 57%

Question ID : 94891112489

Option 1 ID : 94891149956

Option 2 ID : 94891149955

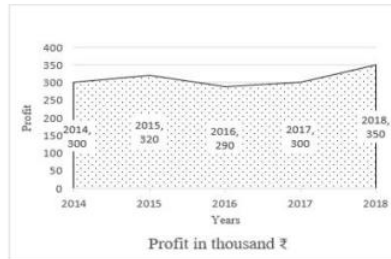
Option 3 ID : 94891149954

Option 4 ID : 94891149953

Status : Answered

Chosen Option : 2

Q.87 The following graph given shows the profit made by a cosmetic company (in ₹ thousand) over 5 years (from 2014 to 2018). Answer the given question based on the graph.



What is the ratio of the number of years in which the profits are below average to those in which the profits are above average?

- Ans**
- 1. 3 : 2
 - 2. 2 : 1
 - 3. 1 : 2
 - 4. 2 : 3

Question ID : 94891112490

Option 1 ID : 94891149958

Option 2 ID : 94891149960

Option 3 ID : 94891149959

Option 4 ID : 94891149957

Status : Answered

Chosen Option : 4

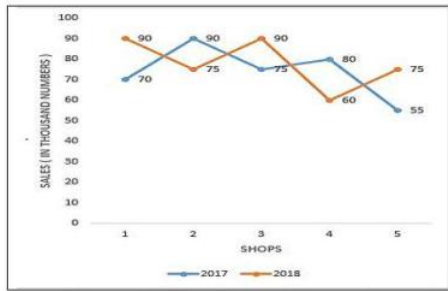


Download RRB Exams PDF E-BOOKS

[CLICK HERE](#)

Download RRB NTPC Exam Study Notes

Q.88 The following line graph shows the sales of external hard disks (in thousand numbers) for five shops 1, 2, 3, 4, 5 in the years 2017 and 2018. Answer the given question based on the line graph.

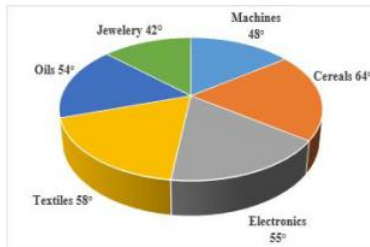


Total sales for shop 1 for both the years is what percentage (approximate) of the total sales for shop 5 for both the years?

- Ans**
- 1. 100%
 - 2. 123%
 - 3. 95%
 - 4. 110%

Question ID : 94891112491
Option 1 ID : 94891149963
Option 2 ID : 94891149961
Option 3 ID : 94891149964
Option 4 ID : 94891149962
Status : Answered
Chosen Option : 2

Q.89 The following pie chart shows the expenditure of a country on importing various products during a particular year. Answer the given question based on the pie chart.



If the amount spent on importing only machines during the year was ₹8 crore, then what was the total amount (approximate) spent on importing all the various products in that year?

- Ans**
- 1. ₹60 crore
 - 2. ₹20 crore
 - 3. ₹30 crore
 - 4. ₹40 crore

Question ID : 94891112492
Option 1 ID : 94891149968
Option 2 ID : 94891149965
Option 3 ID : 94891149966
Option 4 ID : 94891149967
Status : Answered
Chosen Option : 1



Download RRB Exams PDF E-BOOKS

[CLICK HERE](#)

Download RRB NTPC Exam Study Notes

Q.90 Select the option that is related to the third term in the same way as the second term is related to the first term.

Napoleon : France :: Christopher Columbus : ?

- Ans**
- 1. America
 - 2. Portugal
 - 3. England
 - 4. Spain

Question ID : 94891112478

Option 1 ID : 94891149909

Option 2 ID : 94891149911

Option 3 ID : 94891149912

Option 4 ID : 94891149910

Status : Answered

Chosen Option : 1

Q.91 Of the four given equations, the first three are solved on the basis of a certain system, where the function of the '+' remains the same. Find the correct answer for the unsolved fourth equation on the same basis.

$$6 + 2 = 9 \quad 4 + 5 = 12$$

I. II.

$$7 + 3 = 14 \quad 3 + 3 = ?$$

III. IV.

- Ans**
- 1. 3
 - 2. 9
 - 3. 12
 - 4. 6

Question ID : 94891112487

Option 1 ID : 94891149945

Option 2 ID : 94891149947

Option 3 ID : 94891149948

Option 4 ID : 94891149946

Status : Answered

Chosen Option : 4



Download RRB Exams PDF E-BOOKS

[CLICK HERE](#)

Download RRB NTPC Exam Study Notes

Q.92 If '+' means 'division', '-' means 'addition', '×' means 'subtraction' and '÷' means 'multiplication', then what will be the value of the following expression?

$$[[{(16 \times 2) \div 2} + (4 - 3)] \div 1$$

- Ans**
- 1. 4
 - 2. 2
 - 3. 1
 - 4. 3

Question ID : 94891112486

Option 1 ID : 94891149944

Option 2 ID : 94891149942

Option 3 ID : 94891149941

Option 4 ID : 94891149943

Status : Answered

Chosen Option : 1

Q.93 My elder sister showed me a picture of a man in our family photo album and said that he was the only son of our grandmother, but he was not the brother of our mother. If our mother had only two children, one daughter and a son, then how am I related to the man?

- Ans**
- 1. Son
 - 2. Father
 - 3. Paternal uncle
 - 4. Niece

Question ID : 94891112477

Option 1 ID : 94891149908

Option 2 ID : 94891149906

Option 3 ID : 94891149905

Option 4 ID : 94891149907

Status : Answered

Chosen Option : 1

Q.94 Six teams DD, MI, RCB, KKR, RR and CSK are compared on the basis of the number of matches won by them in 2019. DD won more matches than RR and RCB but less matches than MI and CSK. KKR won more matches than MI but less matches than CSK.

Who won the most numbers of matches?

- Ans**
- 1. MI
 - 2. KKR
 - 3. RCB
 - 4. CSK

Question ID : 94891112502

Option 1 ID : 94891150006

Option 2 ID : 94891150005

Option 3 ID : 94891150008

Option 4 ID : 94891150007

Status : Answered

Chosen Option : 4



Download RRB Exams PDF E-BOOKS

[CLICK HERE](#)

Download RRB NTPC Exam Study Notes

Q.95 Of the four given equations, the first three are solved on the basis of a certain system, where the function of the shape “

♥” remains the same. Find the correct answer for the unsolved fourth equation on the same basis.

7 ♥ 3 = 8

4 ♥ 4 = 5

6 ♥ 7 = 7

a ♥ b = ?

Ans

✗ 1. $\frac{(ab + b)}{a}$

✗ 2. $\frac{(a - b)}{ab}$

✓ 3. $\frac{(ab + b)}{b}$

✗ 4. $\frac{ab}{(a + b)}$

Question ID : 94891112485

Option 1 ID : 94891149937

Option 2 ID : 94891149938

Option 3 ID : 94891149940

Option 4 ID : 94891149939

Status : Answered

Chosen Option : 3

Q.96 In a certain code language, OPIOPOPPPIO is written as OIPOPPIOPOI. How will WFKFKWKWFFWK be written as in that code language?

Ans

✗ 1. FKWKWFWFKFWK

✗ 2. FKWWFKFWKFKW

✓ 3. FKWKWFFWKWFK

✗ 4. FKWFWKWFKKWF

Question ID : 94891112475

Option 1 ID : 94891149897

Option 2 ID : 94891149900

Option 3 ID : 94891149898

Option 4 ID : 94891149899

Status : Not Answered

Chosen Option : --



Download RRB Exams PDF E-BOOKS

[CLICK HERE](#)

Download RRB NTPC Exam Study Notes

Q.97 How will you write 2.47 hours in hours, minutes and seconds?

- Ans
- 1. 2 hours, 28 minutes, 12 seconds
 - 2. 2 hours, 40 minutes, 47 seconds
 - 3. 2 hours, 47 minutes
 - 4. 2 hours, 40 minutes, 7 seconds

Question ID : 94891112479

Option 1 ID : 94891149916

Option 2 ID : 94891149915

Option 3 ID : 94891149913

Option 4 ID : 94891149914

Status : Answered

Chosen Option : 1

Q.98 In a certain code language, AMFMAFAA is written as FMAFAAAM. Which of the given options will be the code for DODADODA in that code language?

- Ans
- 1. ADODADOD
 - 2. AODADODD
 - 3. DADODADO
 - 4. DODODAAD

Question ID : 94891112474

Option 1 ID : 94891149894

Option 2 ID : 94891149896

Option 3 ID : 94891149895

Option 4 ID : 94891149893

Status : Answered


Chosen Option : 4



Download RRB Exams PDF E-BOOKS

[CLICK HERE](#)

RRB NTPC EXAM Study Kit



100%

- ▶ 100% Exam Syllabus Covered
- ▶ 8 Books, 950+ Pages
- ▶ Mathematics, General Intelligence & Reasoning,
- ▶ General Science, General Awareness
- ▶ Previous year Solved Papers
- ▶ Mock Tests with Answers
- ▶ 1 Year Current Affairs



RRB NTPC PDF NOTES

100% Syllabus | 950+ Pages

50%
OFF

CLICK HERE



CLICK BELOW LINK TO DOWNLOAD PDF NOTES

<https://rrbexamportal.com/study-kit/Railway-NTPC-Exam>

Download RRB NTPC Exam Study Notes

Q.99 Without assuming anything beyond the information given, select the correct nature of relationship between the two events A and B.

Events:

A: Tabu, accidentally, killed Nikhil during self-defense.

B: Nikhil was approaching Tabu to kill her.

Ans 1.

Event A is the effect and event B is its immediate and principal cause.

2.

Event B is an effect but event A is not its immediate and principal cause.

3.

Event A is the immediate and principal cause and event B is its effect.

4.

Event A is an effect but event B is not its immediate and principal cause.

Question ID : 94891112482

Option 1 ID : 94891149925

Option 2 ID : 94891149928

Option 3 ID : 94891149926

Option 4 ID : 94891149927

Status : Answered

Chosen Option : 1

Q.100 If a cube of side 20 cm is divided into smaller cubes of side 4 cm, then what is the total number of smaller cubes?

Ans 1. 64

2. 125

3. 100

4. 27

Question ID : 94891112500

Option 1 ID : 94891149997

Option 2 ID : 94891150000

Option 3 ID : 94891149998

Option 4 ID : 94891149999

Status : Answered

Chosen Option : 2

QP HTML Generated date 2021/08/15-05:34:33



Download RRB Exams PDF E-BOOKS

[CLICK HERE](#)