



रेल भर्ती बोर्ड / RAILWAY RECRUITMENT BOARDS



सी ई एन ०१/२०१९ - एन टी पी सी - CEN 01/2019 - NTPC

Participant ID	
Participant Name	A
Test Center Name	
Test Date	04/03/2021
Test Time	10:30 AM - 12:00 PM
Subject	NTPC

* Note

Correct Answer will carry 1 mark per Question.
Incorrect Answer will carry 1/3 Negative mark.

- Options shown in green color with a tick icon are correct.
- Chosen option on the right of the question indicates the option selected by the candidate.

Section : NTPC

Q.1 The Narora Atomic Power Station is situated in:

- Ans
- 1. Maharashtra
 - 2. Haryana
 - 3. Madhya Pradesh
 - 4. Uttar Pradesh

Question ID : 9489117730
Option 1 ID : 94891130919
Option 2 ID : 94891130920
Option 3 ID : 94891130917
Option 4 ID : 94891130918
Status : Not Answered
Chosen Option : --

Q.2 The Department of Telecommunication Govt. of India has permitted the manufacture of mobile handsets with _____ W/kg as maximum SAR value.

- Ans
- 1. 1.6
 - 2. 2.6
 - 3. 0.6
 - 4. 3.6

Question ID : 9489117714
Option 1 ID : 94891130854
Option 2 ID : 94891130855
Option 3 ID : 94891130853
Option 4 ID : 94891130856
Status : Not Answered
Chosen Option : --



Download RRB NTPC Exam Study Notes

Q.3 The Financial Literacy Week is an initiative by:

- Ans**
- 1. State Bank of India
 - 2. Central Government
 - 3. Punjab National Bank
 - 4. Reserve Bank of India

Question ID : 9489117704

Option 1 ID : 94891130814

Option 2 ID : 94891130813

Option 3 ID : 94891130816

Option 4 ID : 94891130815

Status : Answered

Chosen Option : 4

Q.4 The scores of four cricket players are as follows:

Mohan scored more than Narender but less than Pankaj. Kamal scored more than Narender but less than Mohan.

Who scored the highest?

- Ans**
- 1. Pankaj
 - 2. Mohan
 - 3. Kamal
 - 4. Narender

Question ID : 9489117902

Option 1 ID : 94891131607

Option 2 ID : 94891131605

Option 3 ID : 94891131608

Option 4 ID : 94891131606

Status : Answered

Chosen Option : 1

Q.5 Find the total number of straight lines in the following figure.



- Ans**
- 1. 11
 - 2. 16
 - 3. 12
 - 4. 9

Question ID : 9489117899

Option 1 ID : 94891131594

Option 2 ID : 94891131596

Option 3 ID : 94891131595

Option 4 ID : 94891131593

Status : Answered

Chosen Option : 1



Download RRB Exams PDF E-BOOKS

CLICK HERE

Download RRB NTPC Exam Study Notes

Q.6 A sum of ₹400 amounts to ₹500 in 5 years at simple interest. If the interest rate was 2% higher, by how much would the interest amount increase?

- Ans**
- 1. ₹64
 - 2. ₹50
 - 3. ₹48
 - 4. ₹85

Question ID : 9489118458

Option 1 ID : 94891133829

Option 2 ID : 94891133831

Option 3 ID : 94891133830

Option 4 ID : 94891133832

Status : Answered

Chosen Option : 3

Q.7 Read the given statement and conclusions carefully. Assuming that the information given in the statements is true, even if it appears to be at variance with commonly known facts, decide which of the given conclusions logically follow(s) from the statement.

Statement:

The teacher scolded Amit in the presence of the whole class.

Conclusions:

- I. The teacher dislikes Amit.
- II. The class did not like Amit.

- Ans**
- 1. Only conclusion II follows.
 - 2. Neither conclusion I nor II follows.
 - 3. Only conclusion I follows.
 - 4. Either conclusion I or II follows.

Question ID : 9489117882

Option 1 ID : 94891131526

Option 2 ID : 94891131528

Option 3 ID : 94891131525

Option 4 ID : 94891131527

Status : Answered

Chosen Option : 2

Q.8 Which BIMSTEC members are NOT participating in China's Belt and Road Initiative (BRI)?

- Ans**
- 1. India and Bhutan
 - 2. Nepal and Bhutan
 - 3. India and Myanmar
 - 4. India and Nepal

Question ID : 9489117708

Option 1 ID : 94891130829

Option 2 ID : 94891130830

Option 3 ID : 94891130831

Option 4 ID : 94891130832

Status : Answered

Chosen Option : 3



Download RRB Exams PDF E-BOOKS

CLICK HERE

Download RRB NTPC Exam Study Notes

Q.9

The value of $\left\{ \frac{3}{5} \times [3 + \{3 + (11 + 5 + 6)\}] \right\}$ is:

Ans

1. $12\frac{6}{5}$
 2. $16\frac{4}{5}$
 3. $11\frac{4}{5}$
 4. $10\frac{2}{5}$

Question ID : 9489118444

Option 1 ID : 94891133774

Option 2 ID : 94891133775

Option 3 ID : 94891133773

Option 4 ID : 94891133776

Status : Answered

Chosen Option : 2

Q.10

15 men can do a piece of work in 30 days. How many days would 9 men need to complete the work?

Ans

1. 35
 2. 50
 3. 70
 4. 65

Question ID : 9489118463

Option 1 ID : 94891133849

Option 2 ID : 94891133850

Option 3 ID : 94891133852

Option 4 ID : 94891133851

Status : Answered

Chosen Option : 2

Q.11

A card is drawn at random from a pack of playing cards. What is the probability of getting a face card?

Ans

1. $\frac{5}{13}$
 2. $\frac{1}{13}$
 3. $\frac{4}{13}$
 4. $\frac{3}{13}$

Question ID : 9489118473

Option 1 ID : 94891133891

Option 2 ID : 94891133892

Option 3 ID : 94891133889

Option 4 ID : 94891133890

Status : Answered

Chosen Option : 2



Download RRB Exams PDF E-BOOKS

[CLICK HERE](#)

Download RRB NTPC Exam Study Notes

Q.12 If the perimeter of a square is 160 cm. What is the diagonal of the square (in cm)?

- Ans**
- 1. $40\sqrt{2}$ cm
 - 2. $20\sqrt{2}$ cm
 - 3. $80\sqrt{2}$ cm
 - 4. $60\sqrt{2}$ cm

Question ID : 9489118464
 Option 1 ID : 94891133854
 Option 2 ID : 94891133853
 Option 3 ID : 94891133856
 Option 4 ID : 94891133855
 Status : Answered

Chosen Option : 1

Q.13 Details of the number of students from various schools playing different sports is given in the table below. Study the table and answer the question.

Games	Schools				
	A	B	C	D	E
Badminton	34	67	23	78	56
Table Tennis	21	40	26	32	29
Football	12	22	19	16	21
Basketball	09	13	07	12	06
Cricket	98	121	78	84	67

Name the sports that have the minimum and maximum participation, respectively, of students from all the schools.

- Ans**
- 1. Cricket and Basketball
 - 2. Football and Basketball
 - 3. Basketball and Football
 - 4. Basketball and Cricket

Question ID : 9489117894
 Option 1 ID : 94891131575
 Option 2 ID : 94891131573
 Option 3 ID : 94891131574
 Option 4 ID : 94891131576
 Status : Answered

Chosen Option : 4

Q.14 The value of $27 \times 4.15 + 30.8 \div 22$ is:

- Ans**
- 1. 113.45
 - 2. 110.25
 - 3. 126.05
 - 4. 149.85

Question ID : 9489118449
 Option 1 ID : 94891133793
 Option 2 ID : 94891133794
 Option 3 ID : 94891133795
 Option 4 ID : 94891133796
 Status : Answered


Chosen Option : 1



Download RRB Exams PDF E-BOOKS

[CLICK HERE](#)

RRB NTPC EXAM Study Kit



100%

- ▶ 100% Exam Syllabus Covered
- ▶ 8 Books, 950+ Pages
- ▶ Mathematics, General Intelligence & Reasoning,
- ▶ General Science, General Awareness
- ▶ Previous year Solved Papers
- ▶ Mock Tests with Answers
- ▶ 1 Year Current Affairs



RRB NTPC PDF NOTES

100% Syllabus | 950+ Pages

50%
OFF

CLICK HERE



CLICK BELOW LINK TO DOWNLOAD PDF NOTES

<https://rrbexamportal.com/study-kit/Railway-NTPC-Exam>

Download RRB NTPC Exam Study Notes

Q.15 Select the letter-cluster that can replace the question mark (?) in the following series.

OQS, ?, ACT, GIK, MOQ

- Ans
- 1. UYW
 - 2. UWY
 - 3. RIV
 - 4. TVW

Question ID : 9489117887

Option 1 ID : 94891131548

Option 2 ID : 94891131545

Option 3 ID : 94891131547

Option 4 ID : 94891131546

Status : Answered

Chosen Option : 2

Q.16 If A exceeds B by 25 % and B is less than C by 30%, then the ratio of A and C is:

- Ans
- 1. 7 : 8
 - 2. 4 : 5
 - 3. 8 : 7
 - 4. 3 : 2

Question ID : 9489118456

Option 1 ID : 94891133824

Option 2 ID : 94891133821

Option 3 ID : 94891133822

Option 4 ID : 94891133823

Status : Answered

Chosen Option : 1

Q.17 Who was the ruler of the Vijayanagara dynasty who ruled in the 16th century?

- Ans
- 1. Adi Shankara
 - 2. Raja Raja Chola
 - 3. Pulakeshin II
 - 4. Krishnadeva Raya

Question ID : 9489117718

Option 1 ID : 94891130872

Option 2 ID : 94891130870

Option 3 ID : 94891130869

Option 4 ID : 94891130871

Status : Answered

Chosen Option : 4



Download RRB Exams PDF E-BOOKS

[CLICK HERE](#)

Download RRB NTPC Exam Study Notes

Q.18 Which bio-reserves of India are NOT included in the world network biosphere-reserve?

- Ans
- 1. Sunderbans
 - 2. Manas
 - 3. Gulf of Mannar
 - 4. Nanda Devi

Question ID : 9489117716
Option 1 ID : 94891130861
Option 2 ID : 94891130863
Option 3 ID : 94891130862
Option 4 ID : 94891130864
Status : Answered
Chosen Option : 3

Q.19 R is the father of a girl S and brother of a man A. C is mother of S and sister-in-law of A. What is relationship between S and A?

- Ans
- 1. Maternal uncle and niece
 - 2. Brother and sister
 - 3. Niece and paternal uncle
 - 4. Father and daughter

Question ID : 9489117878
Option 1 ID : 94891131509
Option 2 ID : 94891131510
Option 3 ID : 94891131511
Option 4 ID : 94891131512
Status : Answered
Chosen Option : 3

Q.20 A son is 24 years younger than his father, and in 2 years, he will be half of the age of his father. What is the age of the father?

- Ans
- 1. 48 Years
 - 2. 46 Years
 - 3. 44 Years
 - 4. 50 Years

Question ID : 9489117901
Option 1 ID : 94891131603
Option 2 ID : 94891131604
Option 3 ID : 94891131601
Option 4 ID : 94891131602
Status : Answered
Chosen Option : 2



Download RRB Exams PDF E-BOOKS

[CLICK HERE](#)

Download RRB NTPC Exam Study Notes

Q.21 Which of following is an incorrect statement about payment banks?

- Ans
- 1. They can accept demand deposits
 - 2. They can issue debit cards
 - 3. They cannot issue loans
 - 4. They can issue credit cards

Question ID : 9489117743
 Option 1 ID : 94891130969
 Option 2 ID : 94891130971
 Option 3 ID : 94891130972
 Option 4 ID : 94891130970
 Status : Not Answered
 Chosen Option : --

Q.22 If $2a = 3b = 4c$ and $a + b + c = 13\sqrt{2}$, then $a^2 + b^2 + c^2$ is:

- Ans
- 1. 68
 - 2. 72
 - 3. 104
 - 4. 122

Question ID : 9489118451
 Option 1 ID : 94891133801
 Option 2 ID : 94891133803
 Option 3 ID : 94891133802
 Option 4 ID : 94891133804
 Status : Not Answered
 Chosen Option : --

Q.23 A retailer buys 20 pens at the marked price of 15 pens from a wholesaler. If he sells these 20 pens giving a discount of 1%, then what is the profit percent of the retailer?

- Ans
- 1. 35%
 - 2. 25%
 - 3. 32%
 - 4. 30%

Question ID : 9489118459
 Option 1 ID : 94891133836
 Option 2 ID : 94891133835
 Option 3 ID : 94891133833
 Option 4 ID : 94891133834
 Status : Not Answered
 Chosen Option : --



Download RRB Exams PDF E-BOOKS

CLICK HERE

Download RRB NTPC Exam Study Notes

Q.24 If $(3^x)(3^y) = 9$ and $(25^x)(5^y) = 625$, then what is (x, y)?

- Ans
- 1. (2, 4)
 - 2. (2, 0)
 - 3. (3, -5)
 - 4. (1, 2)

Question ID : 9489118467
 Option 1 ID : 94891133866
 Option 2 ID : 94891133868
 Option 3 ID : 94891133867
 Option 4 ID : 94891133865
 Status : Answered
 Chosen Option : 2

Q.25 In a certain code language, AGE is written as 13 and SEX is written as 48. How will COME be written as in that language?

- Ans
- 1. 63
 - 2. 92
 - 3. 36
 - 4. 61

Question ID : 9489117877
 Option 1 ID : 94891131505
 Option 2 ID : 94891131506
 Option 3 ID : 94891131508
 Option 4 ID : 94891131507
 Status : Answered
 Chosen Option : 3

Q.26 The concentration of which plant hormone is highest at the top of the plant and decreases as you get closer to the roots?

- Ans
- 1. Cytokinin
 - 2. Gibberellin
 - 3. Ethylene
 - 4. Auxin

Question ID : 9489117713
 Option 1 ID : 94891130851
 Option 2 ID : 94891130850
 Option 3 ID : 94891130852
 Option 4 ID : 94891130849
 Status : Not Answered
 Chosen Option : --



Download RRB Exams PDF E-BOOKS

CLICK HERE

Download RRB NTPC Exam Study Notes

Q.27 In Banking field, SLR means:

- Ans
- 1. Simple Lending Rate
 - 2. Statutory Lending Rate
 - 3. State Liquidity Ratio
 - 4. Statutory Liquidity Ratio

Question ID : 9489117739

Option 1 ID : 94891130956

Option 2 ID : 94891130955

Option 3 ID : 94891130954

Option 4 ID : 94891130953

Status : Answered

Chosen Option : 4

Q.28 If two litres of water is evaporated from a 5 litre solution containing 3% salt, then what is the percentage of salt in the remaining solution?

- Ans
- 1. 5%
 - 2. 2%
 - 3. 6%
 - 4. 3%

Question ID : 9489118457

Option 1 ID : 94891133828

Option 2 ID : 94891133826

Option 3 ID : 94891133825

Option 4 ID : 94891133827

Status : Not Answered

Chosen Option : --



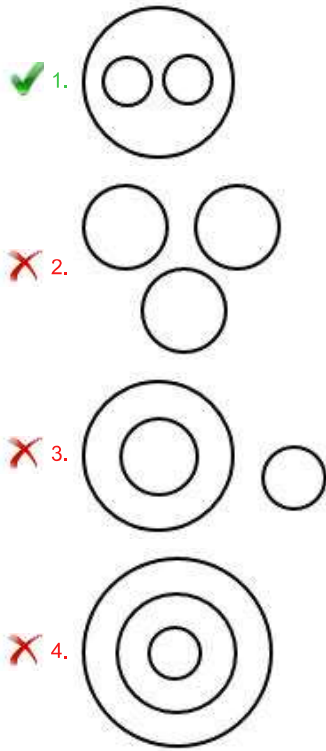
Download RRB Exams PDF E-BOOKS

[CLICK HERE](#)

Download RRB NTPC Exam Study Notes

Q.29 Select the Venn diagram that best represents the relationship between computers, desktops and laptops.

Ans



Question ID : 9489117903
 Option 1 ID : 94891131611
 Option 2 ID : 94891131609
 Option 3 ID : 94891131612
 Option 4 ID : 94891131610
 Status : Answered
 Chosen Option : 1

Q.30 Consider the given statement and decide which of the given assumptions is/are implicit in the statement.

Statement:

"Invest in our schemes and double your money" – Statement by a marketing executive.

Assumptions:

- 1. The statement is an unrealistic assurance.
- 2. People want to invest their savings to increase their income.

Ans

- 1. Only assumption 1 is implicit.
- 2. Only assumption 2 is implicit.
- 3. Both assumptions 1 and 2 are implicit.
- 4. Neither assumption 1 nor 2 is implicit.

Question ID : 9489117885
 Option 1 ID : 94891131537
 Option 2 ID : 94891131538
 Option 3 ID : 94891131540
 Option 4 ID : 94891131539
 Status : Not Answered
 Chosen Option : --

Download RRB NTPC Exam Study Notes

Q.31 The atomic number of an element is the number of _____ in the nucleus of each atom of that element.

- Ans**
- 1. electrons
 - 2. mesons
 - 3. neutrons
 - 4. protons

Question ID : 9489117715
 Option 1 ID : 94891130857
 Option 2 ID : 94891130860
 Option 3 ID : 94891130859
 Option 4 ID : 94891130858
 Status : Answered
 Chosen Option : 1

Q.32 To complete a given task, Imran takes 11 days, Tahir takes 15 days and Anis takes 13 days. Working together they finish the task and get ₹2,012. What will be the share of Imran provided the daily wage is the same for all?

- Ans**
- 1. ₹780
 - 2. ₹580
 - 3. ₹680
 - 4. ₹880

Question ID : 9489118461
 Option 1 ID : 94891133843
 Option 2 ID : 94891133842
 Option 3 ID : 94891133841
 Option 4 ID : 94891133844
 Status : Answered
 Chosen Option : 4

Q.33 If $x^4 + \frac{1}{x^4} = 322$ and $x > 1$, then what is the value of $x - \frac{1}{x}$?

- Ans**
- 1. 6
 - 2. 5
 - 3. 4
 - 4. 3

Question ID : 9489118466
 Option 1 ID : 94891133864
 Option 2 ID : 94891133861
 Option 3 ID : 94891133862
 Option 4 ID : 94891133863
 Status : Answered
 Chosen Option : 3



Download RRB Exams PDF E-BOOKS

CLICK HERE

Download RRB NTPC Exam Study Notes

Q.34 The capacity of a 3.5-inch floppy disk is:

- Ans
- 1. 1.40 MB
 - 2. 1.44 MB
 - 3. 1 GB
 - 4. 2.44 MB

Question ID : 9489117737

Option 1 ID : 94891130945

Option 2 ID : 94891130946

Option 3 ID : 94891130948

Option 4 ID : 94891130947

Status : Not Answered

Chosen Option : --

Q.35 Which of the following comes under the 'amphibia' class of animals?

- Ans
- 1. Cat
 - 2. Turtle
 - 3. Pigeon
 - 4. Toad

Question ID : 9489117712

Option 1 ID : 94891130848

Option 2 ID : 94891130845

Option 3 ID : 94891130847

Option 4 ID : 94891130846

Status : Answered

Chosen Option : 2

Q.36 What is the name of the research station set up by India in Antarctica in the year 2012?

- Ans
- 1. Sagarika
 - 2. Bharati
 - 3. Dhruva
 - 4. Hind

Question ID : 9489117732

Option 1 ID : 94891130927

Option 2 ID : 94891130928

Option 3 ID : 94891130925

Option 4 ID : 94891130926

Status : Answered

Chosen Option : 3



Download RRB Exams PDF E-BOOKS

[CLICK HERE](#)

Download RRB NTPC Exam Study Notes

Q.37 India and France signed an implementation agreement on "MOBILISE YOUR CITY" (MYC) to reduce:

- Ans
- 1. Traffic in the city
 - 2. Particulate matter
 - 3. Green House Gas (GHG) emissions
 - 4. Sewage

Question ID : 9489117707
Option 1 ID : 94891130828
Option 2 ID : 94891130827
Option 3 ID : 94891130826
Option 4 ID : 94891130825
Status : Answered
Chosen Option : 3

Q.38 Western Ghats and Eastern Ghats meet at _____ hills.

- Ans
- 1. Nilgiri
 - 2. Amarkantak
 - 3. Shivalik
 - 4. Maikal

Question ID : 9489117725
Option 1 ID : 94891130898
Option 2 ID : 94891130900
Option 3 ID : 94891130897
Option 4 ID : 94891130899
Status : Answered
Chosen Option : 1

Q.39 The four sides of a quadrilateral are in the ratio of 4 : 5 : 6 : 7 and its perimeter is 176 cm. Find the length of its longest side.

- Ans
- 1. 75 cm
 - 2. 65 cm
 - 3. 57 cm
 - 4. 56 cm

Question ID : 9489118465
Option 1 ID : 94891133860
Option 2 ID : 94891133857
Option 3 ID : 94891133859
Option 4 ID : 94891133858
Status : Answered
Chosen Option : 4



Download RRB Exams PDF E-BOOKS

[CLICK HERE](#)

Download RRB NTPC Exam Study Notes

Q.40 Who among the following is NOT related to Apple Inc. as its co-founder?

- Ans**
- 1. Ronald Wayne
 - 2. Mark Zuckerberg
 - 3. Steve Jobs
 - 4. Steve Wozniak

Question ID : 9489117738

Option 1 ID : 94891130952

Option 2 ID : 94891130951

Option 3 ID : 94891130950

Option 4 ID : 94891130949

Status : Answered

Chosen Option : 2

Q.41 Read the given statement and conclusions carefully. Assuming that the information given in the statements is true, even if it appears to be at variance with commonly known facts, decide which of the given conclusions logically follow(s) from the statement.

Statement:

Every hospital has patients.

Conclusions:

I Patients are available only in hospitals.

II Hospitals do not have patients.

- Ans**
- 1. Neither conclusion I nor II follows.
 - 2. Only conclusion II follows.
 - 3. Only conclusion I follows.
 - 4. Either conclusion I or II follows.

Question ID : 9489117883

Option 1 ID : 94891131532

Option 2 ID : 94891131530

Option 3 ID : 94891131529

Option 4 ID : 94891131531

Status : Not Answered

Chosen Option : --

Q.42 The square root of 182.25 is:

- Ans**
- 1. 13.5
 - 2. 12.5
 - 3. 11.25
 - 4. 9.25

Question ID : 9489118447

Option 1 ID : 94891133786

Option 2 ID : 94891133788

Option 3 ID : 94891133785

Option 4 ID : 94891133787

Status : Answered

Chosen Option : 1



Download RRB Exams PDF E-BOOKS

CLICK HERE

Download RRB NTPC Exam Study Notes

Q.43 Who introduced the Vernacular Press Act in India?

- Ans
- 1. Lord Willingdon
 - 2. Lord Lytton
 - 3. Lord Ripon
 - 4. Lord Dalhousie

Question ID : 9489117720
Option 1 ID : 94891130880
Option 2 ID : 94891130878
Option 3 ID : 94891130877
Option 4 ID : 94891130879
Status : Not Answered
Chosen Option : --

Q.44 Select the option that will fill in the blank and complete the given letter series.

A, B, D, G, K, P, ___

- Ans
- 1. X
 - 2. Z
 - 3. V
 - 4. W

Question ID : 9489117886
Option 1 ID : 94891131541
Option 2 ID : 94891131544
Option 3 ID : 94891131543
Option 4 ID : 94891131542
Status : Answered
Chosen Option : 3

Q.45 In which of following satyagraha's did Vallabh Bhai Patel get the title "Sardar"?

- Ans
- 1. Ahmedabad mill strike
 - 2. Champaran
 - 3. Bardoli
 - 4. Kheda

Question ID : 9489117721
Option 1 ID : 94891130884
Option 2 ID : 94891130881
Option 3 ID : 94891130883
Option 4 ID : 94891130882
Status : Answered
Chosen Option : 3



Download RRB Exams PDF E-BOOKS

[CLICK HERE](#)

Download RRB NTPC Exam Study Notes

Q.46 Who was the President of Indian National Congress on 15 August 1947?

- Ans
- 1. Sardar Patel
 - 2. Pandit J L Nehru
 - 3. J.B. Kripalani
 - 4. Rajendra Prasad

Question ID : 9489117719

Option 1 ID : 94891130874

Option 2 ID : 94891130873

Option 3 ID : 94891130876

Option 4 ID : 94891130875

Status : Not Answered

Chosen Option : --

Q.47 Where will you find the 'Forbidden City'?

- Ans
- 1. Myanmar
 - 2. China
 - 3. Vietnam
 - 4. Greece

Question ID : 9489117723

Option 1 ID : 94891130891

Option 2 ID : 94891130890

Option 3 ID : 94891130892

Option 4 ID : 94891130889

Status : Answered

Chosen Option : 2

Q.48 Who was the Englishman who came to India, taught Philosophy in St Stephen's College and later was known as 'Deerbandar'?

- Ans
- 1. William Pitt
 - 2. Lord Russell
 - 3. Michael Madhusudan Dutt
 - 4. C F Andrews

Question ID : 9489117741

Option 1 ID : 94891130964

Option 2 ID : 94891130963

Option 3 ID : 94891130962

Option 4 ID : 94891130961

Status : Not Answered

Chosen Option : --



Download RRB Exams PDF E-BOOKS

[CLICK HERE](#)

Download RRB NTPC Exam Study Notes

Q.49 If $x + \frac{1}{x} = 2 \cos \theta$, then what is the value of $x^2 + \frac{1}{x^2}$?

- Ans
- 1. $\sin 2\theta$
 - 2. $2 \cos 2\theta$
 - 3. $2 \sin 2\theta$
 - 4. $\cos 2\theta$

Question ID : 9489118472
 Option 1 ID : 94891133887
 Option 2 ID : 94891133885
 Option 3 ID : 94891133886
 Option 4 ID : 94891133888
 Status : Answered
 Chosen Option : 2

Q.50 In tossing three coins at a time, the probability of getting at least one heads is:

- Ans
- 1. $\frac{7}{8}$
 - 2. $\frac{1}{2}$
 - 3. $\frac{1}{8}$
 - 4. $\frac{3}{8}$

Question ID : 9489118471
 Option 1 ID : 94891133882
 Option 2 ID : 94891133883
 Option 3 ID : 94891133884
 Option 4 ID : 94891133881
 Status : Not Answered
 Chosen Option : --

Q.51 Which metal is used in electroplating on iron to protect it from corrosion and formation of rust?

- Ans
- 1. Rhodium
 - 2. Zinc
 - 3. Tin
 - 4. Chromium

Question ID : 9489117711
 Option 1 ID : 94891130842
 Option 2 ID : 94891130844
 Option 3 ID : 94891130841
 Option 4 ID : 94891130843
 Status : Answered
 Chosen Option : 2



Download RRB Exams PDF E-BOOKS

CLICK HERE

Download RRB NTPC Exam Study Notes

Q.52 Who is the 46th Chief Justice of India?

- Ans
- 1. Justice Dipak Mishra
 - 2. Justice Kurian Joseph
 - 3. Justice Chelameshwar
 - 4. Justice Ranjan Gogoi

Question ID : 9489117706
Option 1 ID : 94891130822
Option 2 ID : 94891130823
Option 3 ID : 94891130824
Option 4 ID : 94891130821
Status : Answered
Chosen Option : 4

Q.53 The name of the active volcano in India is:

- Ans
- 1. Barren island
 - 2. Neill island
 - 3. Sentinel Island
 - 4. Ross island

Question ID : 9489117726
Option 1 ID : 94891130904
Option 2 ID : 94891130901
Option 3 ID : 94891130903
Option 4 ID : 94891130902
Status : Answered
Chosen Option : 1

Q.54 Who founded the Servants of India Society?

- Ans
- 1. Bal Gangadhar Tilak
 - 2. Jyotiba Phule
 - 3. Gopal Krishna Gokhale
 - 4. Swami Dayanand Saraswati

Question ID : 9489117717
Option 1 ID : 94891130865
Option 2 ID : 94891130868
Option 3 ID : 94891130866
Option 4 ID : 94891130867
Status : Not Answered
Chosen Option : --



Download RRB Exams PDF E-BOOKS

[CLICK HERE](#)

Download RRB NTPC Exam Study Notes

Q.55 What is the minimum amount of monthly pension permissible under Atal Pension Yojana?

- Ans
- 1. ₹2,000
 - 2. ₹1,000
 - 3. ₹1,500
 - 4. ₹500

Question ID : 9489117740

Option 1 ID : 94891130960

Option 2 ID : 94891130958

Option 3 ID : 94891130959

Option 4 ID : 94891130957

Status : Not Answered

Chosen Option : --

Q.56 Who has been appointed as the Deputy Executive Director of United Nations Entity for Gender Equality and the Empowerment of Women (UN-Women) in June 2019?

- Ans
- 1. Indra Nooyi
 - 2. Anita Bhatia
 - 3. Lakshmi Puri
 - 4. Arpita Singh

Question ID : 9489117705

Option 1 ID : 94891130819

Option 2 ID : 94891130817

Option 3 ID : 94891130818

Option 4 ID : 94891130820

Status : Not Answered

Chosen Option : --

Q.57 Which is NOT an agency of United Nations?

- Ans
- 1. International Labour Organization
 - 2. Food and Agriculture Organization
 - 3. World Health Organization
 - 4. Red Cross International Committee

Question ID : 9489117734

Option 1 ID : 94891130933

Option 2 ID : 94891130935

Option 3 ID : 94891130936

Option 4 ID : 94891130934

Status : Answered

Chosen Option : 4



Download RRB Exams PDF E-BOOKS

[CLICK HERE](#)

Download RRB NTPC Exam Study Notes

Q.58 Who was the first Indian poet who was invited to recite his poems at the Library of Congress in

Washington DC?

- Ans
- 1. Ravindra Bhattacharya
 - 2. Abhay K.
 - 3. Gopalakrishna Adiga
 - 4. Vinay Kumar

Question ID : 9489117710

Option 1 ID : 94891130838

Option 2 ID : 94891130840

Option 3 ID : 94891130837

Option 4 ID : 94891130839

Status : Not Answered

Chosen Option : --

Q.59 The concept of 'directive principles' in Indian Constitution has been taken from:

- Ans
- 1. USA
 - 2. Ireland
 - 3. Canada
 - 4. Great Britain

Question ID : 9489117729

Option 1 ID : 94891130913

Option 2 ID : 94891130914

Option 3 ID : 94891130916

Option 4 ID : 94891130915

Status : Answered

Chosen Option : 2

Q.60 Which of the following is NOT an output device for a computer?

- Ans
- 1. Printer
 - 2. Scanner
 - 3. Projector
 - 4. Monitor

Question ID : 9489117736

Option 1 ID : 94891130944

Option 2 ID : 94891130941

Option 3 ID : 94891130943

Option 4 ID : 94891130942

Status : Answered

Chosen Option : 2



Download RRB Exams PDF E-BOOKS

[CLICK HERE](#)

Download RRB NTPC Exam Study Notes

Q.61 Which of the following was founded by Sir Stamford Raffles?

- Ans 1. Singapore
 2. Kuala Lumpur
 3. Mumbai
 4. Hong Kong

Question ID : 9489117722
Option 1 ID : 94891130888
Option 2 ID : 94891130887
Option 3 ID : 94891130885
Option 4 ID : 94891130886
Status : Not Answered
Chosen Option : --

Q.62 Which is NOT correct in the context of environmental accidents and their locations?

- Ans 1. Three Mile Island nuclear disaster - Tokyo
 2. Nuclear Power Plant explosion - Chernobyl
 3. Union Carbide Gas Leak - Bhopal
 4. Italian dioxin crisis - Seveso

Question ID : 9489117735
Option 1 ID : 94891130940
Option 2 ID : 94891130938
Option 3 ID : 94891130937
Option 4 ID : 94891130939
Status : Answered
Chosen Option : 3

Q.63 The product of two positive numbers is 0.60. If one number is $\frac{1}{15}$ th of the other, then what are the two numbers?

- Ans 1. 0.6, 1.0
 2. 0.4, 1.5
 3. 0.2, 3.0
 4. 0.3, 2.0

Question ID : 9489118445
Option 1 ID : 94891133780
Option 2 ID : 94891133777
Option 3 ID : 94891133778
Option 4 ID : 94891133779
Status : Answered
Chosen Option : 3



Download RRB Exams PDF E-BOOKS

[CLICK HERE](#)

Download RRB NTPC Exam Study Notes

Q.64 Find the radius of the circle $x^2 + y^2 + 7x + 4y + 9 = 0$.

Ans

1. $\frac{\sqrt{19}}{2}$
 2. $\frac{\sqrt{13}}{2}$
 3. $\frac{\sqrt{23}}{2}$
 4. $\frac{\sqrt{29}}{2}$

Question ID : 9489118469

Option 1 ID : 94891133876

Option 2 ID : 94891133875

Option 3 ID : 94891133874

Option 4 ID : 94891133873

Status : Not Answered

Chosen Option : --

Q.65 The distance from the origin to the line $4x + 3y + 6 = 0$ is:

Ans

1. $\frac{7}{5}$
 2. $\frac{4}{5}$
 3. $\frac{6}{5}$
 4. $\frac{3}{5}$

Question ID : 9489118468

Option 1 ID : 94891133872

Option 2 ID : 94891133870

Option 3 ID : 94891133871

Option 4 ID : 94891133869

Status : Not Answered

Chosen Option : --

Q.66 A sum of money doubles itself at compound interest in 12 years. In how many years will it become 4 times?

Ans

1. 36
 2. 20
 3. 18
 4. 24

Question ID : 9489118460

Option 1 ID : 94891133840

Option 2 ID : 94891133837

Option 3 ID : 94891133838

Option 4 ID : 94891133839

Status : Answered

Chosen Option : 4



Download RRB Exams PDF E-BOOKS

[CLICK HERE](#)

Download RRB NTPC Exam Study Notes

Q.67 Durand Line divides which two countries?

- Ans
- 1. Afghanistan-Pakistan
 - 2. India-Bangladesh
 - 3. India-Nepal
 - 4. Pakistan-China

Question ID : 9489117724

Option 1 ID : 94891130896

Option 2 ID : 94891130895

Option 3 ID : 94891130894

Option 4 ID : 94891130893

Status : Answered

Chosen Option : 1

Q.68 The value of $\sin 60^\circ \cos 60^\circ$ is equal to:

- Ans
- 1. $\frac{1}{2}$
 - 2. $\frac{\sqrt{3}}{2}$
 - 3. $\frac{3}{\sqrt{2}}$
 - 4. $\frac{\sqrt{3}}{4}$

Question ID : 9489118470

Option 1 ID : 94891133877

Option 2 ID : 94891133878

Option 3 ID : 94891133880

Option 4 ID : 94891133879

Status : Answered

Chosen Option : 4

Q.69 On which date is the National Voters' Day celebrated in India?

- Ans
- 1. 21st January
 - 2. 25th January
 - 3. 24th January
 - 4. 26th January

Question ID : 9489117728

Option 1 ID : 94891130912

Option 2 ID : 94891130911

Option 3 ID : 94891130909

Option 4 ID : 94891130910

Status : Answered

Chosen Option : 2



Download RRB Exams PDF E-BOOKS

[CLICK HERE](#)

Download RRB NTPC Exam Study Notes

Q.70 DISHA is an initiative under the Ministry of:

- Ans**
- 1. Urban Development
 - 2. Micro, Small and Medium Enterprises
 - 3. Rural Development
 - 4. Culture

Question ID : 9489117742
 Option 1 ID : 94891130965
 Option 2 ID : 94891130967
 Option 3 ID : 94891130966
 Option 4 ID : 94891130968
 Status : Not Answered
 Chosen Option : --

Q.71 Four words have been given, out of which three are alike in some manner and one is different. Select the odd one.

- Ans**
- 1. Chair
 - 2. Stool
 - 3. Tablet
 - 4. Bed

Question ID : 9489117897
 Option 1 ID : 94891131585
 Option 2 ID : 94891131588
 Option 3 ID : 94891131587
 Option 4 ID : 94891131586
 Status : Answered
 Chosen Option : 3

Q.72 Expenses made by a company (in millions) under different heads of expenditures are given below. Study the table carefully and answer the question.

Year	Head of Expenditure				
	Raw Materials	Loans & interests	Salary	Advertisements	Taxes
2014	452	197	309	56	47
2015	569	174	395	62	56
2016	659	198	400	73	61
2017	706	193	416	77	63
2018	752	202	479	81	69

What was the approximate average expenditure incurred by the company under the head of Taxes from 2014 to 2018?

- Ans**
- 1. 63
 - 2. 59
 - 3. 61
 - 4. 70

Question ID : 9489117895
 Option 1 ID : 94891131580
 Option 2 ID : 94891131578
 Option 3 ID : 94891131577
 Option 4 ID : 94891131579
 Status : Answered
 Chosen Option : 2



Download RRB Exams PDF E-BOOKS

CLICK HERE

Download RRB NTPC Exam Study Notes

Q.73 A man covered a distance of 32 km. After 1 hour 20 minutes he noticed that the distance he covered is $\frac{2}{7}$ th of the remaining distance. What was his speed in km/hr?

- Ans**
- 1. 24 km/hr
 - 2. 16 km/hr
 - 3. 12 km/hr
 - 4. 10 km/hr

Question ID : 9489118462
Option 1 ID : 94891133848
Option 2 ID : 94891133847
Option 3 ID : 94891133845
Option 4 ID : 94891133846
Status : Answered
Chosen Option : 1

Q.74 The measure of the greatest length which can measure 24 m, 32 m and 42 m completely is:

- Ans**
- 1. 4 m
 - 2. 2 m
 - 3. 5 m
 - 4. 8 m

Question ID : 9489118446
Option 1 ID : 94891133783
Option 2 ID : 94891133784
Option 3 ID : 94891133782
Option 4 ID : 94891133781
Status : Answered
Chosen Option : 2

Q.75 Who was the first President of Constituent Assembly of independent India?

- Ans**
- 1. Dr Sachchidananda Sinha
 - 2. Dr B.R. Ambedkar
 - 3. Pandit Jawaharlal Nehru
 - 4. Dr Rajendra Prasad

Question ID : 9489117727
Option 1 ID : 94891130907
Option 2 ID : 94891130905
Option 3 ID : 94891130908
Option 4 ID : 94891130906
Status : Answered
Chosen Option : 4



Download RRB Exams PDF E-BOOKS

[CLICK HERE](#)

Download RRB NTPC Exam Study Notes

Q.76 'Nirmala' was a fiction novel written by:

- Ans
- 1. Vaikom Muhammad Basheer
 - 2. Kamala Das
 - 3. Munshi Premchand
 - 4. Rabindranath Tagore

Question ID : 9489117709

Option 1 ID : 94891130836

Option 2 ID : 94891130835

Option 3 ID : 94891130833

Option 4 ID : 94891130834

Status : Not Answered

Chosen Option : --

Q.77 The value of $\frac{(56+34)^2 - (56-34)^2}{4 \times 56 \times 34}$ is:

- Ans
- 1. 2
 - 2. 1
 - 3. 3
 - 4. 0

Question ID : 9489118452

Option 1 ID : 94891133805

Option 2 ID : 94891133806

Option 3 ID : 94891133808

Option 4 ID : 94891133807

Status : Answered

Chosen Option : 2

Q.78 Find the simple interest for an amount of ₹2,500 at $8\frac{1}{4}\%$ per annum for the period from 1st March 2018 to 12th May 2018.

- Ans
- 1. ₹32.25
 - 2. ₹38.25
 - 3. ₹23.25
 - 4. ₹41.25

Question ID : 9489118454

Option 1 ID : 94891133814

Option 2 ID : 94891133816

Option 3 ID : 94891133815

Option 4 ID : 94891133813

Status : Answered


Chosen Option : 4



Download RRB Exams PDF E-BOOKS

[CLICK HERE](#)

RRB NTPC EXAM Study Kit



100%

- ▶ 100% Exam Syllabus Covered
- ▶ 8 Books, 950+ Pages
- ▶ Mathematics, General Intelligence & Reasoning,
- ▶ General Science, General Awareness
- ▶ Previous year Solved Papers
- ▶ Mock Tests with Answers
- ▶ 1 Year Current Affairs



RRB NTPC PDF NOTES

100% Syllabus | 950+ Pages



50%
OFF

CLICK HERE



CLICK BELOW LINK TO DOWNLOAD PDF NOTES

<https://rrbexamportal.com/study-kit/Railway-NTPC-Exam>

Download RRB NTPC Exam Study Notes

Q.79 The headquarters of the UN is located at:

- Ans
- 1. Washington DC
 - 2. London
 - 3. Geneva
 - 4. New York City

Question ID : 9489117733
Option 1 ID : 94891130932
Option 2 ID : 94891130931
Option 3 ID : 94891130930
Option 4 ID : 94891130929
Status : Answered
Chosen Option : 4

Q.80 The sum of two numbers is 434 and their H.C.F is 31. How many pairs of numbers can satisfy the above conditions?

- Ans
- 1. 3
 - 2. 4
 - 3. 6
 - 4. 5

Question ID : 9489118453
Option 1 ID : 94891133810
Option 2 ID : 94891133809
Option 3 ID : 94891133812
Option 4 ID : 94891133811
Status : Answered
Chosen Option : 1

Q.81 Three prime numbers are arranged in descending order. If the product of the first two is 323 and that of the last two is 221, then what is the value of the biggest prime number?

- Ans
- 1. 13
 - 2. 19
 - 3. 23
 - 4. 17

Question ID : 9489118448
Option 1 ID : 94891133790
Option 2 ID : 94891133789
Option 3 ID : 94891133791
Option 4 ID : 94891133792
Status : Answered
Chosen Option : 2



Download RRB Exams PDF E-BOOKS

[CLICK HERE](#)

Download RRB NTPC Exam Study Notes

Q.82 If the cost price of an article is ₹5,340, then what should be the selling price of the article so that there is a profit of 5%?

- Ans
- 1. ₹5,840
 - 2. ₹5,607
 - 3. ₹6,300
 - 4. ₹6,795

Question ID : 9489118455

Option 1 ID : 94891133820

Option 2 ID : 94891133818

Option 3 ID : 94891133819

Option 4 ID : 94891133817

Status : Answered

Chosen Option : 2

Q.83 Three numbers are in the ratio 1 : 2 : 3. If their HCF is 8, then what is their LCM?

- Ans
- 1. 48
 - 2. 24
 - 3. 120
 - 4. 96

Question ID : 9489118450

Option 1 ID : 94891133798

Option 2 ID : 94891133797

Option 3 ID : 94891133799

Option 4 ID : 94891133800

Status : Answered

Chosen Option : 1

Q.84 Select the option that is related to the third term in the same way as the second term is related to the first term.

Finger : Ring :: Wrist : ?

- Ans
- 1. Brooch
 - 2. Anklet
 - 3. Solitaire
 - 4. Bangle

Question ID : 9489117874

Option 1 ID : 94891131495

Option 2 ID : 94891131494

Option 3 ID : 94891131493

Option 4 ID : 94891131496

Status : Answered

Chosen Option : 4



Download RRB Exams PDF E-BOOKS

[CLICK HERE](#)

Download RRB NTPC Exam Study Notes

Q.85 She wrote in English as Kamala Das but when she wrote in her mother tongue what was the name she used?

- Ans
- 1. Ambai
 - 2. Madhavikutty
 - 3. Vasanthi
 - 4. Arundhati Roy

Question ID : 9489117731

Option 1 ID : 94891130923

Option 2 ID : 94891130921

Option 3 ID : 94891130924

Option 4 ID : 94891130922

Status : Not Answered

Chosen Option : --

Q.86 Select the combination of operators that when sequentially placed in the blanks of the given equation will complete the equation correctly.

$$8 _ _ 7 _ _ 6 _ _ 3 = 19$$

- Ans
- 1. -, -, X
 - 2. +, +, X
 - 3. -, +, X
 - 4. -, ÷, X

Question ID : 9489117889

Option 1 ID : 94891131554

Option 2 ID : 94891131555

Option 3 ID : 94891131553

Option 4 ID : 94891131556

Status : Answered

Chosen Option : 3

Q.87 With the given interchanges, which of the following equations is correct?

Interchange + and × and numbers: 4 and 6.

- Ans
- 1. $4 + 6 \div 3 - 3 \times 2 = 13$
 - 2. $4 + 6 \div 3 - 3 \times 2 = 12$
 - 3. $4 + 6 \div 3 - 3 \times 2 = 11$
 - 4. $4 + 6 \div 3 - 3 \times 2 = 7$

Question ID : 9489117890

Option 1 ID : 94891131557

Option 2 ID : 94891131560

Option 3 ID : 94891131558

Option 4 ID : 94891131559

Status : Answered

Chosen Option : 4



Download RRB Exams PDF E-BOOKS

CLICK HERE

Download RRB NTPC Exam Study Notes

Q.88 Study the given information in the table and answer the question that follows:

The following table shows the details of the number of people who booked a ticket and travelled from Punjab, during the years 2015 to 2018.

Year	Punjab	
	Tickets booked	Actually Travelled
2015	2400	2200
2016	2300	2000
2017	2600	2500
2018	2800	2450
Total	10100	9150

In which year was the number of people who travelled as a percentage of those who booked tickets, the minimum?

- Ans**
- 1. 2016
 - 2. 2018
 - 3. 2017
 - 4. 2015

Question ID : 9489117891

Option 1 ID : 94891131562

Option 2 ID : 94891131564

Option 3 ID : 94891131563

Option 4 ID : 94891131561

Status : **Answered**

Chosen Option : 3

Q.89 The table below gives the details of maximum marks and marks obtained by different students in the subjects Mathematics, English, Physics, Chemistry, Computer Science, and Photography.

Subjects	Students	Max. Marks	Pundir Anil Devesh Rami Naman				
			Marks Obtained				
Mathematics	100	67	84	85	90	48	
Physics	100	56	88	72	88	67	
Chemistry	100	87	79	62	92	69	
English	100	72	68	80	82	56	
Computer Sc.	50	33	39	34	41	32	
Photography	50	48	45	47	45	40	
Total	500	355	405	360	440	310	

What is approximate average percentage of marks of all the students?

- Ans**
- 1. 75%
 - 2. 85%
 - 3. 80%
 - 4. 70%

Question ID : 9489117892

Option 1 ID : 94891131567

Option 2 ID : 94891131568

Option 3 ID : 94891131565

Option 4 ID : 94891131566

Status : **Answered**

Chosen Option : 1



Download RRB Exams PDF E-BOOKS

[CLICK HERE](#)

Download RRB NTPC Exam Study Notes

Q.90 Four words have been given, out of which three are alike in some manner and one is different. Select the odd one.

- Ans 1. Bangle
 2. Tiara
 3. Head-band
 4. Hairpin

Question ID : 9489117898

Option 1 ID : 94891131591

Option 2 ID : 94891131590

Option 3 ID : 94891131589

Option 4 ID : 94891131592

Status : Answered

Chosen Option : 1

Q.91 Select the option that is related to the third term in the same way as the second term is related to the first term.

Fruits : Food :: Tea : ?

- Ans 1. Refresher
 2. Tasty
 3. Leaf
 4. Beverage

Question ID : 9489117875

Option 1 ID : 94891131497

Option 2 ID : 94891131499

Option 3 ID : 94891131500

Option 4 ID : 94891131498

Status : Answered

Chosen Option : 4

Q.92 Hari is the father-in-law of Ram and husband of Kamalam. Kamalam is the mother of her only daughter Sarita. If Sarita is the daughter of Sunam, then what is the relationship between Sarita and Ram?

- Ans 1. Daughter and father
 2. Sister and brother
 3. Niece and Maternal uncle
 4. Nephew and Maternal uncle

Question ID : 9489117879

Option 1 ID : 94891131516

Option 2 ID : 94891131514

Option 3 ID : 94891131513

Option 4 ID : 94891131515

Status : Answered

Chosen Option : 1



Download RRB Exams PDF E-BOOKS

[CLICK HERE](#)

Download RRB NTPC Exam Study Notes

Q.93 Consider the given statement and decide which of the given assumptions is/are implicit in the statement.

Statement:

"Please do not use medicines during pregnancy" – Medical advice by a doctor.

Assumptions:

1. Use of medicine will cause problems during pregnancy.
2. Medicines taken during pregnancy are very costly.

- Ans**
- 1. Neither assumption 1 nor 2 is implicit.
 - 2. Only assumption 1 is implicit.
 - 3. Either assumption 1 or 2 is implicit.
 - 4. Only assumption 2 is implicit.

Question ID : 9489117884

Option 1 ID : 94891131536

Option 2 ID : 94891131533

Option 3 ID : 94891131535

Option 4 ID : 94891131534

Status : **Not Answered**

Chosen Option : --

Q.94 Five children A, B, C, D and E ate mangoes. A ate 8 mangoes less than B. C and E together ate 27 mangoes. D ate 8 mangoes more than C. D ate 5 mangoes more than C. D and A together ate 40 mangoes. Considering the above information, which of the following statements is correct?

- Ans**
- 1. E ate 18 mangoes and C ate 19 mangoes.
 - 2. D ate 19 mangoes and C ate 27 mangoes.
 - 3. A ate 24 mangoes and B ate 16 mangoes.
 - 4. C ate 11 mangoes and B ate 16 mangoes.

Question ID : 9489117900

Option 1 ID : 94891131597

Option 2 ID : 94891131599

Option 3 ID : 94891131598

Option 4 ID : 94891131600

Status : **Answered**

Chosen Option : 1



Download RRB Exams PDF E-BOOKS

[CLICK HERE](#)

Download RRB NTPC Exam Study Notes

Q.95 Read the given statements and conclusions carefully. Assuming that the information given in the statements is true, even if it appears to be at variance with commonly known facts, decide which of the given conclusions logically follows(s) from the statements.

Statements:

- 1. No bag is a poem.
- 2. Some books are bags.

Conclusions:

- 1. Some books are not poems.
- 2. Some poems are bags.

- Ans**
- 1. Neither conclusion 1 nor 2 follows.
 - 2. Both conclusions 1 and 2 follow.
 - 3. Only conclusion 1 follows.
 - 4. Only conclusion 2 follows.

Question ID : 9489117880
Option 1 ID : 94891131519
Option 2 ID : 94891131520
Option 3 ID : 94891131517
Option 4 ID : 94891131518
Status : Answered
Chosen Option : 3

Q.96 In a certain code language, MAY is written as 123, RUTE is written as 4567 and PUND is written as 8590, How will LAND be written as in that language?

- Ans**
- 1. 4632
 - 2. 6431
 - 3. 6209
 - 4. 5290

Question ID : 9489117876
Option 1 ID : 94891131501
Option 2 ID : 94891131502
Option 3 ID : 94891131504
Option 4 ID : 94891131503
Status : Answered
Chosen Option : 4

 **Download RRB Exams PDF E-BOOKS** [CLICK HERE](#)

Download RRB NTPC Exam Study Notes

Q.97 The table below gives the details of computer printers sold by XYZ company over a period of 5 years.

Year	Types of Printers					Total
	L-1100	L-1101	L-1102	L-1103	L-1104	
2014	523	345	678	360	740	2626
2015	673	451	822	235	905	3086
2016	567	389	907	423	867	3153
2017	590	562	1022	548	913	3635
2018	623	677	1245	674	988	4207
Total	2976	2424	4674	2220	4413	16707

What is the approximate share of the sales of printer model L-1102 as a percentage of total sales of printers in the year 2015?

- Ans
- 1. 29%
 - 2. 24%
 - 3. 27%
 - 4. 23%

Question ID : 9489117893

Option 1 ID : 94891131572

Option 2 ID : 94891131569

Option 3 ID : 94891131570

Option 4 ID : 94891131571

Status : Answered

Chosen Option : 2

Q.98 Select the number that can replace the question mark (?) in the following series.

47, 194, ?, 782, 1223, 1762

- Ans
- 1. 501
 - 2. 480
 - 3. 439
 - 4. 489

Question ID : 9489117888

Option 1 ID : 94891131549

Option 2 ID : 94891131552

Option 3 ID : 94891131551

Option 4 ID : 94891131550

Status : Answered


Chosen Option : 3



Download RRB Exams PDF E-BOOKS

CLICK HERE

RRB NTPC EXAM Study Kit



100%

- ▶ 100% Exam Syllabus Covered
- ▶ 8 Books, 950+ Pages
- ▶ Mathematics, General Intelligence & Reasoning,
- ▶ General Science, General Awareness
- ▶ Previous year Solved Papers
- ▶ Mock Tests with Answers
- ▶ 1 Year Current Affairs



RRB NTPC PDF NOTES

100% Syllabus | 950+ Pages

50%
OFF

CLICK HERE



CLICK BELOW LINK TO DOWNLOAD PDF NOTES

<https://rrbexamportal.com/study-kit/Railway-NTPC-Exam>

Download RRB NTPC Exam Study Notes

Q.99 Read the given statements and conclusions carefully. Assuming that the information given in the statements is true, even if it appears to be at variance with commonly known facts, decide which of the given conclusions logically follows from the statements.

Statements:

1. Some guns are metals.
2. Some metals are leathers.
3. Some leathers are papers.

Conclusions:

1. Some guns are not leathers.
2. Some metals are not papers.
3. Some papers are leathers.
4. Some papers are not metals.

- Ans**
- 1. Only conclusion 2 follows.
 - 2. Only conclusion 4 follows.
 - 3. Only conclusion 1 follows.
 - 4. Only conclusion 3 follows.

Question ID : 9489117881
Option 1 ID : 94891131522
Option 2 ID : 94891131524
Option 3 ID : 94891131521
Option 4 ID : 94891131523

Status : Answered

Chosen Option : 4

Q.100 Four words have been given, out of which three are alike in some manner and one is different. Select the odd one.

- Ans**
- 1. Carpenter
 - 2. Window
 - 3. Wall
 - 4. Door

Question ID : 9489117896
Option 1 ID : 94891131584
Option 2 ID : 94891131582
Option 3 ID : 94891131581
Option 4 ID : 94891131583

Status : Answered

Chosen Option : 1

QP HTML Generated date 2021/08/15-04:18:51



Download RRB Exams PDF E-BOOKS

[CLICK HERE](#)