



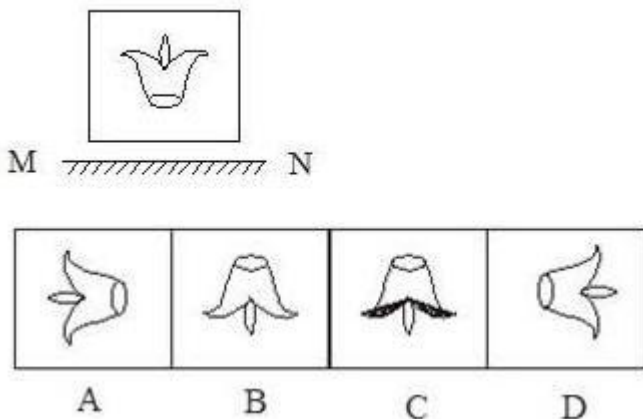
(Papers) RRB Group D : Exam Paper & Answer Key

Date: 11 Dec 2018 Shift-1 (Reasoning)

Q1. Mallika is cleaning the bi-framed group-photo of her friend's portrait that atoms her living room. She had laid it flat on the floor. The top side of the frame points to the west. She starts cleaning from the south-east comer and then diagonally moves her hand to the opposite side. Which direction is her hand now?

- a. West-east
- b. South-east
- c. East-north
- d. North-west

Q2. Choose the mirror image for the following figure:



Q3. A man from point 'O' and travels km towards east to reach point 'A'; then, he turns right and travels 10 km to reach point 'B'; then, he turns right and travel 9 km to reach point 'C'; then, he turns right and travel 5 km to reach point 'D; then , he turns left and travel 12 km to reach point E'; and finally he turns right and travel 6 km to reach point 'F'.

- a. East
- b. South
- c. West
- d. North

Q4. What is the time between 2 o'clock and 3 o'clock at which the minute hand and the hour hand form an angle of 60° with each other?

- a. 228/11 minute past 2
- b. 240/11 minute past 2
- c. 262/11 minute past 2
- d. 250/11 minute past 2

Q5. Shoes is related to Slippers in the same way as Coat is related to:

- a. Pen
- b. Short

- c. Socks
- d. Tie

Q6. Read the given question and decide which of the following statements is/are sufficient to answer the question?

What is the age of Sriram?

Statement:

1. Sriram is 32 years elder to Shyam.
 2. Shyam is 2 years old now.
-
- a. Both 1 and 2 are sufficient
 - b. Either I or 2 is sufficient
 - c. Only 1 is sufficient
 - d. Only 2 is sufficient

Q7. A statement is given followed by two conclusions numbered I and II. Consider the given statement to be true even if it seems to be at variance with the commonly known facts and then decide which of the given conclusions logically follows from the given statement disregarding commonly known facts.

Statement: In view of further sudden increase in the international oil prices, the Government will review the present policy on fuel price

Conclusions:

- I. The Government will increase the price of the fuel after the sudden increase in the international prices.
 - II. The Government will not increase the price of the fuel even after the sudden increase in the international oil prices.
-
- a. Either I or II follows
 - b. Only conclusions II follows
 - c. Only conclusions I follows
 - d. Neither I nor II follows

Q8. Select the appropriate combination of symbols that when sequentially placed in place of the equation will

RRB GROUP-D EXAM Study Kit



- 100% Exam Syllabus Covered
- 7 Books, 500+ Pages
- Mock Practice Tests
- 1 Year Current Affairs

**SPECIAL
OFFER**

~~₹ 3,000/-~~
₹ 1,499/-
Only

For RRB Exam Courses & Study Materials Call Us at: +91-8800734161

What you will get:

- 100% Syllabus Covered in Printed format.
- Total 7 Books (700+ Pages)
- 4 Books for : Mathematics, General Intelligence & Reasoning, General Science, General Awareness.
- 1 Book for - 5 Mock Tests Practice Book
- 1 Book for One Year Special Current Affairs
- 1 Book for - RRB Exams Introduction
- Guidance & Support from Our Experts

Price of the Kit:

~~Rs. 3,000~~

Rs. 1,499/-
(Limited time Offer)



Net Banking

Order Online (100% Safe)

अन्य भुगतान विकल्प (Offline Payment Options)

**50%
OFF**

CLICK HERE

Disclaimer: rrbexamportal.com is not at associated with Railway Recruitment Board,

For RRB official website visit - www.rrcb.gov.in

correctly complete the equation.

$$((10?10)?25)?10 = 2510$$

- a. x, x, +
- b. -, x, /
- c. +, /, /
- d. -, /, /

Q9. In a certain coding language, if wind = tfka and back = yxzh, then joke = ?

- a. glhb
- b. hehu
- c. gehu
- d. heho

Q10. Starting from point O facing West a man walks 4 km reach point A, turns right walks 4 km reach point B, turn right walks 4km reach point C, turns right walks 3 km reach point D, turns left walks 4 km reach point E, turns right walks 5 km reach point F. The shortest distance between the point B and point E (in Km) is:

- a. $2\sqrt{73}$
- b. $\sqrt{27}$
- c. $\sqrt{73}$
- d. $\sqrt{37}$

Q11. 4 W X Z 8 Q P O J 6 G T M V E U H 5 3 B

If the letters in the position 7, 8, 15 and 17 are picked from the left to form a meaningful word, then the third letter of the word will be:

- a. E
- b. J
- c. O
- d. P

Q12. Read the gives question and decide which of the following statement is/are sufficient /necessary to answer the question

Questions:

What is the distance between A and known C If the three towns A, B and C lie on a straight line?

Statements:

- I. The distance between town B and town C is 20Km
- II. The distance between town A and town B is 35 Km

- a. Both I and II are necessary
- b. II alone is sufficient while I alone is not sufficient
- c. Neither I nor II is sufficient
- d. I alone is sufficient while II alone is not sufficient.

Q13. Consider the following statements to be true even if they seem to be at variance from commonly known facts and decide which of the conclusion logically follows, from the statements.

Statement:

No pigeon is a dove.
All doves are oriental rollers

Conclusions:

No pigeons are oriental rollers
Some oriental rollers are dove

- a. Only Conclusions2 follows
- b. Both conclusions 1 and 2 follow
- c. Only conclusions 1 follows
- d. Either conclusions 1 or 2 follows

Q14. Three out of the four options given below are related in a particular way. Choose options that is different or odd from the others.

- a. Patna
- b. Kohima

रेलवे भर्ती बोर्ड ग्रुप-डी परीक्षा Study Kit



- 100% Exam Syllabus Covered
- 7 Books, 500+ Pages
- Mock Practice Tests
- 1 Year Current Affairs

SPECIAL OFFER

~~₹ 3,000/-~~
₹ 1,499/-
Only

For RRB Exam Courses & Study Materials Call Us at: +91-8800734161

रेलवे रिक्रूटमेंट बोर्ड (RRB) ने Group 'D' के पदों के लिए काफी बड़ी संख्या में रिक्तियां निकली हैं। जैसा की आप लोग जानते है की RRBPortal.com विगत 10 वर्षों से विद्यार्थियों के लिए अच्छे मार्गदर्शन एवं उपयोगी अध्ययन सामग्री उपलब्ध करा रहा है। इस बार भी RRBPortal.com ने अपने विद्यार्थियों के लिए नए सिलेबस के हिसाब से अध्ययन सामग्री उपलब्ध कराने का बीड़ा उठाया है।

अध्ययन सामग्री को पढ़ने के बाद RRBPortal.com के विद्यार्थियों के लिए परीक्षा उत्तीर्ण करना बहुत ही सरल हो जायेगा। अतः विद्यार्थी इस अवसर का लाभ जल्द- से- जल्द उठाये।

आप क्या प्राप्त करेंगे?

- 100% Syllabus Covered in Printed format.
- Total 7 Books (700+ Pages)
- 4 Books for : Mathematics, General Intelligence & Reasoning, General Science, General Awareness.
- 1 Book for - 5 Mock Tests Practice Book
- 1 Book for One Year Special Current Affairs
- 1 Book for - RRB Exams Introduction
- Guidance & Support from Our Experts

Price of the Kit:

~~Rs. 3,000~~

Rs. 1,499/-

(Limited time Offer)



Net Banking

Order Online (100% Safe)

अन्य भुगतान विकल्प (Offline Payment Options)

50% OFF

CLICK HERE

Disclaimer: RRB EXAM PORTAL वेबसाइट किसी भी प्रकार से रेलवे भर्ती बोर्ड (RRB) के साथ संबद्ध नहीं है, रेलवे भर्ती बोर्ड एवं भारतीय रेलवे की आधिकारिक वेबसाइट पर जाने के लिए www.rrcb.gov.in पर विजिट करें।

- c. Orissa
- d. Gangtok

Q15. Consider the following question and decide which of the statement is sufficient to answer the question]

Question: What is the measure of angle A in a right angle triangle ABC right angled at angle B?

Statement: Angle C is 20°

- a. Statement 1 alone is sufficient while statement 2 alone is not sufficient
- b. Each statement alone is sufficient
- c. Statement 2 alone is sufficient while sufficient 1 alone is not sufficient
- d. Both Statements 1 and 2 together are sufficient

Q16. Read the given statement(s) and conclusions carefully. Assuming that the information in the statement is true, even if they appear to be in variance with commonly known facts, select which of the conclusions logically follow(s) from the statement (s) beyond reasonable doubt.

Statement : “ Sunday morning my friend cooked delicious chicken biryani, “ mentioned Sudha about her friend.

Conclusions:

- I. Sudha’s friend is a good chef
- II. Chicken biryani ids the only which is delicious

- a. Only I follows
- b. Only II follows
- c. Either I or II follows
- d. Neither I nor II follows

Q17. Select the option that is related to the third term in the same way as the second term is related to the first term.

Fish: Shoal::Goods:_____?

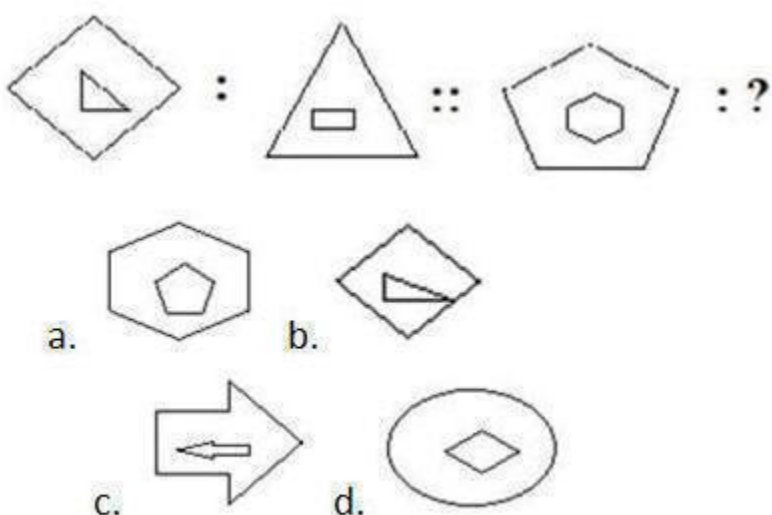
- a. Gang
- b. Mob
- c. Items
- d. Stock

Q18. Find the next term in the series.

R9H, P11J, N13L, _____

- a. L14N
- b. L15N
- c. L12N
- d. N15L

Q19. Identity the option that relates to the third figure in the same way that the second figure relates to the first figure.



Q20. A statement is followed by two arguments. Decide which of the arguments is/are strong with respect to the statement

Statement:

Drinking tea and coffee are addictive

Arguments:

- I. Yes, the caffeine in coffee or tea is a central, nervous system stimulant and it is the world's most widely consumed addictive stimulant.
- II.No, as it is widely accepted caffeine is good for health

- a. Only argument II is strong
- b. Neither I nor II are strong

- c. Both arguments I and II are strong
- d. Only argument I is strong

Q21. Every morning, Albert starts riding towards the rising sun. He rides 2 km, turns to his left and continues for 4 km. He then turns to his right and continues for 3 Km . Finally, he turns to his left and reaches his office after riding for another 8 km How far is his office from his home aerially?

- a. 12Km
- b. 13 Km
- c. 18 Km
- d. 19 Km

Q22. Take the given statement to be true and decide which of the given conclusions logically follow(s) from the statements.

Statements:

All cars are rockers. All cycles are rockers

Conclusions:

- 1. Some cars are cycles
- 2. some rockers are cycles
- 3. Some cycles are cars

- a. None of the conclusions follows
- b. Only conclusions 1 follows
- c. Both conclusions 1 and 3 follow
- d. Only conclusions 2 follows

**Q23. What is the next term is this series:
12A6Z, 24C4X, 36E2V, _____**

- a. 48F0T
- b. 48F9T
- c. 48F9S
- d. 48G0T



RRB Group D

Railway Recruitment Board

RRB : Group-D Exam

- [NEW \(Notification\) RRB Group D Post Recruitment-2018](#)
- [NEW Railways Group-D Papers](#)
- [NEW Apply Online](#)
- [Eligibility](#)
- [Vacancy List \(Group-D\)](#)
- [Selection Method For Group D](#)
- [Syllabus for Group D](#)
- [RRB Group-D Exam Study Kit](#)
- [रेलवे भर्ती बोर्ड Group-D परीक्षा अध्ययन सामग्री](#)

[CLICK HERE](#)

Disclaimer: rrbexamportal.com is not associated with Railway Recruitment Board,
For RRB official website visit - www.rrcb.gov.in

Disclaimer: RRB EXAM PORTAL वेबसाइट किसी भी प्रकार से रेलवे भर्ती बोर्ड (RRB) के साथ संबद्ध नहीं है,
रेलवे भर्ती बोर्ड एवं भारतीय रेलवे की आधिकारिक वेबसाइट पर जाने के लिए www.rrcb.gov.in पर विजिट करें।

Q24. Read the given question and decide which of the following statement is/are sufficient to answer the question.

Who is standing in the middle among Y, O and P?

Statements:

1. Y is standing to the right of O.
 2. P is standing to the right of Y.
-
- a. Statements 1 and 2 together are insufficient.
 - b. Statement 1 alone is sufficient.
 - c. Statements 1 and 2 together are sufficient
 - d. Statement 2 alone is sufficient

Q25. If '+' is 'x' , '-' is '+', 'x' is '+' and '-' is '-' then $5 - 9 + 7 \times 3 \div 6 = ?$

- a. 20
- b. 0
- c. 26
- d. 10

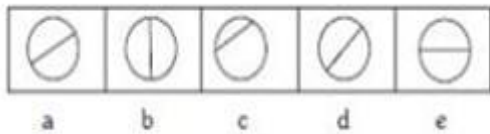
Q26. From the following Allotropes of Carbon, pick the odd one out.

- a. Carbon Black
- b. Coke
- c. Charcoal
- d. Graphite

**Q27. Find the next term in the following series:
ZW, VS, RO,_____.**

- a. NP
- b. NS
- c. NL
- d. NK

Q28. Choose the figure that sign different from the rest.



- a. b
- b. e
- c. c
- d. d

**Q29. Select the term that relates to the third term in the same way that the second term relates to the first term.
House : House : Flaw : _____?**

- a. Mob
- b. Defect
- c. Assume
- d. Peace

Q30. Consider the following statement and decide which of the conclusions logically follows from the statements.

Statements:

Cactus has thick stem and it requires less water.

Conclusions:

1. All plants with thick stem requires less water.
2. Cactus grow in places where there is less water.
3. Neither 1 nor 2 follows
4. Both 1 and 2 follows

Answer:

1. (d), 2. (b), 3. (c), 4. (b), 5. (b), 6. (a), 7. (a), 8. (a), 9. (a), 10. (c), 11. (d), 12. (a), 13. (a), 14. (c), 15. (b), 16. (a), 17. (d), 18. (b), 19. (a), 20. (d), 21. (b), 22. (d), 23. (d), 24. (c), 25. (a), 26. (d), 27. (d), 28. (c), 29. (b), 30. (b)



Railway Recruitment Board (RRB) NTPC Exams Study Kit	English	CLICK HERE
रेलवे भर्ती बोर्ड एनटीपीसी (NTPC) परीक्षा अध्ययन सामग्री	हिन्दी	CLICK HERE
RRB Loco Pilot (ALP) Exam Study Kit	English	CLICK HERE
रेलवे भर्ती बोर्ड लोको पायलट (ALP) परीक्षा अध्ययन सामग्री	हिन्दी	CLICK HERE
RRB Group-D Exam Study Kit	English	CLICK HERE
रेलवे भर्ती बोर्ड Group-D परीक्षा अध्ययन सामग्री	हिन्दी	CLICK HERE
Study Kit for RRB JE (Junior Engineer) Exam	English	CLICK HERE
आरआरबी जूनियर इंजीनियर परीक्षा (चरण -1) अध्ययन किट	हिन्दी	CLICK HERE
IAS EXAMS STUDY MATERIALS		
Study Kit for IAS (Pre) GENERAL STUDIES Paper-1 (GS)	English	CLICK HERE
Study Kit for IAS (Pre) CSAT Paper-2(Aptitude)	English	CLICK HERE
सामान्य अध्ययन (GS) प्रारंभिक परीक्षा (Pre) पेपर-1	हिन्दी	CLICK HERE
आई. ए. एस. (सी-सैट) प्रारंभिक परीक्षा पेपर -2	हिन्दी	CLICK HERE
Gist of NCERT Study Kit For UPSC Exams	English	CLICK HERE