



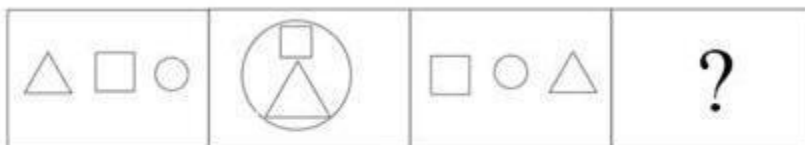
(Papers) RRB Group D : Exam Paper & Answer Key
Date: 03 Oct 2018 Shift-2 (Reasoning)

Q1. How is Madhuri's brother's only sister's father's father related to her?

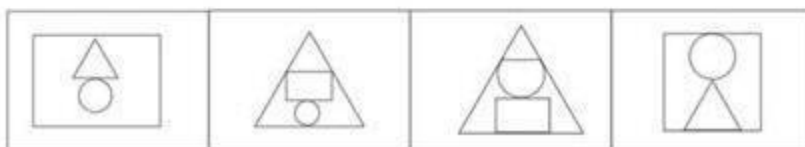
- a. Brother
- b. Uncle
- c. Father
- d. Paternal Grandfather

Q2. Pick the figure that will complete the given series.

Problem figures:



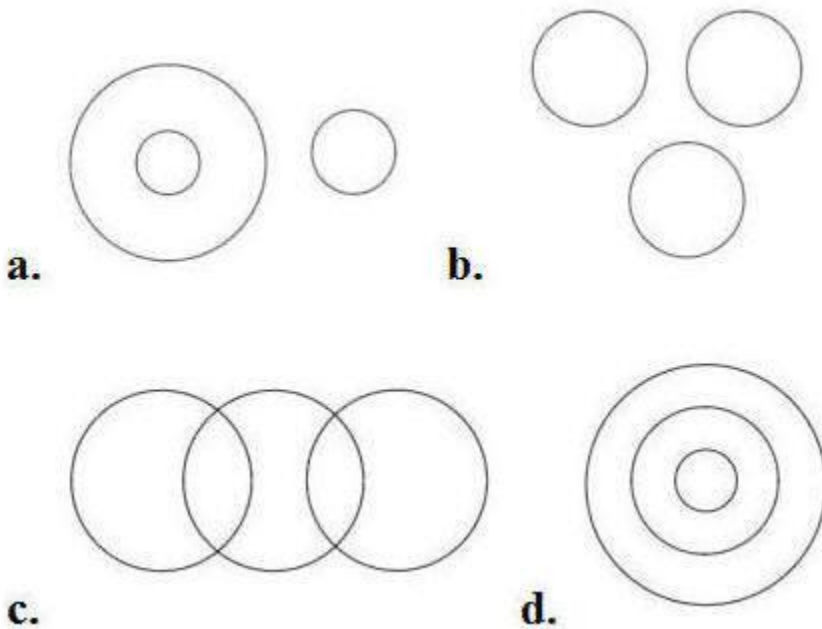
Answer figures:



- a. A
- b. C
- c. B
- d. D

Q3. Choose the best suitable Venn diagram for the following words:

"Bus, Engine, Piston"



Q4. You are given a question and three statements. Identify which of the statements is/are necessary/sufficient to answer the question:

Question:

- In which year was Aarti born?

Statements:

- I. Aarti is six years older than Pranavi.
- II. Pranavi's sister was born in 1982.
- III. Aarti's sister is two years younger than Pranavi's sister, who is eight years younger than Pranavi.

- a. Only II and III are sufficient
- b. Only I and III are sufficient

- c. All I, II and III are necessary
- d. Only I is sufficient

**Q5. Select the option that is related to the third word on the same basis as the second word is related to the first word.
instrument : Play :: Bell :**

- a. Ring
- b. Sound
- c. Shape
- d. Metal

Q6. Read the given statements and conclusions carefully and select which of the conclusions logically follow(s) from the statements.

Statements:

- 1. All buses are cars.
- 2. All ships are cars

Conclusions:

- I. All cars are ships
- II. All buses are cars

- a. Both I and II
- b. Neither I or II
- c. Only I
- d. Only II

Q7. In a code language. TURN is written as STQM What is the code for LIMP?

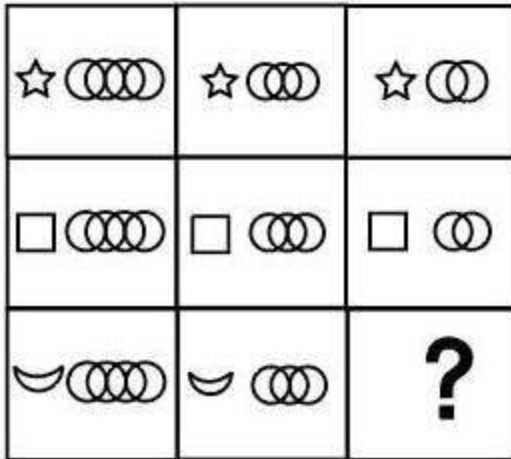
- a. KHLP
- b. KHNQ
- c. KHLO
- d. JHLO

Q8. In a code language, BEE is written as YVV. What is the code for ANT?

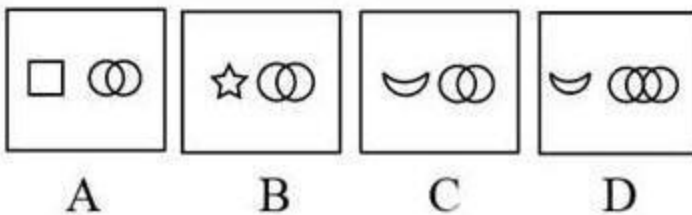
- a. ZMG
- b. ZMH

- c. ZUG
- d. ZPG

Q9.



Choose the correct picture that fit the blank place



- a. D
- b. B
- c. A
- d. C

Q10. Read the given statement(s) and conclusions carefully and select which of the conclusions logically follow(s) from the statement(s):

Statement:

- "Don't park the vehicle here. Don't you see the no parking sign here?" says Ramu to Shamu.

Conclusions:

- I. Ramu understands the meaning of no parking sign.
- II. Shamu does not follow the road rules.

- a. Neither I nor II follows
- b. Both I and II follow
- c. Only conclusion II follows
- d. Only conclusion I follows

Q11. The sum of ages of 6 Persons A, B, C, D, E and F in a company born at the intervals of 5 years each is 105 years. What is the age of the oldest person?

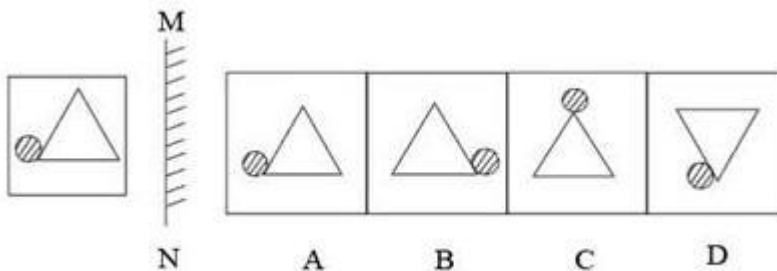
- a. 25 years
- b. 15 years
- c. 30 years
- d. 20 years

Q12. Find the Odd one out:

$\frac{A}{1}$	$\frac{B}{4}$	$\frac{E}{6}$	$\frac{F}{6}$
A	B	C	D

- a. A
- b. C
- c. D
- d. B

Q13. Find the minor image of the given figure if the mirror is placed at line MN.



RRB GROUP-D EXAM Study Kit



- 100% Exam Syllabus Covered
- 7 Books, 500+ Pages
- Mock Practice Tests
- 1 Year Current Affairs

**SPECIAL
OFFER**

~~₹ 3,000/-~~
₹ 1,499/-
Only

For RRB Exam Courses & Study Materials Call Us at: +91-8800734161

What you will get:

- 100% Syllabus Covered in Printed format.
- Total 7 Books (700+ Pages)
- 4 Books for : Mathematics, General Intelligence & Reasoning, General Science, General Awareness.
- 1 Book for - 5 Mock Tests Practice Book
- 1 Book for One Year Special Current Affairs
- 1 Book for - RRB Exams Introduction
- Guidance & Support from Our Experts

Price of the Kit:

~~Rs. 3,000~~

Rs. 1,499/-
(Limited time Offer)



Net Banking

Order Online (100% Safe)

अन्य भुगतान विकल्प (Offline Payment Options)

**50%
OFF**

CLICK HERE

Disclaimer: rrbexamportal.com is not associated with Railway Recruitment Board,

For RRB official website visit - www.rrcb.gov.in

- a. A
- b. B
- c. D
- d. C

**Q14. Find the next number in the given series.
8, 14, 23, ?, 50**

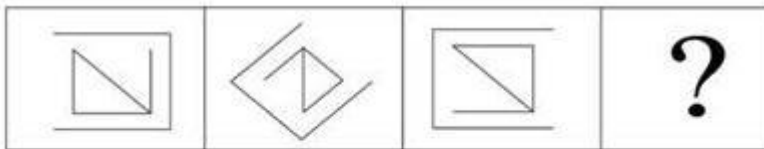
- a. 35
- b. 34
- c. 38
- d. 40

Q15. Pointing to a photograph of a person Ramesh said, "This person is the son oldie only child of my mother." Then how is Ramesh. related to that person?

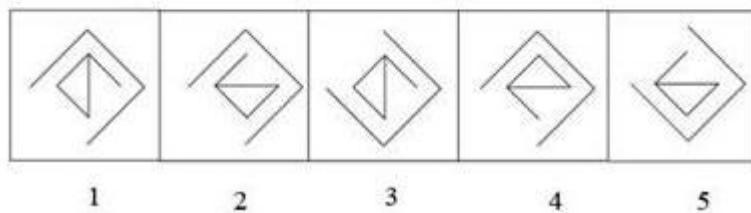
- a. Uncle
- b. Grand Father
- c. Father
- d. Brother

Q16. Son and father both identified that Figure a and b are related in a particular way or manner. Establish the same 7 relationship between c and d choosing from five alternatives.

Problem figures:




Answer figures:

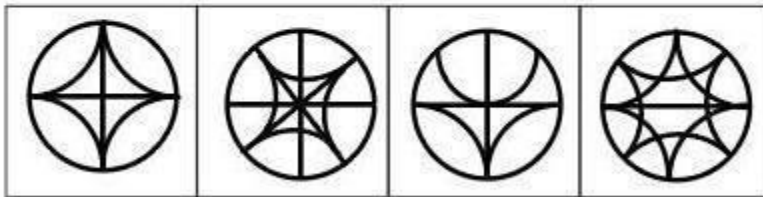


- a. 1
- b. 2
- c. 4
- d. 3

Q17.



The above figure is embedded in one of these four figures. Identify that figure.



A B C D

- a. A
- b. D
- c. C
- d. B

Q18. Which two alpha-numeric sets will follow in the given series?

N-14, P-16. R-18, T-20, ?,?A

- a. X-24, P-16
- b. L-12, O-15
- c. V-22, Z-26
- d. V-22, X-24

Q19. A statement is followed by two arguments. Decide which of the arguments is/are strong with respect to the statement.

Statement:

- Should taxes on perfume be further increased?

Argument:

1. Yes. perfume is a luxury item used by rich people only.
 2. No, perfume is used by poor people also.
-
- a. Neither argument 1 and 2 is strong
 - b. Either argument 1 or 2 is strong
 - c. Only argument 1 is strong
 - d. Only argument 2 is strong

Q20. Select the alternative that has a different relationship as the given pair- Inside : Outside

- a. Day : Night
- b. Sun : Star
- c. Light : Dark
- d. White : Black

Q21. Consider the given statement(s) and decide which of the given assumption(s) is/are implicit in the statement.

Statement:

- Crying children seek more attention from parents.

Assumptions:

- I. They are unable to communicate properly.
 - II. The parents are engrossed in their work and leave the children to play by themselves.
-
- a. Neither I nor II is implicit.
 - b. Only I is implicit.
 - c. Both I and II are implicit.
 - d. Only II is implicit.

Q22. Select the term that relates to the third term in the same way that the second term relates to the first term.

Ammeter : Current :: Ohmmeter : ?

- a. Pressure
- b. Resistance
- c. Speed
- d. Voltage

Q23. Which one does not belong to the group ?

- a. Panda Global
- b. Rabbit
- c. Avast
- d. Kaspersky

**Q24. Find the next letter in the given series.
MD, NE, OF, PG, ?A**

- a. HV
- b. QK
- c. CE
- d. QH

Q25. If Raja is facing East and then turns 270° clockwise and then 90° anti-clockwise, in which direction is he facing now?

- a. East
- b. South
- c. West
- d. North

Q26. If 25, 35 and p are in continued proportion, then the value of p is

- a. 60
- b. 75
- c. 49
- d. 50

Q27. Which of the following arguments is strong?

Statement:

- Indian professionals working abroad should be called back to India.

Argument:

1. Yes, one must serve their motherland first and forget about earnings.
2. No, India has enough talented professionals.

- a. Only argument 2 is strong
- b. Neither 1 nor 2 is strong



RRB Group D

Railway Recruitment Board

RRB : Group-D Exam

- [NEW \(Notification\) RRB Group D Post Recruitment-2018](#)
- [NEW Railways Group-D Papers](#)
- [NEW Apply Online](#)
- [Eligibility](#)
- [Vacancy List \(Group-D\)](#)
- [Selection Method For Group D](#)
- [Syllabus for Group D](#)
- [RRB Group-D Exam Study Kit](#)
- [रेलवे भर्ती बोर्ड Group-D परीक्षा अध्ययन सामग्री](#)

CLICK HERE

**Disclaimer: rrbexamportal.com is not associated with Railway Recruitment Board,
For RRB official website visit - www.rrcb.gov.in**

**Disclaimer: RRB EXAM PORTAL वेबसाइट किसी भी प्रकार से रेलवे भर्ती बोर्ड (RRB) के साथ संबद्ध नहीं है,
रेलवे भर्ती बोर्ड एवं भारतीय रेलवे की आधिकारिक वेबसाइट पर जाने के लिए www.rrcb.gov.in पर विजिट करें।**

- c. Only argument 1 is strong
- d. Both 1 and 2 are strong

Q28. A statement followed by some conclusions are given below

Statement: Based on his performance, Rajesh got a poor rating in his office.

Conclusions:

- I. Rajesh did not perform well.
- II. The rating given to Rajesh was not up to the mark.

Find which of the given conclusions logically follow from the given statement.

- a. Only conclusion I follows
- b. Only conclusion II follow
- c. Both I and II follow
- d. Neither I nor II follows

Q29. 7, 20, 46, 98, 202,

- 420
- 410
- 380
- None of the above

Q30. If KNIFE is coded as MPKHG, then what does the code DTGCF stand for ?

- FVIEG
- FVIEH
- BREAD
- BRAED

Answer:-

- 1. (d) 2. (b) 3. (d) 4. (c) 5. (a) 6. (d) 7. (c) 8. (a) 9. (d) 10. (b)
- 11. (c) 12. (b) 13. (b) 14. (a) 15. (c) 16. (c) 17. (d) 18. (d) 19. (a)
- 20. (b) 21. (c) 22. (b) 23. (b) 24. (d) 25. (c) 26. (c) 27. (b)
- 28. (c) 29. (b) 30. (c)



RRB EXAMS PRINTED STUDY NOTES

Railway Recruitment Board (RRB) NTPC Exams Study Kit	English	CLICK HERE
रेलवे भर्ती बोर्ड एनटीपीसी (NTPC) परीक्षा अध्ययन सामग्री	हिन्दी	CLICK HERE
RRB Loco Pilot (ALP) Exam Study Kit	English	CLICK HERE
रेलवे भर्ती बोर्ड लोको पायलट (ALP) परीक्षा अध्ययन सामग्री	हिन्दी	CLICK HERE
RRB Group-D Exam Study Kit	English	CLICK HERE
रेलवे भर्ती बोर्ड Group-D परीक्षा अध्ययन सामग्री	हिन्दी	CLICK HERE
Study Kit for RRB JE (Junior Engineer) Exam	English	CLICK HERE
आरआरबी जूनियर इंजीनियर परीक्षा (चरण -1) अध्ययन किट	हिन्दी	CLICK HERE
IAS EXAMS STUDY MATERIALS		
Study Kit for IAS (Pre) GENERAL STUDIES Paper-1 (GS)	English	CLICK HERE
Study Kit for IAS (Pre) CSAT Paper-2(Aptitude)	English	CLICK HERE
सामान्य अध्ययन (GS) प्रारंभिक परीक्षा (Pre) पेपर-1	हिन्दी	CLICK HERE
आई. ए. एस. (सी-सैट) प्रारंभिक परीक्षा पेपर -2	हिन्दी	CLICK HERE
Gist of NCERT Study Kit For UPSC Exams	English	CLICK HERE