



RAILWAY RECRUITMENT BOARDS

रेलवे भर्ती बोर्ड

RRB NTPC 31st March 2016 Shift 2

Roll No:	
Participants Name:	
Test Center Name:	
Test Date:	31/03/2016
Test Time:	12:30 PM - 2:00 PM
Subject:	RRB NTPC Graduate

- Options shown in green color with a tick icon are correct
- Chosen option on top right of the question indicates the option selected by the candidate

Q.1 Bommy is the daughter of Indu's brother. Indu has one sister, Chanda and one brother, Gopal. How is Bommy related to Gopal?

- A. Sister
- B. Father
- C. Daughter
- D. Niece

Ans 1. C

2. D

3. B

4. A

Question ID : 2055231216

Status : Answered

Chosen Option : 1

Q.2 Find the missing (?) in the series

NA, QD, ? , WJ, ZM

- A. SF
- B. TG
- C. UH
- D. VI

Ans 1. B

2. A

3. D

4. C

Question ID : 2055231208

Status : Answered

Chosen Option : 1

Q.3 Three categories of employees get wages in the ratio of 1:2:3. If they get increments of 5%, 10% and 15% respectively, what will be the new ratio of their wages?

- A. 21:44:69
- B. 7:22:23
- C. 7:44:23
- D. 21:22:23

Ans 1. B

2. C

3. A

4. D

Question ID : 2055231183

Status : Answered

Chosen Option : 3

Q.4 Hindustan Socialist Republican Association was founded by

- A. Subhash Chandra Bose
- B. Vinayak Damodar Savarkar
- C. Jayaprakash Narayan
- D. Bhagat Singh

Ans 1. A

Question ID : 2055231142

Status : Answered

Chosen Option : 4

✓ 2. D

✗ 3. B

✗ 4. C

Q.5 Three freedom fighters including Bipin Chandra Pal were popularly known as Lal-Bal-Pal. Who were the other two?

- A. Subhash Chandra Bose & Bal Gangadhar Tilak
 B. Bal Gangadhar Tilak & Lala Lajpat Rai
 C. Lala Lajpat Rai & Bhagat Singh
 D. Ram Prasad Bismil & Bhikaji Cama

Ans ✗ 1. A

✓ 2. B

✗ 3. D

✗ 4. C

Question ID : 2055231143

Status : Answered

Chosen Option : 2

Q.6 The maximum number of columns in the new MS Excel worksheet is

- A. 2^8
 B. 2^{10}
 C. 2^{12}
 D. 2^9

Ans 1. C

2. A

3. D

4. B

Note: For this question, discrepancy is found in question/answer. So, This question is ignored for all candidates.

Question ID : 2055231166

Status : Not Attempted

Chosen Option : --

Q.7 The area of a circle is 616 sq.m. Find its diameter. ($\pi=22/7$)

- A. 7m
 B. 14m
 C. 28m
 D. 56m

Ans ✗ 1. D

✓ 2. C

✗ 3. A

✗ 4. B

Question ID : 2055231198

Status : Answered

Chosen Option : 2

Q.8 Find the median, mode and mean of 9, 5, 8, 9, 9, 7, 8, 9, 8.

- A. 9, 9, 9
 B. 9, 8, 9
 C. 8, 9, 8
 D. 8, 9, 9

Ans ✗ 1. D

✗ 2. A

✗ 3. B

✓ 4. C

Question ID : 2055231202

Status : Answered

Chosen Option : 4

Q.9 Which one of the following cities, is included in the first list of 20 proposed smart cities under the 'Smart Cities Mission' released by the Union Government in January 2016?

- A. Guwahati
 B. Mumbai
 C. Vadodara
 D. Kolkata

Ans ✗ 1. B

✓ 2. A

✗ 3. D

✗ 4. C

Question ID : 2055231136

Status : Not Attempted

Chosen Option : --

Q.10

Question ID : 2055231172

'Gallon' is commonly used

- A. To refer to speed.
- B. To refer to a container.
- C. As a measure of volume.
- D. To express containers in terms of barrel.

Ans 1.A
 2.B
 3.C
 4.D

Status : Answered
Chosen Option : 2

Q.11 Which one of the following countries does not have football as their national sport?

- A. Ghana
- B. Hungary
- C. Argentina
- D. Mauritius

Ans 1.A
 2.D
 3.C
 4.B

Question ID : 2055231144
Status : Not Attempted
Chosen Option : --

Q.12 Kurukshetra, the famous battle field mentioned in Mahabharata was located near

- A. Rawalpindi
- B. Meerut
- C. New Delhi
- D. Ambala City

Ans 1.B
 2.C
 3.D
 4.A

Question ID : 2055231154
Status : Not Attempted
Chosen Option : --

Q.13 How many millimeters make ten kilometers?

- A. 10^{10}
- B. 10^9
- C. 10^8
- D. 10^7

Ans 1.B
 2.A
 3.D
 4.C

Question ID : 2055231175
Status : Answered
Chosen Option : 3

Q.14 The most active ingredient in bleaching powder is

- A. Iodine
- B. Calcium hypochlorite
- C. Nitric acid
- D. Ammonium sulphate

Ans 1.C
 2.B
 3.A
 4.D

Question ID : 2055231158
Status : Answered
Chosen Option : 2

Q.15

Question ID : 2055231182
Status : Answered

The Central Government granted a certain sum towards flood relief to 3 states A, B, and C in the ratio 2:3:4. If C gets Rs. 400 Crores more than A, what is the share of B?

Chosen Option : 3

- A. Rs. 400 crore
- B. Rs. 200 crore
- C. Rs. 600 crore
- D. Rs. 300 crore

- Ans
- 1. A
 - 2. D
 - 3. C
 - 4. B

Q.16 Cricketer Virat Kohli was honoured with Arjuna Award in the year

- A. 2011
- B. 2012
- C. 2013
- D. 2014

Question ID : 2055231151

Status : Answered

Chosen Option : 2

- Ans
- 1. A
 - 2. D
 - 3. B
 - 4. C

Q.17 The instrument used to determine the rotation speed of a shaft is called

- A. Speedometer
- B. Tachometer
- C. Anemometer
- D. Chronometer

Question ID : 2055231162

Status : Answered

Chosen Option : 4

- Ans
- 1. D
 - 2. C
 - 3. A
 - 4. B

Q.18 Find the greatest length which can be used to measure exactly three cloth pieces of lengths 1.26 m, 1.98 m and 1.62 m respectively.

- A. 12 cm
- B. 14 cm
- C. 16 cm
- D. 18 cm

- Ans
- 1. D
 - 2. B
 - 3. C
 - 4. A

Question ID : 2055231181

Status : Answered

Chosen Option : 1

Q.19 Slave Dynasty was founded by

- A. Qutbuddin Aibak
- B. Mahmud Ghazni
- C. Muhammad Ghori
- D. Razia Sultana

Question ID : 2055231140

Status : Answered

Chosen Option : 3

- Ans
- 1. C
 - 2. B
 - 3. A
 - 4. D

Q.20 Exobiology refers to

- A. Life in outer space.
- B. Life of animals.
- C. Life of plants.
- D. Life of human beings on earth.

Question ID : 2055231169

Status : Answered

Chosen Option : 1

- Ans 1. A
 2. B
 3. D
 4. C

Q.21 A call center recruits candidates with the following criteria—
 1. Candidates should have passed at least 10th standard.
 2. Candidates must be fluent in English and Hindi.
 3. Candidates must be ready to work in both day and night shifts.
 Which candidate among the following will the call center definitely take?

- A. Seeta is a graduate, fluent in Marathi, Hindi and English and can work only in day shift.
 B. Sarita is fluent in English, Tamil and Hindi, can work in both shifts and has had no formal education.
 C. Smita speaks English and Hindi very well, is ready for day as well as night shifts and has studied till 12th standard.
 D. Savita can work in both shifts, has passed 10th standard with 65% and speaks fluent Hindi and Marathi.

- Ans 1. C
 2. A
 3. B
 4. D

Question ID : 2055231234

Status : Answered

Chosen Option : 1

Q.22 What will be the maturity value, if Rs. 13,500 is deposited at a simple rate of interest of 12.5% for two years?

- A. Rs. 15,187.50
 B. Rs. 16,875.00
 C. Rs. 16,875.50
 D. Rs. 16,785.00

- Ans 1. A
 2. C
 3. B
 4. D

Question ID : 2055231189

Status : Answered

Chosen Option : 3

Q.23 Study of earth is known as

- A. Ecology
 B. Biology
 C. Ethology
 D. Geology

- Ans 1. C
 2. B
 3. D
 4. A

Question ID : 2055231173

Status : Answered

Chosen Option : 3

Q.24 School W in a village, provides education from nursery to standard 4. In the same village, School B and school K provide education from standard 5 to 10. School F, which is in a nearby town, provides higher secondary education, that is, standard 11th and 12th only. The village has only three schools. Parents in the village have requested for more schools to the local panchayat.

Which conclusion follows the given statements?

- A. Schools are less in the village because parents do not want their children to study.
 B. Due to lack of teachers, village schools cannot compete with town schools.
 C. For higher secondary education, children of the village have to travel to the nearby town.
 D. Parents will send their kids to town, if school F provides primary education too.

- Ans 1. B
 2. C
 3. A
 4. D

Question ID : 2055231236

Status : Answered

Chosen Option : 2

Q.25 The difference between the ages of mother and son was 21 when mother's age was 43. If father is elder by 3 years to mother, what will be the difference between the ages of son and father when father attains 50 years?

- A. 21
 B. 22
 C. 23
 D. 24

- Ans 1. D
 2. C
 3. B
 4. A



Question ID : 2055231174

Status : Answered

Chosen Option : 1

Q.26 A shop keeper purchased 15 kg of sugar and 20 kg of wheat at Rs. 50 and Rs. 75 per kg respectively. On selling them, he gained 10% on sugar and 20% on wheat. What was the total sale value?

- A. Rs. 2,550
- B. Rs. 2,625
- C. Rs. 1,800
- D. Rs. 1,575

Ans  1. D
 2. A
 3. C
 4. B

Question ID : 2055231190

Status : Answered

Chosen Option : 4

Q.27 Select the alternative that shows a different relationship as the given pair -

Crude : Raw

- A. Isolation : Separation
- B. Distinguished : August
- C. Assert : Hide
- D. Stop : Conclude

Ans  1. C
 2. B
 3. A
 4. D



Question ID : 2055231213

Status : Not Attempted

Chosen Option : --

Q.28 X can finish 25% of a work in a day. Y can do 12.5% of the same work in a day. In how many days, will both of them finish the work together?

- A. 2.67 days
- B. 2.33 days
- C. 3.33 days
- D. 3.67 days

Ans  1. A
 2. D
 3. B
 4. C


Question ID : 2055231185

Status : Answered

Chosen Option : 1

Q.29 If $x + 2y = 27$ and $x - 2y = -1$, find the value of y.

- A. 13
- B. 14
- C. 7
- D. 26

Ans  1. B
 2. C
 3. A
 4. D



Question ID : 2055231195

Status : Answered

Chosen Option : 2

Q.30 When did Bangladesh become an independent parliamentary democracy?

- A. December, 1971
- B. January, 1972
- C. March, 1972
- D. February, 1972

Ans  1. C
 2. A
 3. D
 4. B

Question ID : 2055231139

Status : Not Attempted

Chosen Option : --


Q.31

Question ID : 2055231179

Status : Answered

Chosen Option : 2

RRB NTPC EXAM Study Kit



- ▶ 100% Exam Syllabus Covered
- ▶ 4 Books, 950+ Pages
- ▶ Mathematics, General Intelligence & Reasoning,
- ▶ General Science, General Awareness
- ▶ Previous year Solved Papers
- ▶ Mock Tests with Answers
- ▶ 1 Year Current Affairs



₹ 6,000/-
₹ 1,999/-
Only

For RRB Exam Courses & Study Materials Call Us at: +91-8800734161

What you will get:

- 100% Syllabus Covered in printed format.
- 4 Booklets
 - General Intelligence & Reasoning
 - General Awareness
 - Arithmetic
 - General Science
- 950+ Pages
- One Year Current Affairs (PDF Copy)
- Guidance & Support from Our Experts

Price of the Kit:

Rs. 6,000

Rs. 1,999/-
(Limited time Offer)



Net Banking

Order Online (100% Safe)

अन्य भुगतान विकल्प (Offline Payment Options)

**50%
OFF**

CLICK HERE

**Disclaimer: rrbexamportal.com is not associated with Railway Recruitment Board,
For RRB official website visit - www.rrcb.gov.in**


Find the smallest of the following decimals.

- A. $0.2 \times 0.2 \times 0.2$
- B. $0.02 / 3$
- C. $0.01 / 2$
- D. $0.1 \times 0.02 \times 2$

Ans  1. C
 2. A
 3. D
 4. B

Q.32 Find the range of the data 2, 1, 2, 3, 5, 4, 7, 3, 5, 2, 4.

- A. 5
- B. 4
- C. 3
- D. 6

Ans  1. D
 2. A
 3. B
 4. C

Question ID : 2055231201

Status : Answered

Chosen Option : 4

Q.33 A person with blood group AB

- A. Can donate blood to persons with blood group A, B and O.
- B. Is called universal blood donor.
- C. Can receive blood from any group.
- D. Is neither a universal recipient nor a donor.

Ans  1. B
 2. D
 3. C
 4. A



Question ID : 2055231164

Status : Answered

Chosen Option : 3

Q.34 You purchased two pieces of cloth measuring 1.2 m and 1.3 m each at Rs. 330 and Rs. 270 per meter respectively and gave Rs. 1000 at the payment counter. How much cash will you get back?

- A. Rs. 253
- B. Rs. 604
- C. Rs. 649
- D. Rs. 235

Ans  1. A
 2. D
 3. B
 4. C

Question ID : 2055231176

Status : Answered

Chosen Option : 1

Q.35 Which one of the following does not belong to the group?

- A. Android
- B. BADA
- C. DOS
- D. Symbian

Ans  1. C
 2. D
 3. A
 4. B

Question ID : 2055231168

Status : Answered

Chosen Option : 1

Q.36

Question ID : 2055231163

Status : Answered

Find the odd one out among the following.

Chosen Option : 1

- A. ECS
- B. RTGS
- C. NEFT
- D. EMI

Ans  1. D 2. C 3. B 4. A

Q.37 What is the difference between the maturity values, if Rs. 12,500 is invested for 2 years at 20% per annum simple interest and compound interest?

- A. Rs. 750
- B. Rs. 650
- C. Rs. 550
- D. Rs. 500

Ans  1. C 2. D 3. A 4. B

Question ID : 2055231188

Status : Answered

Chosen Option : 2

Q.38 Under the Indian Constitution, legislative powers are vested with the

- A. President
- B. Prime Minister
- C. Union Council of Ministers
- D. Parliament

Ans  1. C 2. A 3. B 4. D

Question ID : 2055231149

Status : Answered

Chosen Option : 4

Q.39 When a person can see only nearby objects, the condition is called

- A. Hypermetropia
- B. Astigmatism
- C. Myopia
- D. Retinopathy

Ans  1. D 2. A 3. C 4. B

Question ID : 2055231159

Status : Answered

Chosen Option : 3

Q.40 The speed of car B is half the speed of car A. If car A covers a distance of 120 km in $1\frac{1}{2}$ hours, what is the speed of car B?

- A. 40 kmph
- B. 60 kmph
- C. 30 kmph
- D. 50 kmph

Ans  1. C 2. B 3. A 4. D

Question ID : 2055231187

Status : Answered

Chosen Option : 3

Q.41 If SWEET is written as XAHGU, then HORSE is

- A. MSUVF
- B. MTVUF
- C. MTVUD
- D. MSUUF

Question ID : 2055231207

Status : Answered

Chosen Option : 1

- Ans  1. D
 2. A
 3. C
 4. B

Comprehension:

Five people P, Q, R, S and T visit an office on certain days of a week. They work as a plumber, carpenter, cook, electrician and doctor in random order. A person pursues only one profession and visits the office only one day in the week. Consider the following information and answer questions based on it.

1. The plumber visits office every Monday.
2. P is an electrician who comes neither on Tuesday nor Thursday.
3. T is a carpenter and R is not plumber.
4. The person who visits the office on Thursday is not a doctor.
5. S works on a Tuesday and T works on the following day.

SubQuestion No : 42

Q.4
2 Which is the right combination?

- A. Monday – Electrician
 B. Thursday – Cook
 C. Tuesday – Carpenter
 D. Friday – Doctor

Question ID : 2055231222

Status : Not Attempted

Chosen Option : --

- Ans  1. A
 2. D
 3. C
 4. B

Comprehension:

Five people P, Q, R, S and T visit an office on certain days of a week. They work as a plumber, carpenter, cook, electrician and doctor in random order. A person pursues only one profession and visits the office only one day in the week. Consider the following information and answer questions based on it.

1. The plumber visits office every Monday.
2. P is an electrician who comes neither on Tuesday nor Thursday.
3. T is a carpenter and R is not plumber.
4. The person who visits the office on Thursday is not a doctor.
5. S works on a Tuesday and T works on the following day.

SubQuestion No : 43

Q.4
3 The doctor visits the office on

- A. Fridays
 B. Wednesdays
 C. Thursdays
 D. Tuesdays

Question ID : 2055231220

Status : Not Attempted

Chosen Option : --

- Ans  1. C
 2. A
 3. D
 4. B

Comprehension:

Five people P, Q, R, S and T visit an office on certain days of a week. They work as a plumber, carpenter, cook, electrician and doctor in random order. A person pursues only one profession and visits the office only one day in the week. Consider the following information and answer questions based on it.

1. The plumber visits office every Monday.
2. P is an electrician who comes neither on Tuesday nor Thursday.
3. T is a carpenter and R is not plumber.
4. The person who visits the office on Thursday is not a doctor.
5. S works on a Tuesday and T works on the following day.

SubQuestion No : 44

Q.4 Who is the plumber?

- A. Q
- B. S
- C. R
- D. T

Ans  1. A

 2. C

 3. B

 4. D

Question ID : 2055231221

Status : Not Attempted

Chosen Option : --

Q.45 An assertion (A) and a reason (R) are given below.

Assertion (A): Mangoes are sweet when they are ripe.

Reason (R): Mangoes are available mainly in summer in India.

Choose the correct option.

- A. Both A and R are true and R is the correct explanation of A
- B. Both A and R are true, but R is not the correct explanation of A
- C. A is true, but R is false
- D. A is false, but R is true

Ans  1. B

 2. D

 3. C

 4. A

Question ID : 2055231235

Status : Answered

Chosen Option : 1

Q.46 Statements followed by some conclusions are given below.

Statements:

1. Sam sleeps more than Ram who sleeps only for 5 hours every day.
2. Shyam sleeps for 8 hours which is lesser than Sam's by 2.

Conclusions:

- I. Sam sleeps for 6 hours.
- II. Ram has a bad sleeping habit.

Find which of the given conclusions logically follows from the given statements.

- A. Only conclusion I follows.
- B. Only conclusion II follows.
- C. Both I and II follow.
- D. Neither I nor II follows.

Ans  1. A

 2. D

 3. C

 4. B

Question ID : 2055231223

Status : Answered

Chosen Option : 4

Q.47 What number, from the following, should be deducted from 1184 to make it exactly divisible by 21?

- A. 15
- B. 12
- C. 8
- D. 7

Ans  1. D

 2. C

 3. A

Question ID : 2055231177

Status : Answered

Chosen Option : 2

✗ 4. B

Q.48 A rectangular playground ground of length 125m and width 75m, has a walking strip of width 3m in the middle of the ground, along the longer side. What is the area of the ground without the walking strip?

- A. 9375 sq.m
B. 9000 sq.m
C. 9750 sq.m
D. 8625 sq.m

Ans ✗ 1. C

✗ 2. D

✗ 3. A

✓ 4. B

Question ID : 2055231197

Status : Answered

Chosen Option : 4

Q.49 Cultivation is difficult on red soil because

- A. Its water holding capacity is less.
B. It is highly contaminated.
C. Biological components do not mix with it.
D. It is red in colour.

Ans ✗ 1. D

✗ 2. C

✓ 3. A

✗ 4. B

Question ID : 2055231138

Status : Answered

Chosen Option : 3

Q.50 The United Nations Development Programme (UNDP) focusses on

- A. Solutions to global development challenges.
B. Developing nations.
C. Under-developed nations.
D. Developed nations.

Ans ✓ 1. A

✗ 2. C

✗ 3. B

✗ 4. D

Question ID : 2055231147

Status : Answered

Chosen Option : 1

Q.51 If Sun : Star then Moon : _____

- A. Star
B. Planet
C. Comet
D. Satellite

Ans ✗ 1. B

✗ 2. C

✓ 3. D

✗ 4. A

Question ID : 2055231212

Status : Answered

Chosen Option : 3

Q.52 Find the missing number (?) in the series

1, 1, 4, 8, 9, ?, 16, 64.....

- A. 21
B. 23
C. 25
D. 27

Ans ✗ 1. A

✗ 2. C

✗ 3. B

Question ID : 2055231209

Status : Answered

Chosen Option : 4

✓ 4.D

Q.53 Find the HCF of 48, 92 and 140.

- A. 8
B. 6
C. 4
D. 3

Ans ✗ 1.B
✗ 2.A
✗ 3.D
✓ 4.C

Question ID : 2055231180

Status : Answered

Chosen Option : 4

Q.54 If mathematical operators '-' and '+' are interchanged, then the value of

$$15 \times 4 + 15 - 11 \times 33 \div 98 \text{ is}$$

- A. 6
B. 7
C. 8
D. 9

Ans ✓ 1.B
✗ 2.C
✗ 3.D
✗ 4.A

Question ID : 2055231211

Status : Answered

Chosen Option : 1

Q.55 The standard deviation of the set {10, 11, 12, 9, 8} is

- A. 1
B. $\sqrt{2}$
C. 2
D. $2\sqrt{2}$

Ans ✗ 1.A
✗ 2.C
✗ 3.D
✓ 4.B

Question ID : 2055231203

Status : Not Attempted

Chosen Option : --

Q.56 Looking at a lady, Joey said, "She is the mother of my mother's mother-in-law's husband". How is the lady related to Joey's father?

- A. Mother
B. Aunt
C. Mother-in-law
D. Grandmother

Ans ✓ 1.D
✗ 2.B
✗ 3.C
✗ 4.A

Question ID : 2055231217

Status : Answered

Chosen Option : 1

Q.57 One Gigabyte =? (in decimal value)

- A. 1000 bytes
B. 1000^2 bytes
C. 1000^3 bytes
D. 1000^4 bytes

Ans ✗ 1.B
✗ 2.A
✓ 3.C
✗ 4.D

Question ID : 2055231167

Status : Not Attempted

Chosen Option : --



**रेलवे भर्ती बोर्ड (आरआरबी)
परीक्षा अध्ययन सामग्री**

- 100% Syllabus Covered
- 4 Comprehensive Books
- 1000 Pages
- Current Affairs (PDF)
- Practice MCQs
- Support and Guidance

Only
~~₹6,000/-~~
₹1,995/-
70% Off



www.rrbportal.com

प्रिय अभ्यर्थियों,

आज इस गलाकाट प्रतिस्पर्धा के दौर में, हर जगह, हर क्षेत्र में मारामारी है। बात अगर सरकारी नौकरी की हो तो प्रतिस्पर्धा और भी कड़ी हो जाती है। जैसा की आप सभी जानते हैं RRBPORTAL विगत वर्षों से आप सबों को अंग्रेजी माध्यम में एक समग्र पाठ्यक्रम एवं मार्गदर्शन उपलब्ध करा रहा है। हमारे अध्ययन सामग्री की सफलता की दर करीब 70% है। विगत कुछ वर्षों की सरकारी विज्ञप्तियों (VACANCIES) पर नजर डालें तो आप देखेंगे की सर्वाधिक संख्या Railway के विज्ञप्तियों की है, और उसी अनुपात में भीड़ भी।

मित्रों इस परीक्षा में अंग्रेजी एवं हिंदी माध्यम के छात्र लगभग समान संख्या में सम्मिलित होते हैं, लेकिन हिंदी माध्यम से तैयारी करने वाले छात्रों के साथ सबसे बड़ी समस्या विश्वसनीय अध्ययन सामग्री एवं सही मार्गदर्शन की है।

आपकी इन्हीं समस्याओं और मांग को विचार में रखकर हमने नववर्ष में आपको हिंदी माध्यम में रेलवे भर्ती बोर्ड (आरआरबी), अध्ययन सामग्री उपलब्ध कराने का निर्णय लिया है। मित्रों हमने इस बात का पूरा ध्यान रखा है की आपको पाठ्यक्रम के अनुसार सारी चीजें एक जगह मिलें। हमने व्यवस्थित तरीके से लगभग 800पृष्ठों में इस अध्ययन सामग्री को परीक्षोपयोगी बनाया है।

आप क्या प्राप्त करेंगे?

- माध्यम: हिन्दी
- 100 प्रतिशत पाठ्यक्रम
- 838 पृष्ठ
- कुल 6 पुस्तिकायें
- Guidance & Support from Our Experts

Price of the Kit:

Rs. 4,000

Rs. 1,995/-
(Limited time Offer)



Order Online (100% Safe)

अन्य भुगतान विकल्प (Offline Payment Options)

**50%
OFF**

CLICK HERE

Disclaimer: RRB EXAM PORTAL वेबसाइट किसी भी प्रकार से रेलवे भर्ती बोर्ड (RRB) के साथ संबद्ध नहीं है, रेलवे भर्ती बोर्ड एवं भारतीय रेलवे की आधिकारिक वेबसाइट पर जाने के लिए www.rrcb.gov.in पर विजिट करें।

Q.58 The annual award of 'Gandhi Peace Prize' is given to

- A. Individuals only
- B. Institutions only
- C. Individuals and institutions
- D. Group of institutions

Question ID : 2055231134

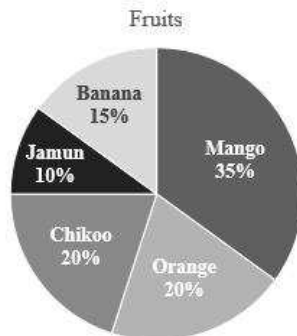
Status : Not Attempted

Chosen Option : --

- Ans
- 1. B
 - 2. D
 - 3. A
 - 4. C

Comprehension:

The following pie chart shows fruit tree distribution in a farm land. Consider the chart and answer questions based on it.



SubQuestion No : 59

Q.59 The sector angle corresponding to the Banana is

- A. 90°
- B. 54°
- C. 72°
- D. 36°

Question ID : 2055231233

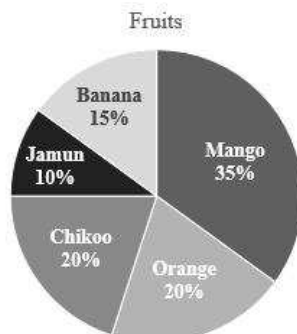
Status : Answered

Chosen Option : 2

- Ans
- 1. D
 - 2. B
 - 3. A
 - 4. C

Comprehension:

The following pie chart shows fruit tree distribution in a farm land. Consider the chart and answer questions based on it.



SubQuestion No : 60

Q.60 What is the ratio of Chikoo and Mango trees to that of Jamun, Orange and Banana trees in the farm land?

- A. 1
- B. 1:3
- C. 11:9
- D. 3:1

Question ID : 2055231231

Status : Answered

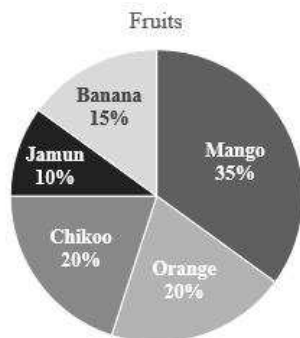
Chosen Option : 2

- Ans
- 1. A
 - 2. C
 - 3. B

✗ 4.D

Comprehension:

The following pie chart shows fruit tree distribution in a farm land. Consider the chart and answer questions based on it.



SubQuestion No : 61

Q.6 If there are in all 960 trees, then how many of them are Mango trees?

1

- A. 192
- B. 288
- C. 384
- D. 336

Ans ✗ 1. C
✗ 2. B
✗ 3. A
✓ 4. D

Question ID : 2055231232

Status : Answered

Chosen Option : 4

Q.62 The concept of Triratna belonged to

- A. Sikhism
- B. Jainism
- C. Buddhism
- D. Zoroastrianism

Ans 1. A
2. B
3. C
4. D

Note: For this question, discrepancy is found in question/answer. So, This question is ignored for all candidates.

Question ID : 2055231141

Status : Answered

Chosen Option : 2

Q.63 What is meant by space tourism?

- A. Scientific space exploration.
- B. Space travel for leisure.
- C. Touring the world only by flight.
- D. Reaching out to Mars.

Ans ✗ 1. D
✗ 2. A
✗ 3. C
✓ 4. B

Question ID : 2055231170

Status : Not Attempted

Chosen Option : --

Q.64 Which country among the following is the smallest in terms of area?

- A. Brazil
- B. India
- C. Canada
- D. Russia

Ans ✓ 1. B
✗ 2. D

Question ID : 2055231153

Status : Answered

Chosen Option : 4

~~X~~ 3. C~~X~~ 4. A**Q.65** Why does a piece of cloth, which appears green in sunlight, appear black when it is viewed under red light?

- A. The cloth completely absorbs red colour wavelength.
 B. It is due to refraction.
 C. It is the effect of scattering of light.
 D. It is due to parallax error.

Ans ~~X~~ 1. D~~X~~ 2. B

✓ 3. A

~~X~~ 4. C

Question ID : 2055231155

Status : Not Attempted

Chosen Option : --

Q.66 A is D's brother. D is the son of Mrs. C. B is Mrs. C's father. How is A related to B?

- A. Grandson
 B. Brother
 C. Son
 D. Grandfather

Ans ~~X~~ 1. B~~X~~ 2. D

✓ 3. A

~~X~~ 4. C

Question ID : 2055231218

Status : Answered

Chosen Option : 3

Q.67 If S means '+', L means '×', U means '÷' and K means '-', then the value of

21 S 1 U 7 L 15 U 6 L 14 K 55 is

- A. -50
 B. 26
 C. -29
 D. 29

Ans ~~X~~ 1. D~~X~~ 2. A

✓ 3. C

~~X~~ 4. B

Question ID : 2055231210

Status : Answered

Chosen Option : 3

Q.68 In a certain coding language, 'Ginger is a root' is written as 4123, 'A tree has a root' is 75422 and 'Tree is green' is 385. Which digit represents 'root'?

- A. 4
 B. 5
 C. 3
 D. 2

Ans ~~X~~ 1. B~~X~~ 2. D

✓ 3. A

~~X~~ 4. C

Question ID : 2055231204

Status : Answered

Chosen Option : 3

Q.69 Hirakud reservoir is built across the river

- A. Sutlej
 B. Godavari
 C. Mahanadi
 D. Narmada

Ans ~~X~~ 1. B

✓ 2. C

~~X~~ 3. D~~X~~ 4. A

Question ID : 2055231137

Status : Answered

Chosen Option : 2

Q.70 Which of the following authority is elected on the basis of proportional representation in India?

- A. Prime Minister
 B. President
 C. Governor
 D. Lok Sabha Speaker

Question ID : 2055231150

Status : Not Attempted

Chosen Option : --

- Ans 1. D
 2. C
 3. A
 4. B

Q.71 How many players, on each side, are required for the game of volleyball?

- A. 6
 B. 8
 C. 5
 D. 7

Question ID : 2055231146

Status : Answered

Chosen Option : 4

- Ans 1. C
 2. B
 3. D
 4. A

Q.72 A man traveled at 40 kmph. Had he increased his speed by 16 kmph, he would have covered 80 km more in the same time. Find the actual distance travelled?

- A. 40 km
 B. 20 km
 C. 30 km
 D. 48 km

Question ID : 2055231186

Status : Not Attempted

Chosen Option : --

- Ans 1. D
 2. B
 3. C
 4. A

Q.73 AC is converted into DC by a

- A. Condenser
 B. Rectifier
 C. Amplifier
 D. Filter

Question ID : 2055231156

Status : Answered

Chosen Option : 1

- Ans 1. C
 2. B
 3. D
 4. A

Q.74 Which one among the following does not belong to the group?

- A. Maestro
 B. Visa
 C. Master
 D. Credit Card

Question ID : 2055231161

Status : Answered

Chosen Option : 4

- Ans 1. B
 2. C
 3. A
 4. D

Q.75 Statements followed by some conclusions are given below.

Statements:

- Smoking is injurious to health and one of the causes of cancer.
- Government has prohibited smoking in public places.

Conclusions:

- Smoking causes cancer.
- Sale of cigarette should be banned.

Find which of the given conclusions logically follows from the given statements.

- A. Only conclusion I follows.
 B. Only conclusion II follows.
 C. Both I and II follow.
 D. Neither I nor II follows.

Question ID : 2055231224

Status : Not Attempted

Chosen Option : --

- Ans  1.D
 2.A
 3.C
 4.B

Q.76 In which quadrant, will the point (4, -2) be located?

- A. I
 B. II
 C. III
 D. IV

Question ID : 2055231196

Status : Answered

Chosen Option : 3

- Ans  1.C
 2.A
 3.D
 4.B

Q.77 If SELFIE = LXKEYBX, then PHYSICS = _____

- A. IARLBVL
 B. IARLBJL
 C. IARBLJL
 D. IARBLVL

Question ID : 2055231206

Status : Not Attempted

Chosen Option : --

- Ans  1.D
 2.B
 3.A
 4.C

Q.78 Four pairs of words are given. Find the odd one out.

- A. Horse : Calf
 B. Deer : Fawn
 C. Fish : Fry
 D. Goat : Kid

Question ID : 2055231214

Status : Not Attempted

Chosen Option : --

- Ans  1.A
 2.B
 3.C
 4.D

Q.79 Rearrange the jumbled letters to make a meaningful word and then select the one which is different.

- A. OENS
 B. KWLA
 C. ALIN
 D. EDAH

Question ID : 2055231225

Status : Answered

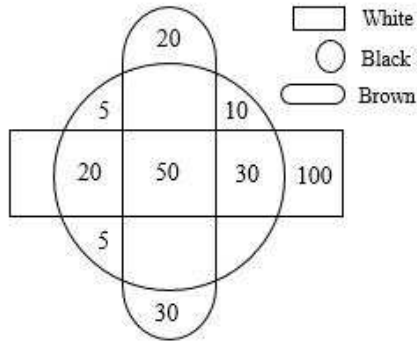
Chosen Option : 4

- Ans  1.A
 2.D
 3.B
 4.C

Comprehension:

Study the following diagram and answer questions based on it.

The colour preferences of children are given.



SubQuestion No : 80

Q.8 How many children like both brown and white but not black?

0

- A. 10
- B. 20
- C. 50
- D. None

Question ID : 2055231228

Status : Answered

Chosen Option : 1

Ans ✓ 1. D

✗ 2. C

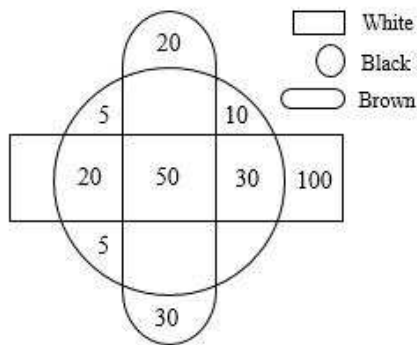
✗ 3. A

✗ 4. B

Comprehension:

Study the following diagram and answer questions based on it.

The colour preferences of children are given.



SubQuestion No : 81

Q.8 The ratio of children who like brown to those who like black is

1

- A. 5/3
- B. 1/2
- C. 1
- D. 5/6

Question ID : 2055231227

Status : Answered

Chosen Option : 1

Ans ✓ 1. D

✗ 2. C

✗ 3. B

✗ 4. A

Comprehension:



RRB NTPC

Railway Recruitment Board

RRB NTPC (Tier -1 & Tier -2) Exam

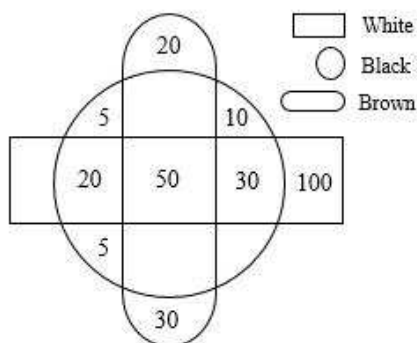
- [RRB NTPC \(Tier -1\) Exam](#)
- [RRB NTPC \(Tier -2\) Exam](#)
- [Exam PAPERS](#)
- [Exam Syllabus](#)
- [Eligibility](#)
- [Medical Fitness](#)
- [RRB Post Preference & Zones List](#)
- [परीक्षा सिलेबस "Exam Syllabus in Hindi"](#)
- [Printed Study Material \(English Medium\)](#)
- [RRB NTPC Exam for Aptitude Test](#)
- [RRB NTPC Exam for Typing Skill Test](#)

[CLICK HERE](#)

Disclaimer: rrbexamportal.com is not associated with Railway Recruitment Board,
For RRB official website visit - www.rrcb.gov.in

Study the following diagram and answer questions based on it.

The colour preferences of children are given.



SubQuestion No : 82

Q.8 The ratio of kids who do not like black to those who like only black and white are

- 2
- A. 3:1
 - B. 3:2
 - C. 12:5
 - D. 5:12

Ans 1. C
 2. A
 3. B
 4. D

Question ID : 2055231229

Status : Answered

Chosen Option : 3

Q.83 'Grand Slam' refers to winning certain major tennis tournaments in a single calendar year. The name of the tournaments are

- A. Australian Open, French Open and US Open
- B. Australian Open, French Open, US Open and Wimbledon
- C. French Open, US Open and Wimbledon
- D. French Open, US Open, Wimbledon and Olympic

Ans 1. D
 2. C
 3. B
 4. A

Question ID : 2055231145

Status : Answered

Chosen Option : 3

Q.84 Find the value of $x^3(x^3 - x^2 - x)$, when $x = 4$.

- A. 2816
- B. 3328
- C. 2516
- D. 3332

Ans 1. A
 2. B
 3. C
 4. D

Question ID : 2055231193

Status : Answered

Chosen Option : 2

Q.85 With effect from 1st April 2010, banks have been allowing interest on saving account balance on

- A. Annual basis
- B. Half yearly basis
- C. Quarterly basis
- D. Daily basis

Ans 1. A
 2. C
 3. D
 4. B

Question ID : 2055231135

Status : Answered

Chosen Option : 3

Q.86

Question ID : 2055231178

$97 \times 97 = ?$

- A. 9391
- B. 9409
- C. 9049
- D. 9309

Ans  1. C
 2. B
 3. D
 4. A

Status : Answered
 Chosen Option : 2

Q.87 Which of the following statement is true?



- A. Global warming and climate change are two different issues.
- B. Global warming will reduce the annual build-up of glacier ice.
- C. Global warming may cause sea levels to go down.
- D. Global warming may cause contraction of deserts.

Ans  1. B
 2. A
 3. D
 4. C

Question ID : 2055231148
 Status : Answered
 Chosen Option : 1

Q.88 Which of the following books was NOT written by Dr. A. P. J. Abdul Kalam?

- A. The Scientific Indian
- B. Envisioning an Empowered Nation
- C. My Country, My Life
- D. Ignited Minds

Ans  1. C
 2. A
 3. D
 4. B

Question ID : 2055231152
 Status : Not Attempted
 Chosen Option : --

Q.89 The value of $\cos(1110^\circ)$ is



- A. $\sqrt{3}/2$
- B. $1/2$
- C. $1/\sqrt{2}$
- D. 1

Ans  1. C
 2. D
 3. B
 4. A

Question ID : 2055231200
 Status : Not Attempted
 Chosen Option : --

Q.90 If $\sin\theta = 2/3$, find the value of $\sec\theta$ and $\cot\theta$.

- A. $\sqrt{5}/2, 2/\sqrt{5}$
- B. $2/\sqrt{5}, 3/5$
- C. $3\sqrt{5}/5, \sqrt{5}/2$
- D. $3/5, 3\sqrt{5}/5$

Ans  1. B
 2. A
 3. D
 4. C

Question ID : 2055231199
 Status : Answered
 Chosen Option : 4

Q.91

ZIKA virus which damages the brain of the foetus is

- A. Mosquito borne
- B. Water borne
- C. Air borne
- D. Food borne

Ans 1. A
 2. B
 3. C
 4. D

Question ID : 2055231160

Status : Answered

Chosen Option : 1

Q.92 Simplify: $(x^5 \div x^4)^3 \div x$

- A. x^3
- B. x^2
- C. x
- D. x^{-1}

Ans 1. D
 2. A
 3. B
 4. C

Question ID : 2055231194

Status : Answered

Chosen Option : 3

Q.93 An article was sold for Rs. 2,400 at a discount of 20%. Find the selling price, if the discount was 25%.

- A. Rs. 2,250
- B. Rs. 2,000
- C. Rs. 1,800
- D. Rs. 2,150

Ans 1. C
 2. A
 3. D
 4. B

Question ID : 2055231191

Status : Answered

Chosen Option : 2

Q.94 In a certain code, 134 is AGE and 92706 is INERT. What is 016923?

- A. EATING
- B. RANGER
- C. RATING
- D. GINGER

Ans 1. C
 2. B
 3. D
 4. A

Question ID : 2055231205

Status : Answered

Chosen Option : 1

Q.95 The name of the space shuttle, which carried the Indian born Kalpana Chawla into space was

- A. Columbia
- B. Challenger
- C. Atlantis
- D. Endeavour

Ans 1. C
 2. D
 3. B
 4. A

Question ID : 2055231171

Status : Answered

Chosen Option : 4

Q.96

Question ID : 2055231215

Status : Answered

Chosen Option : 2

Find the similarity in the following:

Carbon, Silicon, Boron, Arsenic

- A. All of them are gases.
- B. All of them are non-metals.
- C. All of them are metals.
- D. No similarity.

Ans 1. C
 2. B
 3. A
 4. D

Q.97 A tank can be filled in 30 minutes. There is a leakage which can empty the tank in 90 minutes. Therefore, the tank will be filled in

- A. 60 minutes
- B. 45 minutes
- C. 55 minutes
- D. 50 minutes

Ans 1. C
 2. B
 3. D
 4. A

Question ID : 2055231184

Status : Answered

Chosen Option : 2

Q.98 Prostate in human body is a

- A. Connective tissue
- B. Gland
- C. Membrane
- D. Muscle

Ans 1. D
 2. A
 3. B
 4. C

Question ID : 2055231165

Status : Answered

Chosen Option : 3

Q.99 A product was sold for Rs. 4,500 at a profit of 12.5%. What was the amount of profit?

- A. Rs. 125
- B. Rs. 250
- C. Rs. 500
- D. Rs. 300

Ans 1. A
 2. B
 3. C
 4. D

Question ID : 2055231192

Status : Answered

Chosen Option : 3

Q.10 Find the odd one out.

- A. NaCl
- B. Na₂CO₃
- C. H₂O
- D. He

Ans 1. A
 2. D
 3. B
 4. C

Question ID : 2055231157

Status : Answered

Chosen Option : 2



Railway Recruitment Board (RRB) NTPC Exams Study Kit	English	CLICK HERE
रेलवे भर्ती बोर्ड एनटीपीसी (NTPC) परीक्षा अध्ययन सामग्री	हिन्दी	CLICK HERE
RRB Loco Pilot (ALP) Exam Study Kit	English	CLICK HERE
रेलवे भर्ती बोर्ड लोको पायलट (ALP) परीक्षा अध्ययन सामग्री	हिन्दी	CLICK HERE
RRB Group-D Exam Study Kit	English	CLICK HERE
रेलवे भर्ती बोर्ड Group-D परीक्षा अध्ययन सामग्री	हिन्दी	CLICK HERE
Study Kit for RRB JE (Junior Engineer) Exam	English	CLICK HERE
आरआरबी जूनियर इंजीनियर परीक्षा (चरण -1) अध्ययन किट	हिन्दी	CLICK HERE
IAS EXAMS STUDY MATERIALS		
Study Kit for IAS (Pre) GENERAL STUDIES Paper-1 (GS)	English	CLICK HERE
Study Kit for IAS (Pre) CSAT Paper-2(Aptitude)	English	CLICK HERE
सामान्य अध्ययन (GS) प्रारंभिक परीक्षा (Pre) पेपर-1	हिन्दी	CLICK HERE
आई. ए. एस. (सी-सैट) प्रारंभिक परीक्षा पेपर -2	हिन्दी	CLICK HERE
Gist of NCERT Study Kit For UPSC Exams	English	CLICK HERE